



Mesurez la largeur de chaque barre en centimètres.

Ex)



Réponses

Ex. 1 2-3

1)



1. _____

2)




2. _____

3)



3. _____

4)



4. _____

5)




5. _____

6)



6. _____

7)




7. _____

8)



8. _____


9)



9. _____



Mesurez la largeur de chaque barre en centimètres.



Réponses

Ex. 1 2 - 3

1. 3 1/2 8 - 9

2. 5 1/2 13 - 14

3. 5 12 - 13

4. 4 1/2 11 - 12

5. 1 1/2 3 - 4

6. 4 10 - 11

7. 2 5 - 6

8. 3 7 - 8

9. 0 1/2 1 - 2