





Mesurez la largeur de chaque barre en centimètres.



Réponses

Ex. 5 1/2 13 - 14

1. _____

2. _____

3. _____

4. _____

5. _____

6. _____


7. _____

8. _____

9. _____



Mesurez la largeur de chaque barre en centimètres.



Réponses

Ex. 5 1/2 13 - 14

1. 3 1/2 8 - 9

2. 4 10 - 11

3. 5 12 - 13

4. 1 2 - 3

5. 3 7 - 8

6. 0 1/2 1 - 2

7. 1 1/2 3 - 4

8. 2 5 - 6

9. 4 1/2 11 - 12