



Déterminez quelle lettre représente le mieux la longueur / hauteur.

Réponses

Milímetro (mm)

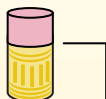
Un milímetro equivale al grosor de una tarjeta de crédito.



Centímetro (cm)

10 mm = 1 cm.

La parte metálica de un lápiz mide aproximadamente 1 cm. Una regla mide unos 30 centímetros.



Metro (m)

100 cm = 1 m

Desde el suelo hasta la perilla de una puerta hay aproximadamente 1 metro.



Kilómetro (km)


1,000 m = 1 km

La mayoría de las carreteras principales tienen al menos un kilómetro de largo.



1. _____
2. _____
3. _____
4. _____
5. _____
6. _____
7. _____
8. _____
9. _____

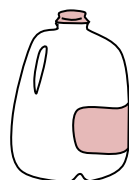
1)



Papier pour cahier

- A. 60 centimeters
- B. 15 centimeters
- C. 1 meter
- D. 25 centimeters

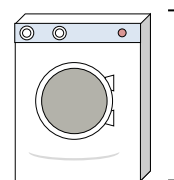
2)



Gallon de lait

- A. 3 meters
- B. 20 centimeters
- C. 10 millimeters
- D. 8 centimeters

3)



Machine à laver

- A. 10 centimeters
- B. 30 centimeters
- C. 1 meter
- D. 2 meters


4)



Bâton de colle

- A. 30 centimeters
- B. 10 centimeters
- C. 6 kilometers
- D. 25 centimeters

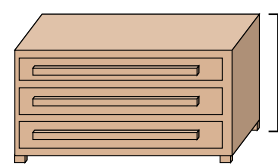
5)



l'éléphant

- A. 45 centimeters
- B. 4 meters
- C. 150 millimeters
- D. 2 kilometers

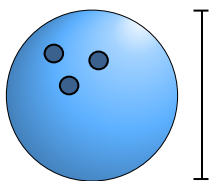
6)



Une commode

- A. 45 centimeters
- B. 30 centimeters
- C. 90 centimeters
- D. 3 meters

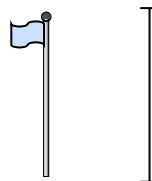
7)



Hauteur de la boule de bowling

- A. 10 centimeters
- B. 1 meter
- C. 25 centimeters
- D. 305 centimeters

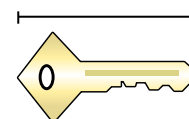
8)



mât de drapeau

- A. 300 centimeters
- B. 9 meters
- C. 2 meters
- D. 2 kilometers

9)



Clé

- A. 2 meters
- B. 5 centimeters
- C. 15 centimeters
- D. 150 centimeters



Déterminez quelle lettre représente le mieux la longueur / hauteur.

Réponses

Milímetro (mm)

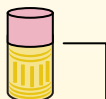
Un milímetro equivale al grosor de una tarjeta de crédito.



Centímetro (cm)

10 mm = 1 cm.

La parte metálica de un lápiz mide aproximadamente 1 cm. Una regla mide unos 30 centímetros.



Metro (m)

100 cm = 1 m

Desde el suelo hasta la perilla de una puerta hay aproximadamente 1 metro.



Kilómetro (km)

1,000 m = 1 km

La mayoría de las carreteras principales tienen al menos un kilómetro de largo.



1. **D**

2. **B**

3. **C**

4. **B**


5. **B**

6. **C**

7. **C**


8. **B**

9. **B**



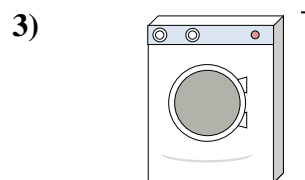
Papier pour cahier

- A. 60 centimeters
- B. 15 centimeters
- C. 1 meter
- D. 25 centimeters



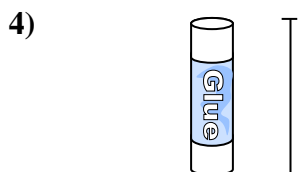
Gallon de lait

- A. 3 meters
- B. 20 centimeters
- C. 10 millimeters
- D. 8 centimeters




Machine à laver

- A. 10 centimeters
- B. 30 centimeters
- C. 1 meter
- D. 2 meters



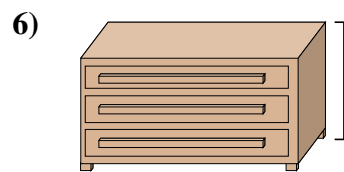
Bâton de colle

- A. 30 centimeters
- B. 10 centimeters
- C. 6 kilometers
- D. 25 centimeters




l'éléphant

- A. 45 centimeters
- B. 4 meters
- C. 150 millimeters
- D. 2 kilometers



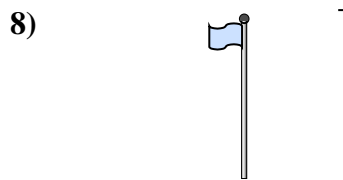
Une commode

- A. 45 centimeters
- B. 30 centimeters
- C. 90 centimeters
- D. 3 meters



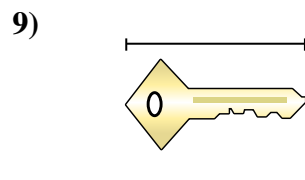
Hauteur de la boule de bowling

- A. 10 centimeters
- B. 1 meter
- C. 25 centimeters
- D. 305 centimeters



mât de drapeau

- A. 300 centimeters
- B. 9 meters
- C. 2 meters
- D. 2 kilometers



Clé

- A. 2 meters
- B. 5 centimeters
- C. 15 centimeters
- D. 150 centimeters