



Déterminez quelle lettre représente le mieux la longueur / hauteur.

Réponses

Milimètre (mm)

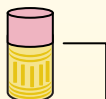
Un millimètre equivale al grosor de una tarjeta de crédito.



Centimetro (cm)

10 mm = 1 cm.

La parte metálica de un lápiz mide aproximadamente 1 cm. Una regla mide unos 30 centímetros.



Metro (m)

100 cm = 1 m

Desde el suelo hasta la perilla de una puerta hay aproximadamente 1 metro.



Kilómetro (km)

1,000 m = 1 km

La mayoría de las carreteras principales tienen al menos un kilómetro de largo.



1. _____
2. _____
3. _____
4. _____
5. _____
6. _____
7. _____
8. _____
9. _____


1)



Pop corn

- A. 3 centimeters
- B. 90 centimeters
- C. 2 kilometers
- D. 3 millimeters

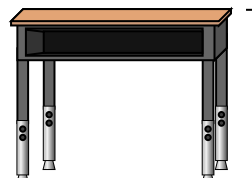
2)



Sucette

- A. 2 kilometers
- B. 30 millimeters
- C. 10 centimeters
- D. 30 centimeters


3)



Bureau

- A. 2 meters
- B. 70 centimeters
- C. 30 centimeters
- D. 15 centimeters

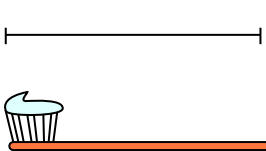
4)



Grande roue

- A. 30 centimeters
- B. 50 kilometers
- C. 23 meters
- D. 5 meters


5)



Brosse à dents

- A. 10 centimeters
- B. 3 meters
- C. 17 centimeters
- D. 1 meter

6)



Canette de soda

- A. 1 meter
- B. 10 centimeters
- C. 30 centimeters
- D. 3 centimeters

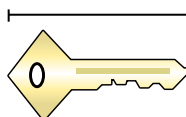
7)



Grenouille

- A. 60 centimeters
- B. 4 millimeters
- C. 8 centimeters
- D. 20 centimeters

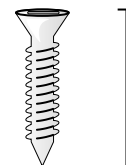
8)



Clé

- A. 2 meters
- B. 5 centimeters
- C. 15 centimeters
- D. 150 centimeters

9)



Vis

- A. 1 meter
- B. 25 centimeters
- C. 20 centimeters
- D. 3 centimeters



Déterminez quelle lettre représente le mieux la longueur / hauteur.

Réponses

Milimètre (mm)

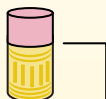
Un millimètre equivale al grosor de una tarjeta de crédito.



Centimetro (cm)

10 mm = 1 cm.

La parte metálica de un lápiz mide aproximadamente 1 cm. Una regla mide unos 30 centímetros.



Metro (m)

100 cm = 1 m

Desde el suelo hasta la perilla de una puerta hay aproximadamente 1 metro.



Kilómetro (km)

1,000 m = 1 km

La mayoría de las carreteras principales tienen al menos un kilómetro de largo.



1. **A**

2. **C**

3. **B**

4. **C**

5. **C**

6. **B**

7. **C**

8. **B**

9. **D**


1)



Pop corn

- A. 3 centimeters
- B. 90 centimeters
- C. 2 kilometers
- D. 3 millimeters

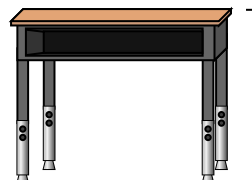
2)



Sucette

- A. 2 kilometers
- B. 30 millimeters
- C. 10 centimeters
- D. 30 centimeters


3)



Bureau

- A. 2 meters
- B. 70 centimeters
- C. 30 centimeters
- D. 15 centimeters

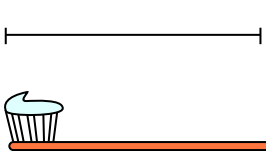
4)



Grande roue

- A. 30 centimeters
- B. 50 kilometers
- C. 23 meters
- D. 5 meters


5)



Brosse à dents

- A. 10 centimeters
- B. 3 meters
- C. 17 centimeters
- D. 1 meter

6)



Canette de soda

- A. 1 meter
- B. 10 centimeters
- C. 30 centimeters
- D. 3 centimeters

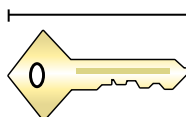
7)



Grenouille

- A. 60 centimeters
- B. 4 millimeters
- C. 8 centimeters
- D. 20 centimeters

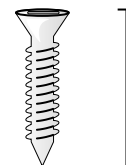
8)



Clé

- A. 2 meters
- B. 5 centimeters
- C. 15 centimeters
- D. 150 centimeters

9)




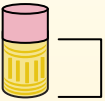
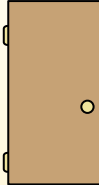

Vis

- A. 1 meter
- B. 25 centimeters
- C. 20 centimeters
- D. 3 centimeters



Déterminez quelle lettre représente le mieux la longueur / hauteur.

Réponses

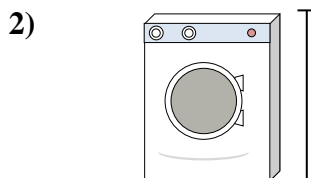
Milímetro (mm)	Centímetro (cm)	Metro (m)	Kilómetro (km)
Un milímetro equivale al grosor de una tarjeta de crédito.	10 mm = 1 cm. La parte metálica de un lápiz mide aproximadamente 1 cm. Una regla mide unos 30 centímetros.	100 cm = 1 m Desde el suelo hasta la perilla de una puerta hay aproximadamente 1 metro.	1,000 m = 1 km La mayoría de las carreteras principales tienen al menos un kilómetro de largo.
			

1. _____
2. _____
3. _____
4. _____
5. _____
6. _____
7. _____
8. _____
9. _____



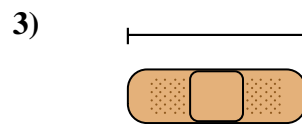
Boîte de haricots

- A. 2 meters
- B. 2 kilometers
- C. 10 centimeters
- D. 120 centimeters




Machine à laver

- A. 30 centimeters
- B. 10 centimeters
- C. 2 meters
- D. 1 meter




Bandage

- A. 60 centimeters
- B. 3 kilometers
- C. 9 centimeters
- D. 1 meter




Montagne

- A. 700 millimeters
- B. 9 meters
- C. 3 kilometers
- D. 60 centimeters




Tranche de pain

- A. 10 centimeters
- B. 120 centimeters
- C. 2 meters
- D. 25 centimeters




l'éléphant

- A. 150 millimeters
- B. 4 meters
- C. 2 kilometers
- D. 45 centimeters



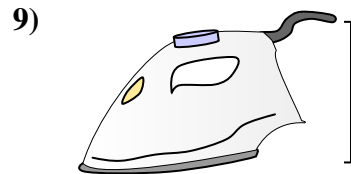
Chien

- A. 4 meters
- B. 60 centimeters
- C. 2 meters
- D. 10 centimeters



Papier pour cahier

- A. 25 centimeters
- B. 1 meter
- C. 15 centimeters
- D. 60 centimeters




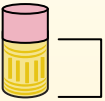
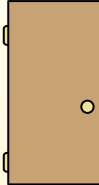

Fer à repasser

- A. 240 centimeters
- B. 60 centimeters
- C. 40 centimeters
- D. 15 centimeters



Déterminez quelle lettre représente le mieux la longueur / hauteur.

Réponses

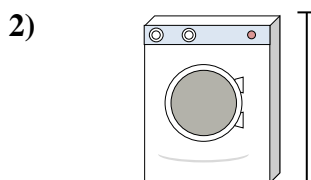
Milímetro (mm)	Centímetro (cm)	Metro (m)	Kilómetro (km)
Un milímetro equivale al grosor de una tarjeta de crédito.	10 mm = 1 cm. La parte metálica de un lápiz mide aproximadamente 1 cm. Una regla mide unos 30 centímetros.	100 cm = 1 m Desde el suelo hasta la perilla de una puerta hay aproximadamente 1 metro.	1,000 m = 1 km La mayoría de las carreteras principales tienen al menos un kilómetro de largo.
			

1. **C**
2. **D**
3. **C**
4. **C**
5. **A**
6. **B**
7. **B**
8. **A**
9. **D**



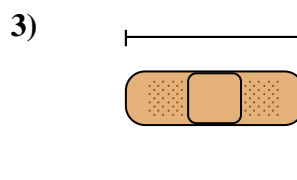
Boîte de haricots

- A. 2 meters
- B. 2 kilometers
- C. 10 centimeters
- D. 120 centimeters




Machine à laver

- A. 30 centimeters
- B. 10 centimeters
- C. 2 meters
- D. 1 meter




Bandage

- A. 60 centimeters
- B. 3 kilometers
- C. 9 centimeters
- D. 1 meter




Montagne

- A. 700 millimeters
- B. 9 meters
- C. 3 kilometers
- D. 60 centimeters




Tranche de pain

- A. 10 centimeters
- B. 120 centimeters
- C. 2 meters
- D. 25 centimeters




l'éléphant

- A. 150 millimeters
- B. 4 meters
- C. 2 kilometers
- D. 45 centimeters



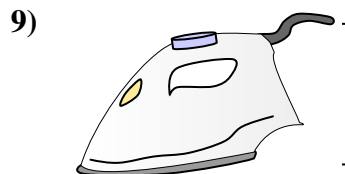
Chien

- A. 4 meters
- B. 60 centimeters
- C. 2 meters
- D. 10 centimeters



Papier pour cahier

- A. 25 centimeters
- B. 1 meter
- C. 15 centimeters
- D. 60 centimeters



Fer à repasser

- A. 240 centimeters
- B. 60 centimeters
- C. 40 centimeters
- D. 15 centimeters



Déterminez quelle lettre représente le mieux la longueur / hauteur.

Réponses

Milímetro (mm)

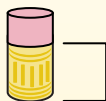
Un milímetro equivale al grosor de una tarjeta de crédito.



Centímetro (cm)

10 mm = 1 cm.

La parte metálica de un lápiz mide aproximadamente 1 cm. Una regla mide unos 30 centímetros.



Metro (m)

100 cm = 1 m

Desde el suelo hasta la perilla de una puerta hay aproximadamente 1 metro.



Kilómetro (km)

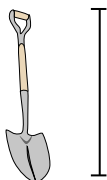
1,000 m = 1 km

La mayoría de las carreteras principales tienen al menos un kilómetro de largo.



1. _____
2. _____
3. _____
4. _____
5. _____
6. _____
7. _____
8. _____
9. _____

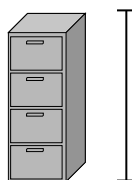
1)



Pelle

- A. 1 meter
- B. 60 centimeters
- C. 3 meters
- D. 30 centimeters


2)



FichierCabinet

- A. 30 centimeters
- B. 60 centimeters
- C. 1.5 millimeters
- D. 30 millimeters


3)



Montagne

- A. 700 millimeters
- B. 3 kilometers
- C. 9 meters
- D. 60 centimeters

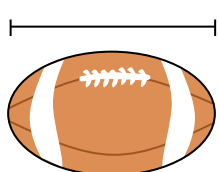
4)



Papier pour cahier

- A. 1 meter
- B. 25 centimeters
- C. 15 centimeters
- D. 60 centimeters


5)



Football

- A. 25 centimeters
- B. 3 centimeters
- C. 60 centimeters
- D. 1 meter


6)



Stylo

- A. 12 centimeters
- B. 30 centimeters
- C. 30 millimeters
- D. 5 meters

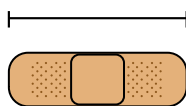
7)



Marteau

- A. 40 centimeters
- B. 1 meter
- C. 10 centimeters
- D. 3 centimeters

8)



Bandage

- A. 9 centimeters
- B. 1 meter
- C. 60 centimeters
- D. 3 kilometers

9)




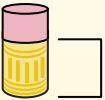
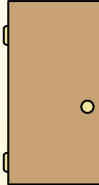

Pop corn

- A. 3 centimeters
- B. 2 kilometers
- C. 3 millimeters
- D. 90 centimeters




Déterminez quelle lettre représente le mieux la longueur / hauteur.

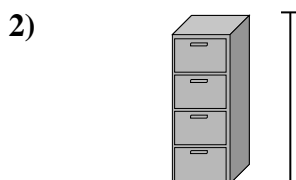
Réponses

Milímetro (mm)	Centímetro (cm)	Metro (m)	Kilómetro (km)
Un milímetro equivale al grosor de una tarjeta de crédito.	10 mm = 1 cm. La parte metálica de un lápiz mide aproximadamente 1 cm. Una regla mide unos 30 centímetros.	100 cm = 1 m Desde el suelo hasta la perilla de una puerta hay aproximadamente 1 metro.	1,000 m = 1 km La mayoría de las carreteras principales tienen al menos un kilómetro de largo.
			


1. **A**
2. **C**
3. **B**
4. **B**
5. **A**
6. **A**
7. **A**
8. **A**
9. **A**




- Pelle
- A. 1 meter
 - B. 60 centimeters
 - C. 3 meters
 - D. 30 centimeters



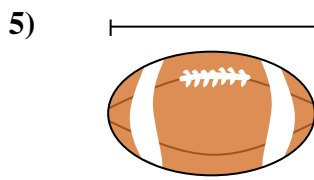
- FichierCabinet
- A. 30 centimeters
 - B. 60 centimeters
 - C. 1.5 millimeters
 - D. 30 millimeters



- Montagne
- A. 700 millimeters
 - B. 3 kilometers
 - C. 9 meters
 - D. 60 centimeters




- Papier pour cahier
- A. 1 meter
 - B. 25 centimeters
 - C. 15 centimeters
 - D. 60 centimeters



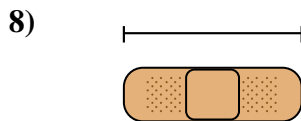
- Football
- A. 25 centimeters
 - B. 3 centimeters
 - C. 60 centimeters
 - D. 1 meter



- Stylo
- A. 12 centimeters
 - B. 30 centimeters
 - C. 30 millimeters
 - D. 5 meters



- Marteau
- A. 40 centimeters
 - B. 1 meter
 - C. 10 centimeters
 - D. 3 centimeters



- Bandage
- A. 9 centimeters
 - B. 1 meter
 - C. 60 centimeters
 - D. 3 kilometers



- Pop corn
- A. 3 centimeters
 - B. 2 kilometers
 - C. 3 millimeters
 - D. 90 centimeters



Déterminez quelle lettre représente le mieux la longueur / hauteur.

Réponses

Milímetro (mm)

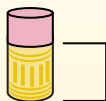
Un milímetro equivale al grosor de una tarjeta de crédito.



Centímetro (cm)

10 mm = 1 cm.

La parte metálica de un lápiz mide aproximadamente 1 cm. Una regla mide unos 30 centímetros.



Metro (m)

100 cm = 1 m

Desde el suelo hasta la perilla de una puerta hay aproximadamente 1 metro.



Kilómetro (km)


1,000 m = 1 km

La mayoría de las carreteras principales tienen al menos un kilómetro de largo.



1. _____
2. _____
3. _____
4. _____
5. _____
6. _____
7. _____
8. _____
9. _____

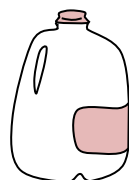
1)



Papier pour cahier

- A. 60 centimeters
- B. 15 centimeters
- C. 1 meter
- D. 25 centimeters

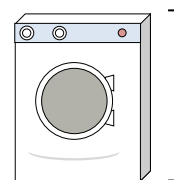
2)



Gallon de lait

- A. 3 meters
- B. 20 centimeters
- C. 10 millimeters
- D. 8 centimeters

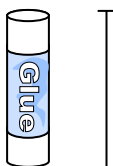
3)



Machine à laver

- A. 10 centimeters
- B. 30 centimeters
- C. 1 meter
- D. 2 meters


4)



Bâton de colle

- A. 30 centimeters
- B. 10 centimeters
- C. 6 kilometers
- D. 25 centimeters

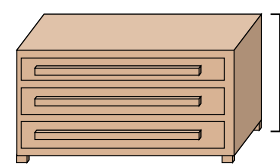
5)



l'éléphant

- A. 45 centimeters
- B. 4 meters
- C. 150 millimeters
- D. 2 kilometers

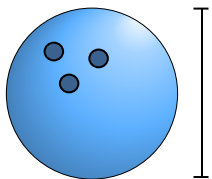
6)



Une commode

- A. 45 centimeters
- B. 30 centimeters
- C. 90 centimeters
- D. 3 meters

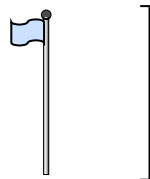
7)



Hauteur de la boule de bowling

- A. 10 centimeters
- B. 1 meter
- C. 25 centimeters
- D. 305 centimeters

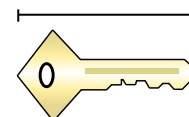
8)



mât de drapeau

- A. 300 centimeters
- B. 9 meters
- C. 2 meters
- D. 2 kilometers

9)



Clé

- A. 2 meters
- B. 5 centimeters
- C. 15 centimeters
- D. 150 centimeters



Déterminez quelle lettre représente le mieux la longueur / hauteur.

Réponses

Milímetro (mm)

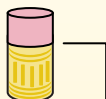
Un milímetro equivale al grosor de una tarjeta de crédito.



Centímetro (cm)

10 mm = 1 cm.

La parte metálica de un lápiz mide aproximadamente 1 cm. Una regla mide unos 30 centímetros.



Metro (m)

100 cm = 1 m

Desde el suelo hasta la perilla de una puerta hay aproximadamente 1 metro.



Kilómetro (km)

1,000 m = 1 km

La mayoría de las carreteras principales tienen al menos un kilómetro de largo.



1. **D**

2. **B**

3. **C**

4. **B**


5. **B**

6. **C**

7. **C**


8. **B**

9. **B**



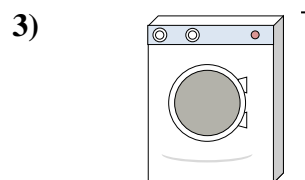
Papier pour cahier

- A. 60 centimeters
- B. 15 centimeters
- C. 1 meter
- D. 25 centimeters



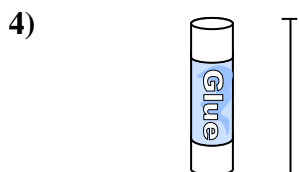
Gallon de lait

- A. 3 meters
- B. 20 centimeters
- C. 10 millimeters
- D. 8 centimeters




Machine à laver

- A. 10 centimeters
- B. 30 centimeters
- C. 1 meter
- D. 2 meters



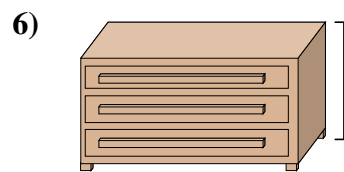
Bâton de colle

- A. 30 centimeters
- B. 10 centimeters
- C. 6 kilometers
- D. 25 centimeters




l'éléphant

- A. 45 centimeters
- B. 4 meters
- C. 150 millimeters
- D. 2 kilometers



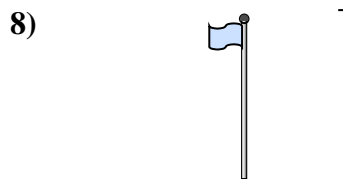
Une commode

- A. 45 centimeters
- B. 30 centimeters
- C. 90 centimeters
- D. 3 meters



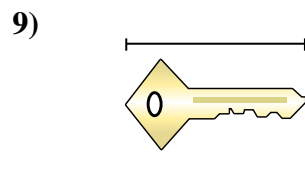
Hauteur de la boule de bowling

- A. 10 centimeters
- B. 1 meter
- C. 25 centimeters
- D. 305 centimeters



mât de drapeau

- A. 300 centimeters
- B. 9 meters
- C. 2 meters
- D. 2 kilometers



Clé

- A. 2 meters
- B. 5 centimeters
- C. 15 centimeters
- D. 150 centimeters



Déterminez quelle lettre représente le mieux la longueur / hauteur.

Réponses

Milímetro (mm)

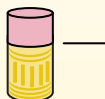
Un milímetro equivale al grosor de una tarjeta de crédito.



Centímetro (cm)

10 mm = 1 cm.

La parte metálica de un lápiz mide aproximadamente 1 cm. Una regla mide unos 30 centímetros.



Metro (m)

100 cm = 1 m

Desde el suelo hasta la perilla de una puerta hay aproximadamente 1 metro.




Kilómetro (km)

1,000 m = 1 km

La mayoría de las carreteras principales tienen al menos un kilómetro de largo.




1. _____
2. _____
3. _____
4. _____
5. _____
6. _____
7. _____
8. _____
9. _____



Papier pour cahier

- A. 15 centimeters
- B. 25 centimeters
- C. 60 centimeters
- D. 1 meter



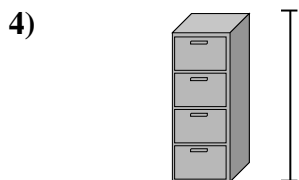
Montagne

- A. 9 meters
- B. 3 kilometers
- C. 60 centimeters
- D. 700 millimeters



Stylo

- A. 5 meters
- B. 30 millimeters
- C. 12 centimeters
- D. 30 centimeters



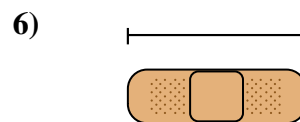
Fichier Cabinet

- A. 30 millimeters
- B. 60 centimeters
- C. 1.5 millimeters
- D. 30 centimeters



Grenouille

- A. 4 millimeters
- B. 60 centimeters
- C. 8 centimeters
- D. 20 centimeters



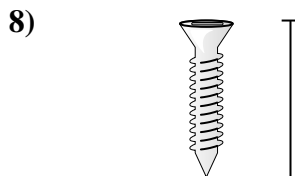
Bandage

- A. 9 centimeters
- B. 3 kilometers
- C. 60 centimeters
- D. 1 meter



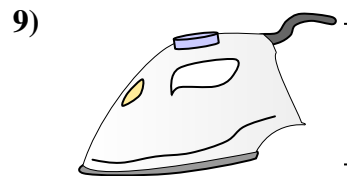
Bogue

- A. 30 centimeters
- B. 7 millimeters
- C. 5 centimeters
- D. 10 centimeters



Vis

- A. 3 centimeters
- B. 25 centimeters
- C. 20 centimeters
- D. 1 meter



Fer à repasser

- A. 40 centimeters
- B. 15 centimeters
- C. 60 centimeters
- D. 240 centimeters



Déterminez quelle lettre représente le mieux la longueur / hauteur.

Réponses

Milímetro (mm)

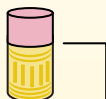
Un milímetro equivale al grosor de una tarjeta de crédito.



Centímetro (cm)

10 mm = 1 cm.

La parte metálica de un lápiz mide aproximadamente 1 cm. Una regla mide unos 30 centímetros.



Metro (m)

100 cm = 1 m


Desde el suelo hasta la perilla de una puerta hay aproximadamente 1 metro.



Kilómetro (km)


1,000 m = 1 km

La mayoría de las carreteras principales tienen al menos un kilómetro de largo.



Papier pour cahier

- A. 15 centimeters
- B. 25 centimeters
- C. 60 centimeters
- D. 1 meter



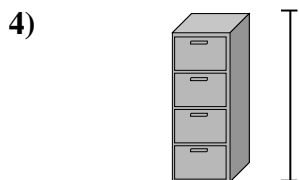
Montagne

- A. 9 meters
- B. 3 kilometers
- C. 60 centimeters
- D. 700 millimeters




Stylo

- A. 5 meters
- B. 30 millimeters
- C. 12 centimeters
- D. 30 centimeters



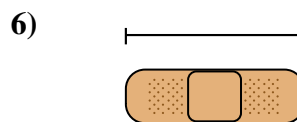
Fichier Cabinet

- A. 30 millimeters
- B. 60 centimeters
- C. 1.5 millimeters
- D. 30 centimeters



Grenouille

- A. 4 millimeters
- B. 60 centimeters
- C. 8 centimeters
- D. 20 centimeters



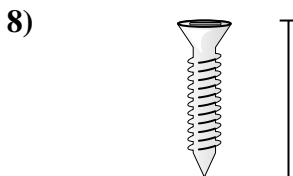
Bandage

- A. 9 centimeters
- B. 3 kilometers
- C. 60 centimeters
- D. 1 meter



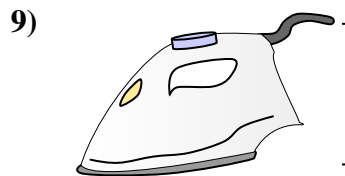
Bogue

- A. 30 centimeters
- B. 7 millimeters
- C. 5 centimeters
- D. 10 centimeters



Vis

- A. 3 centimeters
- B. 25 centimeters
- C. 20 centimeters
- D. 1 meter



Fer à repasser


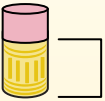
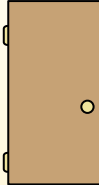

- A. 40 centimeters
- B. 15 centimeters
- C. 60 centimeters
- D. 240 centimeters

- 1. **B**
- 2. **B**
- 3. **C**
- 4. **C**
- 5. **C**
- 6. **A**
- 7. **B**
- 8. **A**
- 9. **B**

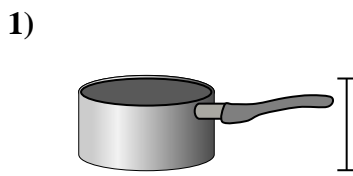


Déterminez quelle lettre représente le mieux la longueur / hauteur.


Réponses

Milímetro (mm)	Centímetro (cm)	Metro (m)	Kilómetro (km)
Un milímetro equivale al grosor de una tarjeta de crédito.	10 mm = 1 cm. La parte metálica de un lápiz mide aproximadamente 1 cm. Una regla mide unos 30 centímetros.	100 cm = 1 m Desde el suelo hasta la perilla de una puerta hay aproximadamente 1 metro.	1,000 m = 1 km La mayoría de las carreteras principales tienen al menos un kilómetro de largo.
			


1. _____
2. _____
3. _____
4. _____
5. _____
6. _____
7. _____
8. _____
9. _____



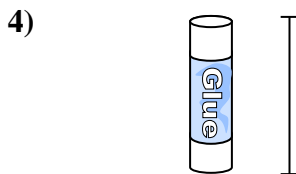
- Marmite
- A. 10 centimeters
 - B. 3 centimeters
 - C. 60 centimeters
 - D. 25 centimeters



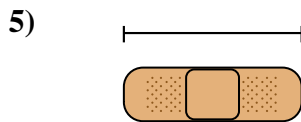
- Marteau
- A. 3 centimeters
 - B. 40 centimeters
 - C. 10 centimeters
 - D. 1 meter



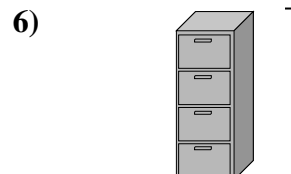
- Bougie
- A. 20 centimeters
 - B. 30 centimeters
 - C. 5 centimeters
 - D. 2 kilometers




- Bâton de colle
- A. 30 centimeters
 - B. 6 kilometers
 - C. 25 centimeters
 - D. 10 centimeters



- Bandage
- A. 60 centimeters
 - B. 3 kilometers
 - C. 9 centimeters
 - D. 1 meter



- FichierCabinet
- A. 1.5 millimeters
 - B. 30 millimeters
 - C. 60 centimeters
 - D. 30 centimeters



- Pelle
- A. 60 centimeters
 - B. 1 meter
 - C. 30 centimeters
 - D. 3 meters



- Hauteur de l'arbre
- A. 2 kilometers
 - B. 100 centimeters
 - C. 5 meters
 - D. 30 centimeters



- Lecteur Flash
- A. 60 centimeters
 - B. 30 centimeters
 - C. 15 centimeters
 - D. 6 centimeters



Déterminez quelle lettre représente le mieux la longueur / hauteur.

Réponses

Milimètre (mm)

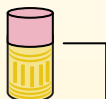
Un milimètre equivale al grosor de una tarjeta de crédito.



Centimetro (cm)

10 mm = 1 cm.

La parte metálica de un lápiz mide aproximadamente 1 cm. Una regla mide unos 30 centímetros.



Metro (m)

100 cm = 1 m

Desde el suelo hasta la perilla de una puerta hay aproximadamente 1 metro.



Kilómetro (km)


1,000 m = 1 km

La mayoría de las carreteras principales tienen al menos un kilómetro de largo.



1. **D**
2. **B**
3. **C**
4. **D**
5. **C**
6. **A**
7. **B**
8. **C**
9. **D**


1)



Marmite

- A. 10 centimeters
- B. 3 centimeters
- C. 60 centimeters
- D. 25 centimeters

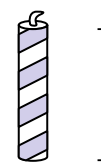
2)



Marteau

- A. 3 centimeters
- B. 40 centimeters
- C. 10 centimeters
- D. 1 meter

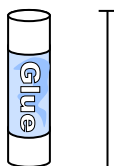
3)



Bougie

- A. 20 centimeters
- B. 30 centimeters
- C. 5 centimeters
- D. 2 kilometers

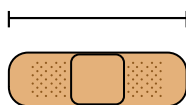
4)



Bâton de colle

- A. 30 centimeters
- B. 6 kilometers
- C. 25 centimeters
- D. 10 centimeters

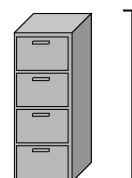
5)



Bandage

- A. 60 centimeters
- B. 3 kilometers
- C. 9 centimeters
- D. 1 meter

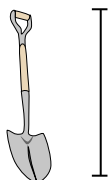
6)



FichierCabinet

- A. 1.5 millimeters
- B. 30 millimeters
- C. 60 centimeters
- D. 30 centimeters

7)



Pelle

- A. 60 centimeters
- B. 1 meter
- C. 30 centimeters
- D. 3 meters

8)



Hauteur de l'arbre

- A. 2 kilometers
- B. 100 centimeters
- C. 5 meters
- D. 30 centimeters

9)

Lecteur Flash

- A. 60 centimeters
- B. 30 centimeters
- C. 15 centimeters
- D. 6 centimeters



Déterminez quelle lettre représente le mieux la longueur / hauteur.

Réponses

Milímetro (mm)

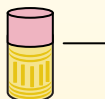
Un milímetro equivale al grosor de una tarjeta de crédito.



Centímetro (cm)

10 mm = 1 cm.

La parte metálica de un lápiz mide aproximadamente 1 cm. Una regla mide unos 30 centímetros.



Metro (m)

100 cm = 1 m

Desde el suelo hasta la perilla de una puerta hay aproximadamente 1 metro.



Kilómetro (km)

1,000 m = 1 km

La mayoría de las carreteras principales tienen al menos un kilómetro de largo.



1. _____
2. _____
3. _____
4. _____
5. _____
6. _____
7. _____
8. _____
9. _____

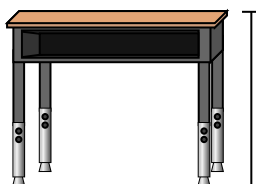
1)



Stylo

- A. 12 centimeters
- B. 30 millimeters
- C. 30 centimeters
- D. 5 meters

2)



Bureau

- A. 15 centimeters
- B. 2 meters
- C. 70 centimeters
- D. 30 centimeters

3)



Grenouille

- A. 20 centimeters
- B. 8 centimeters
- C. 4 millimeters
- D. 60 centimeters

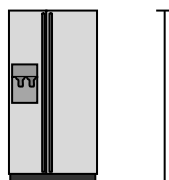
4)



Bicyclette

- A. 10 centimeters
- B. 1 meter
- C. 3 meters
- D. 25 centimeters

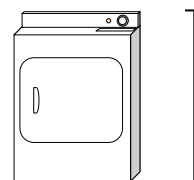
5)



Réfrigérateur

- A. 180 centimeters
- B. 30 centimeters
- C. 5 kilometers
- D. 4 meters

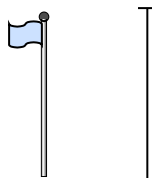
6)



Sèche-linge

- A. 60 centimeters
- B. 1 meter
- C. 25 centimeters
- D. 15 centimeters

7)



mât de drapeau

- A. 2 kilometers
- B. 9 meters
- C. 300 centimeters
- D. 2 meters

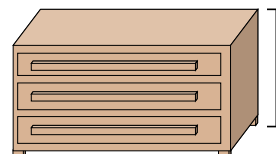
8)



Balle de tennis

- A. 3 millimeters
- B. 25 centimeters
- C. 8 centimeters
- D. 60 centimeters

9)



Une commode

- A. 45 centimeters
- B. 90 centimeters
- C. 3 meters
- D. 30 centimeters



Déterminez quelle lettre représente le mieux la longueur / hauteur.

Réponses

Milímetro (mm)

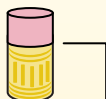
Un milímetro equivale al grosor de una tarjeta de crédito.



Centímetro (cm)

10 mm = 1 cm.

La parte metálica de un lápiz mide aproximadamente 1 cm. Una regla mide unos 30 centímetros.



Metro (m)

100 cm = 1 m

Desde el suelo hasta la perilla de una puerta hay aproximadamente 1 metro.



Kilómetro (km)

1,000 m = 1 km

La mayoría de las carreteras principales tienen al menos un kilómetro de largo.



1. **A**

2. **C**

3. **B**

4. **B**

5. **A**

6. **B**

7. **B**

8. **C**

9. **B**

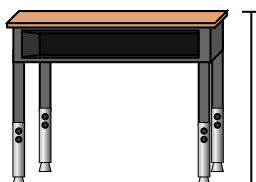
1)



Stylo

- A. 12 centimeters
- B. 30 millimeters
- C. 30 centimeters
- D. 5 meters

2)



Bureau

- A. 15 centimeters
- B. 2 meters
- C. 70 centimeters
- D. 30 centimeters

3)



Grenouille

- A. 20 centimeters
- B. 8 centimeters
- C. 4 millimeters
- D. 60 centimeters

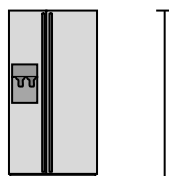
4)



Bicyclette

- A. 10 centimeters
- B. 1 meter
- C. 3 meters
- D. 25 centimeters

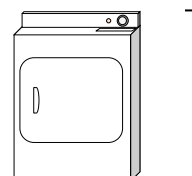
5)



Réfrigérateur

- A. 180 centimeters
- B. 30 centimeters
- C. 5 kilometers
- D. 4 meters

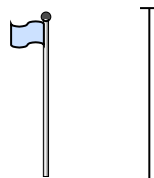
6)



Sèche-linge

- A. 60 centimeters
- B. 1 meter
- C. 25 centimeters
- D. 15 centimeters


7)



mât de drapeau

- A. 2 kilometers
- B. 9 meters
- C. 300 centimeters
- D. 2 meters

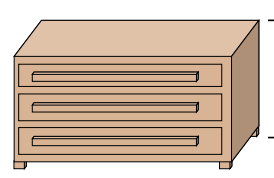
8)



Balle de tennis

- A. 3 millimeters
- B. 25 centimeters
- C. 8 centimeters
- D. 60 centimeters

9)



Une commode

- A. 45 centimeters
- B. 90 centimeters
- C. 3 meters
- D. 30 centimeters



Déterminez quelle lettre représente le mieux la longueur / hauteur.

Réponses

Milímetro (mm)

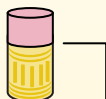
Un milímetro equivale al grosor de una tarjeta de crédito.



Centímetro (cm)

10 mm = 1 cm.

La parte metálica de un lápiz mide aproximadamente 1 cm. Una regla mide unos 30 centímetros.



Metro (m)

100 cm = 1 m

Desde el suelo hasta la perilla de una puerta hay aproximadamente 1 metro.



Kilómetro (km)

1,000 m = 1 km

La mayoría de las carreteras principales tienen al menos un kilómetro de largo.



1. _____
2. _____
3. _____
4. _____
5. _____
6. _____
7. _____
8. _____
9. _____

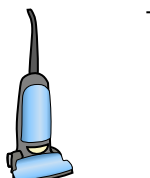
1)



Bicyclette

- A. 10 centimeters
- B. 25 centimeters
- C. 1 meter
- D. 3 meters


2)



Vide

- A. 30 centimeters
- B. 120 centimeters
- C. 3 meters
- D. 35 centimeters


3)



Brosse à dents

- A. 3 meters
- B. 10 centimeters
- C. 17 centimeters
- D. 1 meter


4)



Hauteur de la boîte de céréales

- A. 10 centimeters
- B. 60 centimeters
- C. 3 centimeters
- D. 30 centimeters

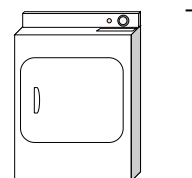
5)



l'éléphant

- A. 2 kilometers
- B. 150 millimeters
- C. 45 centimeters
- D. 4 meters

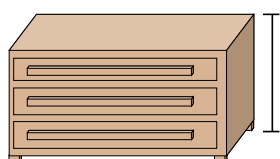
6)



Sèche-linge

- A. 15 centimeters
- B. 60 centimeters
- C. 25 centimeters
- D. 1 meter

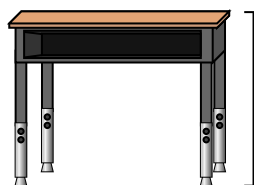
7)



Une commode

- A. 30 centimeters
- B. 3 meters
- C. 90 centimeters
- D. 45 centimeters

8)



Bureau

- A. 15 centimeters
- B. 30 centimeters
- C. 70 centimeters
- D. 2 meters

9)



Bogue

- A. 30 centimeters
- B. 10 centimeters
- C. 5 centimeters
- D. 7 millimeters



Déterminez quelle lettre représente le mieux la longueur / hauteur.

Réponses

Milímetro (mm)

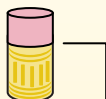
Un milímetro equivale al grosor de una tarjeta de crédito.



Centímetro (cm)

10 mm = 1 cm.

La parte metálica de un lápiz mide aproximadamente 1 cm. Una regla mide unos 30 centímetros.



Metro (m)

100 cm = 1 m

Desde el suelo hasta la perilla de una puerta hay aproximadamente 1 metro.



Kilómetro (km)

1,000 m = 1 km

La mayoría de las carreteras principales tienen al menos un kilómetro de largo.



1. **C**

2. **B**

3. **C**

4. **D**

5. **D**

6. **D**

7. **C**

8. **C**

9. **D**

1)



Bicyclette

- A. 10 centimeters
- B. 25 centimeters
- C. 1 meter
- D. 3 meters

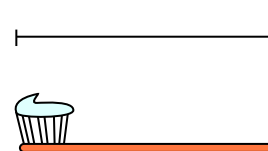
2)



Vide

- A. 30 centimeters
- B. 120 centimeters
- C. 3 meters
- D. 35 centimeters

3)



Brosse à dents

- A. 3 meters
- B. 10 centimeters
- C. 17 centimeters
- D. 1 meter


4)



Hauteur de la boîte de céréales

- A. 10 centimeters
- B. 60 centimeters
- C. 3 centimeters
- D. 30 centimeters

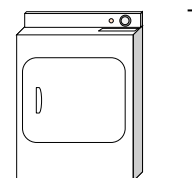
5)



l'éléphant

- A. 2 kilometers
- B. 150 millimeters
- C. 45 centimeters
- D. 4 meters

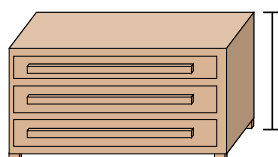
6)



Sèche-linge

- A. 15 centimeters
- B. 60 centimeters
- C. 25 centimeters
- D. 1 meter

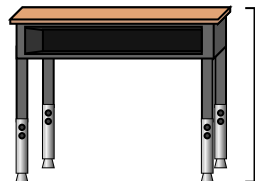
7)



Une commode

- A. 30 centimeters
- B. 3 meters
- C. 90 centimeters
- D. 45 centimeters

8)



Bureau

- A. 15 centimeters
- B. 30 centimeters
- C. 70 centimeters
- D. 2 meters

9)



Bogue

- A. 30 centimeters
- B. 10 centimeters
- C. 5 centimeters
- D. 7 millimeters



Déterminez quelle lettre représente le mieux la longueur / hauteur.

Réponses

Milímetro (mm)

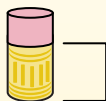
Un milímetro equivale al grosor de una tarjeta de crédito.



Centímetro (cm)

10 mm = 1 cm.

La parte metálica de un lápiz mide aproximadamente 1 cm. Una regla mide unos 30 centímetros.



Metro (m)

100 cm = 1 m

Desde el suelo hasta la perilla de una puerta hay aproximadamente 1 metro.



Kilómetro (km)


1,000 m = 1 km

La mayoría de las carreteras principales tienen al menos un kilómetro de largo.



1. _____
2. _____
3. _____
4. _____
5. _____
6. _____
7. _____
8. _____
9. _____

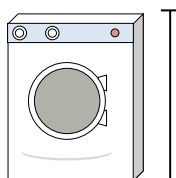
1)



Canette de soda

- A. 30 centimeters
- B. 3 centimeters
- C. 1 meter
- D. 10 centimeters

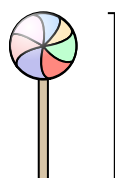
2)



Machine à laver

- A. 1 meter
- B. 30 centimeters
- C. 2 meters
- D. 10 centimeters

3)



Sucette

- A. 30 millimeters
- B. 30 centimeters
- C. 2 kilometers
- D. 10 centimeters

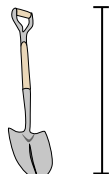
4)



Bicyclette

- A. 25 centimeters
- B. 10 centimeters
- C. 1 meter
- D. 3 meters


5)



Pelle

- A. 30 centimeters
- B. 60 centimeters
- C. 1 meter
- D. 3 meters

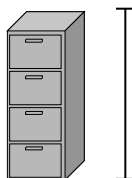
6)



Hauteur de la boule de bowling

- A. 25 centimeters
- B. 305 centimeters
- C. 1 meter
- D. 10 centimeters

7)



FichierCabinet

- A. 30 centimeters
- B. 1.5 millimeters
- C. 30 millimeters
- D. 60 centimeters

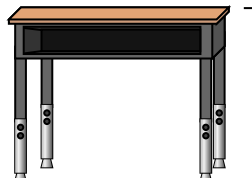
8)



Crayon

- A. 30 millimeters
- B. 20 centimeters
- C. 150 centimeters
- D. 1 meter

9)



Bureau

- A. 2 meters
- B. 15 centimeters
- C. 30 centimeters
- D. 70 centimeters



Déterminez quelle lettre représente le mieux la longueur / hauteur.

Réponses

Milímetro (mm)

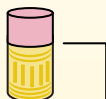
Un milímetro equivale al grosor de una tarjeta de crédito.



Centímetro (cm)

10 mm = 1 cm.

La parte metálica de un lápiz mide aproximadamente 1 cm. Una regla mide unos 30 centímetros.



Metro (m)

100 cm = 1 m

Desde el suelo hasta la perilla de una puerta hay aproximadamente 1 metro.



Kilómetro (km)

1,000 m = 1 km

La mayoría de las carreteras principales tienen al menos un kilómetro de largo.



1. **D**

2. **A**

3. **D**

4. **C**

5. **C**

6. **A**

7. **B**

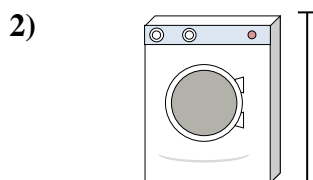
8. **B**

9. **D**




Canette de soda

- A. 30 centimeters
- B. 3 centimeters
- C. 1 meter
- D. 10 centimeters



Machine à laver

- A. 1 meter
- B. 30 centimeters
- C. 2 meters
- D. 10 centimeters




Sucette

- A. 30 millimeters
- B. 30 centimeters
- C. 2 kilometers
- D. 10 centimeters




Bicyclette

- A. 25 centimeters
- B. 10 centimeters
- C. 1 meter
- D. 3 meters



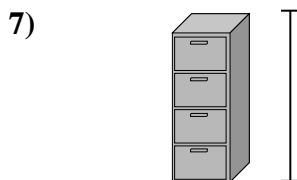
Pelle

- A. 30 centimeters
- B. 60 centimeters
- C. 1 meter
- D. 3 meters



Hauteur de la boule de bowling

- A. 25 centimeters
- B. 305 centimeters
- C. 1 meter
- D. 10 centimeters



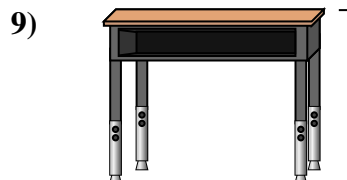
FichierCabinet

- A. 30 centimeters
- B. 1.5 millimeters
- C. 30 millimeters
- D. 60 centimeters



Crayon

- A. 30 millimeters
- B. 20 centimeters
- C. 150 centimeters
- D. 1 meter



Bureau

- A. 2 meters
- B. 15 centimeters
- C. 30 centimeters
- D. 70 centimeters



Déterminez quelle lettre représente le mieux la longueur / hauteur.

Réponses

Milimètre (mm)

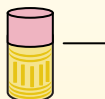
Un millimètre equivale al grosor de una tarjeta de crédito.



Centímetro (cm)

10 mm = 1 cm.

La parte metálica de un lápiz mide aproximadamente 1 cm. Una regla mide unos 30 centímetros.



Metro (m)

100 cm = 1 m

Desde el suelo hasta la perilla de una puerta hay aproximadamente 1 metro.



Kilómetro (km)

1,000 m = 1 km

La mayoría de las carreteras principales tienen al menos un kilómetro de largo.




1. _____
2. _____
3. _____
4. _____
5. _____
6. _____
7. _____
8. _____
9. _____

1)

DVD

- A. 10 centimeters
- B. 1 meter
- C. 30 millimeters
- D. 30 centimeters


2)



Montagne

- A. 700 millimeters
- B. 3 kilometers
- C. 60 centimeters
- D. 9 meters

3)



Tranche de pain

- A. 120 centimeters
- B. 2 meters
- C. 10 centimeters
- D. 25 centimeters

4)



Bicyclette

- A. 3 meters
- B. 25 centimeters
- C. 10 centimeters
- D. 1 meter

5)

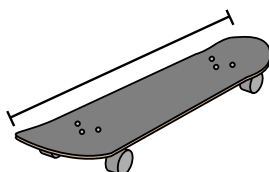
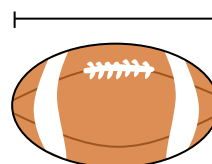


planche à roulette

- A. 80 centimeters
- B. 2 meters
- C. 30 centimeters
- D. 3 centimeters

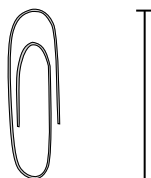
6)



Football

- A. 1 meter
- B. 25 centimeters
- C. 3 centimeters
- D. 60 centimeters

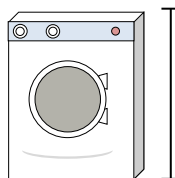
7)



Trombone

- A. 3 centimeters
- B. 60 centimeters
- C. 10 centimeters
- D. 30 centimeters

8)



Machine à laver

- A. 30 centimeters
- B. 1 meter
- C. 2 meters
- D. 10 centimeters

9)







Bâton de colle

- A. 10 centimeters
- B. 30 centimeters
- C. 25 centimeters
- D. 6 kilometers



Déterminez quelle lettre représente le mieux la longueur / hauteur.

Réponses

Milimètre (mm)	Centimètre (cm)	Metro (m)	Kilómetro (km)
Un milimètre equivale al grosor de una tarjeta de crédito.	10 mm = 1 cm. La parte metálica de un lápiz mide aproximadamente 1 cm. Una regla mide unos 30 centímetros.	100 cm = 1 m Desde el suelo hasta la perilla de una puerta hay aproximadamente 1 metro.	1,000 m = 1 km La mayoría de las carreteras principales tienen al menos un kilómetro de largo.
			

1)

DVD

- A. 10 centimeters
- B. 1 meter
- C. 30 millimeters
- D. 30 centimeters


2)



Montagne

- A. 700 millimeters
- B. 3 kilometers
- C. 60 centimeters
- D. 9 meters

3)



Tranche de pain

- A. 120 centimeters
- B. 2 meters
- C. 10 centimeters
- D. 25 centimeters

4)



Bicyclette

- A. 3 meters
- B. 25 centimeters
- C. 10 centimeters
- D. 1 meter

5)

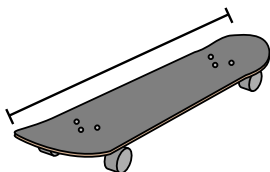
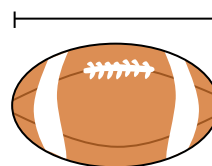


planche à roulette

- A. 80 centimeters
- B. 2 meters
- C. 30 centimeters
- D. 3 centimeters

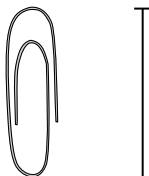
6)



Football

- A. 1 meter
- B. 25 centimeters
- C. 3 centimeters
- D. 60 centimeters

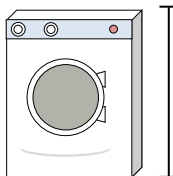
7)



Trombone

- A. 3 centimeters
- B. 60 centimeters
- C. 10 centimeters
- D. 30 centimeters

8)



Machine à laver

- A. 30 centimeters
- B. 1 meter
- C. 2 meters
- D. 10 centimeters

9)



Bâton de colle

- A. 10 centimeters
- B. 30 centimeters
- C. 25 centimeters
- D. 6 kilometers

1. **A**
2. **B**
3. **C**
4. **D**
5. **A**
6. **B**
7. **A**
8. **B**
9. **A**