



Dessinez le montant indiqué et étiquetez chaque pièce.

1) 96¢

2) 69¢

3) 97¢

4) 75¢

5) 48¢

6) 56¢

7) 45¢

8) 84¢

9) 29¢

10) 22¢



Dessinez le montant indiqué et étiquetez chaque pièce.

1) 96¢



quarter quarter quarter dime dime penny

2) 69¢



quarter quarter dime nickel penny penny penny penny

3) 97¢




quarter quarter quarter dime dime penny penny

4) 75¢



quarter quarter quarter

5) 48¢



quarter dime dime penny penny penny

6) 56¢




quarter quarter nickel penny

7) 45¢



quarter dime dime

8) 84¢




quarter quarter quarter nickel penny penny penny penny

9) 29¢



quarter penny penny penny penny

10) 22¢



dime dime penny penny