





Utilisez les rectangles pour résoudre chaque problème.


1) $22 \times 10 =$




2) $20 \times 27 =$




3) $10 \times 12 =$




4) $10 \times 19 =$



5) $13 \times 10 =$



6) $18 \times 10 =$



Réponses

1. _____

2. _____

3. _____

4. _____

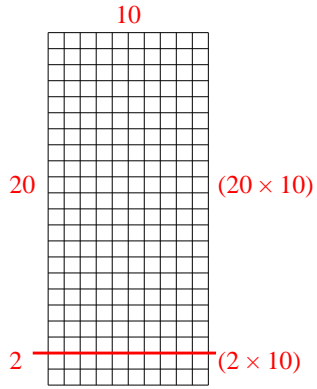
5. _____

6. _____

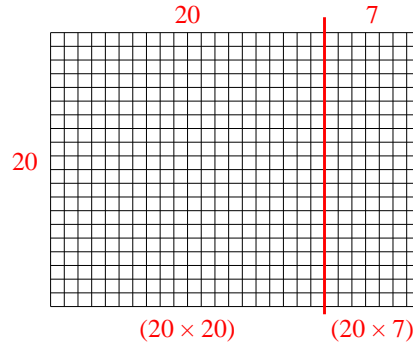


Utilisez les rectangles pour résoudre chaque problème.

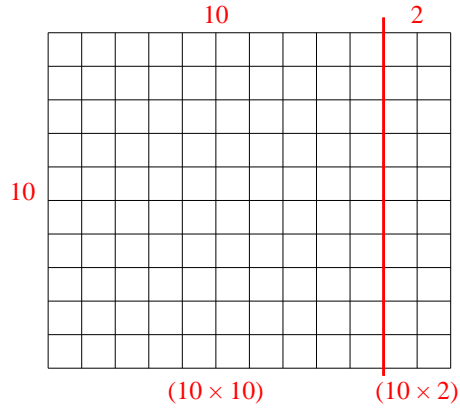
1) $22 \times 10 =$



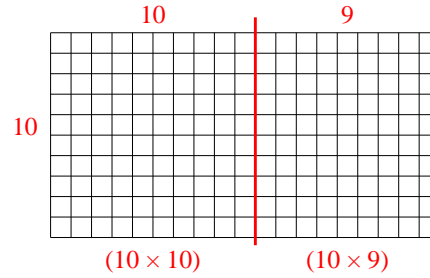
2) $20 \times 27 =$



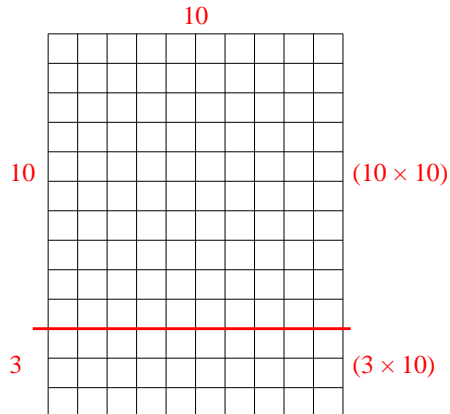
3) $10 \times 12 =$



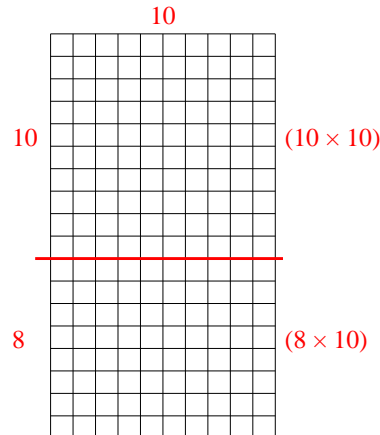
4) $10 \times 19 =$



5) $13 \times 10 =$



6) $18 \times 10 =$



Réponses

1. **220**

2. **540**

3. **120**

4. **190**

5. **130**

6. **180**