





Utilisez les rectangles pour résoudre chaque problème.


1) $45 \times 59 =$




2) $49 \times 59 =$




3) $39 \times 16 =$




4) $37 \times 13 =$



5) $37 \times 48 =$



6) $37 \times 14 =$



Réponses

1. _____

2. _____

3. _____

4. _____

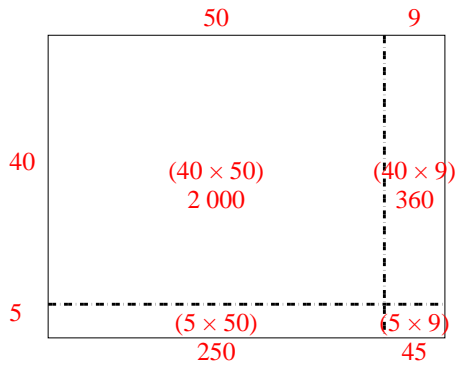
5. _____

6. _____

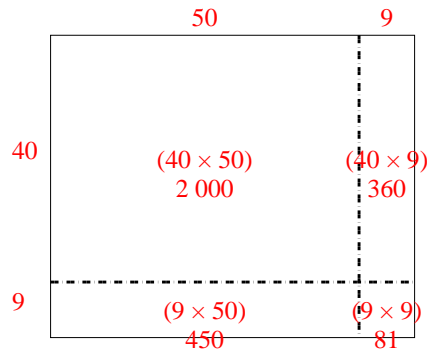


Utilisez les rectangles pour résoudre chaque problème.

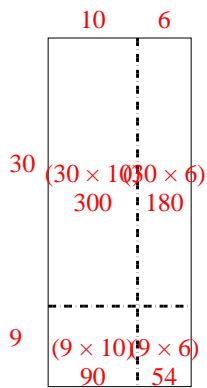
1) $45 \times 59 =$



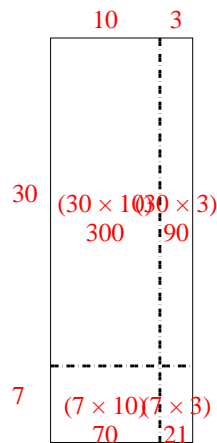
2) $49 \times 59 =$



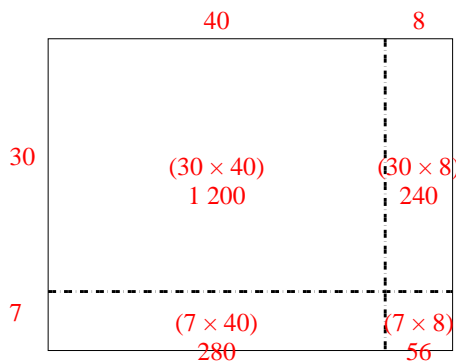
3) $39 \times 16 =$



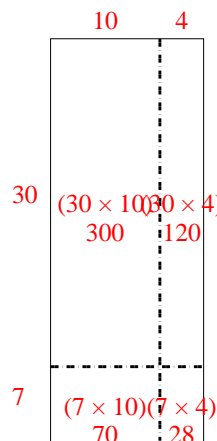
4) $37 \times 13 =$



5) $37 \times 48 =$



6) $37 \times 14 =$



Réponses

1. **2 655**

2. **2 891**

3. **624**

4. **481**

5. **1 776**

6. **518**