





Utilisez les rectangles pour résoudre chaque problème.

Réponses

1) $63 \times 69 =$



2) $66 \times 53 =$



1. _____

2. _____


3. _____

4. _____

5. _____

6. _____

3) $42 \times 53 =$




4) $53 \times 72 =$



5) $62 \times 75 =$



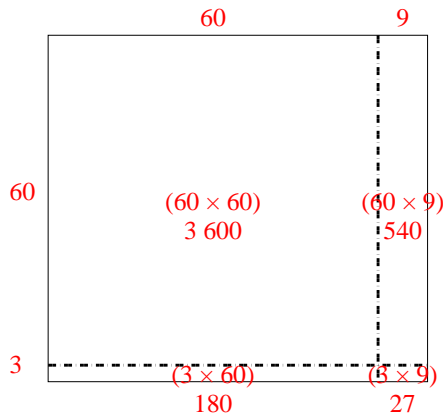
6) $74 \times 88 =$



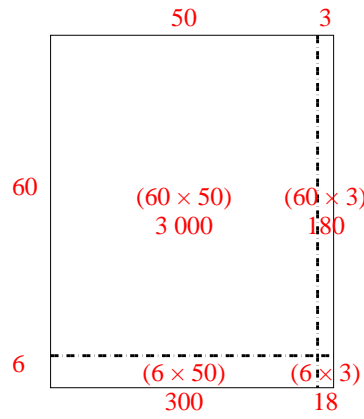


Utilisez les rectangles pour résoudre chaque problème.

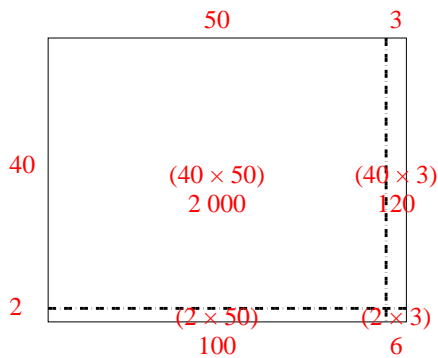
1) $63 \times 69 =$



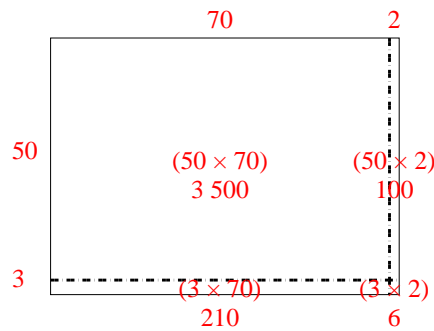
2) $66 \times 53 =$



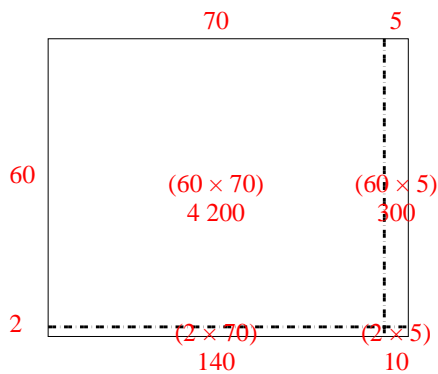
3) $42 \times 53 =$



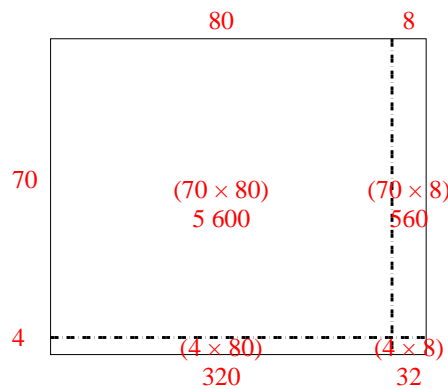
4) $53 \times 72 =$



5) $62 \times 75 =$



6) $74 \times 88 =$



Réponses

1. **4 347**

2. **3 498**

3. **2 226**

4. **3 816**

5. **4 650**

6. **6 512**