





Utilisez les rectangles pour résoudre chaque problème.


1) $52 \times 58 =$




2) $36 \times 33 =$



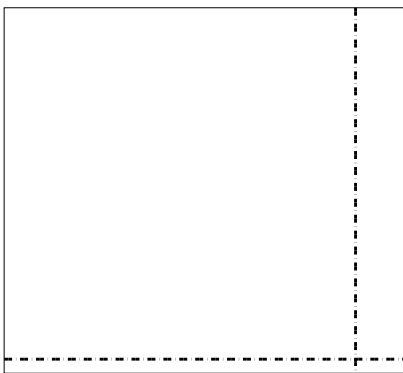
3) $33 \times 46 =$




4) $45 \times 68 =$



5) $52 \times 57 =$



6) $42 \times 37 =$



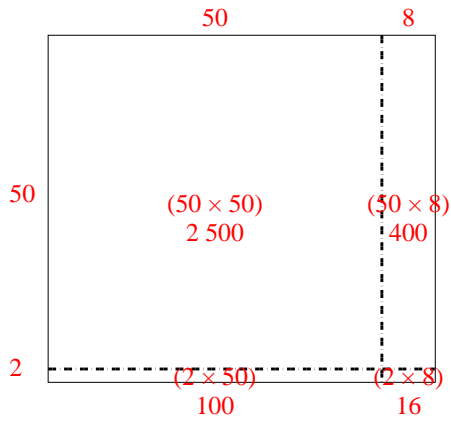
Réponses

- 1. _____
- 2. _____
- 3. _____
- 4. _____
- 5. _____
- 6. _____

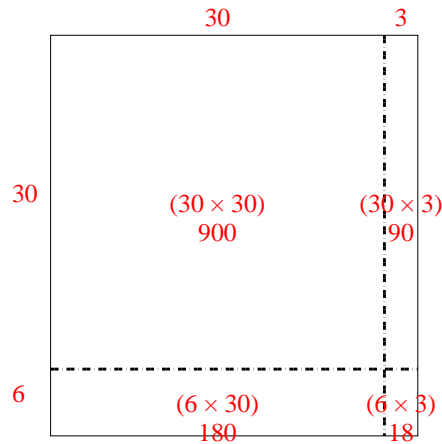


Utilisez les rectangles pour résoudre chaque problème.

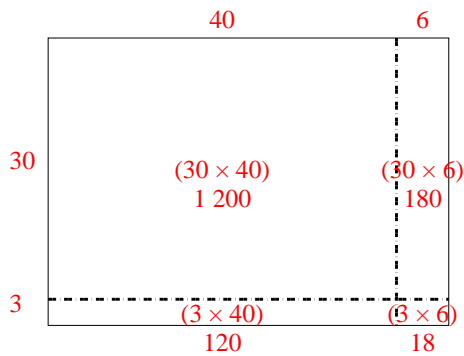
1) $52 \times 58 =$



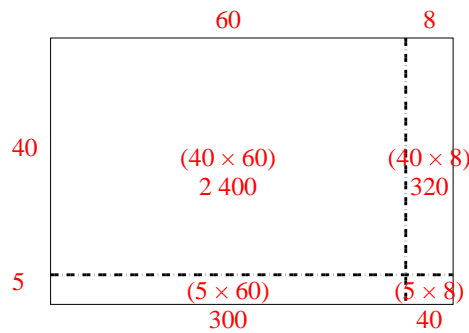
2) $36 \times 33 =$



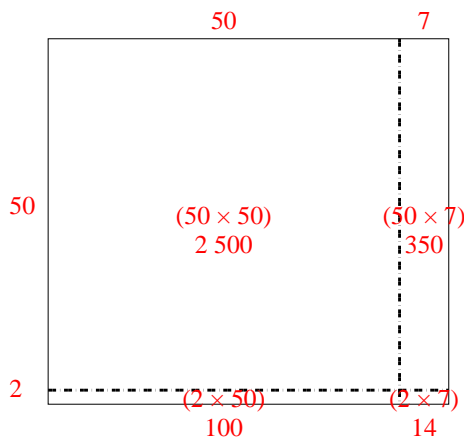
3) $33 \times 46 =$



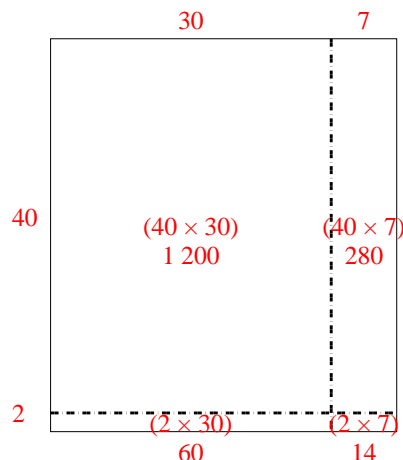
4) $45 \times 68 =$



5) $52 \times 57 =$



6) $42 \times 37 =$



Réponses

1. **3 016**

2. **1 188**

3. **1 518**

4. **3 060**

5. **2 964**

6. **1 554**