





Utilisez les rectangles pour résoudre chaque problème.


1)  $26 \times 20 =$




2)  $20 \times 22 =$




3)  $29 \times 20 =$




4)  $20 \times 29 =$



5)  $25 \times 20 =$



6)  $20 \times 28 =$



**Réponses**

1. \_\_\_\_\_

2. \_\_\_\_\_

3. \_\_\_\_\_

4. \_\_\_\_\_

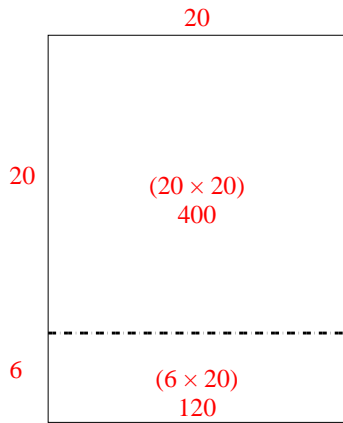
5. \_\_\_\_\_

6. \_\_\_\_\_

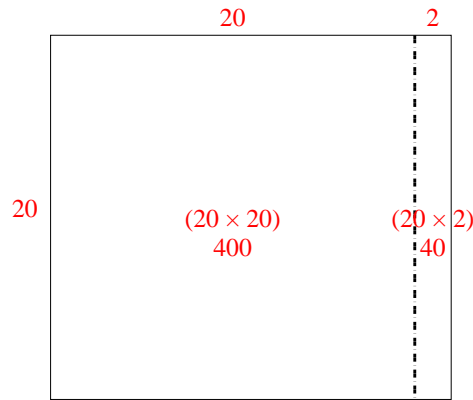


Utilisez les rectangles pour résoudre chaque problème.

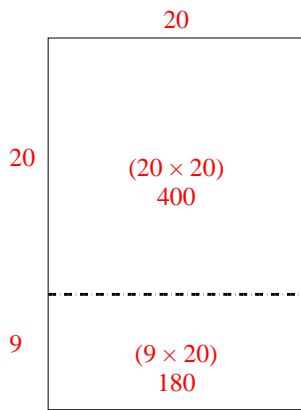
1)  $26 \times 20 =$



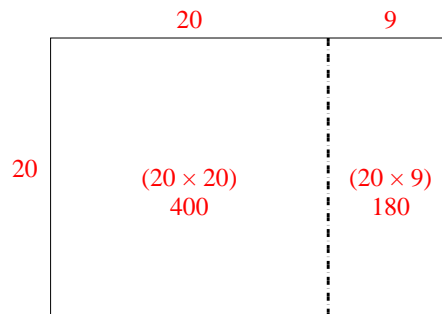
2)  $20 \times 22 =$



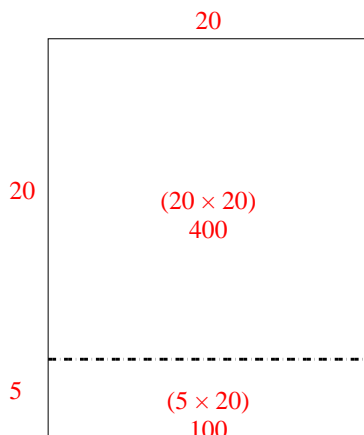
3)  $29 \times 20 =$



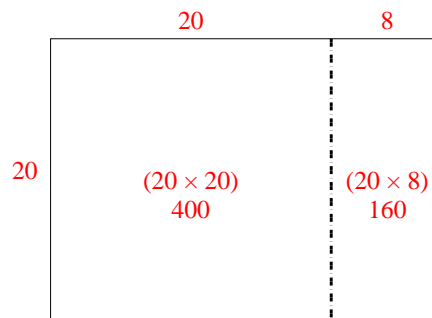
4)  $20 \times 29 =$



5)  $25 \times 20 =$



6)  $20 \times 28 =$



**Réponses**

1. 520

2. 440

3. 580

4. 580

5. 500

6. 560