





Utilisez les rectangles pour résoudre chaque problème.


1) $32 \times 20 =$




2) $30 \times 37 =$




3) $20 \times 22 =$




4) $20 \times 29 =$



5) $23 \times 20 =$



6) $28 \times 20 =$



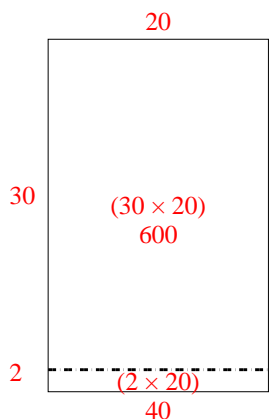
Réponses

- 1. _____
- 2. _____
- 3. _____
- 4. _____
- 5. _____
- 6. _____

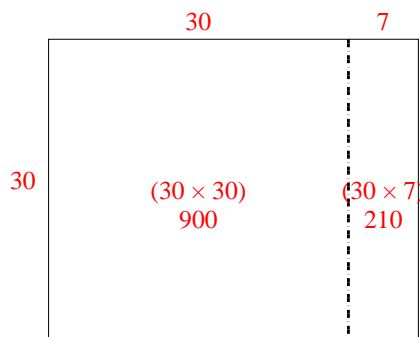


Utilisez les rectangles pour résoudre chaque problème.

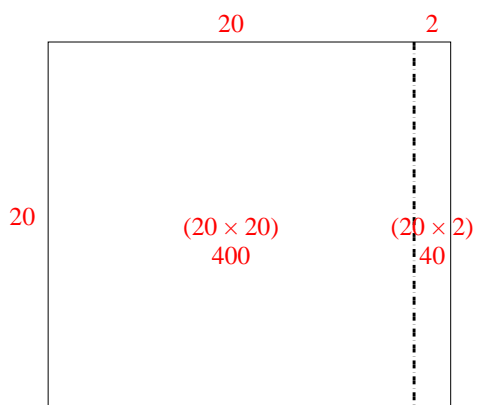
1) $32 \times 20 =$



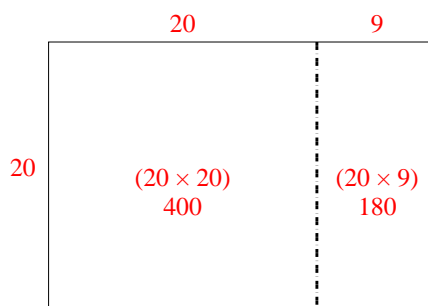
2) $30 \times 37 =$



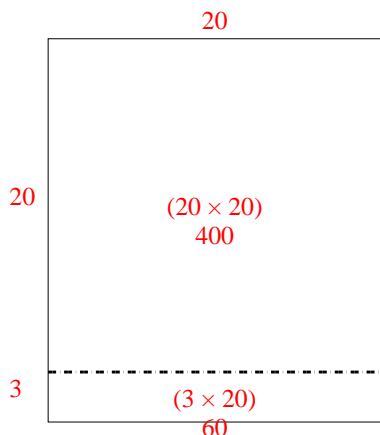
3) $20 \times 22 =$



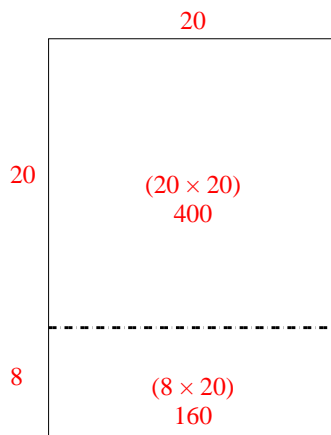
4) $20 \times 29 =$



5) $23 \times 20 =$



6) $28 \times 20 =$



Réponses

1. 640

2. 1 110

3. 440

4. 580

5. 460

6. 560