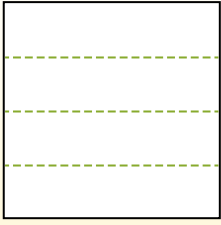


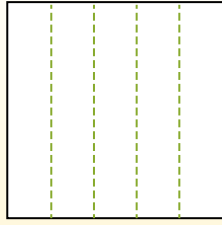


Partitionnez la figure comme indiqué et comptez le nombre de cellules formées.

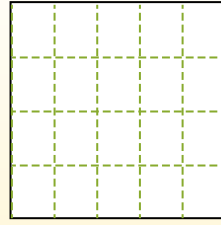
Las filas van de izquierda a derecha.



Las columnas van de arriba a abajo.




Aqui tem 4 linhas e 5 colunas .
Existem 20 caixas no total.




Réponses

- 1. _____
- 2. _____
- 3. _____
- 4. _____
- 5. _____
- 6. _____
- 7. _____
- 8. _____
- 9. _____


1) 4 lignes
2 colonnes




2) 2 lignes
2 colonnes




3) 5 lignes
3 colonnes




4) 5 lignes
4 colonnes




5) 3 lignes
2 colonnes




6) 4 lignes
3 colonnes




7) 5 lignes
2 colonnes



8) 4 lignes
4 colonnes



9) 3 lignes
3 colonnes



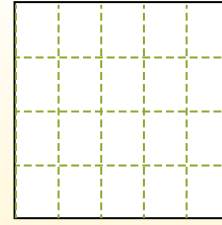
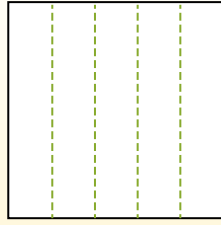
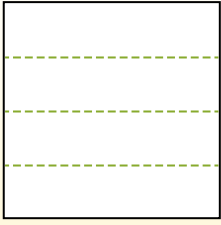


Partitionnez la figure comme indiqué et comptez le nombre de cellules formées.

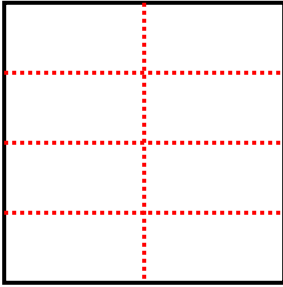
Las filas van de izquierda a derecha.

Las columnas van de arriba a abajo.

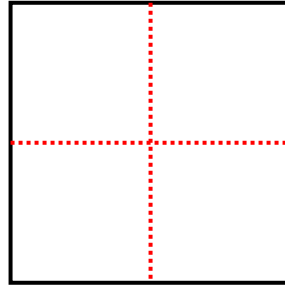
Aqui tem 4 linhas e 5 colunas. Existem 20 caixas no total.



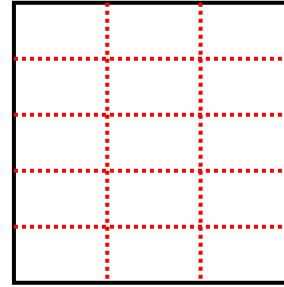
1) 4 lignes
2 colonnes



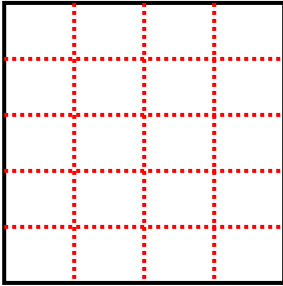
2) 2 lignes
2 colonnes



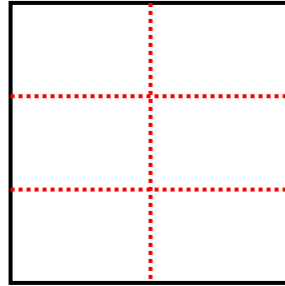
3) 5 lignes
3 colonnes



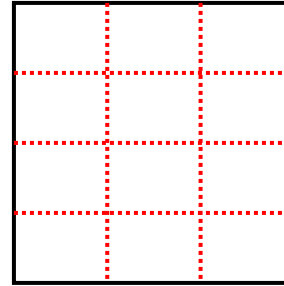
4) 5 lignes
4 colonnes



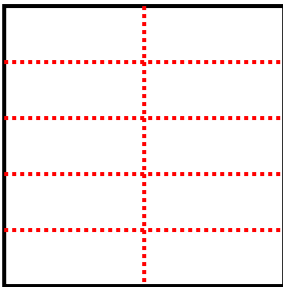
5) 3 lignes
2 colonnes



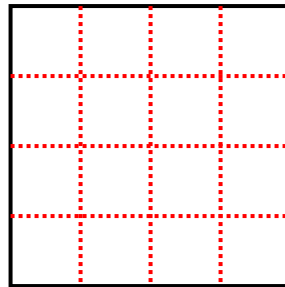
6) 4 lignes
3 colonnes



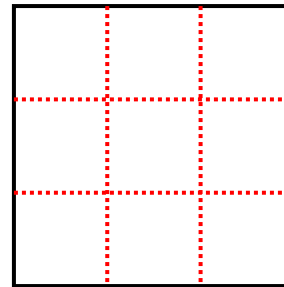
7) 5 lignes
2 colonnes



8) 4 lignes
4 colonnes



9) 3 lignes
3 colonnes



Réponses

1. 8

2. 4

3. 15

4. 20

5. 6

6. 12

7. 10

8. 16

9. 9