



Exprimez chaque groupes d'objets en multiplication.

Réponses

Ex)

Ex. **9×6=54**

1)

1. _____

2. _____

2)

3. _____

4. _____

3)

5. _____

6. _____

7. _____

4)

8. _____

5)

6)


7)

8)

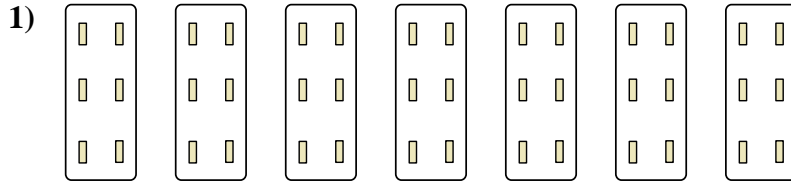


Exprimez chaque groupes d'objets en multiplication.

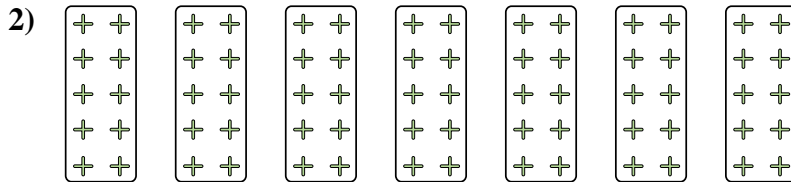
Réponses



Ex. 9×6=54




1. 7×6=42



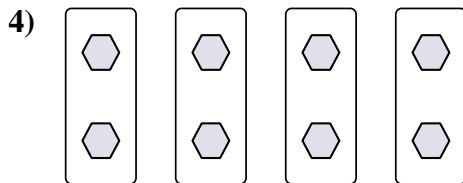
2. 7×10=70

3. 8×2=16



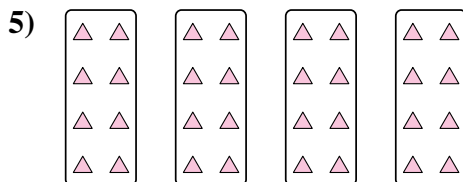
4. 4×2=8

5. 4×8=32



6. 3×2=6

7. 10×7=70



8. 4×10=40

