



Exprimez chaque groupes d'objets en multiplication.

Réponses

Ex)

Ex. **9×5=45**

1)

1. _____

2. _____

2)

3. _____

4. _____

3)

5. _____

6. _____

4)

7. _____

8. _____

5)

6)

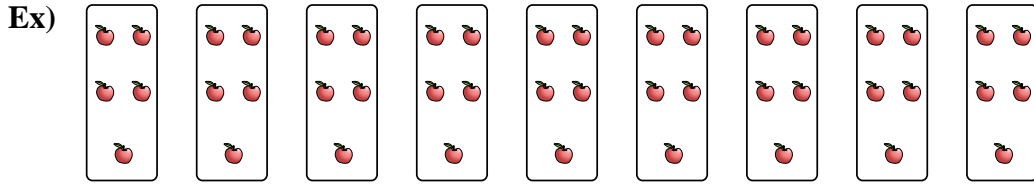
7)

8)

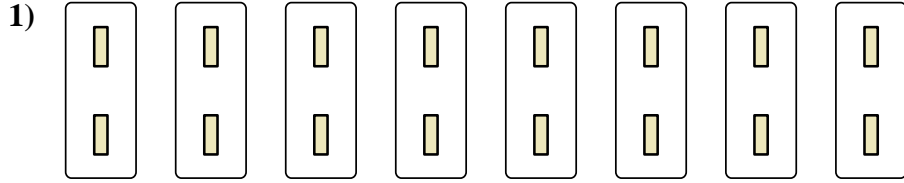


Exprimez chaque groupes d'objets en multiplication.

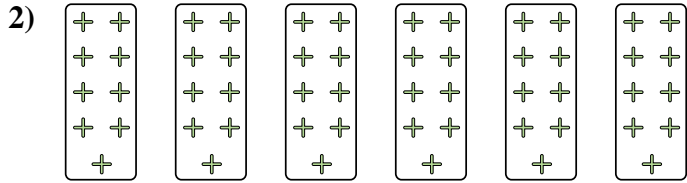
Réponses



Ex. 9×5=45



1. 8×2=16




2. 6×9=54

3. 3×7=21

4. 2×9=18

5. 3×4=12



6. 8×10=80

7. 10×9=90

8. 2×10=20

