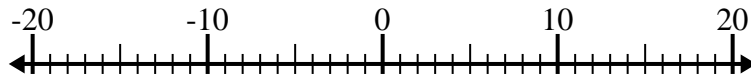




Résoudre chaque problème. Utilisez la droite numérique si besoin.

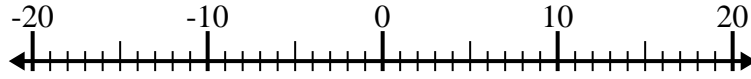
**Réponses**

1)  $(-15) - (-7) =$  \_\_\_\_\_



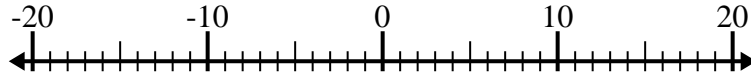
1. \_\_\_\_\_

2)  $(-9) - 4 =$  \_\_\_\_\_



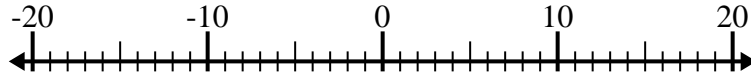
2. \_\_\_\_\_

3)  $7 - (-13) =$  \_\_\_\_\_



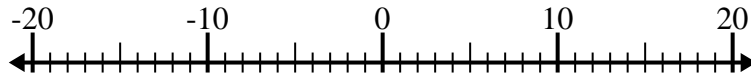
3. \_\_\_\_\_

4)  $(-5) + (-11) =$  \_\_\_\_\_



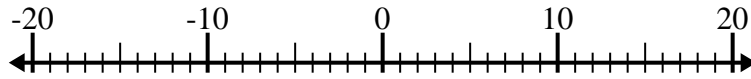
4. \_\_\_\_\_

5)  $(-12) + 4 =$  \_\_\_\_\_



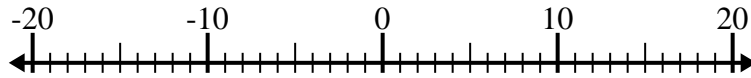
5. \_\_\_\_\_

6)  $14 - (-2) =$  \_\_\_\_\_



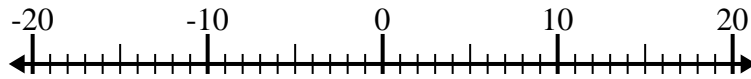
6. \_\_\_\_\_

7)  $1 + (-13) =$  \_\_\_\_\_



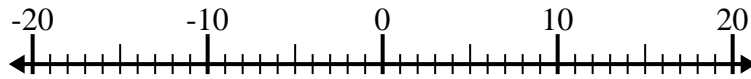
7. \_\_\_\_\_

8)  $(-4) - (-7) =$  \_\_\_\_\_



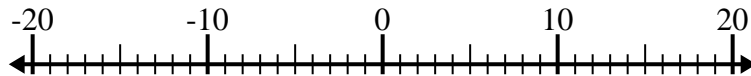
8. \_\_\_\_\_

9)  $(-9) - 11 =$  \_\_\_\_\_



9. \_\_\_\_\_

10)  $(-15) + (-1) =$  \_\_\_\_\_



10. \_\_\_\_\_



Résoudre chaque problème. Utilisez la droite numérique si besoin.

1)  $(-15) - (-7) = \underline{-8}$



2)  $(-9) - 4 = \underline{-13}$



3)  $7 - (-13) = \underline{20}$



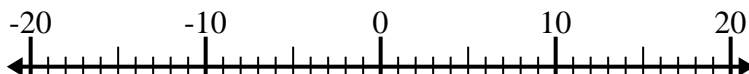
4)  $(-5) + (-11) = \underline{-16}$



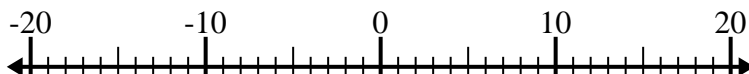
5)  $(-12) + 4 = \underline{-8}$



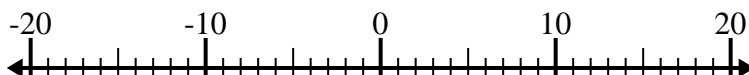
6)  $14 - (-2) = \underline{16}$



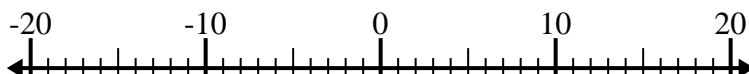
7)  $1 + (-13) = \underline{-12}$



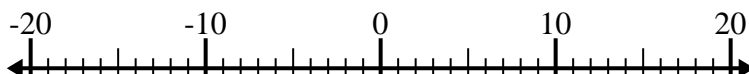
8)  $(-4) - (-7) = \underline{3}$



9)  $(-9) - 11 = \underline{-20}$



10)  $(-15) + (-1) = \underline{-16}$



**Réponses**

1. **-8**

2. **-13**

3. **20**

4. **-16**

5. **-8**

6. **16**

7. **-12**

8. **3**

9. **-20**

10. **-16**