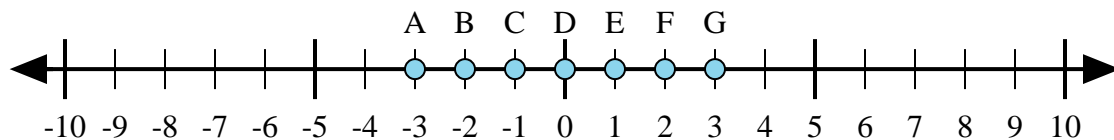




Déterminez quelle lettre de la droite numérique représente le mieux la réponse à chaque problème.

Réponses



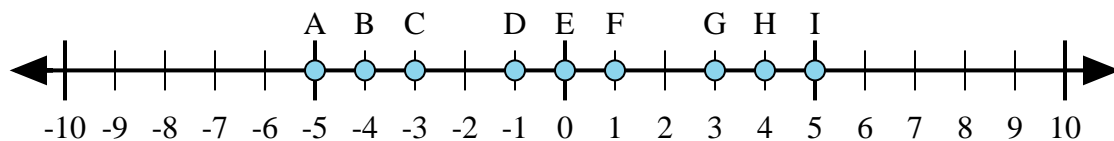
1) $1 + 2 =$

2) $(-1) + (-2) =$

3) $(-2) + 1 =$

4) $2 + (-1) =$

5) $1 + (-2) =$



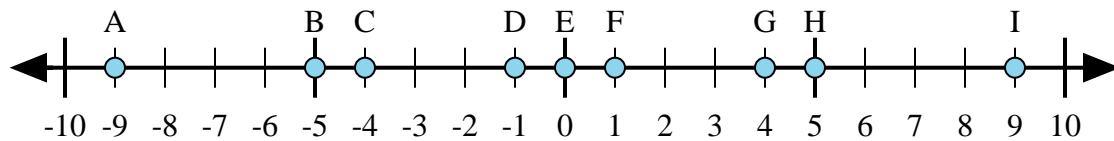
6) $4 + (-1) =$

7) $(-4) + (-1) =$

8) $(-4) + 1 =$

9) $(-1) + 4 =$

10) $1 + (-4) =$



11) $5 + (-4) =$

12) $4 + (-5) =$

13) $(-5) + 4 =$

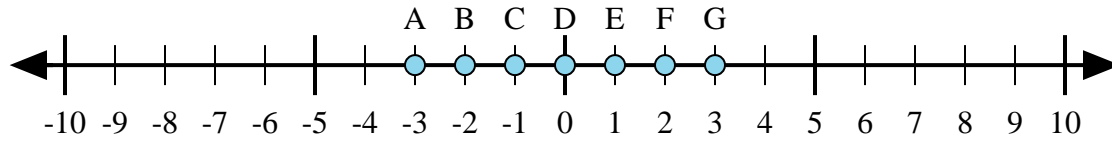
14) $5 + 4 =$

15) $(-4) + 5 =$

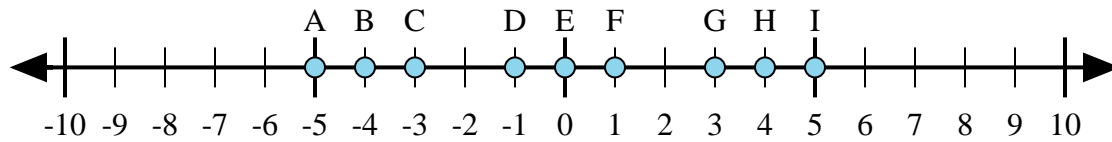
1. _____
2. _____
3. _____
4. _____
5. _____
6. _____
7. _____
8. _____
9. _____
10. _____
11. _____
12. _____
13. _____
14. _____
15. _____



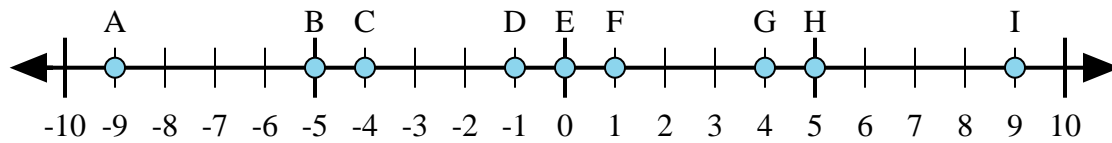
Déterminez quelle lettre de la droite numérique représente le mieux la réponse à chaque problème.



- 1) $1 + 2 =$
- 2) $(-1) + (-2) =$
- 3) $(-2) + 1 =$
- 4) $2 + (-1) =$
- 5) $1 + (-2) =$



- 6) $4 + (-1) =$
- 7) $(-4) + (-1) =$
- 8) $(-4) + 1 =$
- 9) $(-1) + 4 =$
- 10) $1 + (-4) =$



- 11) $5 + (-4) =$
- 12) $4 + (-5) =$
- 13) $(-5) + 4 =$
- 14) $5 + 4 =$
- 15) $(-4) + 5 =$

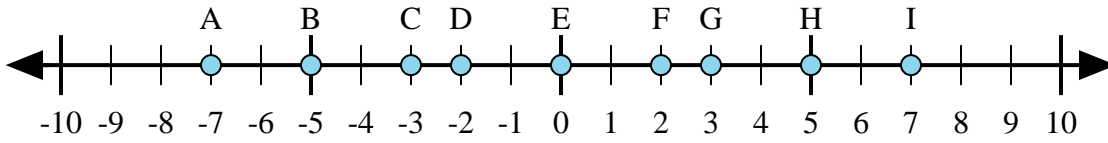
Réponses

1. **G**
2. **A**
3. **C**
4. **E**
5. **C**
6. **G**
7. **A**
8. **C**
9. **G**
10. **C**
11. **F**
12. **D**
13. **D**
14. **I**
15. **F**



Déterminez quelle lettre de la droite numérique représente le mieux la réponse à chaque problème.

Réponses



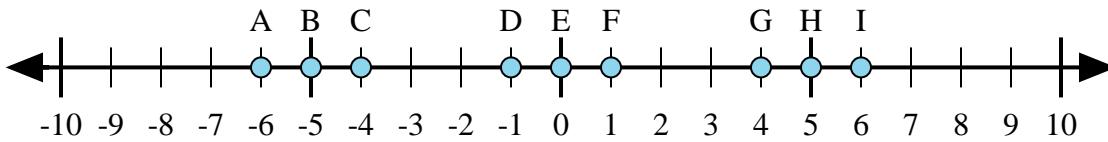
1) $2 + (-5) =$

2) $(-5) + (-2) =$

3) $(-5) + 2 =$

4) $5 + (-2) =$

5) $(-2) + 5 =$



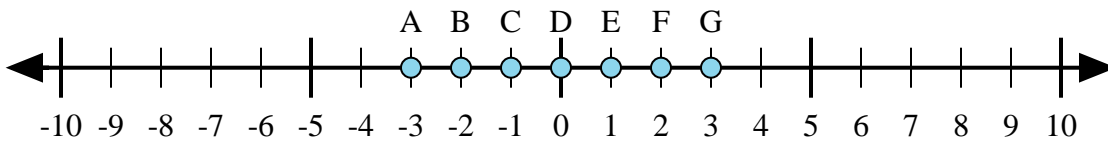
6) $1 + 5 =$

7) $(-1) + 5 =$

8) $5 + (-1) =$

9) $(-1) + (-5) =$

10) $(-5) + 1 =$



11) $(-1) + 2 =$

12) $1 + (-2) =$

13) $2 + 1 =$

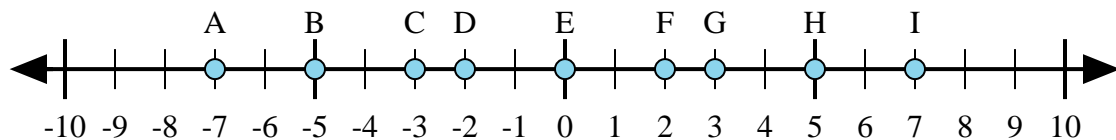
14) $2 + (-1) =$

15) $(-2) + 1 =$

1. _____
2. _____
3. _____
4. _____
5. _____
6. _____
7. _____
8. _____
9. _____
10. _____
11. _____
12. _____
13. _____
14. _____
15. _____



Déterminez quelle lettre de la droite numérique représente le mieux la réponse à chaque problème.



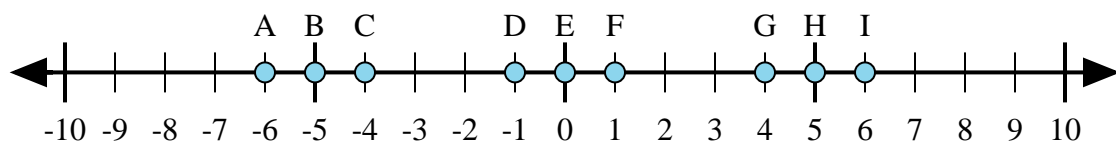
1) $2 + (-5) =$

2) $(-5) + (-2) =$

3) $(-5) + 2 =$

4) $5 + (-2) =$

5) $(-2) + 5 =$



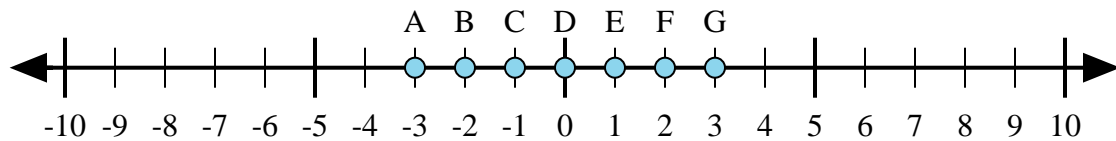
6) $1 + 5 =$

7) $(-1) + 5 =$

8) $5 + (-1) =$

9) $(-1) + (-5) =$

10) $(-5) + 1 =$



11) $(-1) + 2 =$

12) $1 + (-2) =$

13) $2 + 1 =$

14) $2 + (-1) =$

15) $(-2) + 1 =$

Réponses

1. **C**

2. **A**

3. **C**

4. **G**

5. **G**

6. **I**

7. **G**

8. **G**

9. **A**

10. **C**

11. **E**

12. **C**

13. **G**

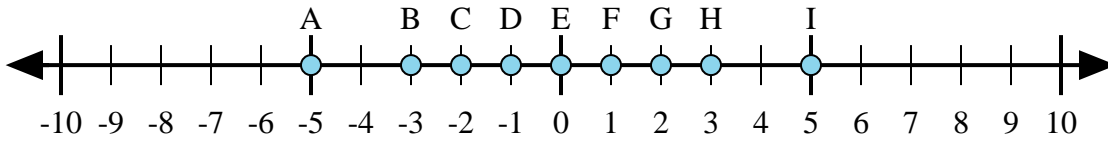
14. **E**

15. **C**



Déterminez quelle lettre de la droite numérique représente le mieux la réponse à chaque problème.

Réponses



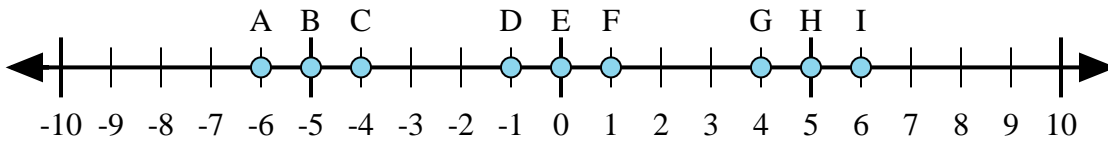
1) $2 + (-3) =$

2) $(-3) + (-2) =$

3) $3 + (-2) =$

4) $3 + 2 =$

5) $(-2) + 3 =$



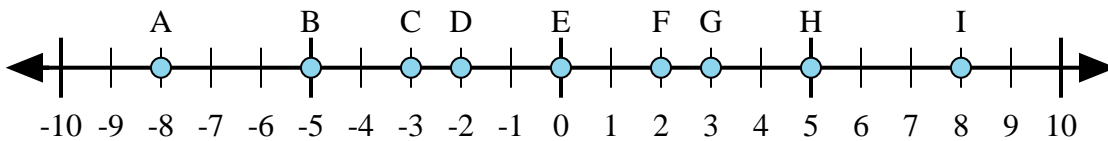
6) $(-1) + 5 =$

7) $(-5) + (-1) =$

8) $5 + (-1) =$

9) $1 + (-5) =$

10) $5 + 1 =$



11) $5 + 3 =$

12) $(-5) + 3 =$

13) $5 + (-3) =$

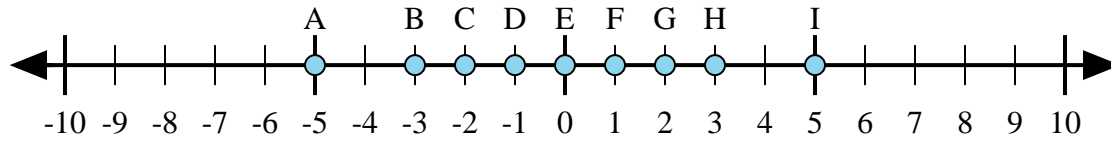
14) $3 + (-5) =$

15) $(-3) + 5 =$

1. _____
2. _____
3. _____
4. _____
5. _____
6. _____
7. _____
8. _____
9. _____
10. _____
11. _____
12. _____
13. _____
14. _____
15. _____



Déterminez quelle lettre de la droite numérique représente le mieux la réponse à chaque problème.



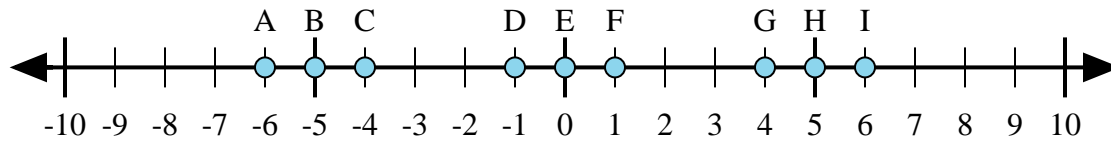
1) $2 + (-3) =$

2) $(-3) + (-2) =$

3) $3 + (-2) =$

4) $3 + 2 =$

5) $(-2) + 3 =$



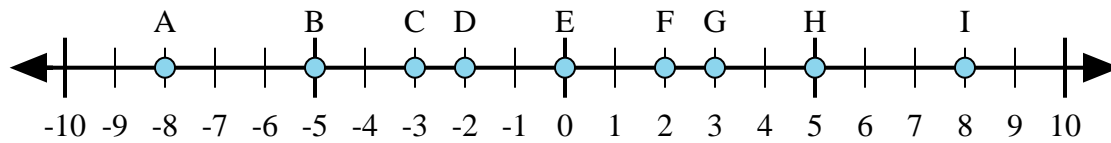
6) $(-1) + 5 =$

7) $(-5) + (-1) =$

8) $5 + (-1) =$

9) $1 + (-5) =$

10) $5 + 1 =$



11) $5 + 3 =$

12) $(-5) + 3 =$

13) $5 + (-3) =$

14) $3 + (-5) =$

15) $(-3) + 5 =$

Réponses

1. **D**

2. **A**

3. **F**

4. **I**

5. **F**

6. **G**

7. **A**

8. **G**

9. **C**

10. **I**

11. **I**

12. **D**

13. **F**

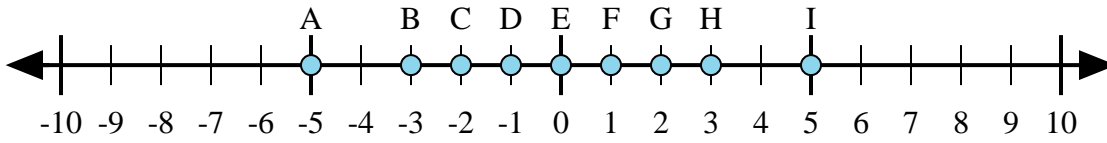
14. **D**

15. **F**



Déterminez quelle lettre de la droite numérique représente le mieux la réponse à chaque problème.

Réponses



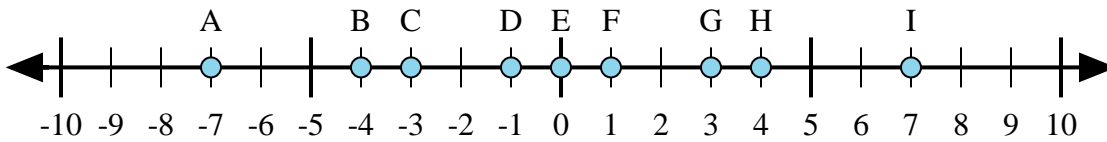
1) $3 + (-2) =$

2) $(-2) + 3 =$

3) $2 + 3 =$

4) $(-2) + (-3) =$

5) $2 + (-3) =$



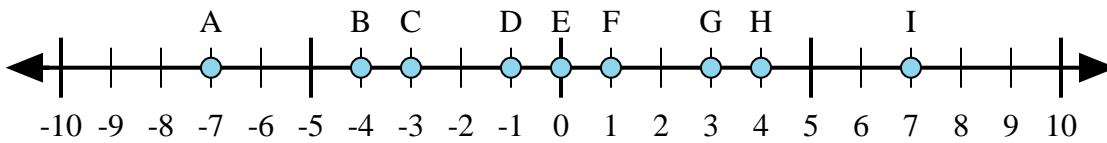
6) $4 + (-3) =$

7) $3 + 4 =$

8) $(-4) + 3 =$

9) $(-3) + 4 =$

10) $(-3) + (-4) =$



11) $4 + 3 =$

12) $4 + (-3) =$

13) $(-4) + 3 =$

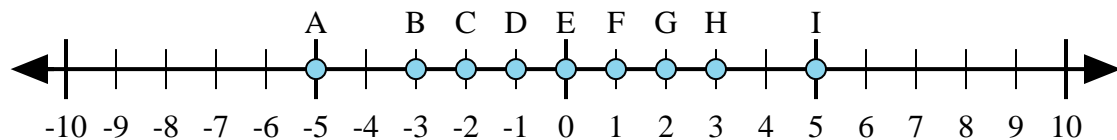
14) $(-3) + 4 =$

15) $(-4) + (-3) =$

1. _____
2. _____
3. _____
4. _____
5. _____
6. _____
7. _____
8. _____
9. _____
10. _____
11. _____
12. _____
13. _____
14. _____
15. _____



Déterminez quelle lettre de la droite numérique représente le mieux la réponse à chaque problème.



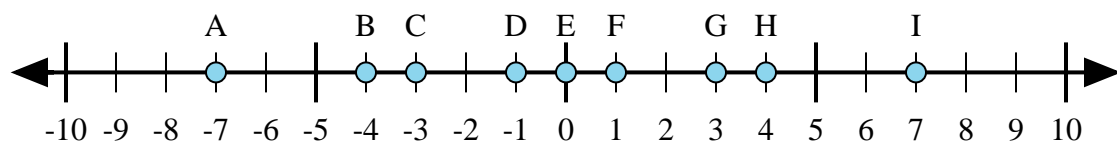
1) $3 + (-2) =$

2) $(-2) + 3 =$

3) $2 + 3 =$

4) $(-2) + (-3) =$

5) $2 + (-3) =$



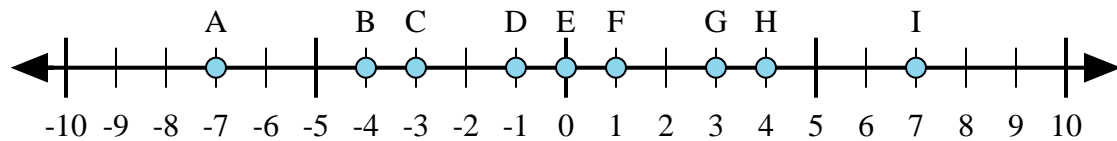
6) $4 + (-3) =$

7) $3 + 4 =$

8) $(-4) + 3 =$

9) $(-3) + 4 =$

10) $(-3) + (-4) =$



11) $4 + 3 =$

12) $4 + (-3) =$

13) $(-4) + 3 =$

14) $(-3) + 4 =$

15) $(-4) + (-3) =$

Réponses

1. **F**

2. **F**

3. **I**

4. **A**

5. **D**

6. **F**

7. **I**

8. **D**

9. **F**

10. **A**

11. **I**

12. **F**

13. **D**

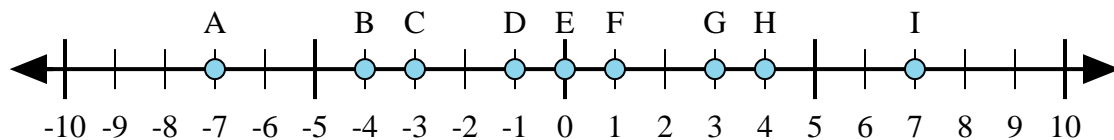
14. **F**

15. **A**



Déterminez quelle lettre de la droite numérique représente le mieux la réponse à chaque problème.

Réponses



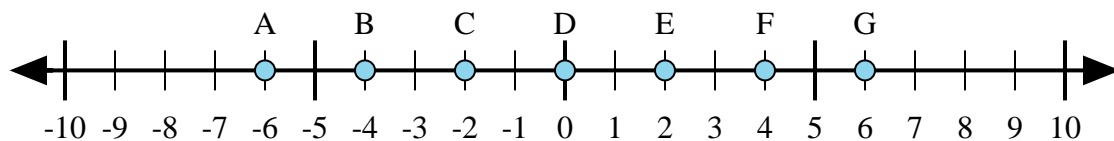
1) $4 + (-3) =$

2) $3 + (-4) =$

3) $(-3) + (-4) =$

4) $(-4) + 3 =$

5) $3 + 4 =$



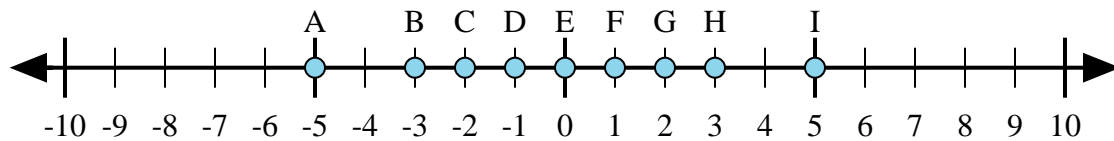
6) $(-4) + 2 =$

7) $(-2) + 4 =$

8) $4 + 2 =$

9) $(-4) + (-2) =$

10) $2 + (-4) =$



11) $(-3) + 2 =$

12) $2 + (-3) =$

13) $(-2) + 3 =$

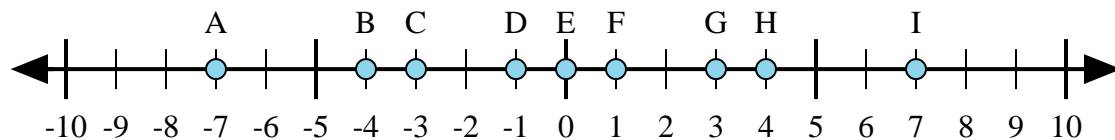
14) $(-3) + (-2) =$

15) $3 + (-2) =$

1. _____
2. _____
3. _____
4. _____
5. _____
6. _____
7. _____
8. _____
9. _____
10. _____
11. _____
12. _____
13. _____
14. _____
15. _____



Déterminez quelle lettre de la droite numérique représente le mieux la réponse à chaque problème.



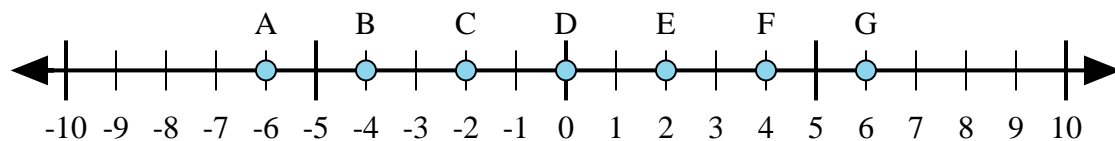
1) $4 + (-3) =$

2) $3 + (-4) =$

3) $(-3) + (-4) =$

4) $(-4) + 3 =$

5) $3 + 4 =$



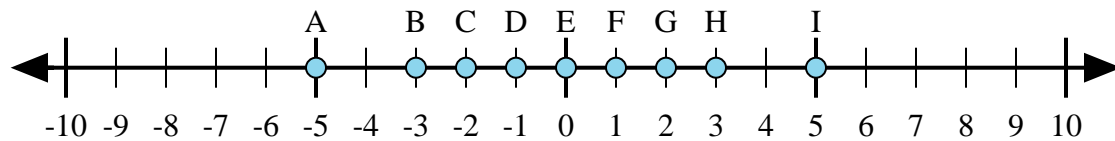
6) $(-4) + 2 =$

7) $(-2) + 4 =$

8) $4 + 2 =$

9) $(-4) + (-2) =$

10) $2 + (-4) =$



11) $(-3) + 2 =$

12) $2 + (-3) =$

13) $(-2) + 3 =$

14) $(-3) + (-2) =$

15) $3 + (-2) =$

Réponses

1. **F**

2. **D**

3. **A**

4. **D**

5. **I**

6. **C**

7. **E**

8. **G**

9. **A**

10. **C**

11. **D**

12. **D**

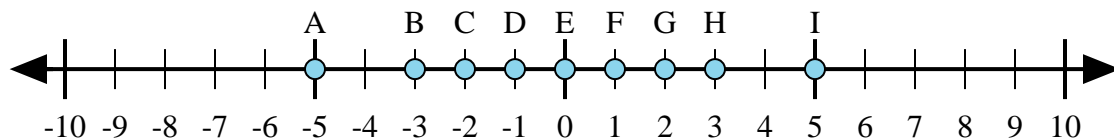
13. **F**

14. **A**

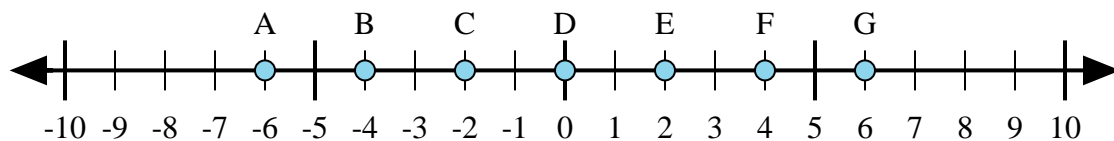
15. **F**



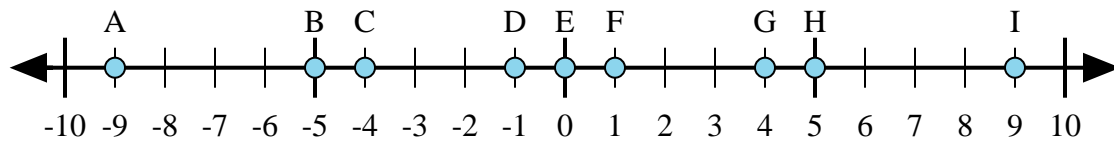
Déterminez quelle lettre de la droite numérique représente le mieux la réponse à chaque problème.



- 1) $2 + 3 =$
- 2) $2 + (-3) =$
- 3) $3 + (-2) =$
- 4) $(-2) + 3 =$
- 5) $(-3) + 2 =$



- 6) $4 + (-2) =$
- 7) $2 + 4 =$
- 8) $(-2) + 4 =$
- 9) $(-4) + 2 =$
- 10) $(-2) + (-4) =$



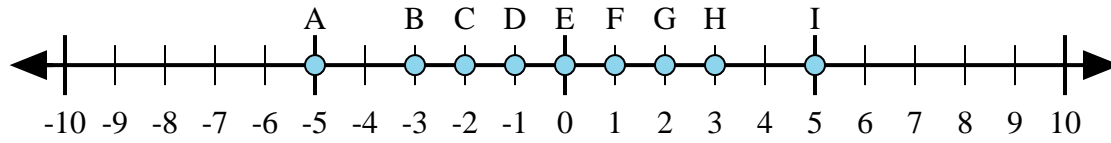
- 11) $5 + (-4) =$
- 12) $4 + (-5) =$
- 13) $4 + 5 =$
- 14) $(-5) + 4 =$
- 15) $(-4) + 5 =$

Réponses

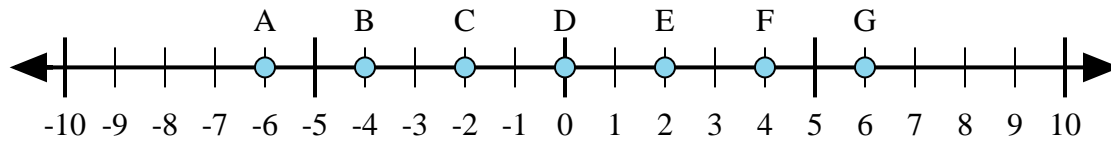
1. _____
2. _____
3. _____
4. _____
5. _____
6. _____
7. _____
8. _____
9. _____
10. _____
11. _____
12. _____
13. _____
14. _____
15. _____



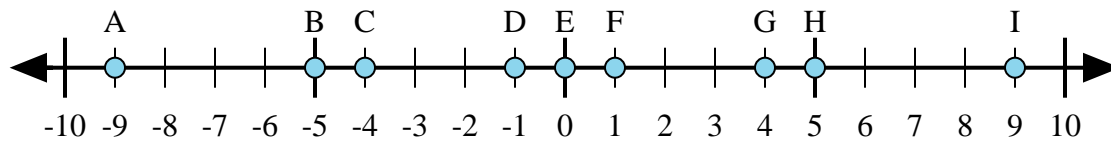
Déterminez quelle lettre de la droite numérique représente le mieux la réponse à chaque problème.



- 1) $2 + 3 =$
- 2) $2 + (-3) =$
- 3) $3 + (-2) =$
- 4) $(-2) + 3 =$
- 5) $(-3) + 2 =$



- 6) $4 + (-2) =$
- 7) $2 + 4 =$
- 8) $(-2) + 4 =$
- 9) $(-4) + 2 =$
- 10) $(-2) + (-4) =$



- 11) $5 + (-4) =$
- 12) $4 + (-5) =$
- 13) $4 + 5 =$
- 14) $(-5) + 4 =$
- 15) $(-4) + 5 =$

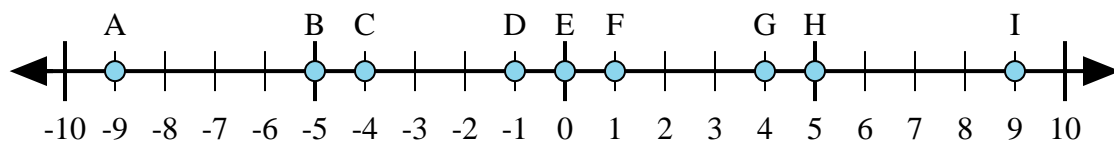
Réponses

1. **I**
2. **D**
3. **F**
4. **F**
5. **D**
6. **E**
7. **G**
8. **E**
9. **C**
10. **A**
11. **F**
12. **D**
13. **I**
14. **D**
15. **F**



Déterminez quelle lettre de la droite numérique représente le mieux la réponse à chaque problème.

Réponses



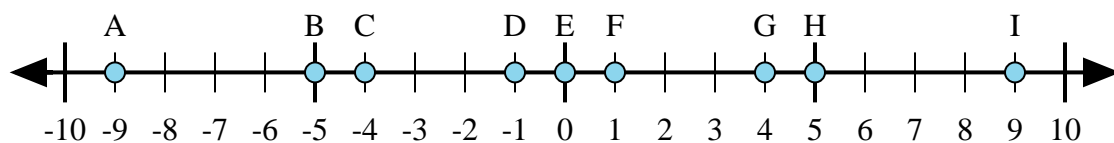
1) $(-5) + 4 =$

2) $(-4) + (-5) =$

3) $4 + 5 =$

4) $(-4) + 5 =$

5) $5 + (-4) =$



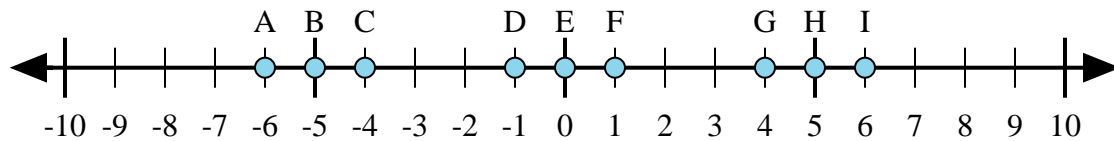
6) $(-5) + (-4) =$

7) $5 + (-4) =$

8) $4 + (-5) =$

9) $(-5) + 4 =$

10) $5 + 4 =$



11) $(-5) + (-1) =$

12) $(-5) + 1 =$

13) $5 + 1 =$

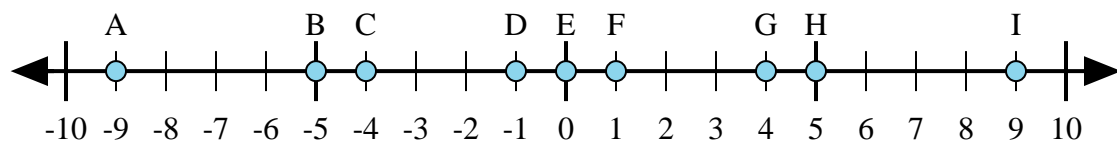
14) $1 + (-5) =$

15) $(-1) + 5 =$

1. _____
2. _____
3. _____
4. _____
5. _____
6. _____
7. _____
8. _____
9. _____
10. _____
11. _____
12. _____
13. _____
14. _____
15. _____



Déterminez quelle lettre de la droite numérique représente le mieux la réponse à chaque problème.



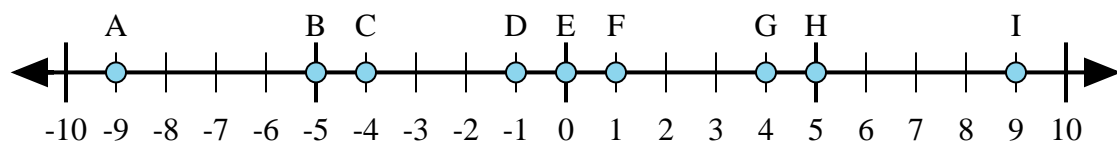
1) $(-5) + 4 =$

2) $(-4) + (-5) =$

3) $4 + 5 =$

4) $(-4) + 5 =$

5) $5 + (-4) =$



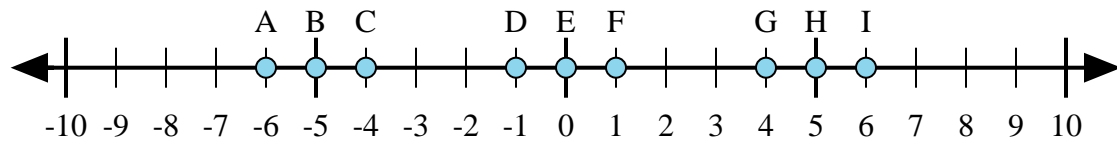
6) $(-5) + (-4) =$

7) $5 + (-4) =$

8) $4 + (-5) =$

9) $(-5) + 4 =$

10) $5 + 4 =$



11) $(-5) + (-1) =$

12) $(-5) + 1 =$

13) $5 + 1 =$

14) $1 + (-5) =$

15) $(-1) + 5 =$

Réponses

1. **D**

2. **A**

3. **I**

4. **F**

5. **F**

6. **A**

7. **F**

8. **D**

9. **D**

10. **I**

11. **A**

12. **C**

13. **I**

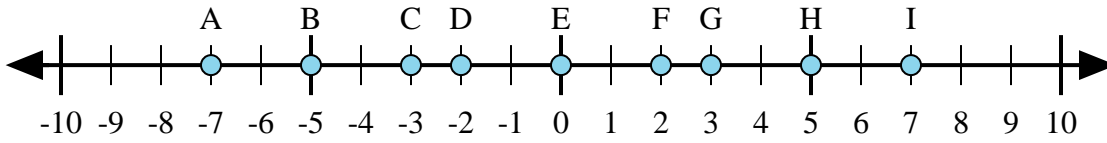
14. **C**

15. **G**



Déterminez quelle lettre de la droite numérique représente le mieux la réponse à chaque problème.

Réponses



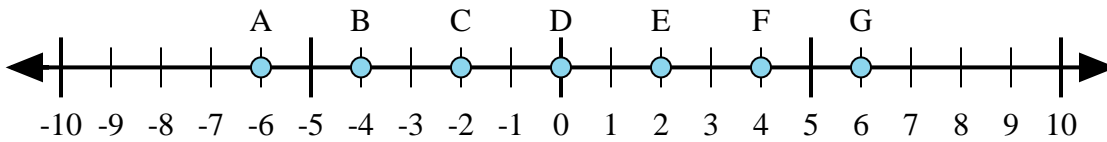
1) $(-5) + 2 =$

2) $(-2) + (-5) =$

3) $2 + 5 =$

4) $(-2) + 5 =$

5) $2 + (-5) =$



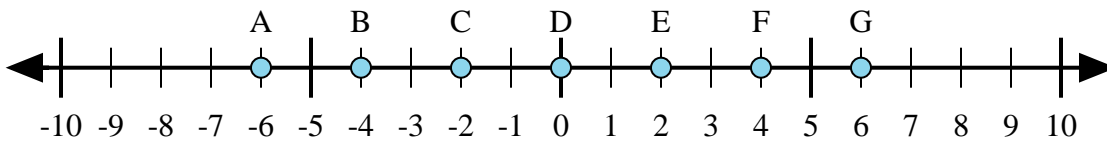
6) $(-2) + 4 =$

7) $(-4) + 2 =$

8) $(-2) + (-4) =$

9) $2 + (-4) =$

10) $2 + 4 =$



11) $4 + 2 =$

12) $(-4) + (-2) =$

13) $(-2) + 4 =$

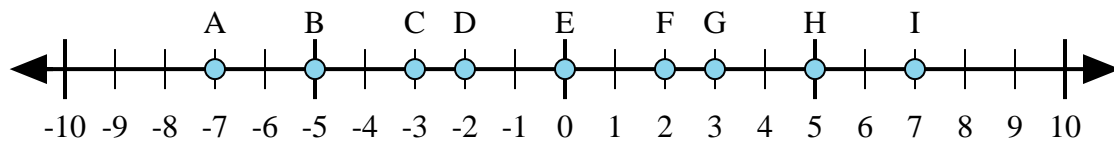
14) $(-4) + 2 =$

15) $2 + (-4) =$

1. _____
2. _____
3. _____
4. _____
5. _____
6. _____
7. _____
8. _____
9. _____
10. _____
11. _____
12. _____
13. _____
14. _____
15. _____



Déterminez quelle lettre de la droite numérique représente le mieux la réponse à chaque problème.



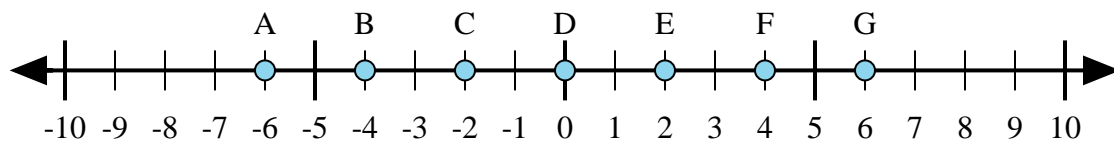
1) $(-5) + 2 =$

2) $(-2) + (-5) =$

3) $2 + 5 =$

4) $(-2) + 5 =$

5) $2 + (-5) =$



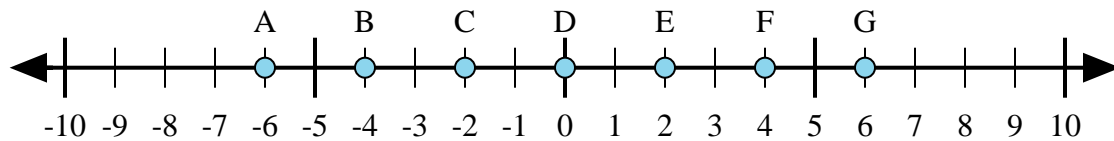
6) $(-2) + 4 =$

7) $(-4) + 2 =$

8) $(-2) + (-4) =$

9) $2 + (-4) =$

10) $2 + 4 =$



11) $4 + 2 =$

12) $(-4) + (-2) =$

13) $(-2) + 4 =$

14) $(-4) + 2 =$

15) $2 + (-4) =$

Réponses

1. **C**

2. **A**

3. **I**

4. **G**

5. **C**

6. **E**

7. **C**

8. **A**

9. **C**

10. **G**

11. **G**

12. **A**

13. **E**

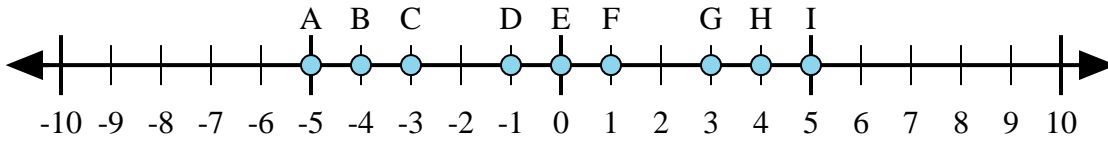
14. **C**

15. **C**



Déterminez quelle lettre de la droite numérique représente le mieux la réponse à chaque problème.

Réponses



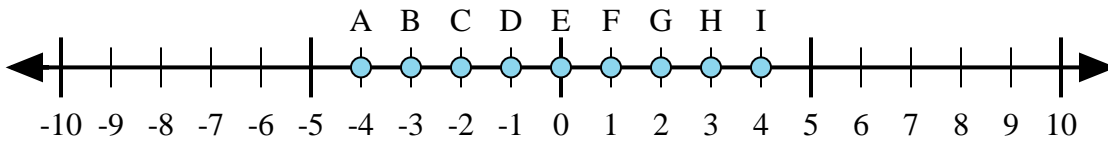
1) $4 + (-1) =$

2) $4 + 1 =$

3) $1 + (-4) =$

4) $(-4) + (-1) =$

5) $(-4) + 1 =$



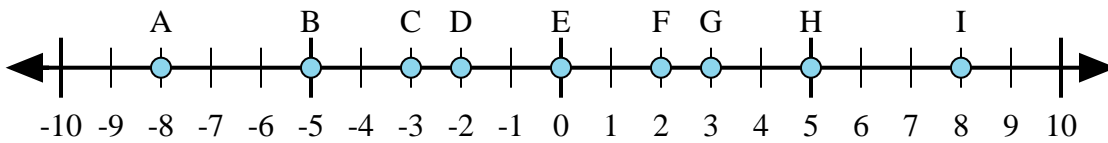
6) $(-3) + (-1) =$

7) $(-3) + 1 =$

8) $3 + 1 =$

9) $1 + (-3) =$

10) $(-1) + 3 =$



11) $3 + (-5) =$

12) $(-5) + 3 =$

13) $5 + 3 =$

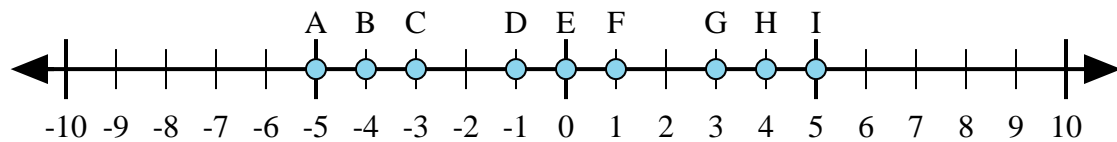
14) $(-3) + 5 =$

15) $(-5) + (-3) =$

1. _____
2. _____
3. _____
4. _____
5. _____
6. _____
7. _____
8. _____
9. _____
10. _____
11. _____
12. _____
13. _____
14. _____
15. _____



Déterminez quelle lettre de la droite numérique représente le mieux la réponse à chaque problème.



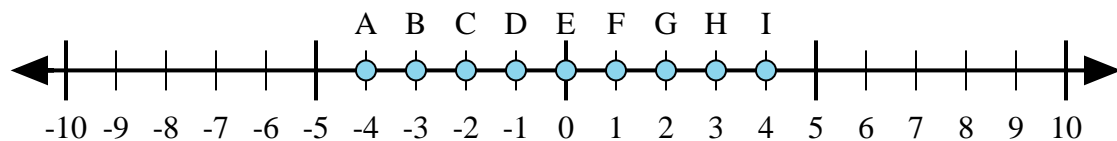
1) $4 + (-1) =$

2) $4 + 1 =$

3) $1 + (-4) =$

4) $(-4) + (-1) =$

5) $(-4) + 1 =$



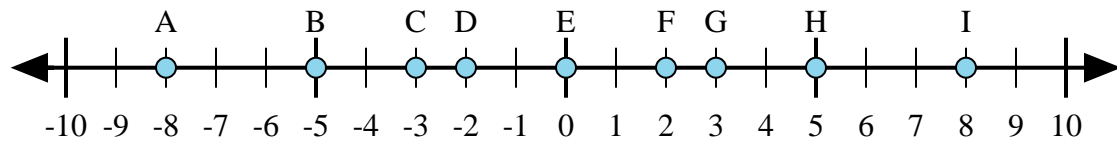
6) $(-3) + (-1) =$

7) $(-3) + 1 =$

8) $3 + 1 =$

9) $1 + (-3) =$

10) $(-1) + 3 =$



11) $3 + (-5) =$

12) $(-5) + 3 =$

13) $5 + 3 =$

14) $(-3) + 5 =$

15) $(-5) + (-3) =$

Réponses

1. **G**

2. **I**

3. **C**

4. **A**

5. **C**

6. **A**

7. **C**

8. **I**

9. **C**

10. **G**

11. **D**

12. **D**

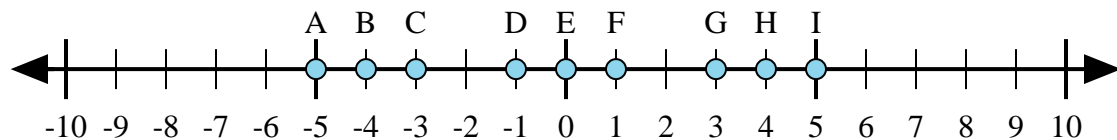
13. **I**

14. **F**

15. **A**



Déterminez quelle lettre de la droite numérique représente le mieux la réponse à chaque problème.



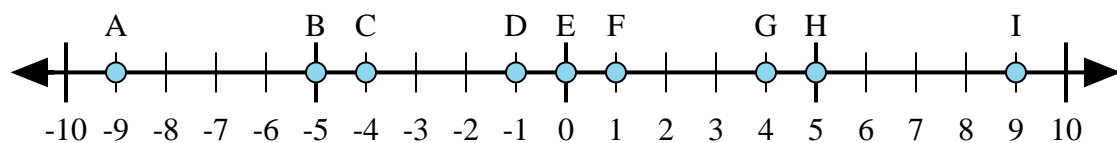
1) $4 + 1 =$

2) $4 + (-1) =$

3) $1 + (-4) =$

4) $(-4) + (-1) =$

5) $(-1) + 4 =$



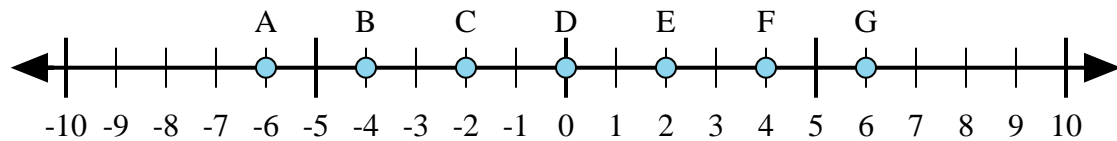
6) $(-4) + 5 =$

7) $4 + (-5) =$

8) $4 + 5 =$

9) $(-4) + (-5) =$

10) $(-5) + 4 =$



11) $(-4) + (-2) =$

12) $2 + (-4) =$

13) $4 + 2 =$

14) $(-2) + 4 =$

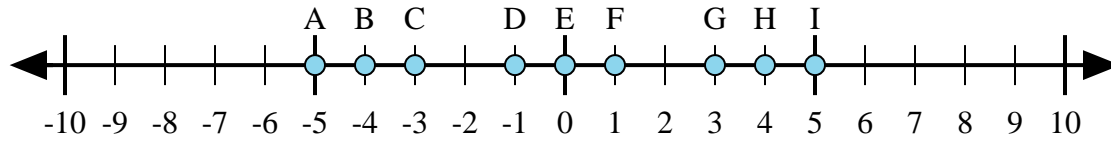
15) $4 + (-2) =$

Réponses

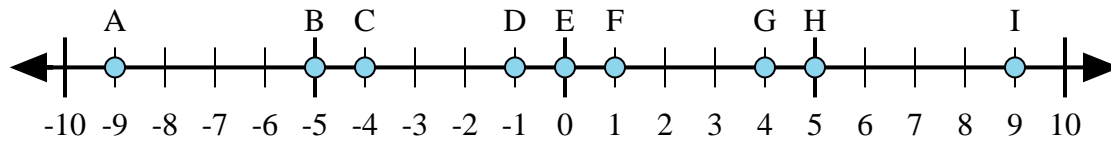
1. _____
2. _____
3. _____
4. _____
5. _____
6. _____
7. _____
8. _____
9. _____
10. _____
11. _____
12. _____
13. _____
14. _____
15. _____



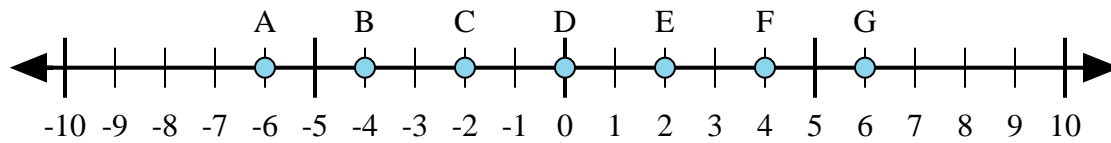
Déterminez quelle lettre de la droite numérique représente le mieux la réponse à chaque problème.



- 1) $4 + 1 =$
- 2) $4 + (-1) =$
- 3) $1 + (-4) =$
- 4) $(-4) + (-1) =$
- 5) $(-1) + 4 =$



- 6) $(-4) + 5 =$
- 7) $4 + (-5) =$
- 8) $4 + 5 =$
- 9) $(-4) + (-5) =$
- 10) $(-5) + 4 =$



- 11) $(-4) + (-2) =$
- 12) $2 + (-4) =$
- 13) $4 + 2 =$
- 14) $(-2) + 4 =$
- 15) $4 + (-2) =$

Réponses

1. **I**
2. **G**
3. **C**
4. **A**
5. **G**
6. **F**
7. **D**
8. **I**
9. **A**
10. **D**
11. **A**
12. **C**
13. **G**
14. **E**
15. **E**