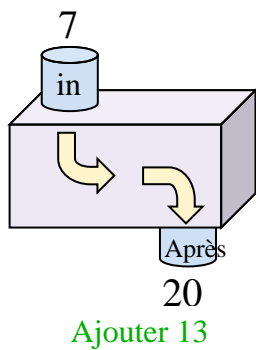


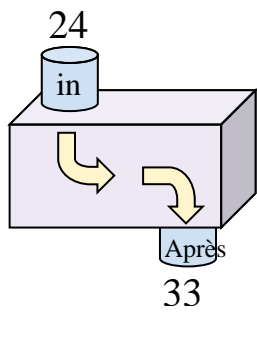


Déterminez la règle appliquée à chaque machine à fonctions.

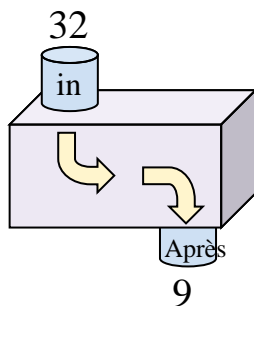
Ex)



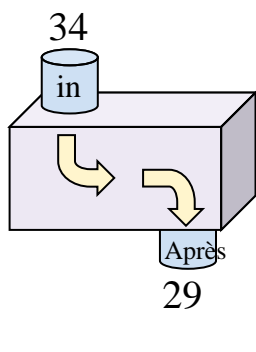
1)



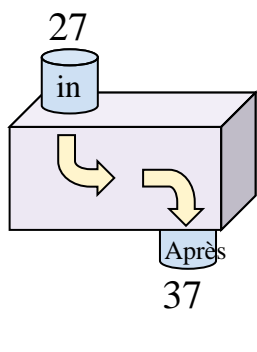
2)



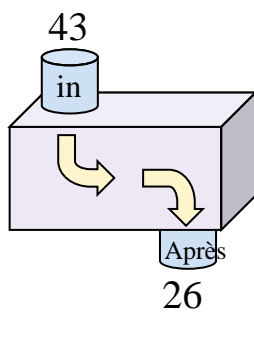
3)



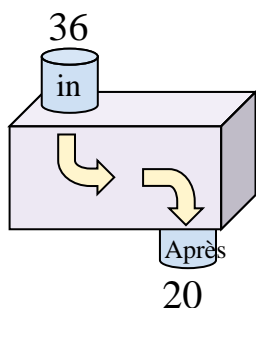
4)



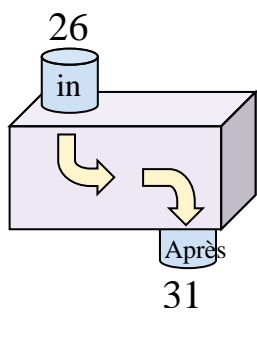
5)



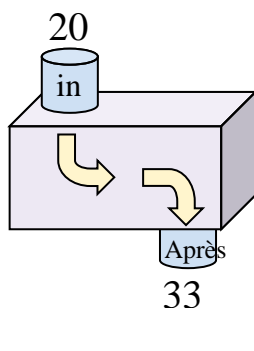
6)



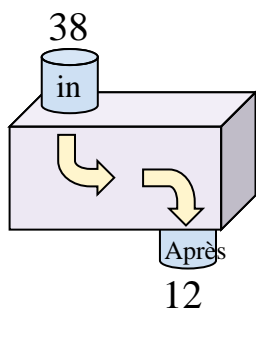
7)



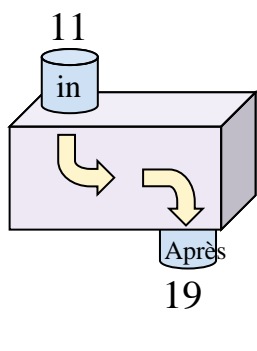
8)



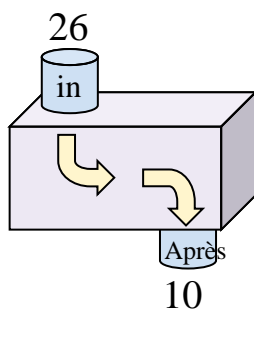
9)



10)



11)



**Réponses**

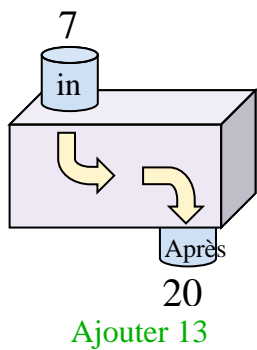
Ex. **Ajouter 13**

1. \_\_\_\_\_
2. \_\_\_\_\_
3. \_\_\_\_\_
4. \_\_\_\_\_
5. \_\_\_\_\_
6. \_\_\_\_\_
7. \_\_\_\_\_
8. \_\_\_\_\_
9. \_\_\_\_\_
10. \_\_\_\_\_
11. \_\_\_\_\_

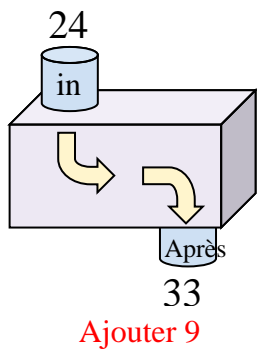


Déterminez la règle appliquée à chaque machine à fonctions.

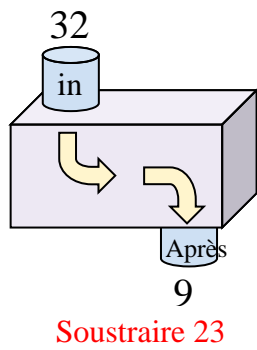
Ex)



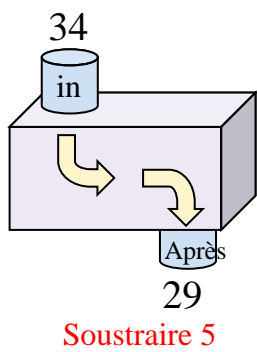
1)



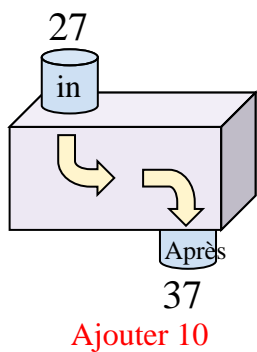
2)



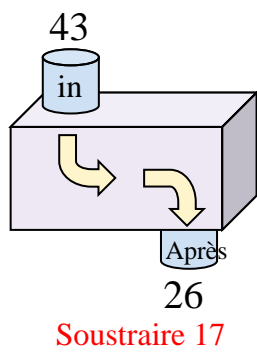
3)



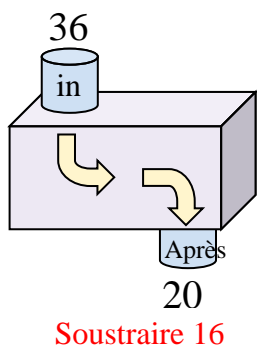
4)



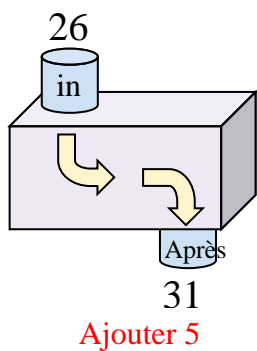
5)



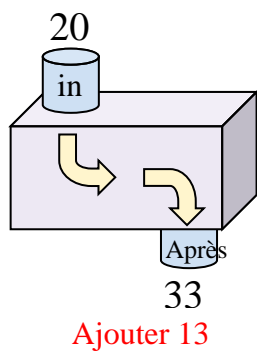
6)



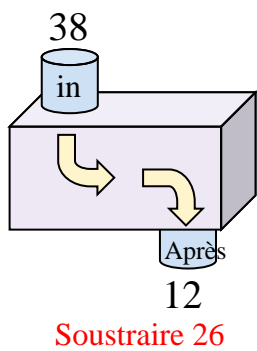
7)



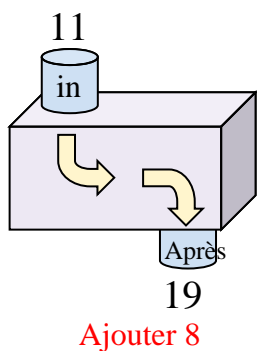
8)



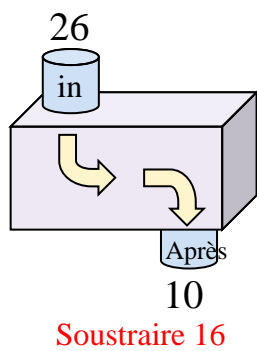
9)



10)



11)



**Réponses**

Ex. **Ajouter 13**

1. **Ajouter 9**

2. **Soustraire 23**

3. **Soustraire 5**

4. **Ajouter 10**

5. **Soustraire 17**

6. **Soustraire 16**

7. **Ajouter 5**

8. **Ajouter 13**

9. **Soustraire 26**

10. **Ajouter 8**

11. **Soustraire 16**