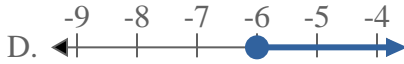
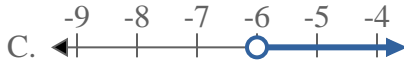
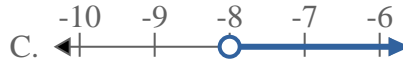
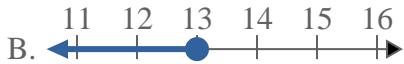
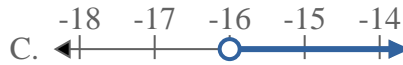
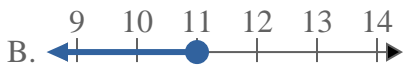
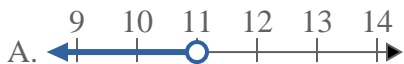
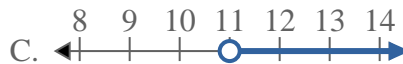
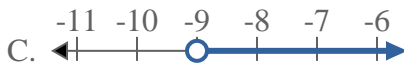
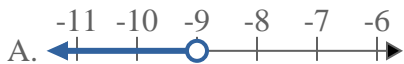
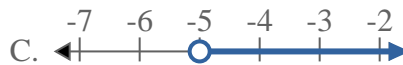
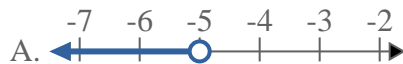




Résoudre chaque problème.

Réponses1) Quelle réponse représente le mieux $X \leq -6$ 2) Quelle réponse représente le mieux $X > -8$ 3) Quelle réponse représente le mieux $X < 13$ 4) Quelle réponse représente le mieux $X < -16$ 5) Quelle réponse représente le mieux $X \leq 11$ 6) Quelle réponse représente le mieux $X \geq 11$ 7) Quelle réponse représente le mieux $X > -9$ 8) Quelle réponse représente le mieux $X \geq -5$ 

1. _____

2. _____

3. _____

4. _____

5. _____

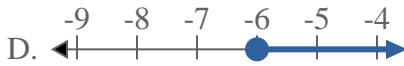
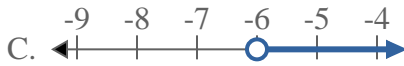
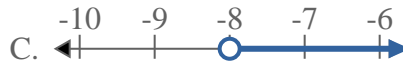
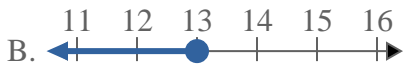
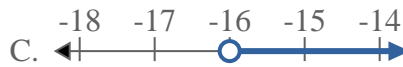
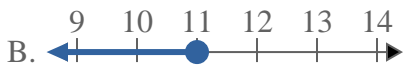
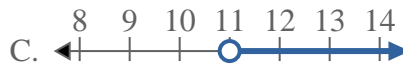
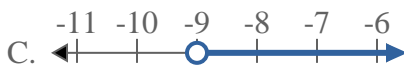
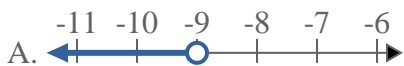
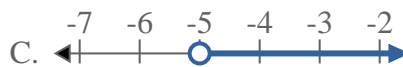
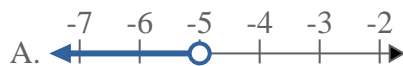
6. _____

7. _____

8. _____



Résoudre chaque problème.

Réponses1) Quelle réponse représente le mieux $X \leq -6$ 2) Quelle réponse représente le mieux $X > -8$ 3) Quelle réponse représente le mieux $X < 13$ 4) Quelle réponse représente le mieux $X < -16$ 5) Quelle réponse représente le mieux $X \leq 11$ 6) Quelle réponse représente le mieux $X \geq 11$ 7) Quelle réponse représente le mieux $X > -9$ 8) Quelle réponse représente le mieux $X \geq -5$ 1. **B**2. **C**3. **A**4. **A**5. **B**6. **D**7. **C**8. **D**