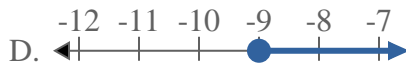
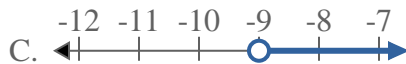
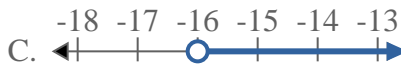
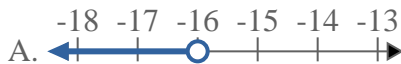
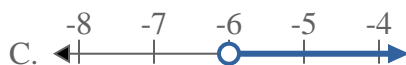
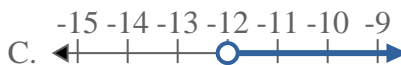
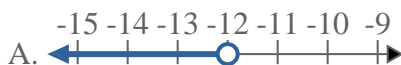
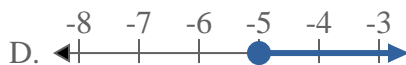
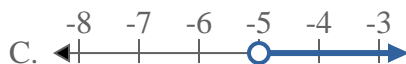
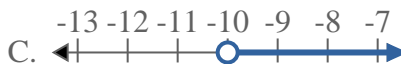
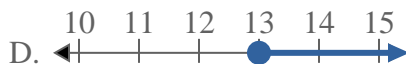
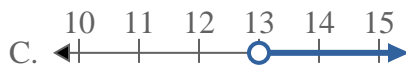
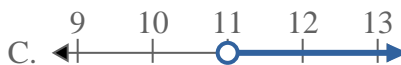




Résoudre chaque problème.

**Réponses**1) Quelle réponse représente le mieux  $X < -9$ 2) Quelle réponse représente le mieux  $X \leq -16$ 3) Quelle réponse représente le mieux  $X \geq -6$ 4) Quelle réponse représente le mieux  $X > -12$ 5) Quelle réponse représente le mieux  $X \leq -5$ 6) Quelle réponse représente le mieux  $X < -10$ 7) Quelle réponse représente le mieux  $X > 13$ 8) Quelle réponse représente le mieux  $X < 11$ 

1. \_\_\_\_\_

2. \_\_\_\_\_

3. \_\_\_\_\_

4. \_\_\_\_\_

5. \_\_\_\_\_

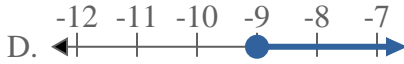
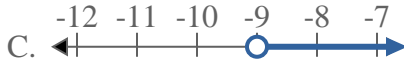
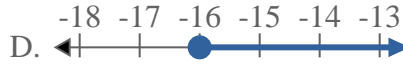
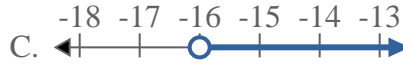
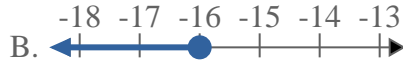
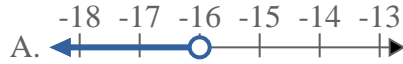
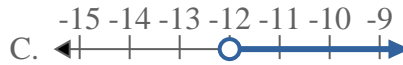
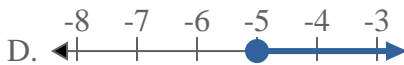
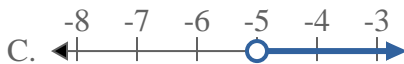
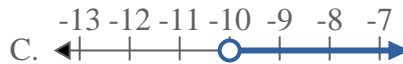
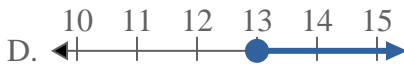
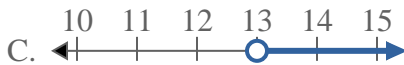
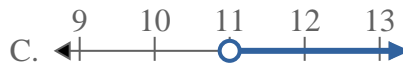
6. \_\_\_\_\_

7. \_\_\_\_\_

8. \_\_\_\_\_



Résoudre chaque problème.

**Réponses**1) Quelle réponse représente le mieux  $X < -9$ 2) Quelle réponse représente le mieux  $X \leq -16$ 3) Quelle réponse représente le mieux  $X \geq -6$ 4) Quelle réponse représente le mieux  $X > -12$ 5) Quelle réponse représente le mieux  $X \leq -5$ 6) Quelle réponse représente le mieux  $X < -10$ 7) Quelle réponse représente le mieux  $X > 13$ 8) Quelle réponse représente le mieux  $X < 11$ 1. **A**2. **B**3. **D**4. **C**5. **B**6. **A**7. **C**8. **A**