



Avec les droites numériques arrondir chaque nombre à la centaine la plus proche.

Réponses

Ex)

25 932



Ex. **25 900**

1)

28 551



1. _____

2)

854



2. _____

3)

831



3. _____

4)

274



4. _____

5)

12 793



5. _____

6)

5 558



6. _____

7)

5 688



7. _____

8)

134



8. _____

9)

9 335



9. _____

10)

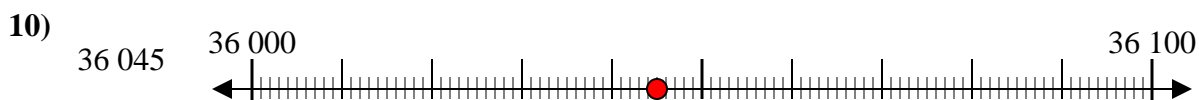
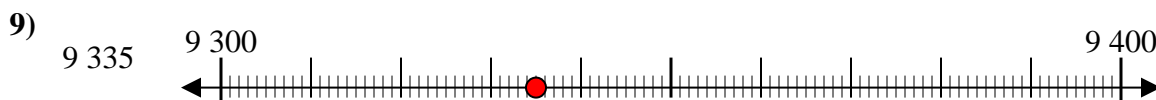
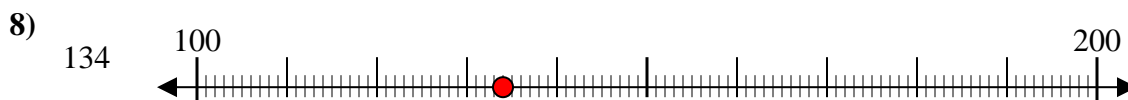
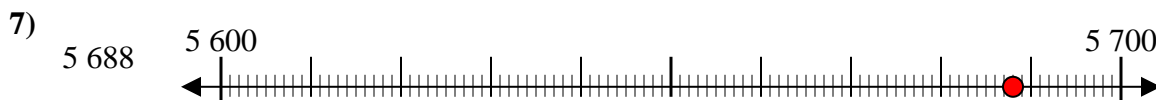
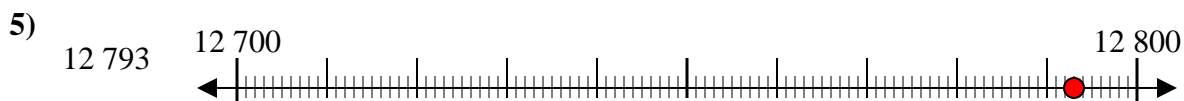
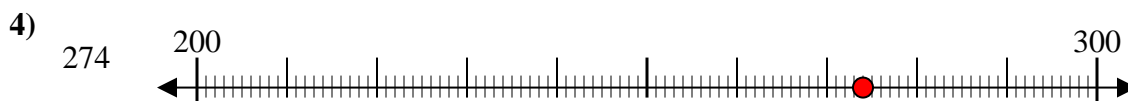
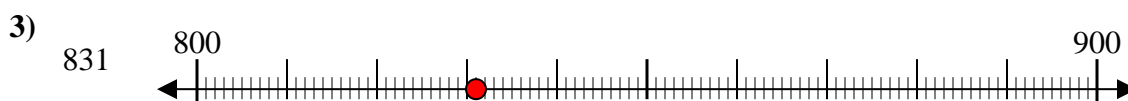
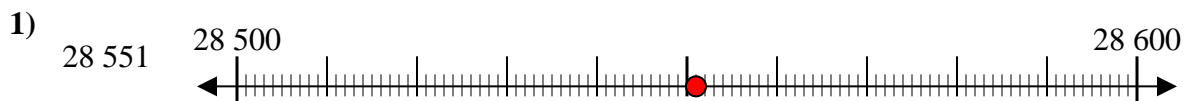
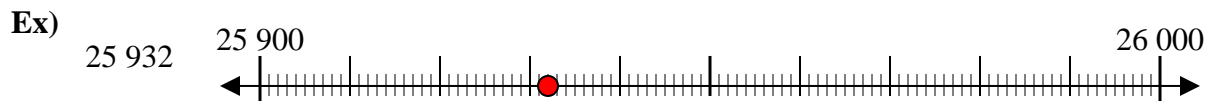
36 045



10. _____



Avec les droites numériques arrondir chaque nombre à la centaine la plus proche.



Réponses

Ex. 25 900

1. 28 600

2. 900

3. 800

4. 300

5. 12 800

6. 5 600

7. 5 700

8. 100

9. 9 300

10. 36 000