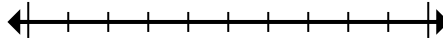




Marquez l'emplacement (approximatif) sur la droite numérique, puis résolvez.

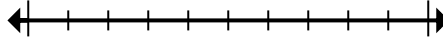
**Réponses**

1) Round 808 484 to the nearest ten thousand.



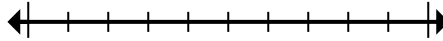
1. \_\_\_\_\_

2) Round 832 264 to the nearest thousand.



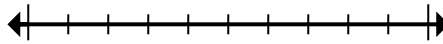
2. \_\_\_\_\_

3) Round 10 622 917 to the nearest hundred thousand.



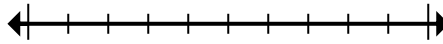
3. \_\_\_\_\_

4) Round 7 142 074 to the nearest ten thousand.



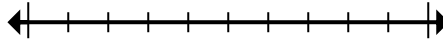
4. \_\_\_\_\_

5) Round 72 745 to the nearest ten thousand.



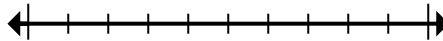
5. \_\_\_\_\_

6) Round 314 to the nearest hundred.



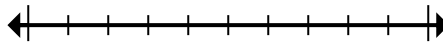
6. \_\_\_\_\_

7) Round 2 720 to the nearest thousand.



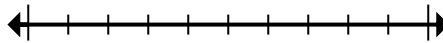
7. \_\_\_\_\_

8) Round 80 764 to the nearest ten thousand.



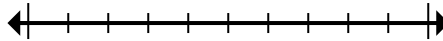
8. \_\_\_\_\_

9) Round 633 653 to the nearest thousand.



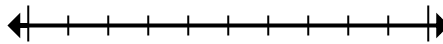
9. \_\_\_\_\_

10) Round 151 433 to the nearest hundred.



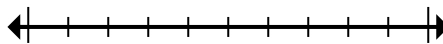
10. \_\_\_\_\_

11) Round 2 415 to the nearest hundred.



11. \_\_\_\_\_

12) Round 42 974 961 to the nearest hundred thousand.



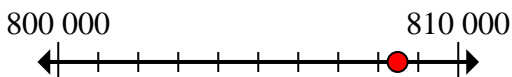
12. \_\_\_\_\_



Marquez l'emplacement (approximatif) sur la droite numérique, puis résolvez.

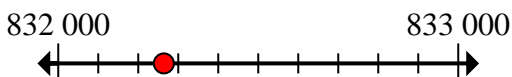
**Réponses**

1) Round 808 484 to the nearest ten thousand.



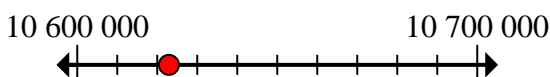
1. 810 000

2) Round 832 264 to the nearest thousand.



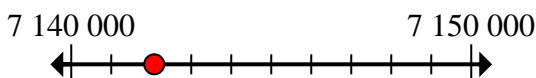
2. 832 000

3) Round 10 622 917 to the nearest hundred thousand.



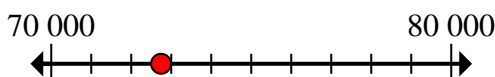
3. 10 600 000

4) Round 7 142 074 to the nearest ten thousand.



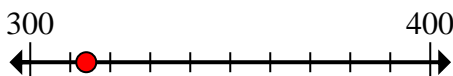
4. 7 140 000

5) Round 72 745 to the nearest ten thousand.



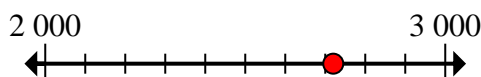
5. 70 000

6) Round 314 to the nearest hundred.



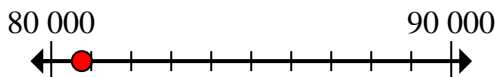
6. 300

7) Round 2 720 to the nearest thousand.



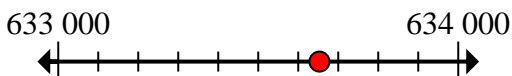
7. 3 000

8) Round 80 764 to the nearest ten thousand.



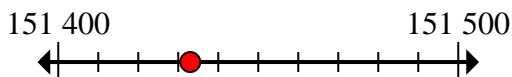
8. 80 000

9) Round 633 653 to the nearest thousand.



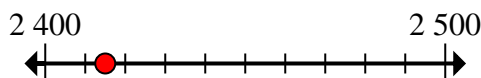
9. 634 000

10) Round 151 433 to the nearest hundred.



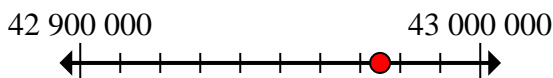
10. 151 400

11) Round 2 415 to the nearest hundred.



11. 2 400

12) Round 42 974 961 to the nearest hundred thousand.



12. 43 000 000

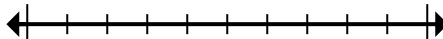


Marquez l'emplacement (approximatif) sur la droite numérique, puis résolvez.

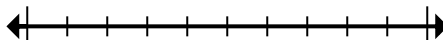
3 000	151 400	832 000	10 600 000
70 000	80 000	7 140 000	300
634 000	810 000	2 400	43 000 000

**Réponses**

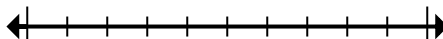
1) Round 808 484 to the nearest ten thousand.



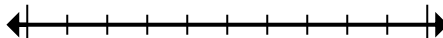
2) Round 832 264 to the nearest thousand.



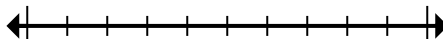
3) Round 10 622 917 to the nearest hundred thousand.



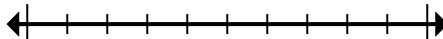
4) Round 7 142 074 to the nearest ten thousand.



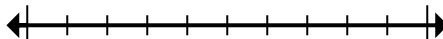
5) Round 72 745 to the nearest ten thousand.



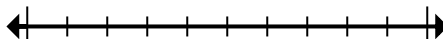
6) Round 314 to the nearest hundred.



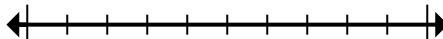
7) Round 2 720 to the nearest thousand.



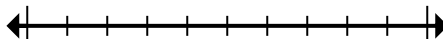
8) Round 80 764 to the nearest ten thousand.



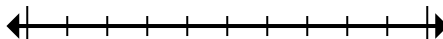
9) Round 633 653 to the nearest thousand.



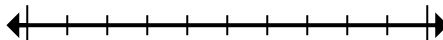
10) Round 151 433 to the nearest hundred.



11) Round 2 415 to the nearest hundred.



12) Round 42 974 961 to the nearest hundred thousand.



1. \_\_\_\_\_
2. \_\_\_\_\_
3. \_\_\_\_\_
4. \_\_\_\_\_
5. \_\_\_\_\_
6. \_\_\_\_\_
7. \_\_\_\_\_
8. \_\_\_\_\_
9. \_\_\_\_\_
10. \_\_\_\_\_
11. \_\_\_\_\_
12. \_\_\_\_\_