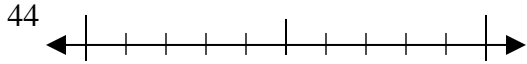




Utilisez la droite numérique associée pour arrondir à la dizaine.

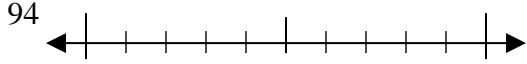
**Réponses**

Ex)



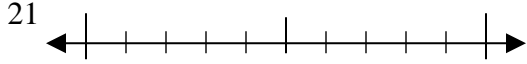
Ex. 40

1)



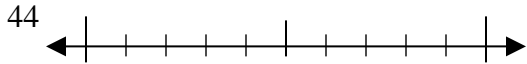
1. \_\_\_\_\_

2)



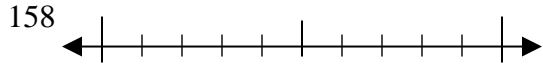
2. \_\_\_\_\_

3)



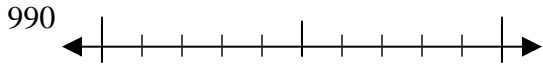
3. \_\_\_\_\_

4)



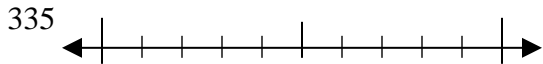
4. \_\_\_\_\_

5)



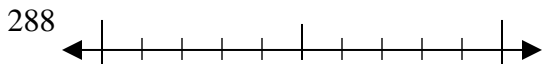
5. \_\_\_\_\_

6)



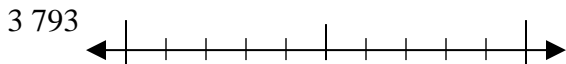
6. \_\_\_\_\_

7)



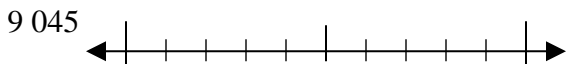
7. \_\_\_\_\_

8)



8. \_\_\_\_\_

9)

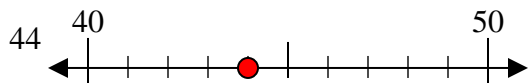


9. \_\_\_\_\_

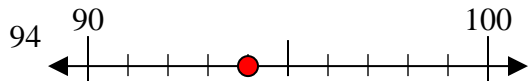


Utilisez la droite numérique associée pour arrondir à la dizaine.

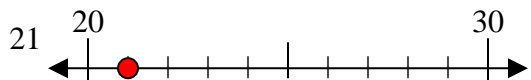
Ex)



1)



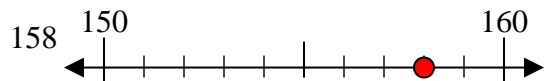
2)



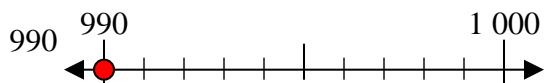
3)



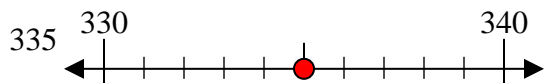
4)



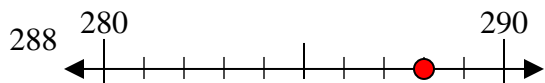
5)



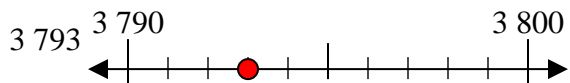
6)



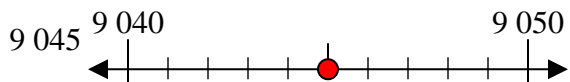
7)



8)



9)



**Réponses**

Ex. 40

1. 90

2. 20

3. 40

4. 160

5. 990

6. 340

7. 290

8. 3790

9. 9050