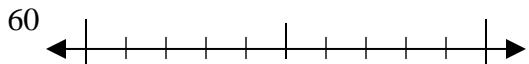




Utilisez la droite numérique associée pour arrondir à la dizaine.

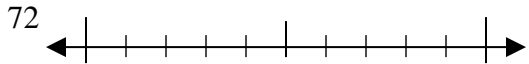
**Réponses**

Ex)



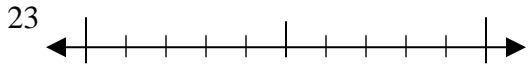
Ex. 60

1)



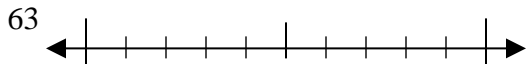
1. \_\_\_\_\_

2)



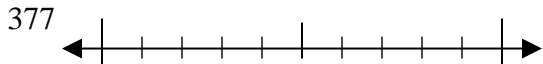
2. \_\_\_\_\_

3)



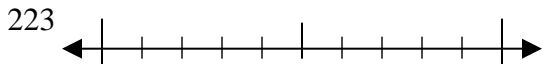
3. \_\_\_\_\_

4)



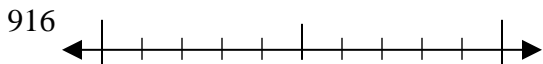
4. \_\_\_\_\_

5)



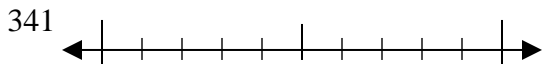
5. \_\_\_\_\_

6)



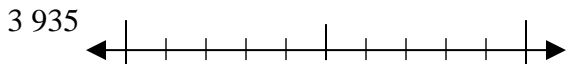
6. \_\_\_\_\_

7)



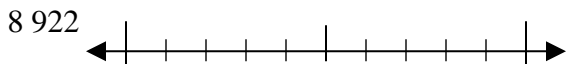
7. \_\_\_\_\_

8)



8. \_\_\_\_\_

9)

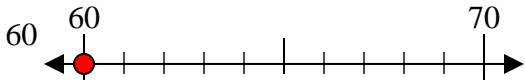


9. \_\_\_\_\_

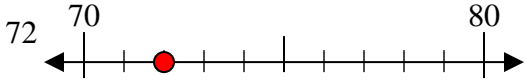


Utilisez la droite numérique associée pour arrondir à la dizaine.

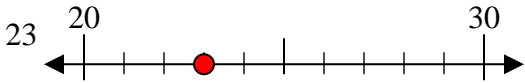
Ex)



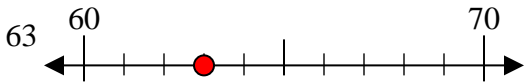
1)



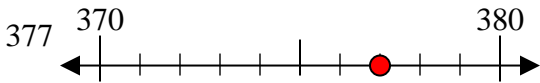
2)



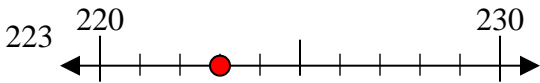
3)



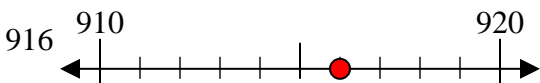
4)



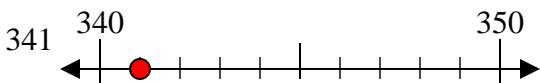
5)



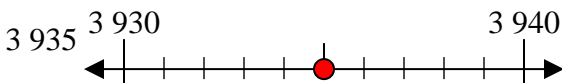
6)



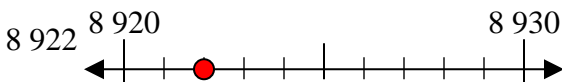
7)



8)



9)



**Réponses**

Ex. 60

1. 70

2. 20

3. 60

4. 380

5. 220

6. 920

7. 340

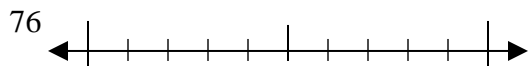
8. 3940

9. 8920

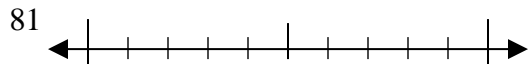


Utilisez la droite numérique associée pour arrondir à la dizaine.

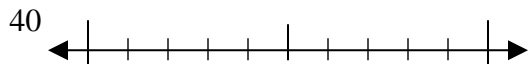
Ex)



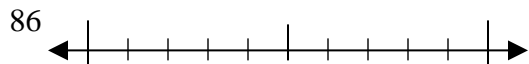
1)



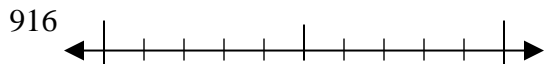
2)



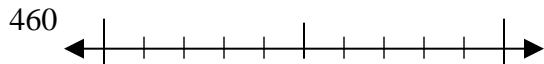
3)



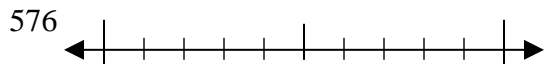
4)



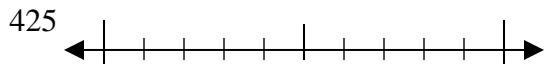
5)



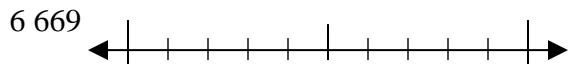
6)



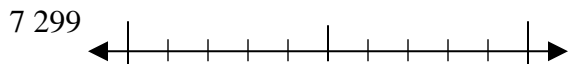
7)



8)



9)

**Réponses**Ex. 80

1. \_\_\_\_\_

2. \_\_\_\_\_

3. \_\_\_\_\_

4. \_\_\_\_\_

5. \_\_\_\_\_

6. \_\_\_\_\_

7. \_\_\_\_\_

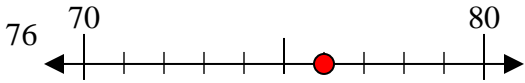
8. \_\_\_\_\_

9. \_\_\_\_\_

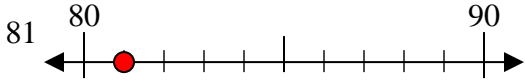


Utilisez la droite numérique associée pour arrondir à la dizaine.

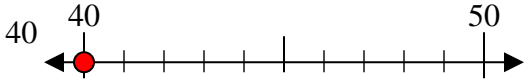
Ex)



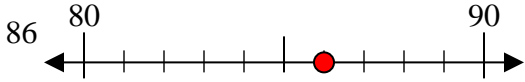
1)



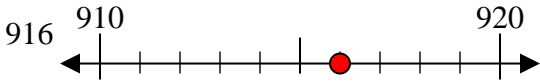
2)



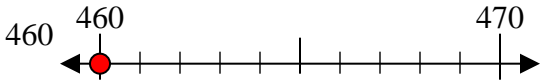
3)



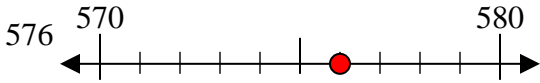
4)



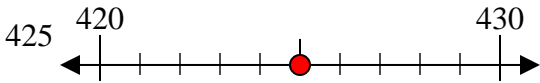
5)



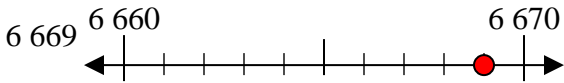
6)



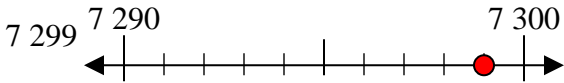
7)



8)



9)



**Réponses**

Ex. 80

1. 80

2. 40

3. 90

4. 920

5. 460

6. 580

7. 430

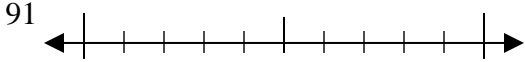
8. 6670

9. 7300

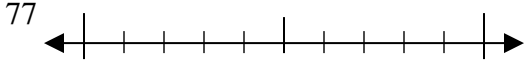


Utilisez la droite numérique associée pour arrondir à la dizaine.

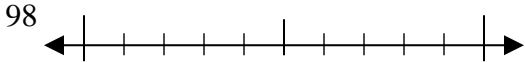
Ex)



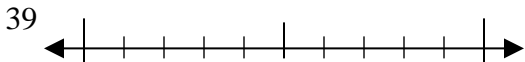
1)



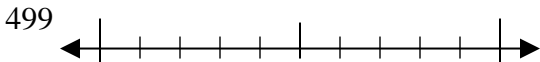
2)



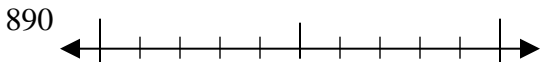
3)



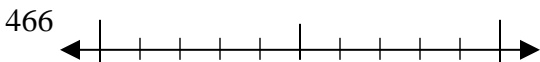
4)



5)



6)




7)



8)



9)



**Réponses**

Ex. 90

1. \_\_\_\_\_

2. \_\_\_\_\_

3. \_\_\_\_\_

4. \_\_\_\_\_

5. \_\_\_\_\_

6. \_\_\_\_\_

7. \_\_\_\_\_

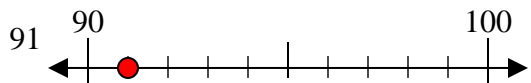
8. \_\_\_\_\_

9. \_\_\_\_\_

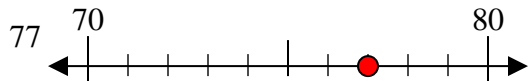


Utilisez la droite numérique associée pour arrondir à la dizaine.

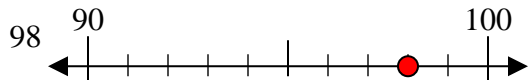
Ex)



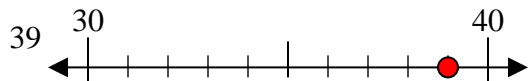
1)



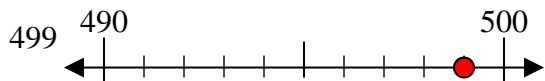
2)



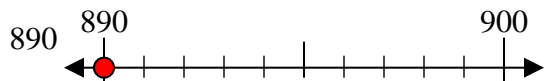
3)



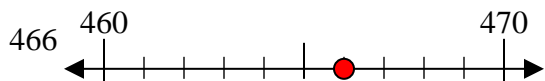
4)



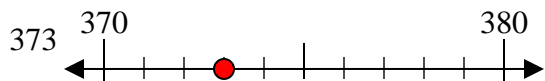
5)



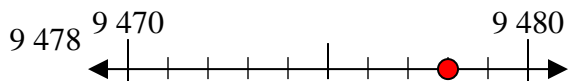
6)



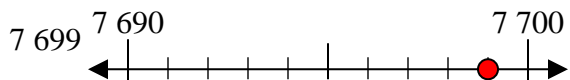
7)



8)



9)



**Réponses**

Ex. 90

1. 80

2. 100

3. 40

4. 500

5. 890

6. 470

7. 370

8. 9480

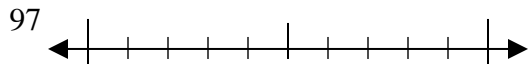
9. 7700



Utilisez la droite numérique associée pour arrondir à la dizaine.

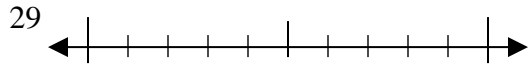
**Réponses**

Ex)



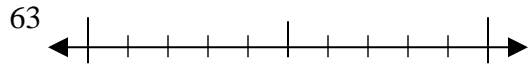
Ex. **100**

1)



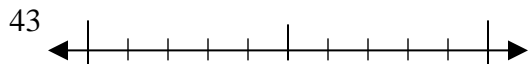
1. \_\_\_\_\_

2)



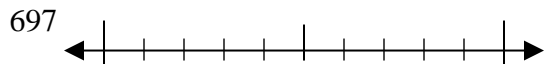
2. \_\_\_\_\_

3)



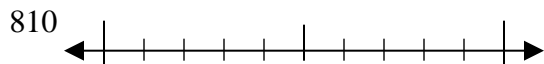
3. \_\_\_\_\_

4)



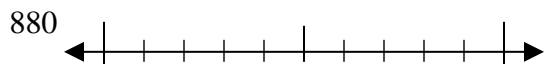
4. \_\_\_\_\_

5)



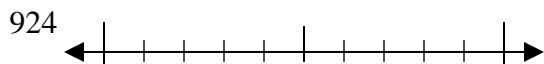
5. \_\_\_\_\_

6)



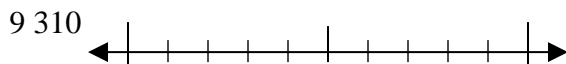
6. \_\_\_\_\_

7)



7. \_\_\_\_\_

8)



8. \_\_\_\_\_

9)

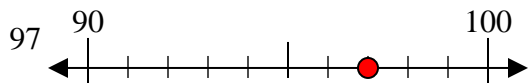


9. \_\_\_\_\_

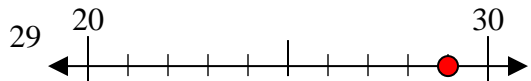


Utilisez la droite numérique associée pour arrondir à la dizaine.

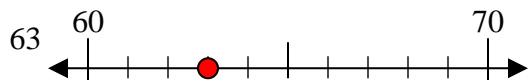
Ex)



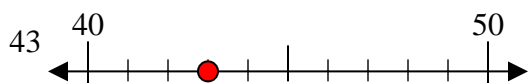
1)



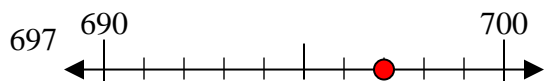
2)



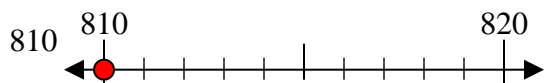
3)



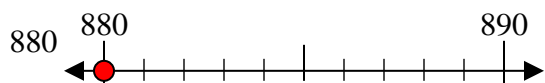
4)



5)



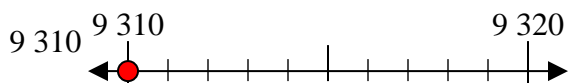
6)



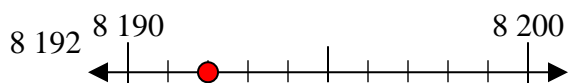
7)



8)



9)



**Réponses**

Ex. 100

1. 30

2. 60

3. 40

4. 700

5. 810

6. 880

7. 920

8. 9310

9. 8190

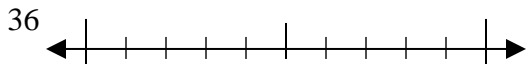




Utilisez la droite numérique associée pour arrondir à la dizaine.

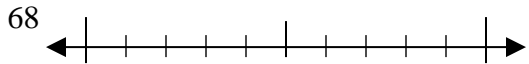
**Réponses**

Ex)



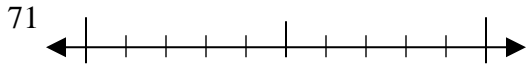
Ex. 40

1)



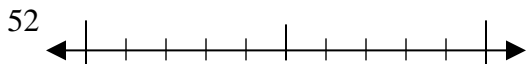
1. \_\_\_\_\_

2)



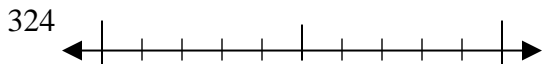
2. \_\_\_\_\_

3)



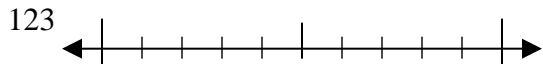
3. \_\_\_\_\_

4)



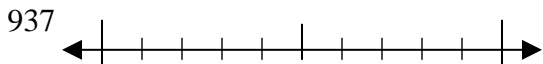
4. \_\_\_\_\_

5)



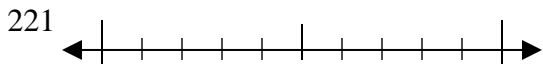
5. \_\_\_\_\_

6)



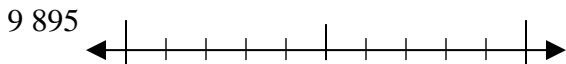
6. \_\_\_\_\_

7)



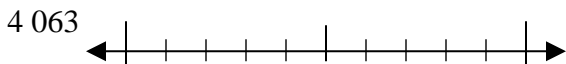
7. \_\_\_\_\_

8)



8. \_\_\_\_\_

9)

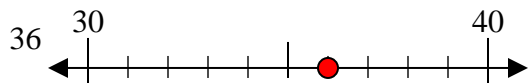


9. \_\_\_\_\_

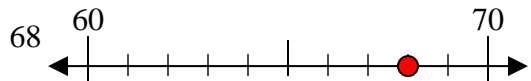


Utilisez la droite numérique associée pour arrondir à la dizaine.

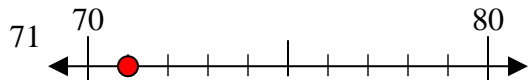
Ex)



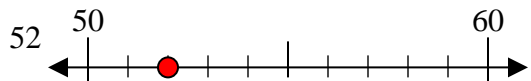
1)



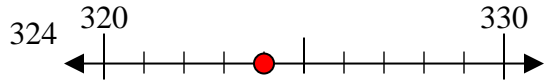
2)



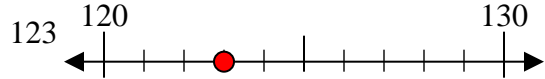
3)



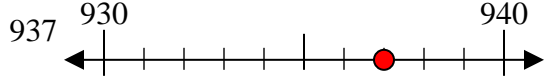
4)



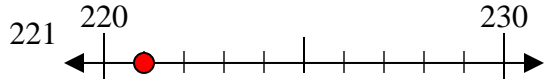
5)



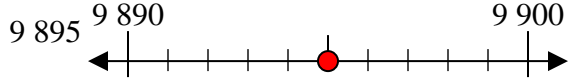
6)



7)



8)



9)



**Réponses**

Ex. 40

1. 70

2. 70

3. 50

4. 320

5. 120

6. 940

7. 220

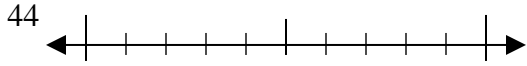
8. 9900

9. 4060

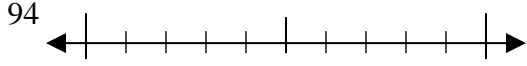


Utilisez la droite numérique associée pour arrondir à la dizaine.

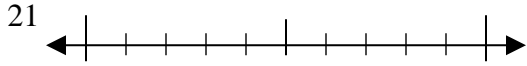
Ex)



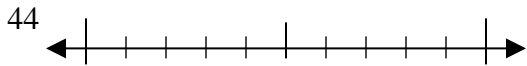
1)



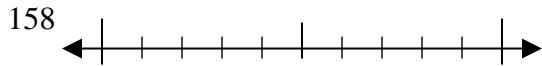
2)



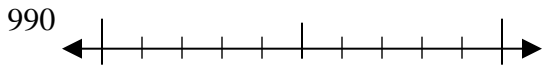
3)



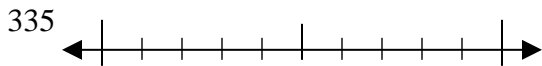
4)



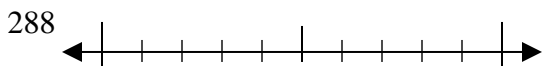
5)



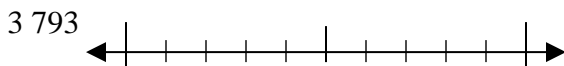
6)



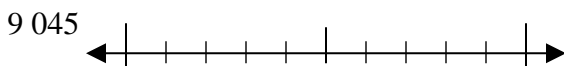
7)



8)



9)



**Réponses**

Ex. 40

1. \_\_\_\_\_

2. \_\_\_\_\_

3. \_\_\_\_\_

4. \_\_\_\_\_

5. \_\_\_\_\_

6. \_\_\_\_\_

7. \_\_\_\_\_

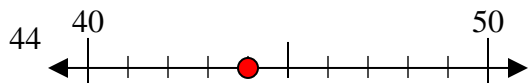
8. \_\_\_\_\_

9. \_\_\_\_\_

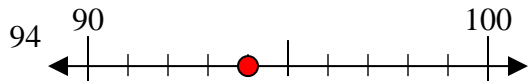


Utilisez la droite numérique associée pour arrondir à la dizaine.

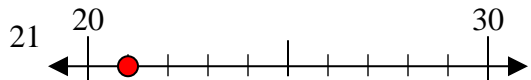
Ex)



1)



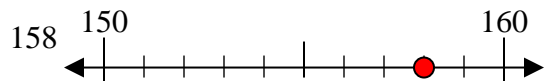
2)



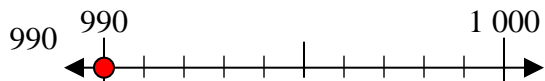
3)



4)



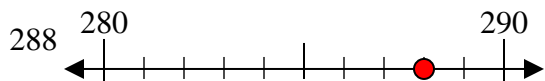
5)



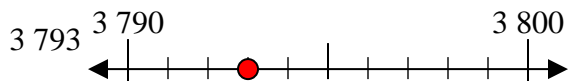
6)



7)



8)



9)



**Réponses**

Ex. 40

1. 90

2. 20

3. 40

4. 160

5. 990

6. 340

7. 290

8. 3790

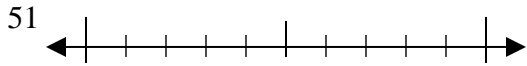
9. 9050



Utilisez la droite numérique associée pour arrondir à la dizaine.

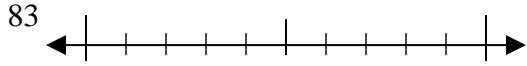
**Réponses**

Ex)



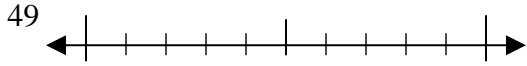
Ex. 50

1)



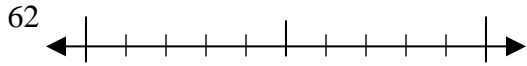
1. \_\_\_\_\_

2)



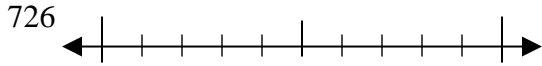
2. \_\_\_\_\_

3)



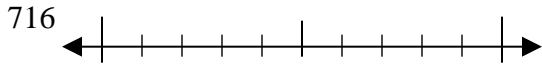
3. \_\_\_\_\_

4)



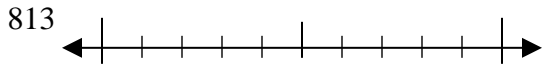
4. \_\_\_\_\_

5)



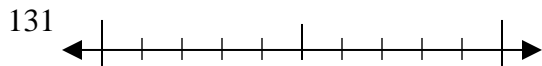
5. \_\_\_\_\_

6)



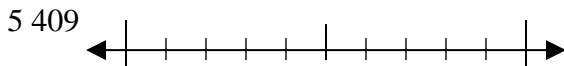
6. \_\_\_\_\_

7)



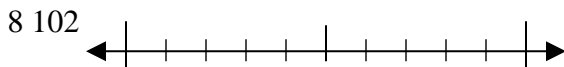
7. \_\_\_\_\_

8)



8. \_\_\_\_\_

9)

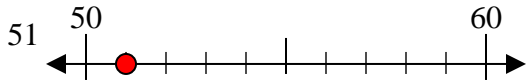


9. \_\_\_\_\_

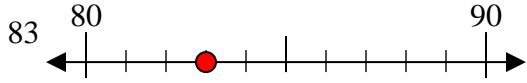


Utilisez la droite numérique associée pour arrondir à la dizaine.

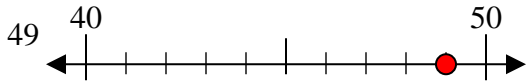
Ex)



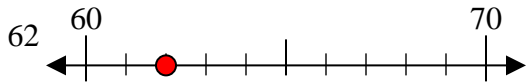
1)



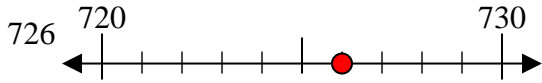
2)



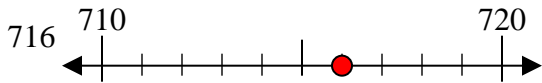
3)



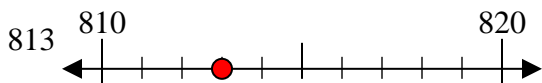
4)



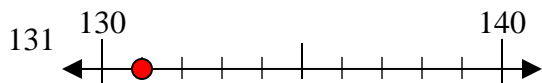
5)



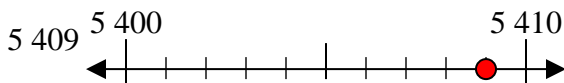
6)



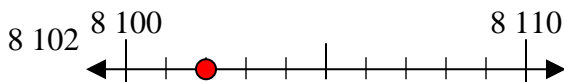
7)



8)



9)



**Réponses**

Ex. 50

1. 80

2. 50

3. 60

4. 730

5. 720

6. 810

7. 130

8. 5410

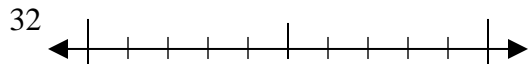
9. 8100



Utilisez la droite numérique associée pour arrondir à la dizaine.

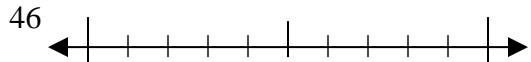
**Réponses**

Ex)



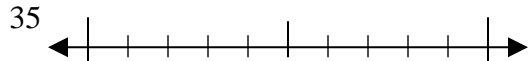
Ex. 30

1)



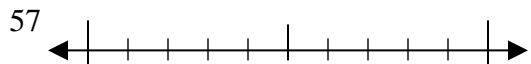
1. \_\_\_\_\_

2)



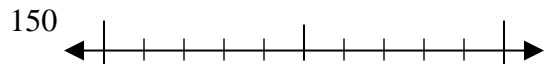
2. \_\_\_\_\_

3)



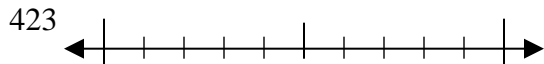
3. \_\_\_\_\_

4)



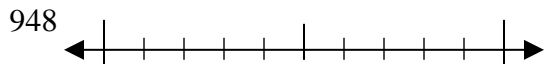
4. \_\_\_\_\_

5)



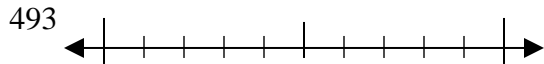
5. \_\_\_\_\_

6)



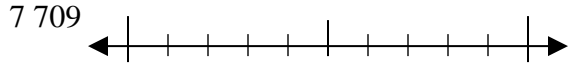
6. \_\_\_\_\_

7)



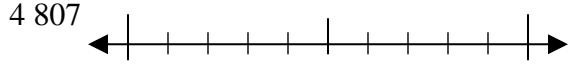
7. \_\_\_\_\_

8)



8. \_\_\_\_\_

9)

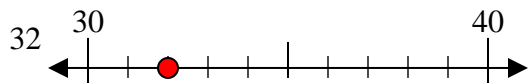


9. \_\_\_\_\_

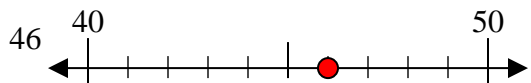


Utilisez la droite numérique associée pour arrondir à la dizaine.

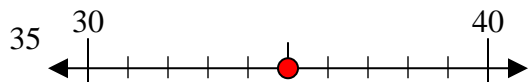
Ex)



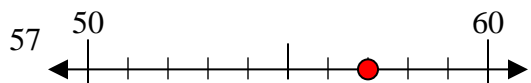
1)



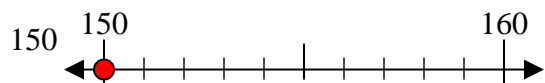
2)



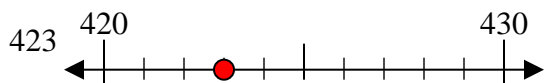
3)



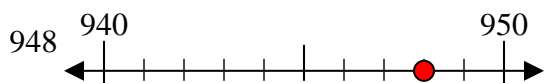
4)



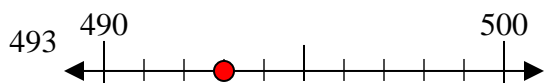
5)



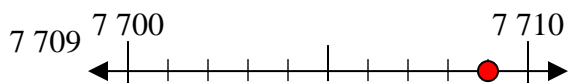
6)



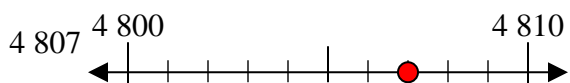
7)



8)



9)



**Réponses**

Ex. 30

1. 50

2. 40

3. 60

4. 150

5. 420

6. 950

7. 490

8. 7710

9. 4810

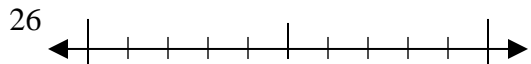




Utilisez la droite numérique associée pour arrondir à la dizaine.

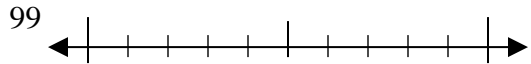
**Réponses**

Ex)



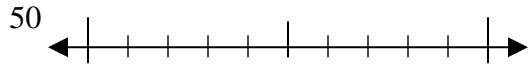
Ex. 30

1)



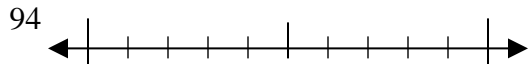
1. \_\_\_\_\_

2)



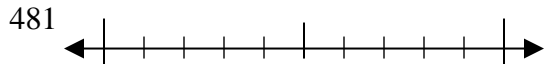
2. \_\_\_\_\_

3)



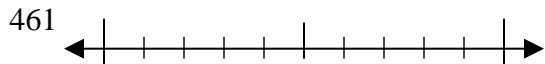
3. \_\_\_\_\_

4)



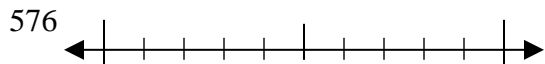
4. \_\_\_\_\_

5)



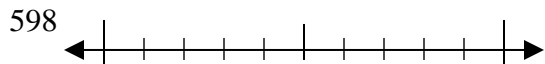
5. \_\_\_\_\_

6)



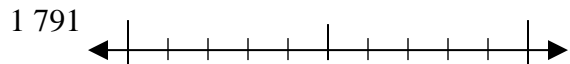
6. \_\_\_\_\_

7)



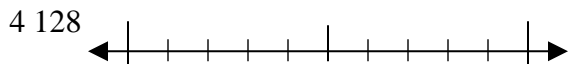
7. \_\_\_\_\_

8)



8. \_\_\_\_\_

9)

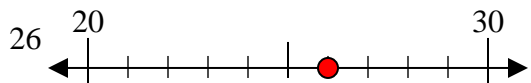


9. \_\_\_\_\_

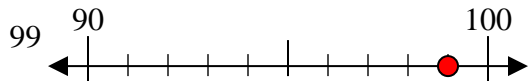


Utilisez la droite numérique associée pour arrondir à la dizaine.

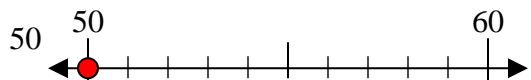
Ex)



1)



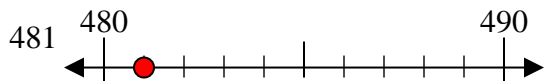
2)



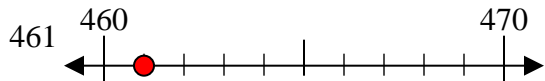
3)



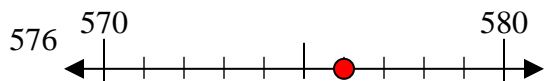
4)



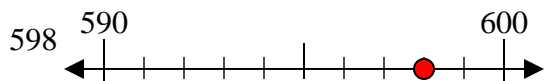
5)



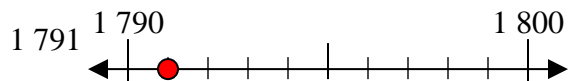
6)



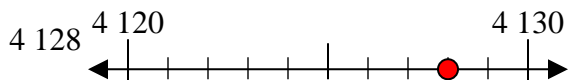
7)



8)



9)



**Réponses**

Ex. 30

1. 100

2. 50

3. 90

4. 480

5. 460

6. 580

7. 600

8. 1790

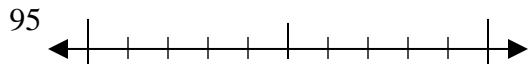
9. 4130



Utilisez la droite numérique associée pour arrondir à la dizaine.

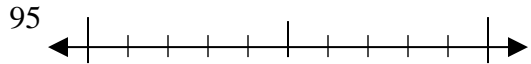
**Réponses**

Ex)



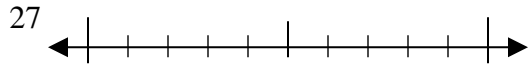
Ex. **100**

1)



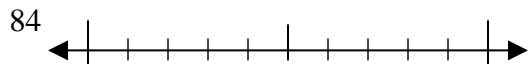
1. \_\_\_\_\_

2)



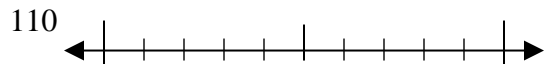
2. \_\_\_\_\_

3)



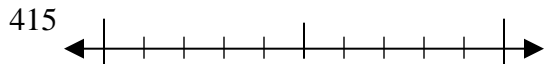
3. \_\_\_\_\_

4)



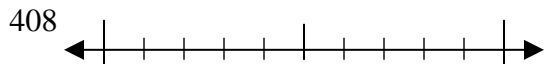
4. \_\_\_\_\_

5)



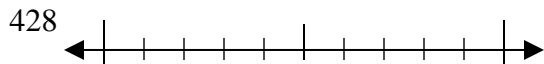
5. \_\_\_\_\_

6)



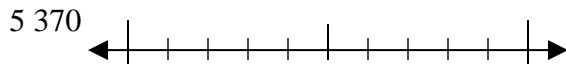
6. \_\_\_\_\_

7)



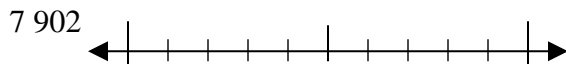
7. \_\_\_\_\_

8)



8. \_\_\_\_\_

9)

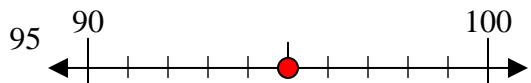


9. \_\_\_\_\_

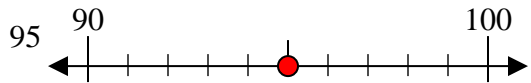


Utilisez la droite numérique associée pour arrondir à la dizaine.

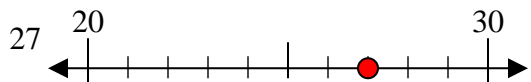
Ex)



1)



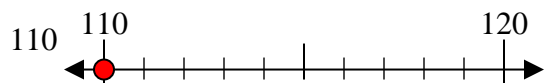
2)



3)



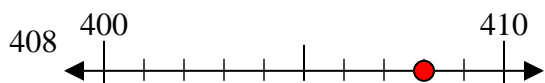
4)



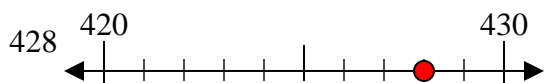
5)



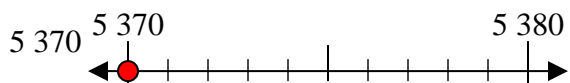
6)



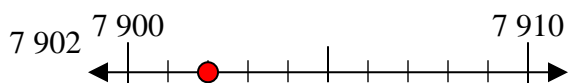
7)



8)



9)



**Réponses**

Ex. 100

1. 100

2. 30

3. 80

4. 110

5. 420

6. 410

7. 430

8. 5370

9. 7900