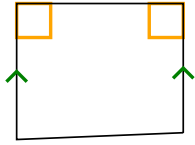




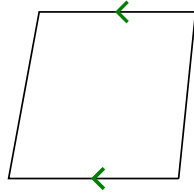
Déterminer si la forme représentée est un Q uadrilatéral, K ite, T rapezoid, P arallelogram, R h ombus, R ectangle ou S Quare (peut être plus d'un).

Réponses


1)



2)



3)



1. _____

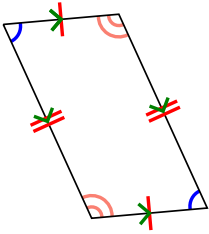
2. _____

3. _____

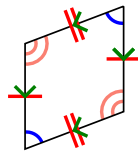
4. _____

5. _____

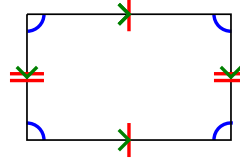
4)



5)



6)



6. _____

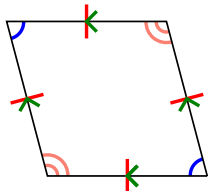
7. _____

8. _____

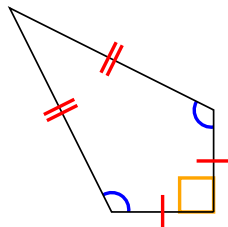
9. _____

10. _____

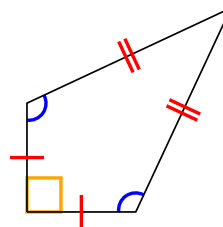
7)



8)



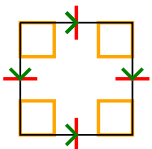
9)



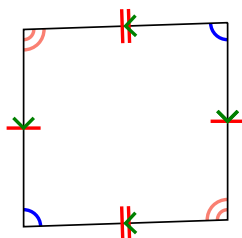
11. _____

12. _____


10)



11)



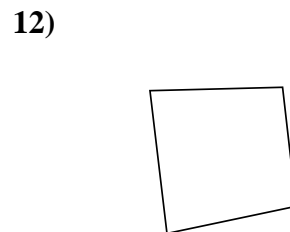
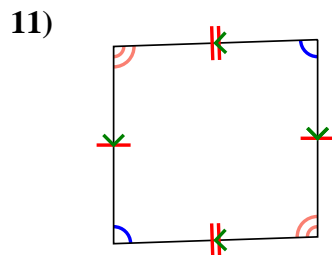
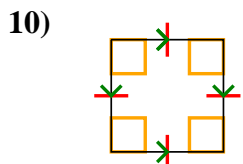
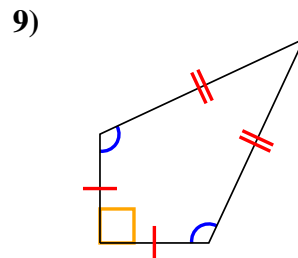
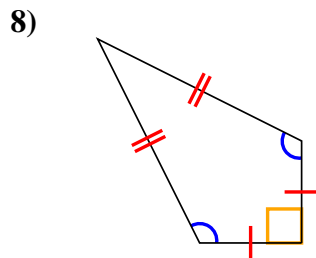
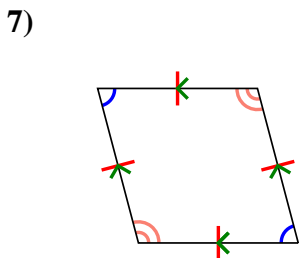
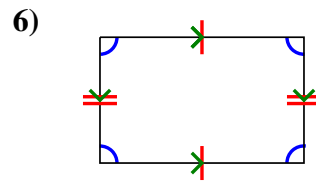
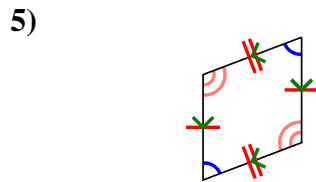
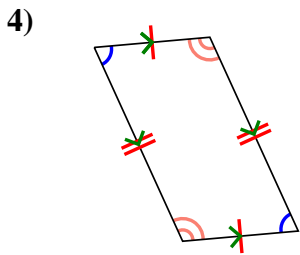
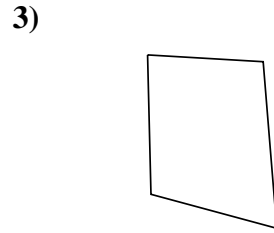
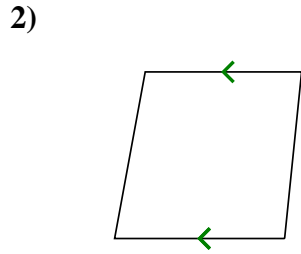
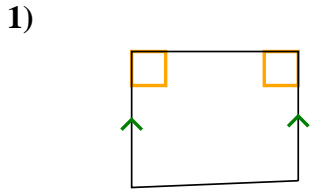
12)





Déterminer si la forme représentée est un Q uadrilatéral, K ite, T rapezoid, P arallelogram, R h ombus, R ectangle ou S Quare (peut être plus d'un).

Réponses



1. Q,T

2. Q,T

3. Q

4. Q,P

5. Q,P

6. Q,P

7. Q,P,H

8. Q,K

9. Q,K

10. Q,P,H,R,S

11. Q,P

12. Q