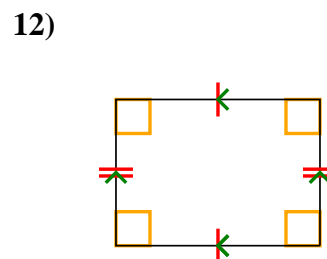
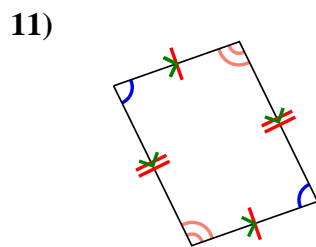
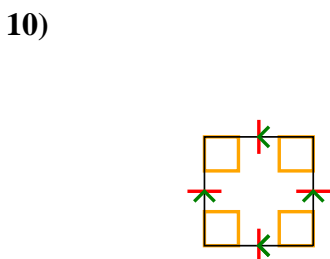
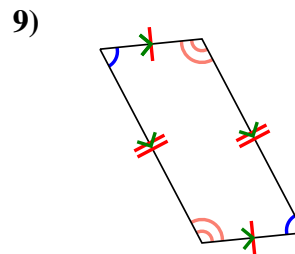
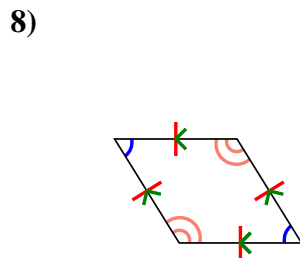
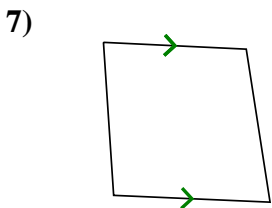
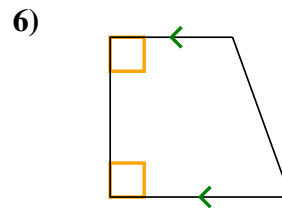
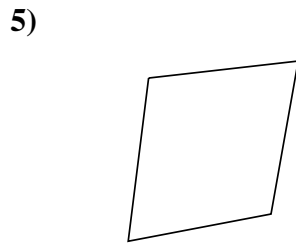
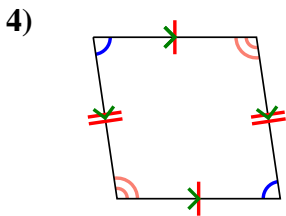
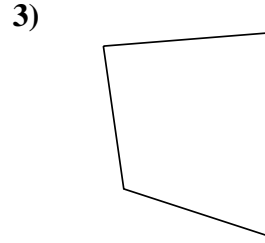
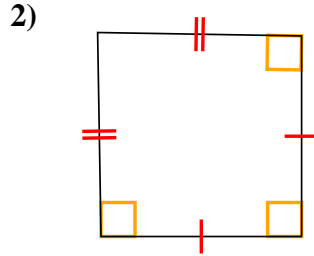
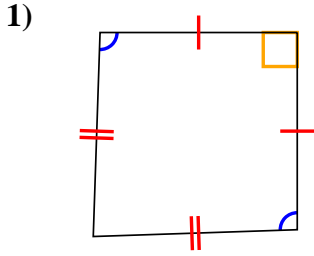




Déterminer si la forme représentée est un Q uadrilatéral, K ite, T rapezoid, P arallelogram, R h ombus, R ectangle ou S Quare (peut être plus d'un).

Réponses

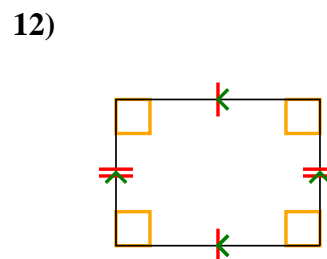
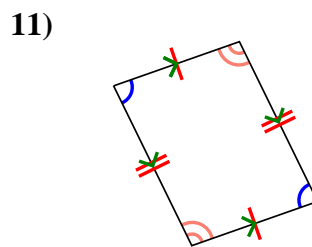
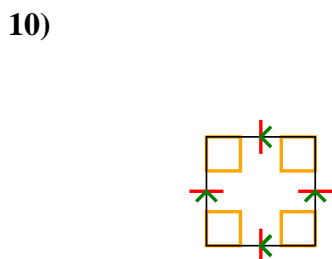
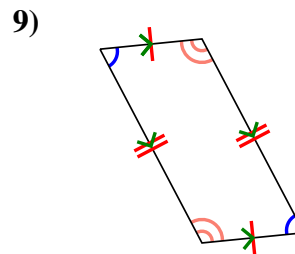
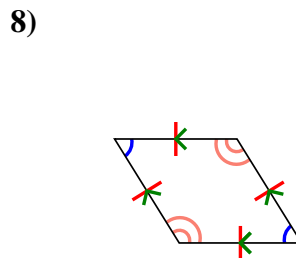
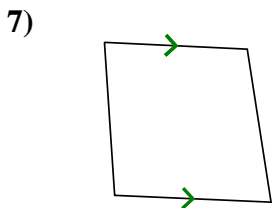
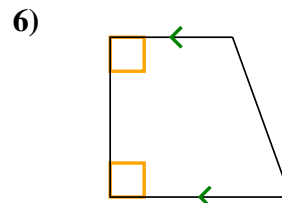
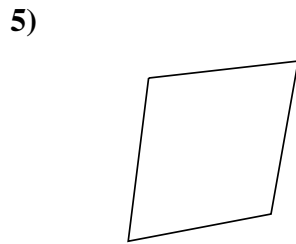
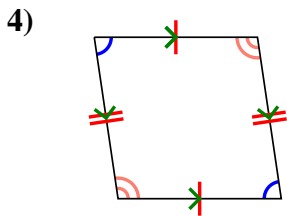
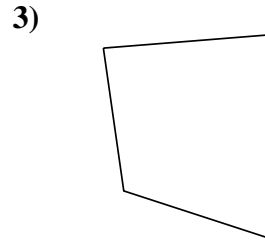
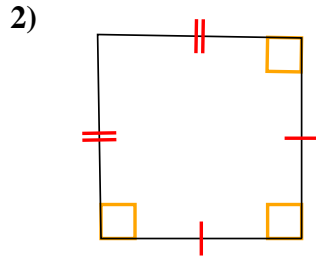
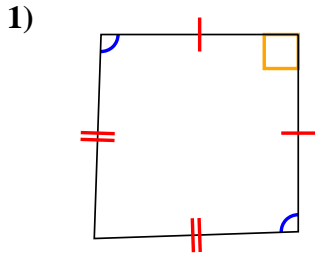


- 1. _____
- 2. _____
- 3. _____
- 4. _____
- 5. _____
- 6. _____
- 7. _____
- 8. _____
- 9. _____
- 10. _____
- 11. _____
- 12. _____



Déterminer si la forme représentée est un Q uadrilateral, K ite, T rapezoid, P arallelogram, R h ombus, R ectangle ou S Quare (peut être plus d'un).

Réponses



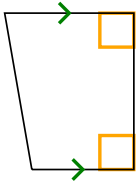
1. Q,K
2. Q,K
3. Q
4. Q,P
5. Q
6. Q,T
7. Q,T
8. Q,P,H
9. Q,P
10. Q,P,H,R,S
11. Q,P
12. Q,P,R



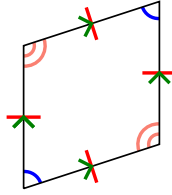
Déterminer si la forme représentée est un Q uadrilateral, K ite, T rapezoid, P arallelogram, R h ombus, R ectangle ou S Quare (peut être plus d'un).

Réponses

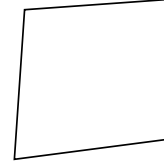
1)



2)



3)



1. _____

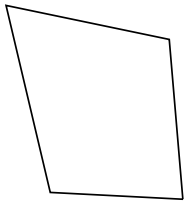
2. _____

3. _____

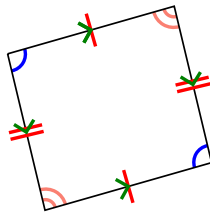
4. _____

5. _____

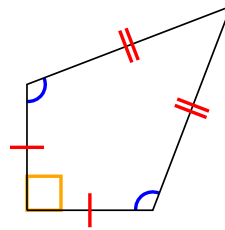
4)



5)



6)



6. _____

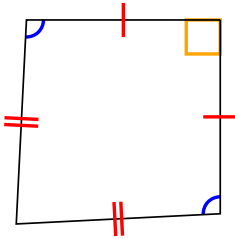
7. _____

8. _____

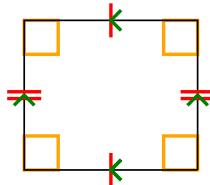
9. _____

10. _____

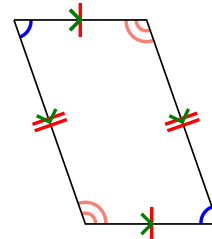
7)



8)



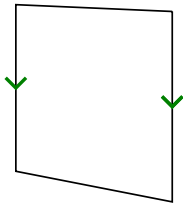
9)



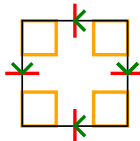
11. _____

12. _____


10)



11)



12)

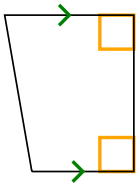




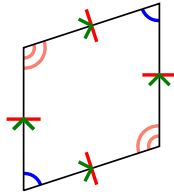
Déterminer si la forme représentée est un Q uadrilateral, K ite, T rapezoid, P arallelogram, R h ombus, R ectangle ou S Quare (peut être plus d'un).

Réponses

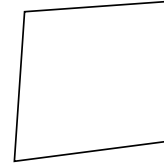
1)



2)



3)



1. **Q,T**

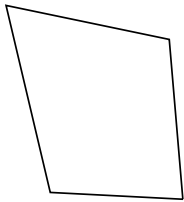
2. **Q,P,H**

3. **Q**

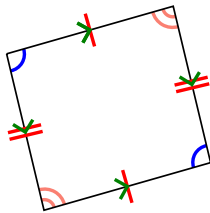
4. **Q**

5. **Q,P**

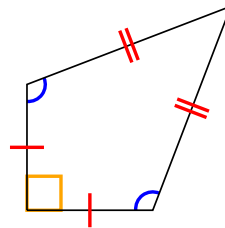
4)



5)



6)

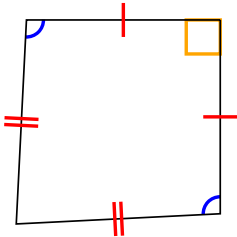


6. **Q,K**

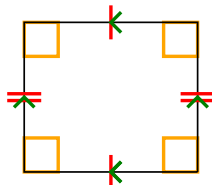
7. **Q,K**

8. **Q,P,R**

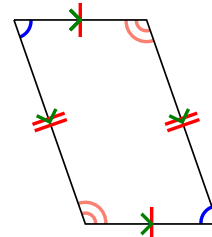
7)



8)



9)



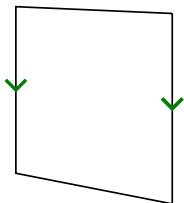
9. **Q,P**

10. **Q,T**

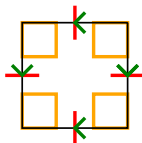
11. **Q,P,H,R,S**

12. **Q**


10)



11)



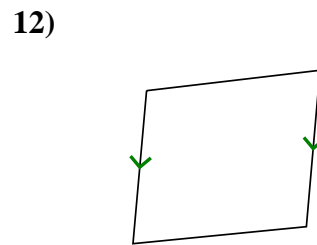
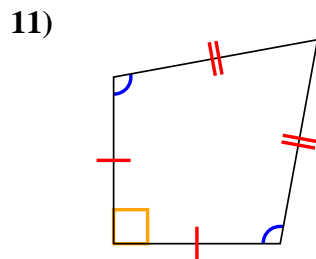
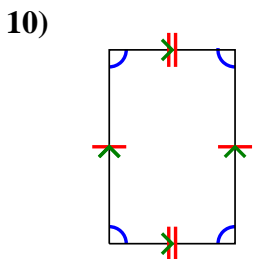
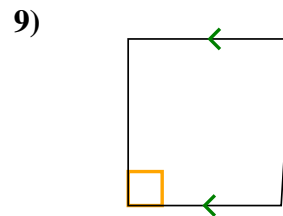
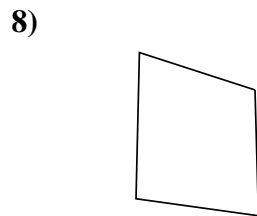
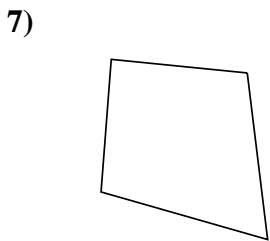
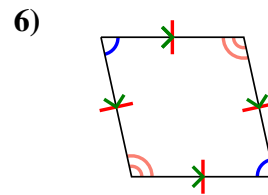
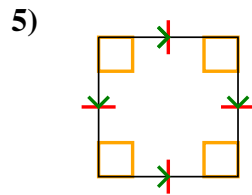
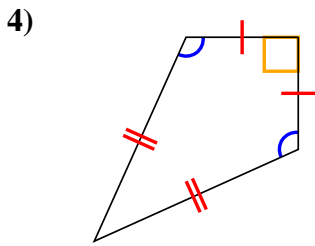
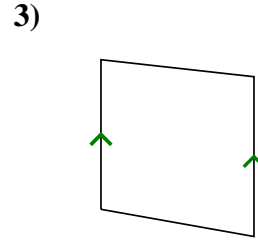
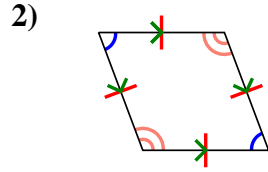
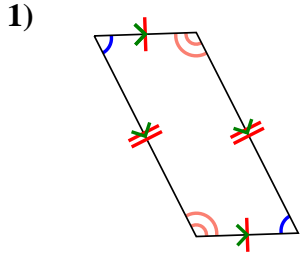
12)





Déterminer si la forme représentée est un Q uadrilatéral, K ite, T rapezoid, P arallelogram, R h ombus, R ectangle ou S Quare (peut être plus d'un).

Réponses

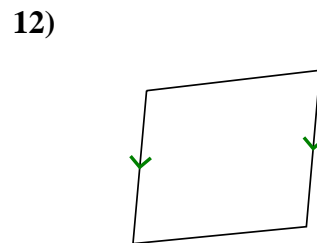
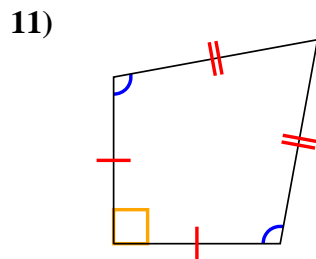
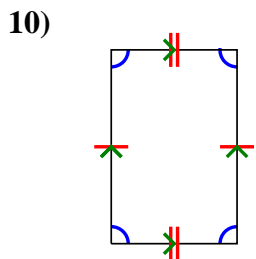
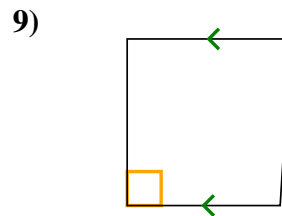
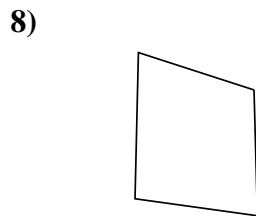
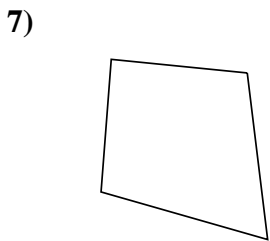
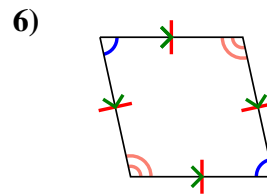
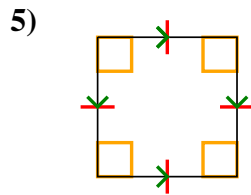
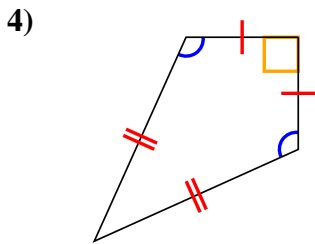
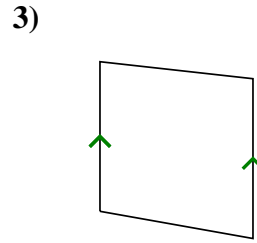
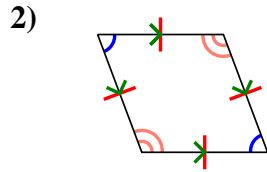
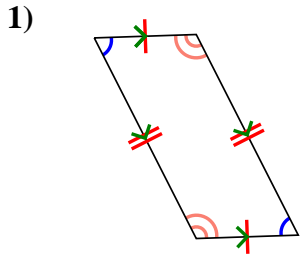


- 1. _____
- 2. _____
- 3. _____
- 4. _____
- 5. _____
- 6. _____
- 7. _____
- 8. _____
- 9. _____
- 10. _____
- 11. _____
- 12. _____



Déterminer si la forme représentée est un **Q**uadrilatéral, **K**ite, **T**rapezoid, **P**arallelogram, **R**hombus, **R**ectangle ou **S**quare (peut être plus d'un).

Réponses

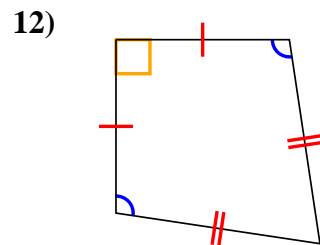
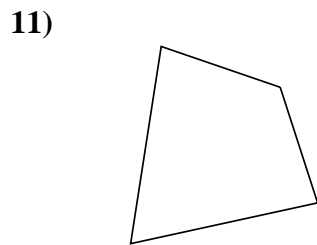
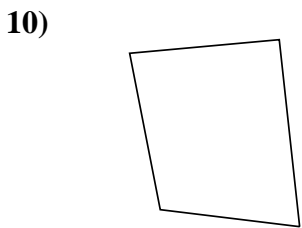
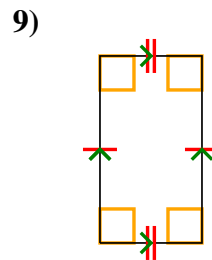
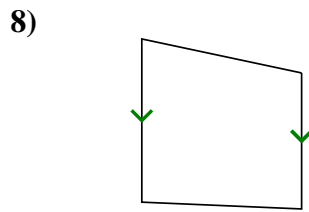
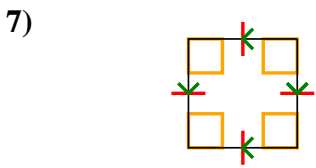
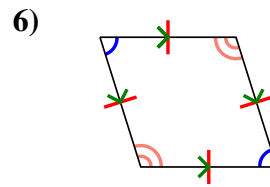
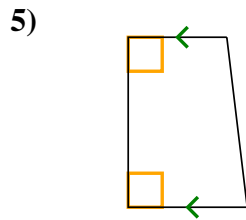
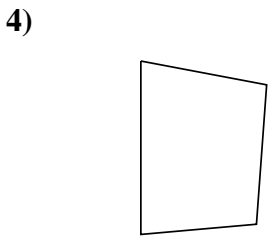
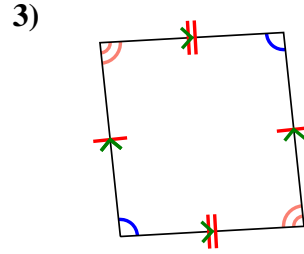
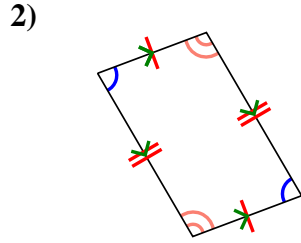
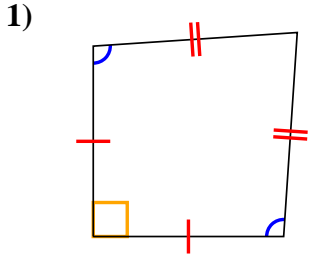


1. Q,P
2. Q,P,H
3. Q,T
4. Q,K
5. Q,P,H,R,S
6. Q,P,H
7. Q
8. Q
9. Q,T
10. Q,P
11. Q,K
12. Q,T



Déterminer si la forme représentée est un Q uadrilatéral, K ite, T rapezoid, P arallelogram, R h ombus, R ectangle ou S Quare (peut être plus d'un).

Réponses

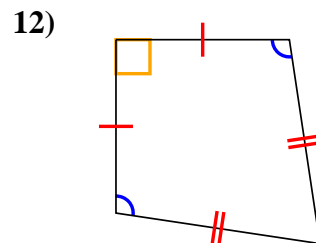
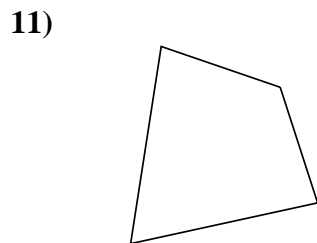
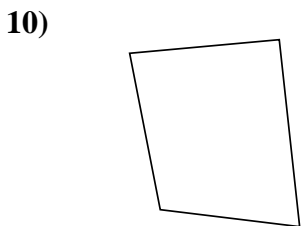
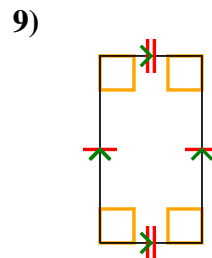
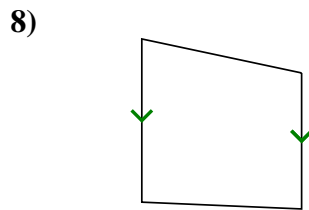
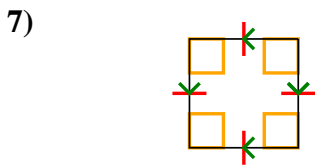
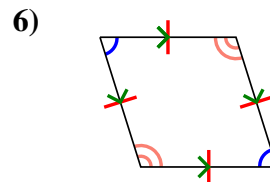
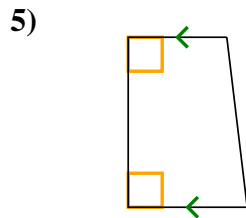
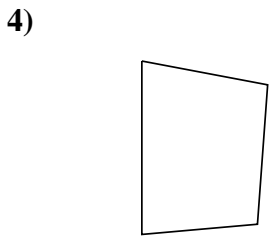
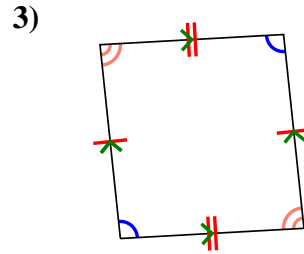
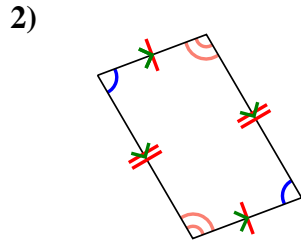
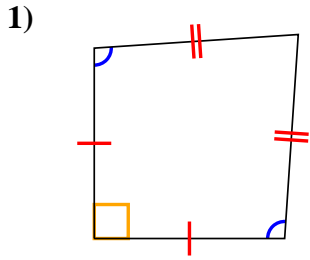


- 1. _____
- 2. _____
- 3. _____
- 4. _____
- 5. _____
- 6. _____
- 7. _____
- 8. _____
- 9. _____
- 10. _____
- 11. _____
- 12. _____



Déterminer si la forme représentée est un Q uadrilatéral, K ite, T rapezoid, P arallelogram, R h ombus, R ectangle ou S Quare (peut être plus d'un).

Réponses



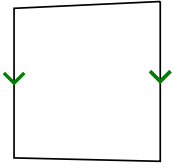
- 1. Q,K
- 2. Q,P
- 3. Q,P
- 4. Q
- 5. Q,T
- 6. Q,P,H
- 7. Q,P,H,R,S
- 8. Q,T
- 9. Q,P,R
- 10. Q
- 11. Q
- 12. Q,K



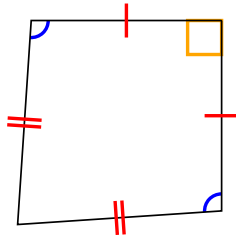
Déterminer si la forme représentée est un Q uadrilatéral, K ite, T rapezoid, P arallelogram, R h ombus, R ectangle ou S Quare (peut être plus d'un).

Réponses

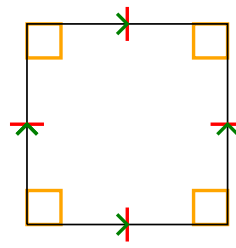
1)



2)



3)



1. _____

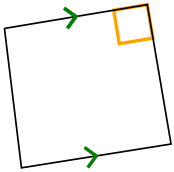
2. _____

3. _____

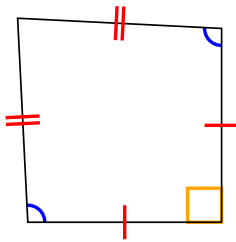
4. _____

5. _____

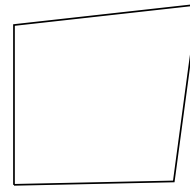
4)



5)



6)



6. _____

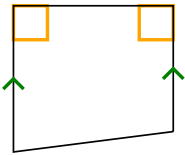
7. _____

8. _____

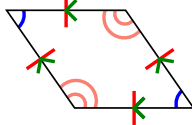
9. _____

10. _____

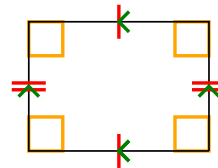
7)



8)



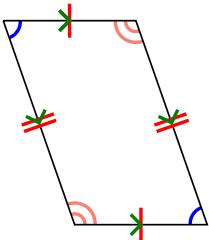
9)



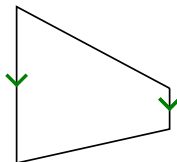
11. _____

12. _____

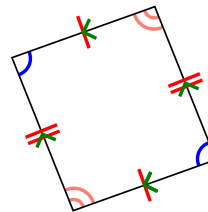
10)



11)



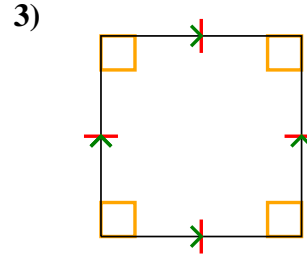
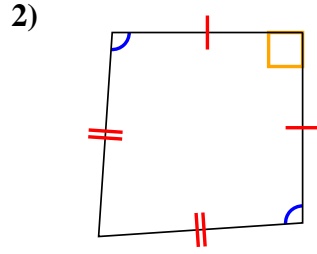
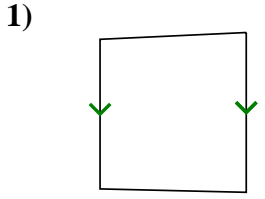
12)



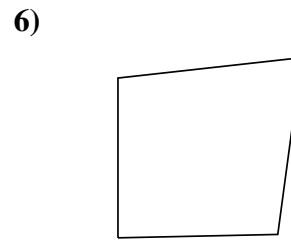
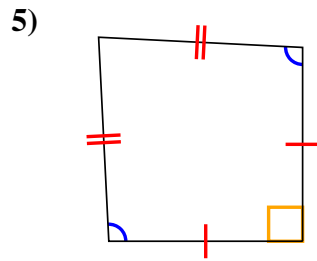
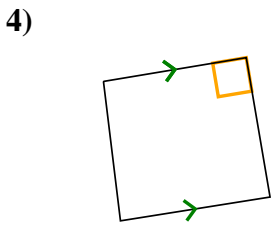


Déterminer si la forme représentée est un Q uadrilatéral, K ite, T rapezoid, P arallelogram, R h ombus, R ectangle ou S Quare (peut être plus d'un).

Réponses



1. Q,T



2. Q,K

3. Q,P,H,R,S

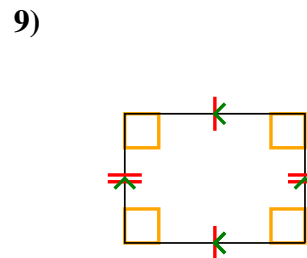
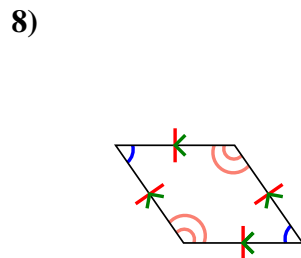
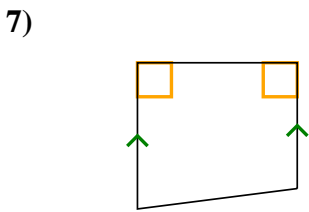
4. Q,T

5. Q,K

6. Q

7. Q,T

8. Q,P,H

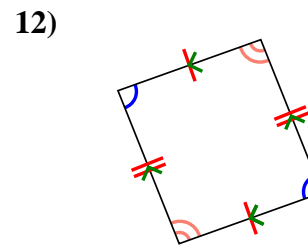
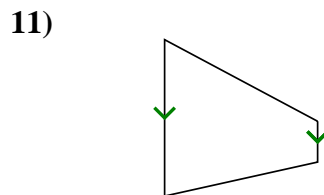
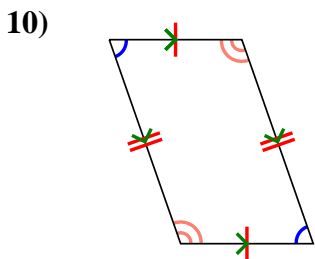


9. Q,P,R

10. Q,P

11. Q,T

12. Q,P

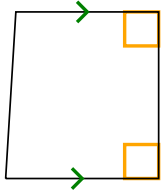




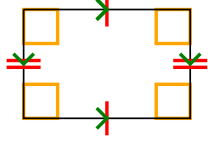
Déterminer si la forme représentée est un Q uadrilatéral, K ite, T rapezoid, P arallelogram, R h ombus, R ectangle ou S Quare (peut être plus d'un).

Réponses


1)



2)



3)



1. _____

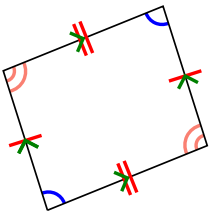
2. _____

3. _____

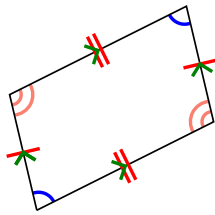
4. _____

5. _____

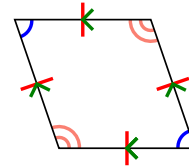
4)



5)



6)



6. _____

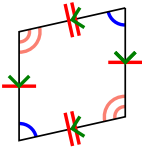
7. _____

8. _____

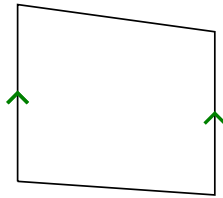
9. _____

10. _____

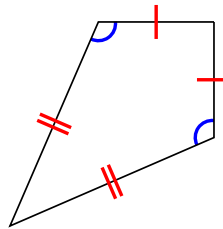
7)



8)



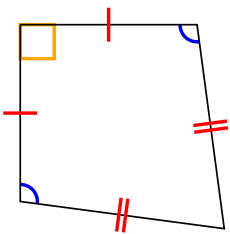
9)




11. _____

12. _____


10)



11)



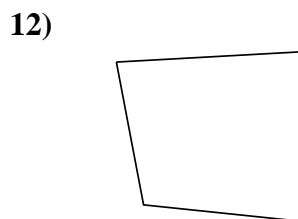
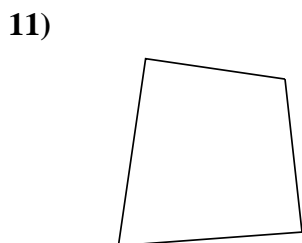
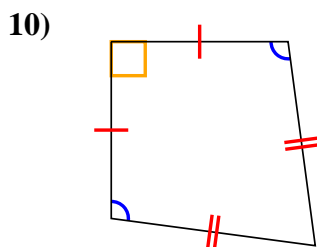
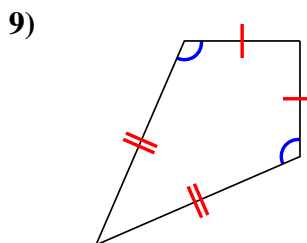
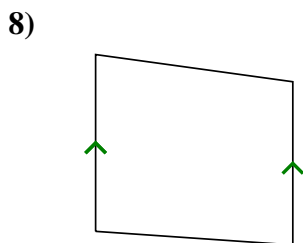
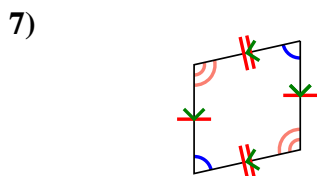
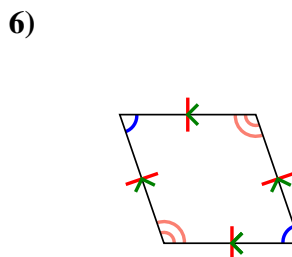
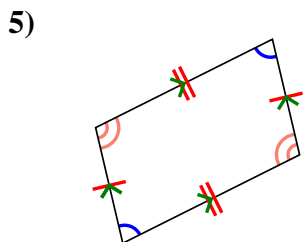
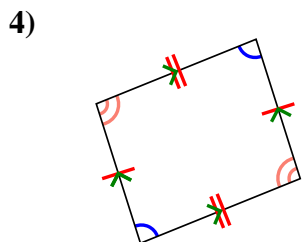
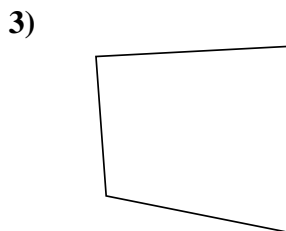
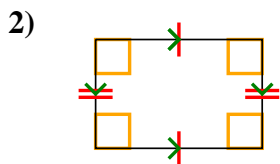
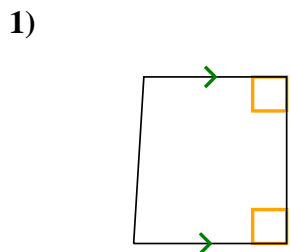
12)





Déterminer si la forme représentée est un **Q**uadrilatère, **K**ite, **T**rapezoid, **P**arallélogramme, **R**hombus, **R**ectangle ou **S**quare (peut être plus d'un).

Réponses



1. Q,T

2. Q,P,R

3. Q

4. Q,P

5. Q,P

6. Q,P,H

7. Q,P

8. Q,T

9. Q,K

10. Q,K

11. Q

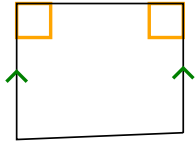
12. Q



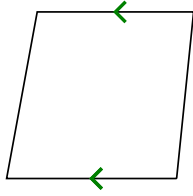
Déterminer si la forme représentée est un Q uadrilatéral, K ite, T rapezoid, P arallelogram, R h ombus, R ectangle ou S Quare (peut être plus d'un).

Réponses


1)



2)



3)



1. _____

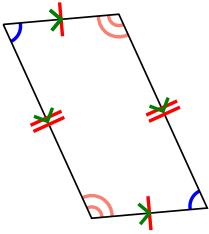
2. _____

3. _____

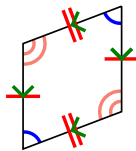
4. _____

5. _____

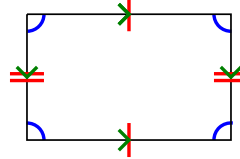
4)



5)



6)



6. _____

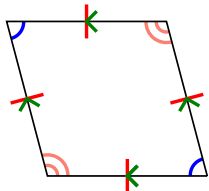
7. _____

8. _____

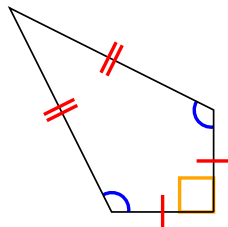
9. _____

10. _____

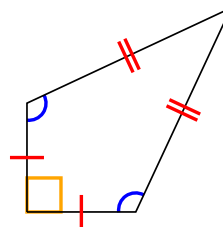
7)



8)



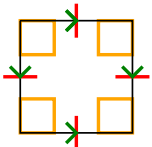
9)



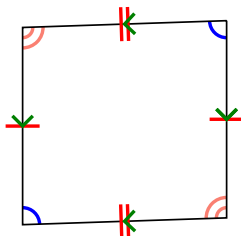
11. _____

12. _____


10)



11)



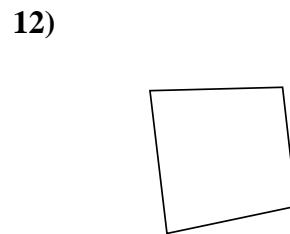
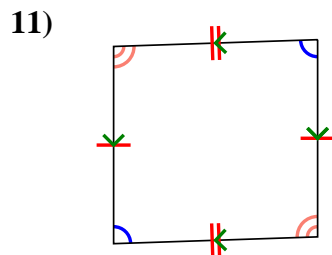
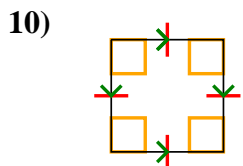
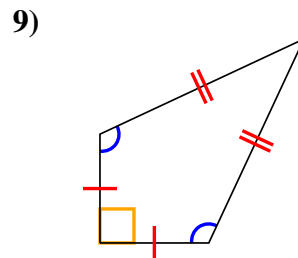
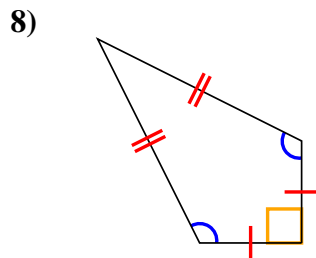
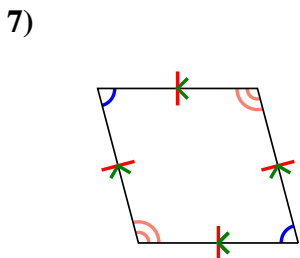
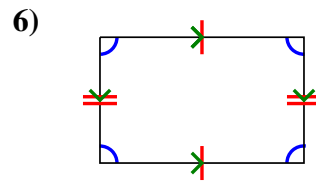
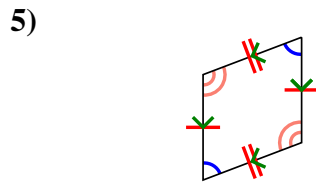
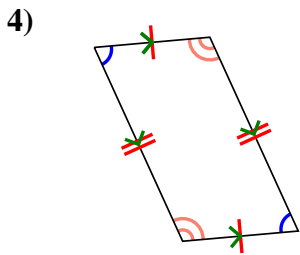
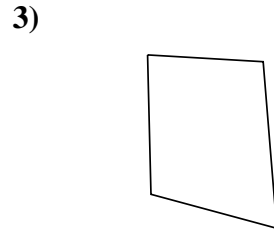
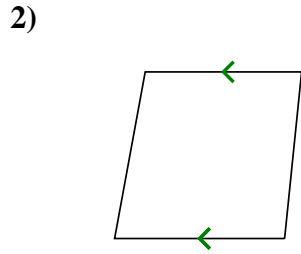
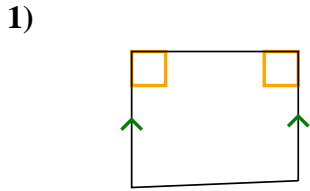
12)





Déterminer si la forme représentée est un Q uadrilatéral, K ite, T rapezoid, P arallelogram, R h ombus, R ectangle ou S Quare (peut être plus d'un).

Réponses



1. Q,T

2. Q,T

3. Q

4. Q,P

5. Q,P

6. Q,P

7. Q,P,H

8. Q,K

9. Q,K

10. Q,P,H,R,S

11. Q,P

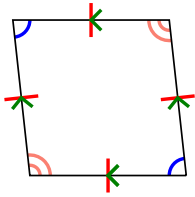
12. Q



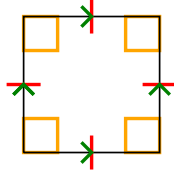
Déterminer si la forme représentée est un Q uadrilatéral, K ite, T rapezoid, P arallelogram, R h ombus, R ectangle ou S Quare (peut être plus d'un).

Réponses

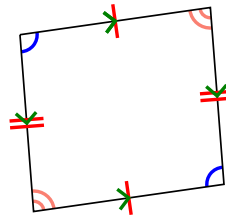
1)



2)



3)



1. _____


2. _____

3. _____

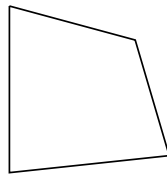
4. _____

5. _____

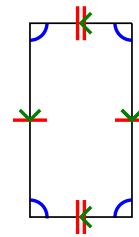
4)



5)



6)



6. _____

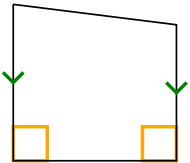
7. _____

8. _____

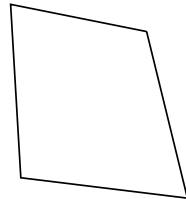
9. _____

10. _____

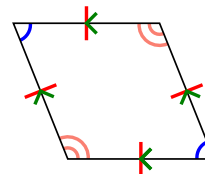
7)



8)



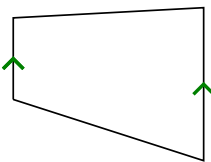
9)



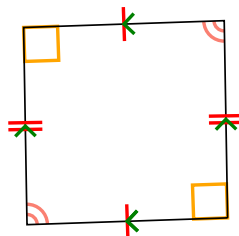
11. _____

12. _____

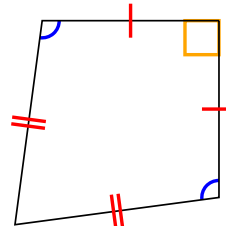
10)



11)



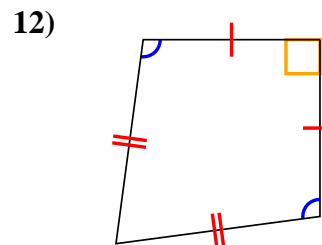
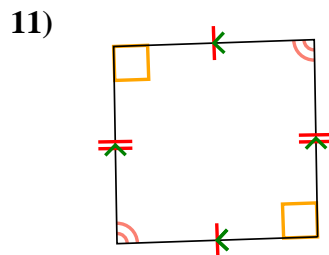
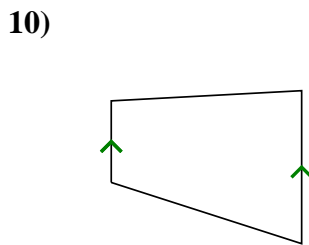
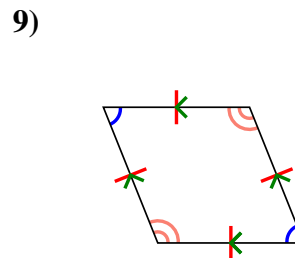
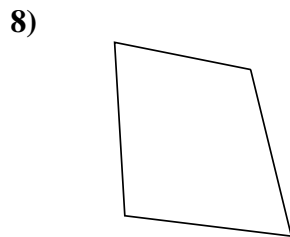
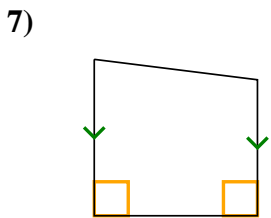
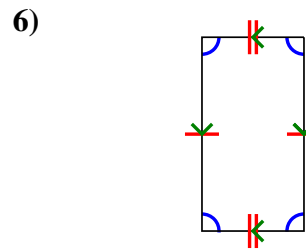
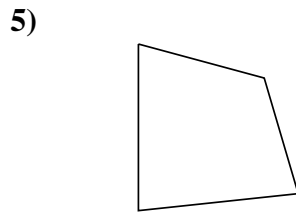
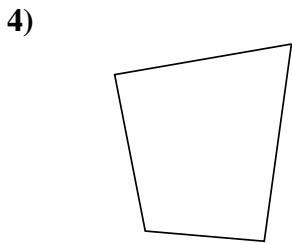
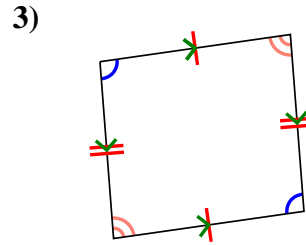
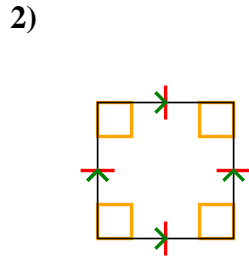
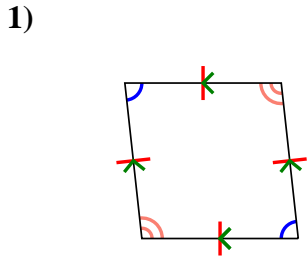
12)





Déterminer si la forme représentée est un Q uadrilatere, K ite, T rapezoid, P arallelogram, R h ombus, R ectangle ou S Quare (peut être plus d'un).

Réponses



1. Q,P,H

2. Q,P,H,R,S

3. Q,P

4. Q

5. Q

6. Q,P

7. Q,T

8. Q

9. Q,P,H

10. Q,T

11. Q,P

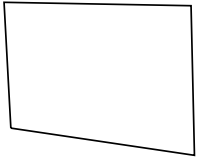
12. Q,K



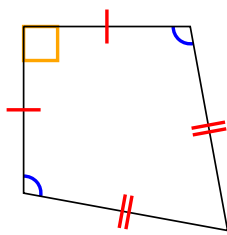
Déterminer si la forme représentée est un Q uadrilatéral, K ite, T rapezoid, P arallelogram, R h ombus, R ectangle ou S Quare (peut être plus d'un).

Réponses

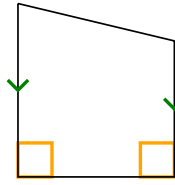
1)



2)



3)



1. _____

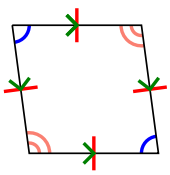
2. _____

3. _____

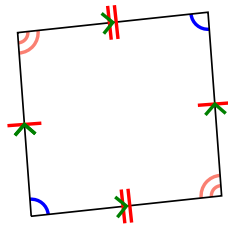
4. _____

5. _____

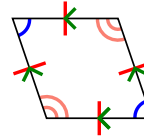
4)



5)



6)



6. _____

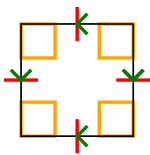
7. _____

8. _____

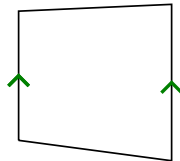
9. _____

10. _____

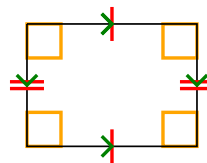
7)



8)



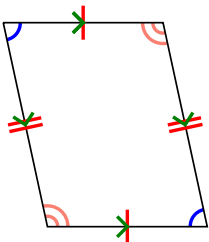
9)



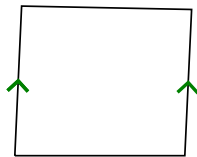
11. _____

12. _____

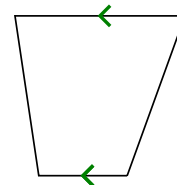
10)



11)



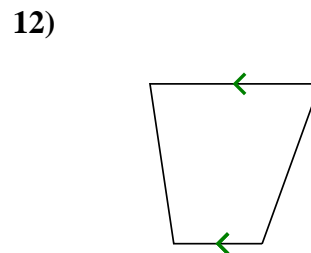
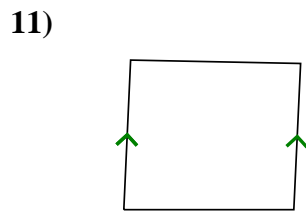
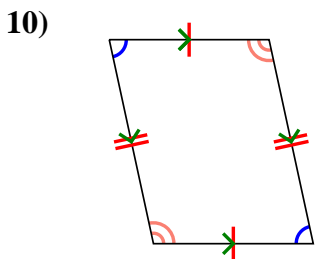
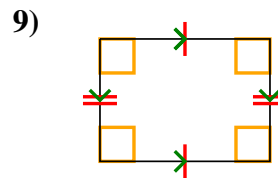
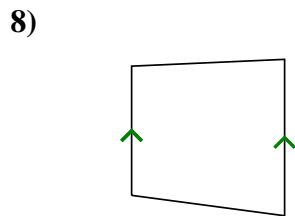
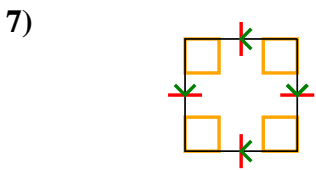
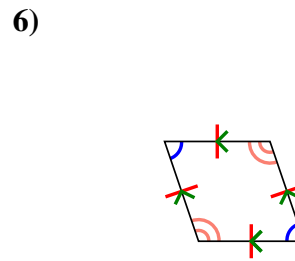
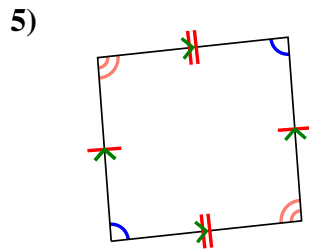
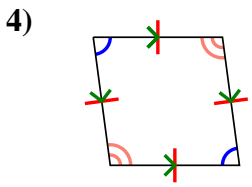
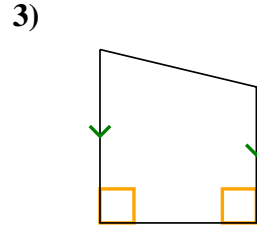
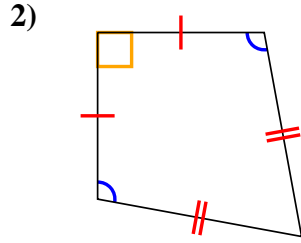
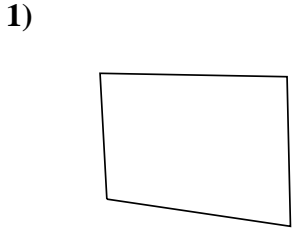
12)





Déterminer si la forme représentée est un Q uadrilatere, K ite, T rapezoid, P arallelogram, R h ombus, R ectangle ou S Quare (peut être plus d'un).

Réponses



1. Q

2. Q,K

3. Q,T

4. Q,P,H

5. Q,P

6. Q,P,H

7. Q,P,H,R,S

8. Q,T

9. Q,P,R

10. Q,P

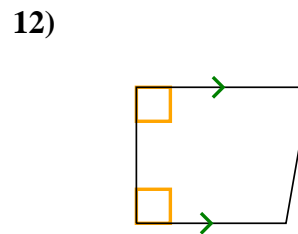
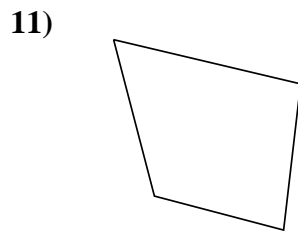
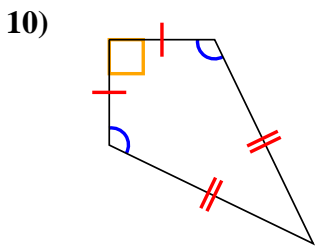
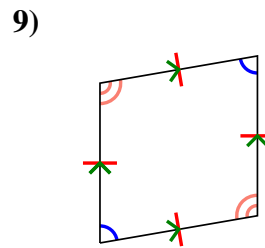
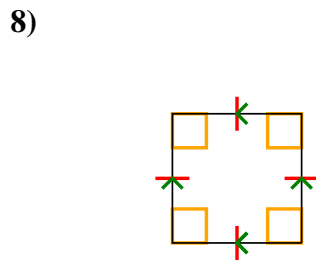
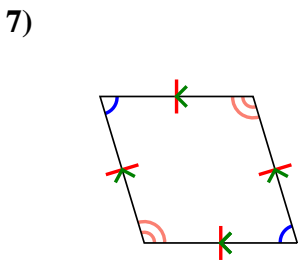
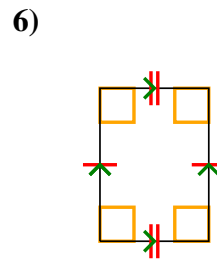
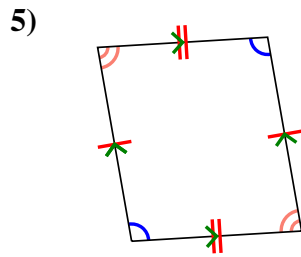
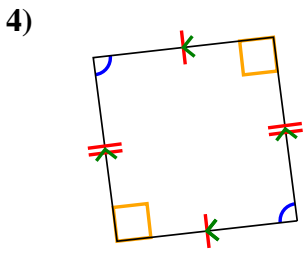
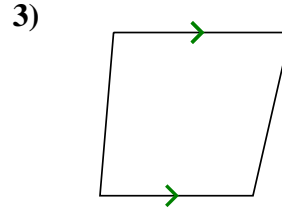
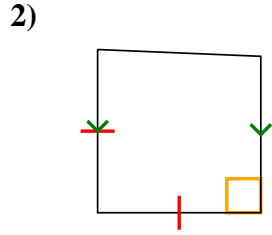
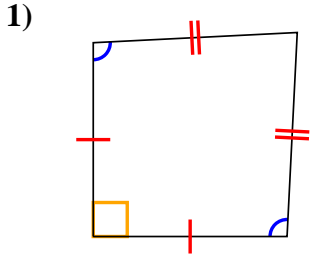
11. Q,T

12. Q,T



Déterminer si la forme représentée est un Q uadrilatéral, K ite, T rapezoid, P arallelogram, R h ombus, R ectangle ou S Quare (peut être plus d'un).

Réponses

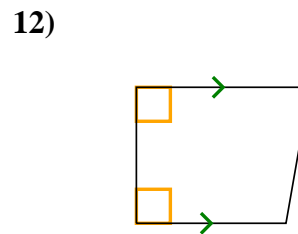
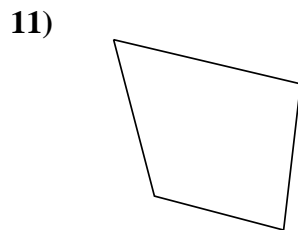
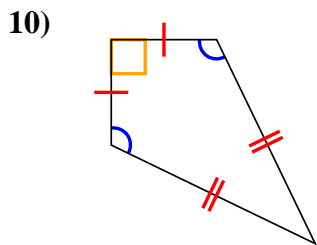
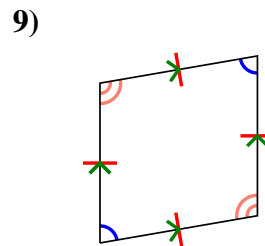
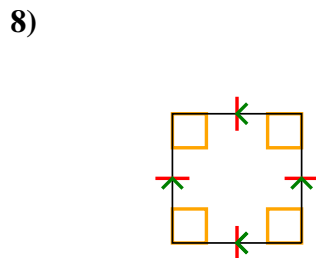
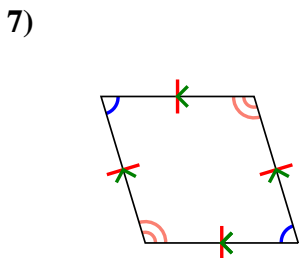
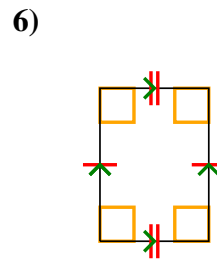
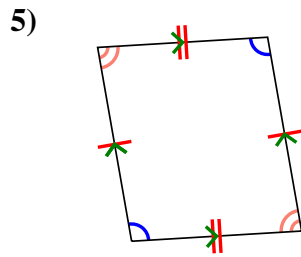
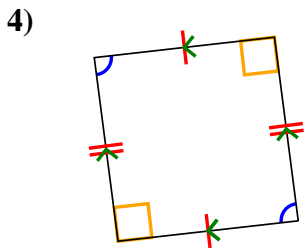
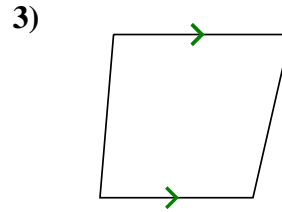
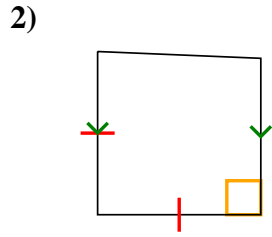
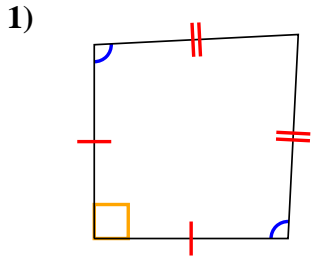


1. _____
2. _____
3. _____
4. _____
5. _____
6. _____
7. _____
8. _____
9. _____
10. _____
11. _____
12. _____



Déterminer si la forme représentée est un **Q**uadrilatère, **K**ite, **T**rapezoid, **P**arallélogramme, **R**hombus, **R**ectangle ou **S**quare (peut être plus d'un).

Réponses



1. Q,K
2. Q,T
3. Q,T
4. Q,P
5. Q,P
6. Q,P,R
7. Q,P,H
8. Q,P,H,R,S
9. Q,P,H
10. Q,K
11. Q
12. Q,T