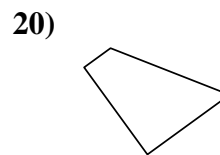
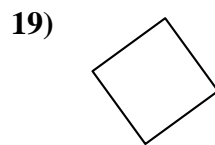
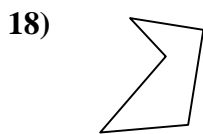
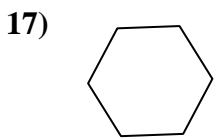
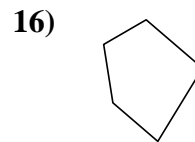
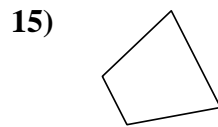

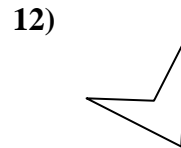
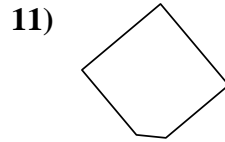
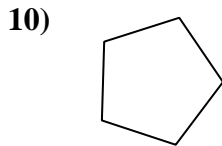
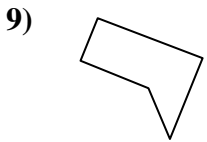
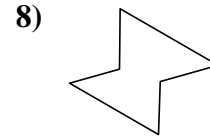
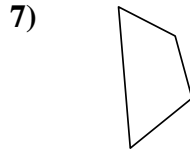
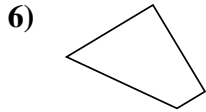
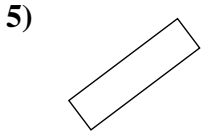
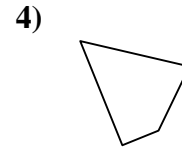
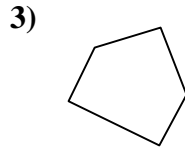
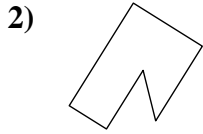
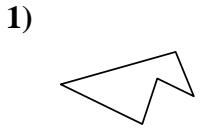




Déterminez si la figure est un quadrilatère (oui ou non).

Réponses



1. _____

2. _____

3. _____

4. _____

5. _____

6. _____

7. _____

8. _____

9. _____

10. _____

11. _____

12. _____

13. _____

14. _____

15. _____

16. _____

17. _____

18. _____

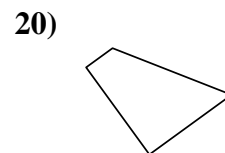
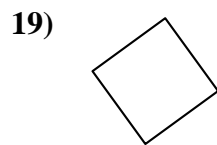
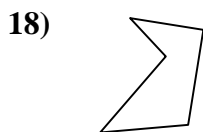
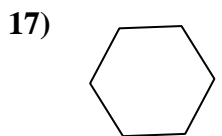
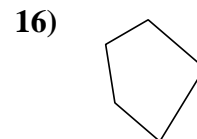
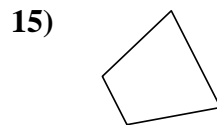

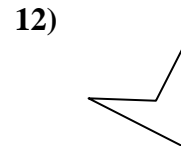
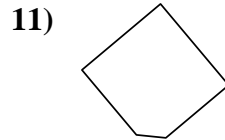
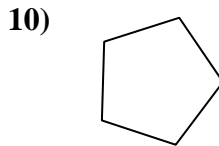
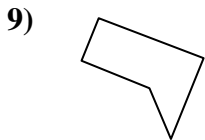
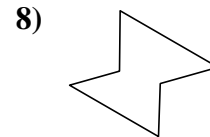
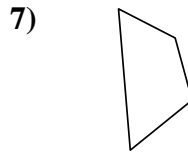
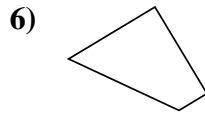
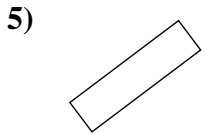
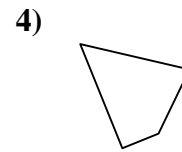
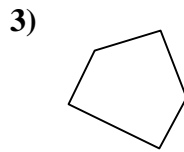
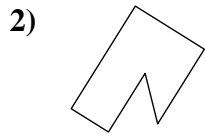
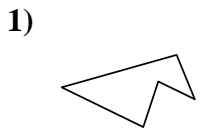
19. _____

20. _____



Déterminez si la figure est un quadrilatère (oui ou non).

Réponses



1. non

2. non

3. non

4. oui

5. oui

6. oui

7. oui

8. non

9. non

10. non

11. non

12. oui

13. oui

14. oui

15. oui

16. non

17. non

18. non

19. oui

20. oui