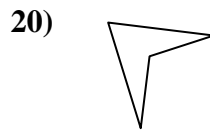
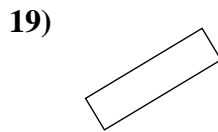
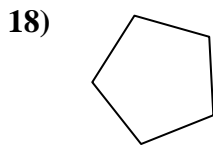

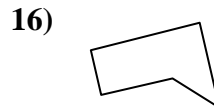
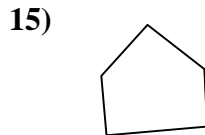
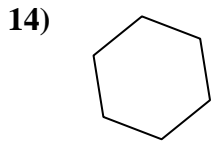
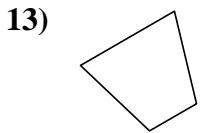
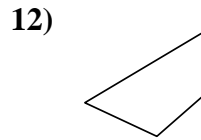
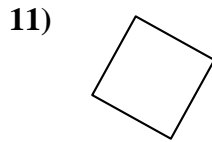
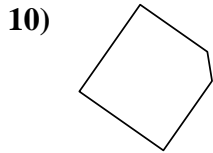
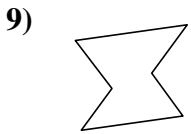
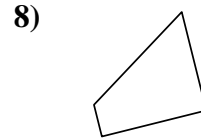
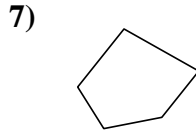
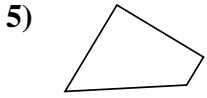
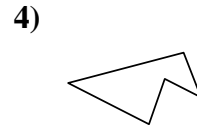
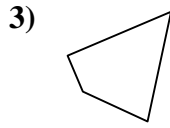
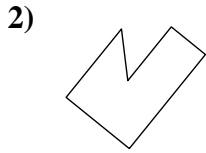
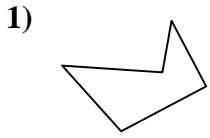




Déterminez si la figure est un quadrilatère (oui ou non).

Réponses

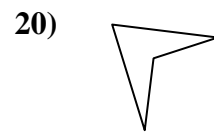
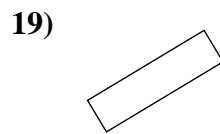
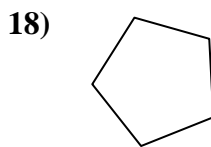

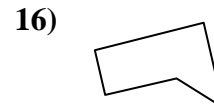
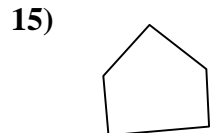
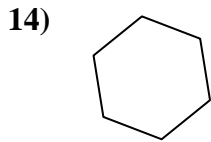
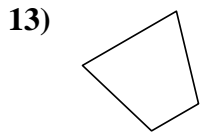
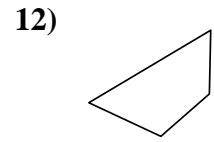
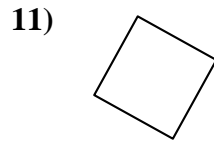
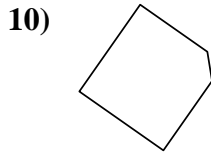
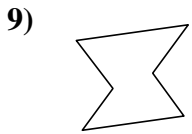
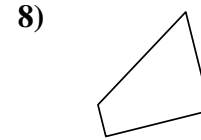
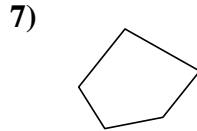
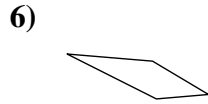
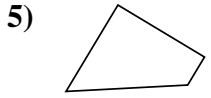
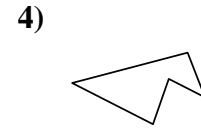
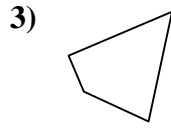
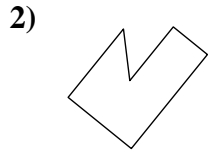
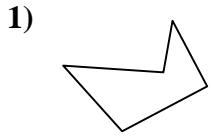


- 1. _____
- 2. _____
- 3. _____
- 4. _____
- 5. _____
- 6. _____
- 7. _____
- 8. _____
- 9. _____
- 10. _____
- 11. _____
- 12. _____
- 13. _____
- 14. _____
- 15. _____
- 16. _____
- 17. _____
- 18. _____
- 19. _____
- 20. _____



Déterminez si la figure est un quadrilatère (oui ou non).

Réponses



1. non

2. non

3. oui

4. non

5. oui

6. oui

7. non

8. oui

9. non

10. non

11. oui

12. oui

13. oui

14. non

15. non

16. non

17. oui

18. non

19. oui

20. oui