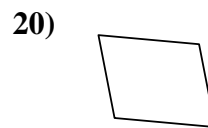
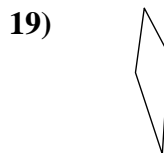
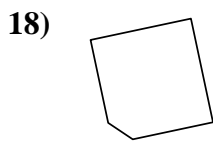
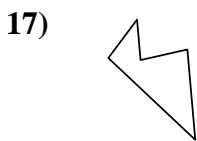
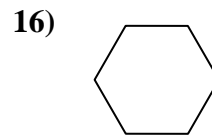
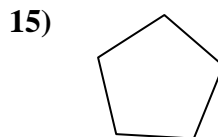
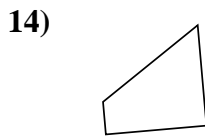
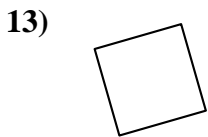
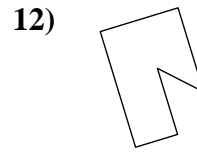
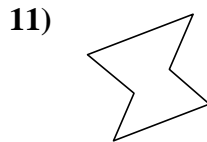
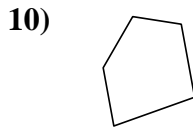
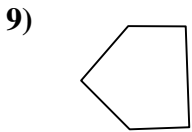
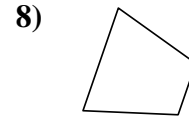
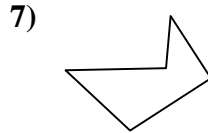
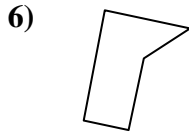

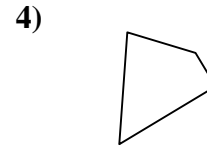
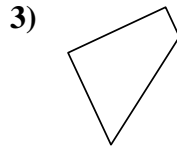
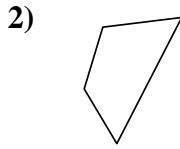





Déterminez si la figure est un quadrilatère (oui ou non).

Réponses

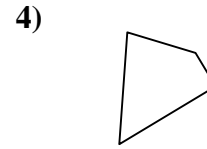
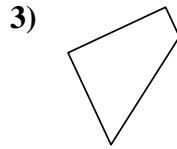
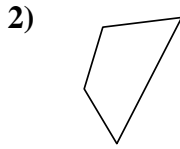



1. _____
2. _____
3. _____
4. _____
5. _____
6. _____
7. _____
8. _____
9. _____
10. _____
11. _____
12. _____
13. _____
14. _____
15. _____
16. _____
17. _____
18. _____
19. _____
20. _____



Déterminez si la figure est un quadrilatère (oui ou non).

Réponses

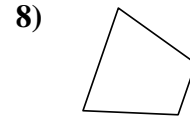
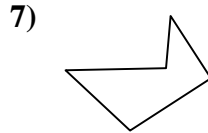
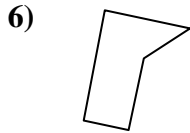



1. oui

2. oui

3. oui

4. oui

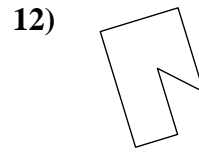
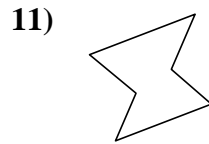
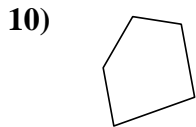
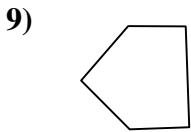


5. oui

6. non

7. non

8. oui

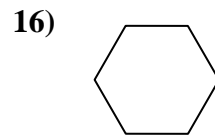
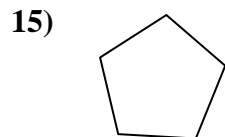
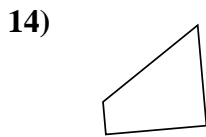
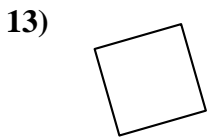


9. non

10. non

11. non

12. non

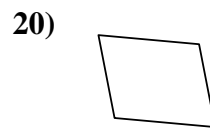
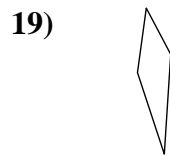
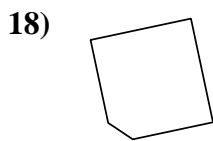
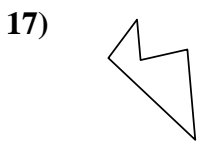


13. oui

14. oui

15. non

16. non



17. non

18. non

19. oui

20. oui