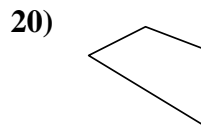
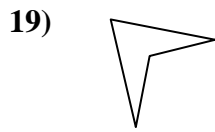
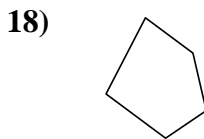
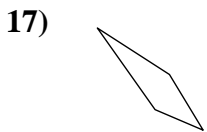
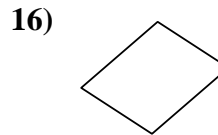
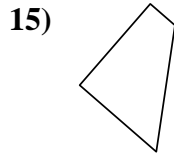
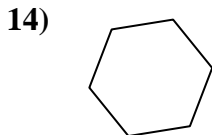
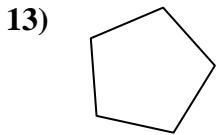
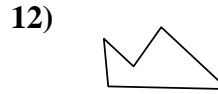
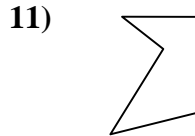
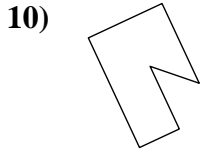
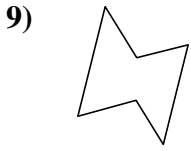
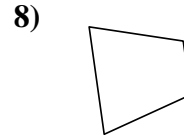
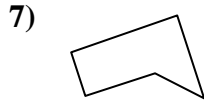
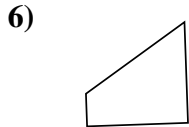
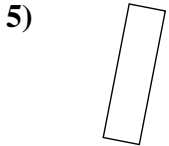
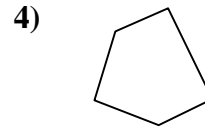
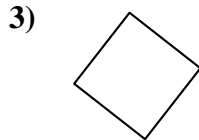
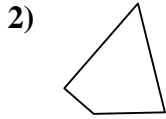
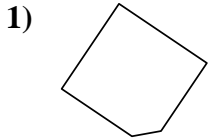




Déterminez si la figure est un quadrilatère (oui ou non).

Réponses



1. _____

2. _____

3. _____

4. _____

5. _____

6. _____

7. _____

8. _____

9. _____

10. _____

11. _____

12. _____

13. _____

14. _____

15. _____

16. _____

17. _____

18. _____

19. _____

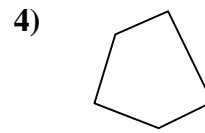
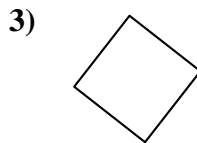
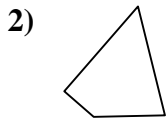
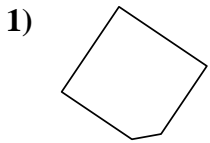
20. _____

1-10	95	90	85	80	75	70	65	60	55	50
11-20	45	40	35	30	25	20	15	10	5	0



Déterminez si la figure est un quadrilatère (oui ou non).

Réponses

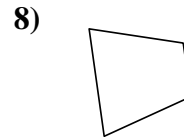
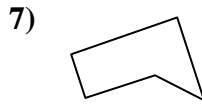
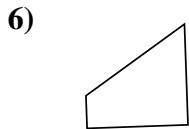
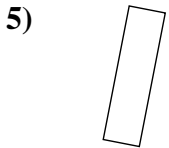


1. non

2. oui

3. oui

4. non

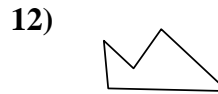
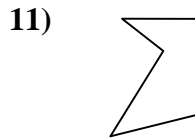
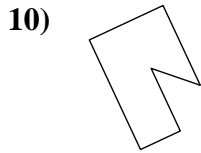
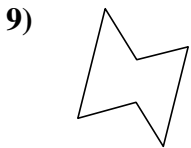


5. oui

6. oui

7. non

8. oui

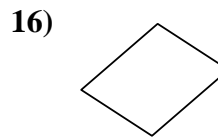
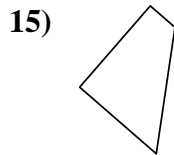
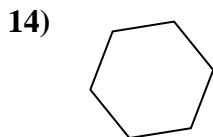
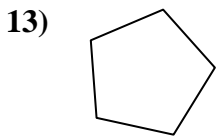


9. non

10. non

11. non

12. non

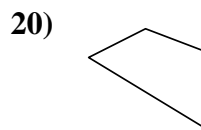
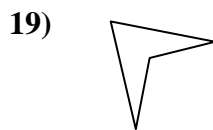
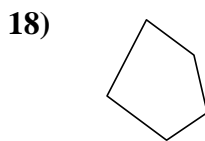
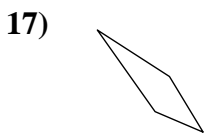


13. non

14. non

15. oui

16. oui



17. oui

18. non

19. oui

20. oui

1-10	95	90	85	80	75	70	65	60	55	50
11-20	45	40	35	30	25	20	15	10	5	0