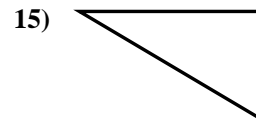
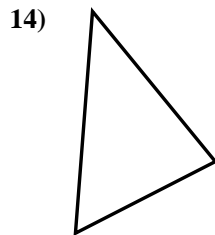
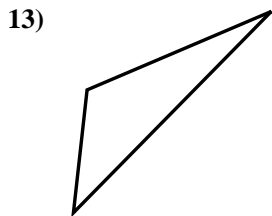
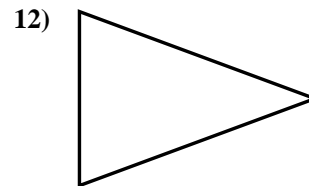
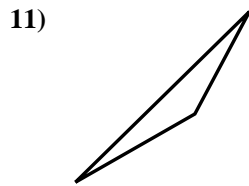
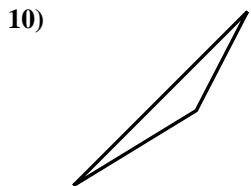
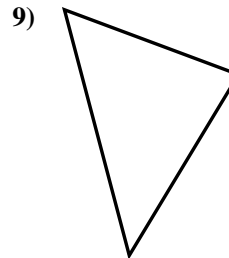
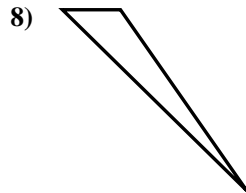
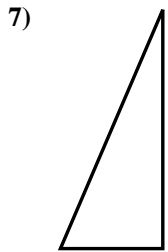
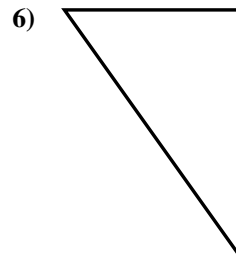
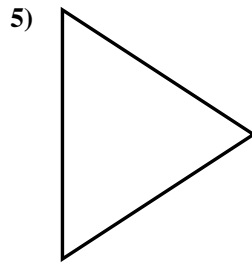
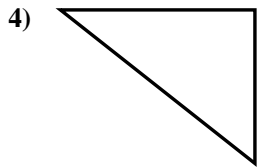
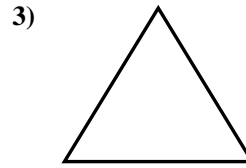
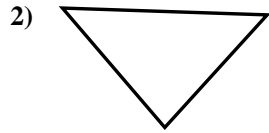
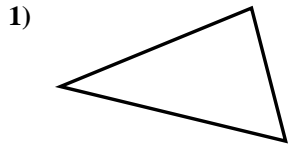




Déterminez si la figure est un triangle rectangle (oui ou non).

Réponses

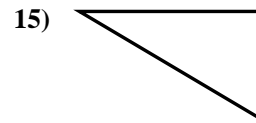
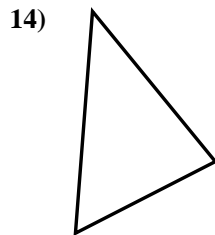
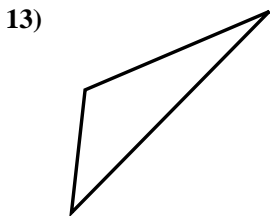
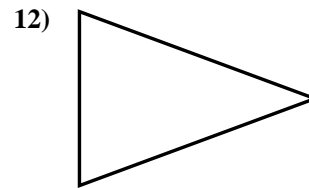
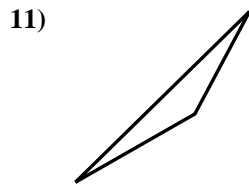
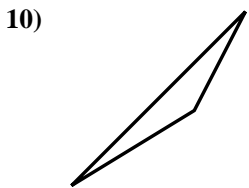
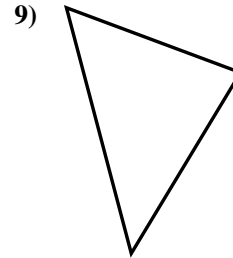
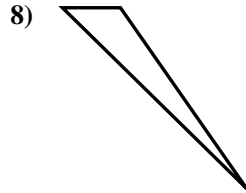
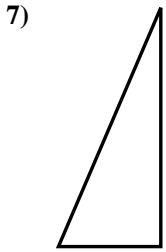
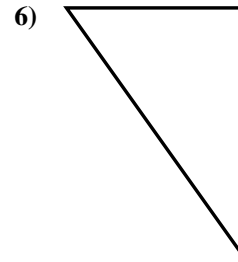
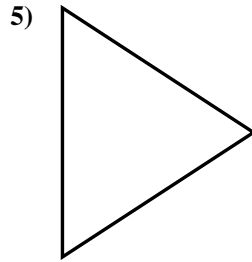
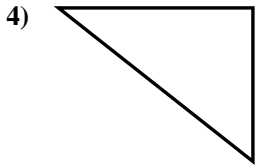
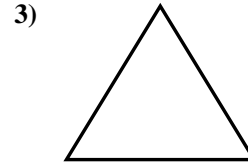
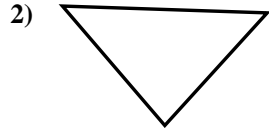
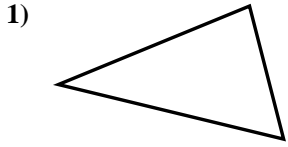


- 1. _____
- 2. _____
- 3. _____
- 4. _____
- 5. _____
- 6. _____
- 7. _____
- 8. _____
- 9. _____
- 10. _____
- 11. _____
- 12. _____
- 13. _____
- 14. _____
- 15. _____



Déterminez si la figure est un triangle rectangle (oui ou non).

Réponses



1. non

2. non

3. non

4. oui

5. non

6. oui

7. oui

8. non

9. non

10. non

11. non

12. non

13. non

14. non

15. oui