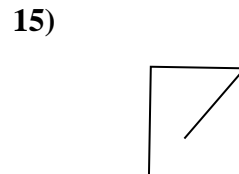
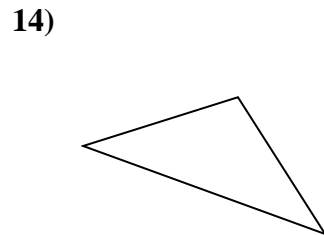
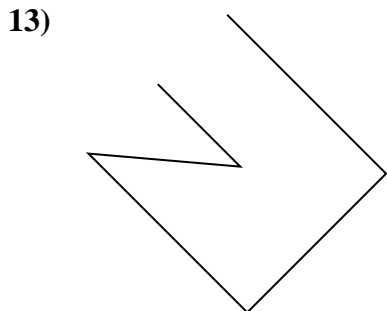
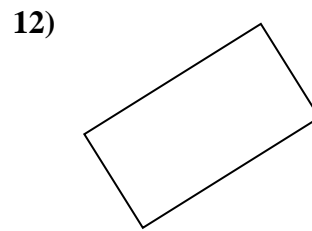
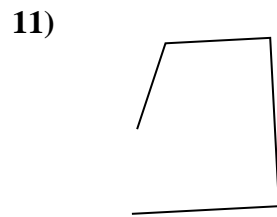
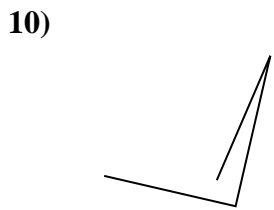

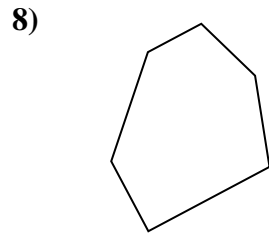
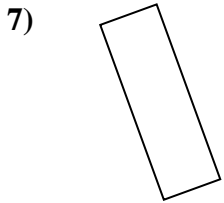
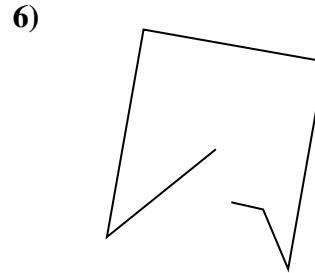
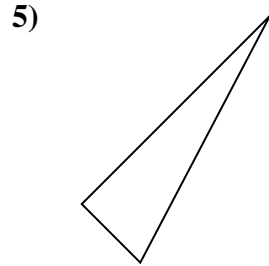
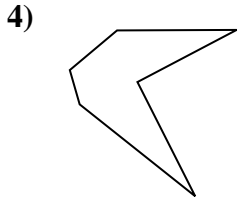
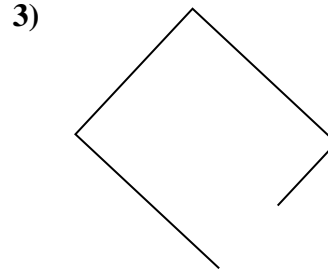
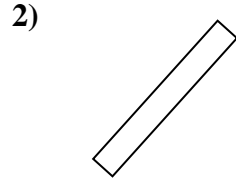
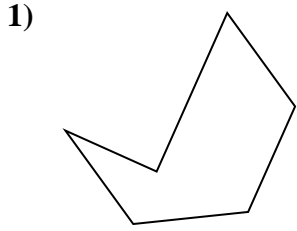




Determinez si la figure montrée est un 'Triangle', 'Carrée', 'Rectangle', 'Hexagone' or 'Autre'.

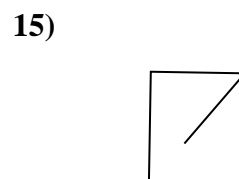
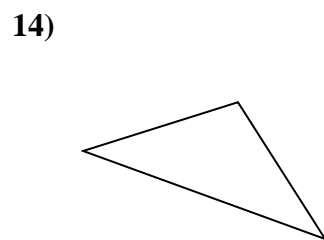
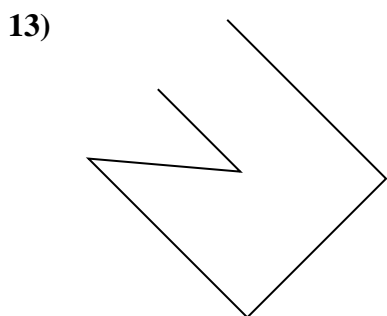
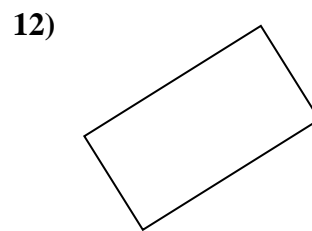
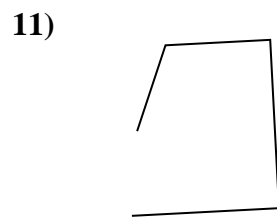
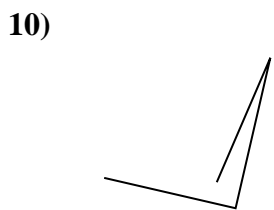

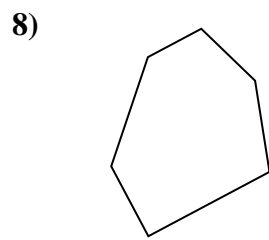
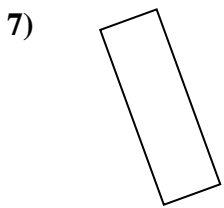
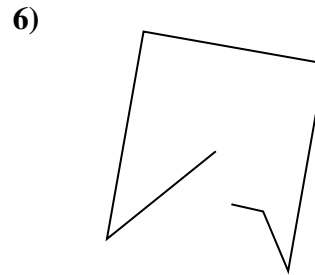
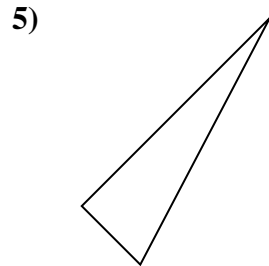
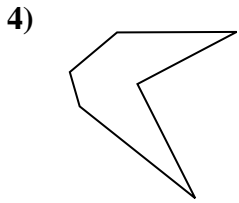
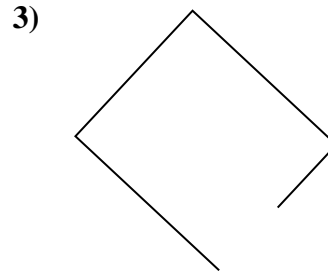
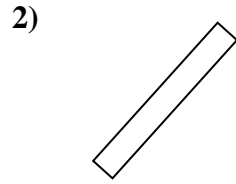
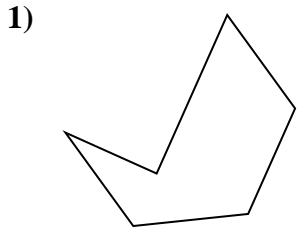
**Réponses**



- 1. \_\_\_\_\_
- 2. \_\_\_\_\_
- 3. \_\_\_\_\_
- 4. \_\_\_\_\_
- 5. \_\_\_\_\_
- 6. \_\_\_\_\_
- 7. \_\_\_\_\_
- 8. \_\_\_\_\_
- 9. \_\_\_\_\_
- 10. \_\_\_\_\_
- 11. \_\_\_\_\_
- 12. \_\_\_\_\_
- 13. \_\_\_\_\_
- 14. \_\_\_\_\_
- 15. \_\_\_\_\_



Determinez si la figure montrée est un 'Triangle', 'Carrée', 'Rectangle', 'Hexagone' or 'Autre'.



**Réponses**

1. Hexagone

2. rectangle

3. Autre

4. Hexagone

5. triangle

6. Autre

7. rectangle

8. Hexagone

9. triangle

10. Autre

11. Autre

12. rectangle

13. Autre

14. triangle

15. Autre