




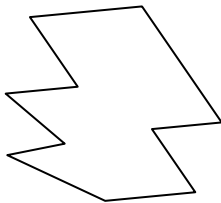
Identifiez les types de figures montrées.

**Réponses**

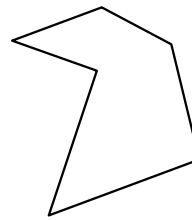
1)



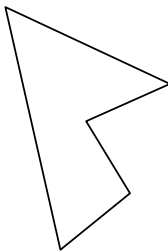
2)



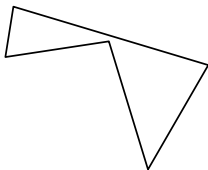
3)



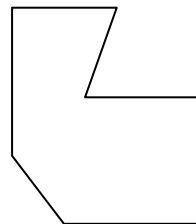
4)




5)



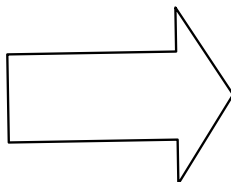
6)



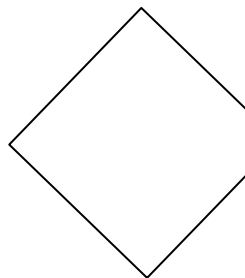
7)



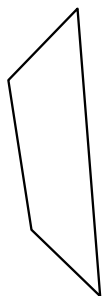
8)



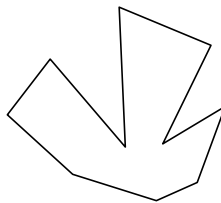
9)



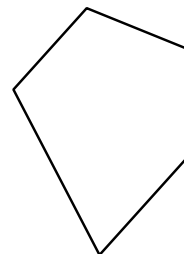
10)



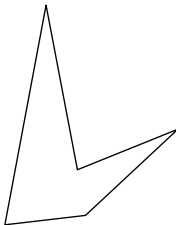
11)



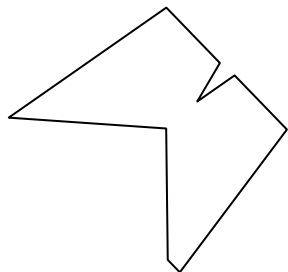
12)




13)



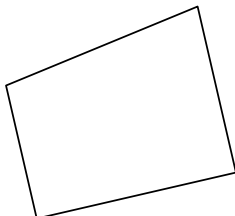
14)



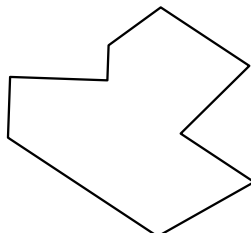
15)




16)



17)



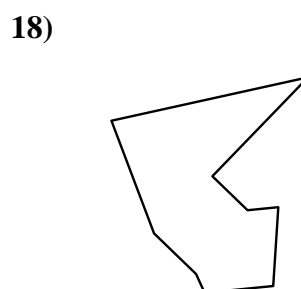
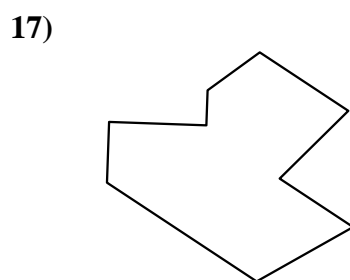
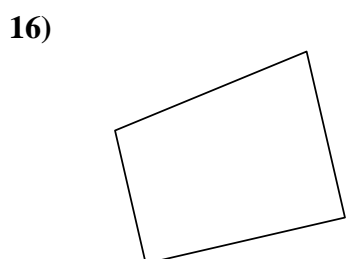

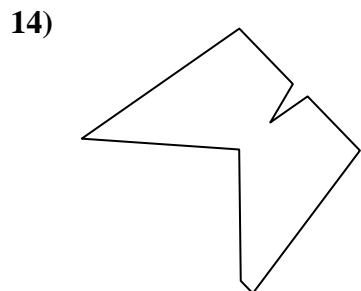
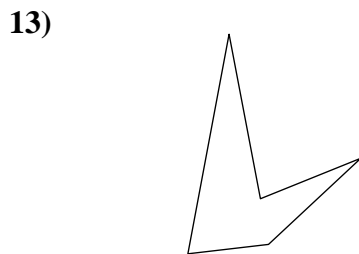
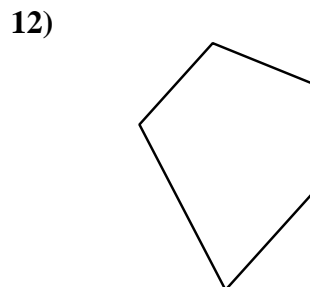
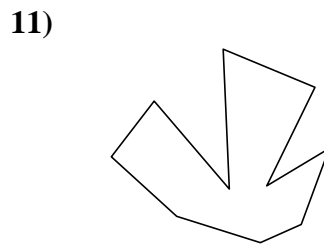
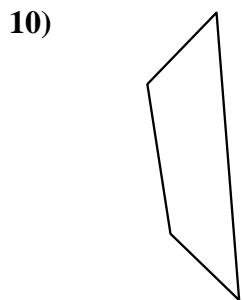
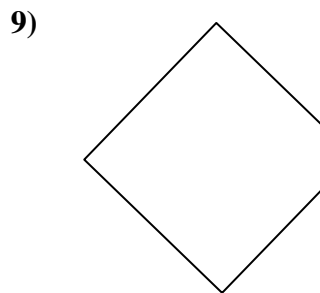
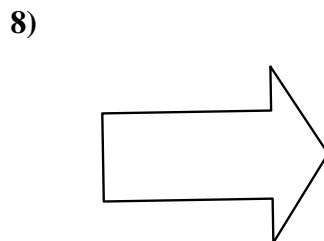
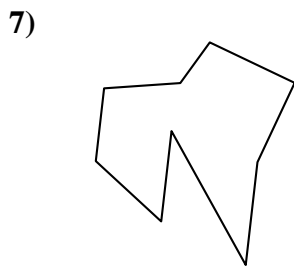
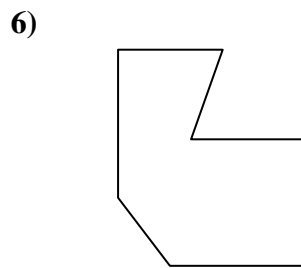
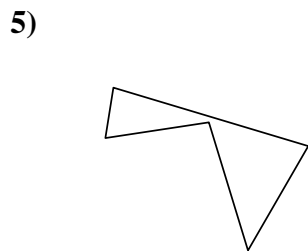
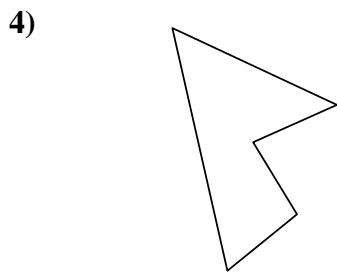
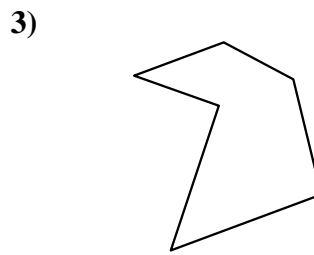
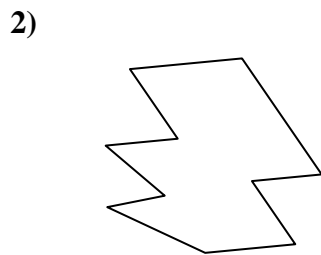
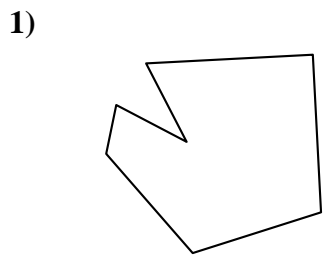
18)



- 1. \_\_\_\_\_
- 2. \_\_\_\_\_
- 3. \_\_\_\_\_
- 4. \_\_\_\_\_
- 5. \_\_\_\_\_
- 6. \_\_\_\_\_
- 7. \_\_\_\_\_
- 8. \_\_\_\_\_
- 9. \_\_\_\_\_
- 10. \_\_\_\_\_
- 11. \_\_\_\_\_
- 12. \_\_\_\_\_
- 13. \_\_\_\_\_
- 14. \_\_\_\_\_
- 15. \_\_\_\_\_
- 16. \_\_\_\_\_
- 17. \_\_\_\_\_
- 18. \_\_\_\_\_
- 19. \_\_\_\_\_
- 20. \_\_\_\_\_
- 21. \_\_\_\_\_



Identifiez les types de figures montrées.



**Réponses**

1. Heptagone

2. Décagone

3. Hexagone

4. Pentagone

5. Pentagone

6. Heptagone

7. Nonagone

8. Heptagone

9. Pentagone

10. Quadrilatère

11. Décagone

12. Pentagone

13. Pentagone

14. Nonagone

15. Octogone

16. Quadrilatère

17. Nonagone

18. Nonagone

19. Octogone

20. Quadrilatère

21. Octogone