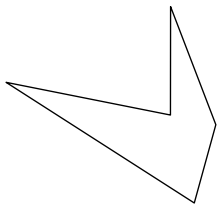


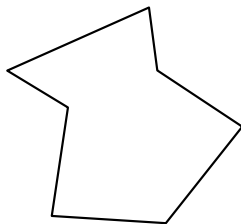


Identifiez les types de figures montrées.


1)



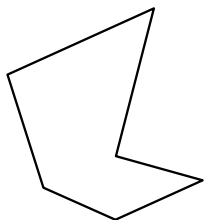
2)




3)



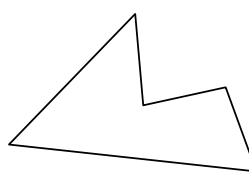
4)



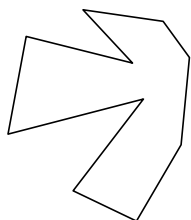
5)



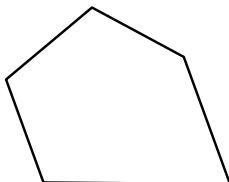
6)



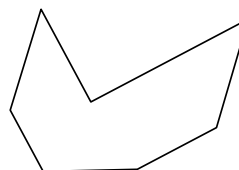
7)



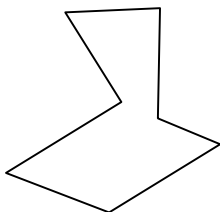
8)




9)



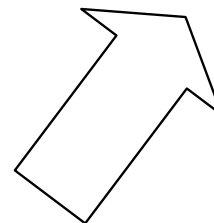
10)



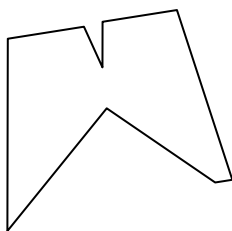
11)



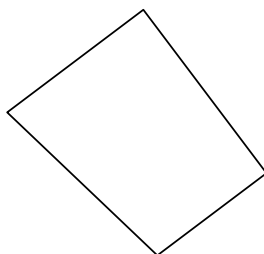
12)



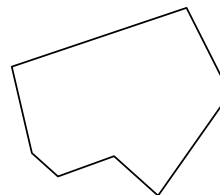
13)



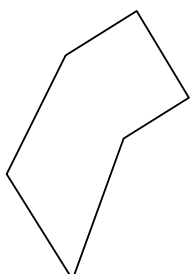
14)



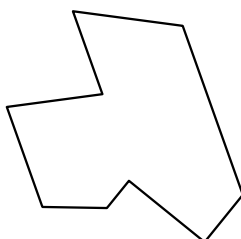
15)



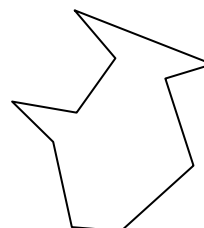
16)



17)



18)



Réponses

1. _____

2. _____

3. _____

4. _____

5. _____

6. _____

7. _____

8. _____

9. _____

10. _____

11. _____

12. _____

13. _____

14. _____

15. _____

16. _____

17. _____

18. _____

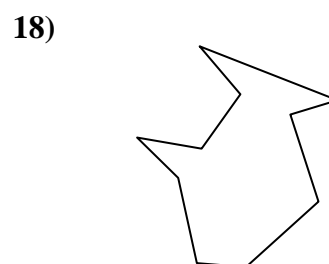
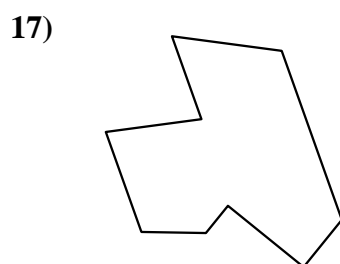
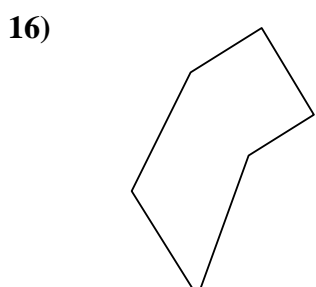
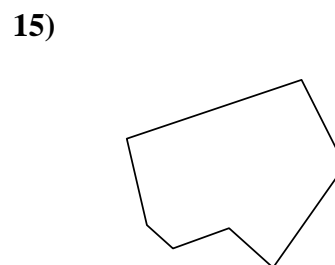
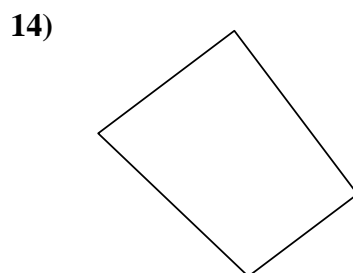
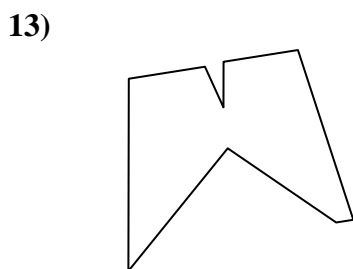
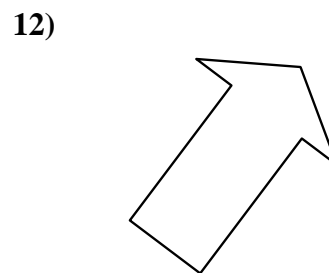
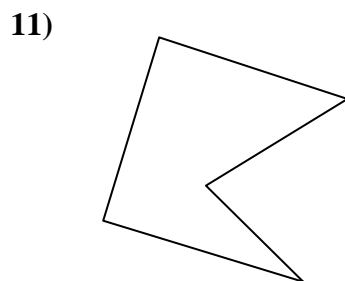
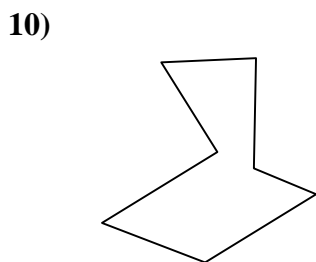

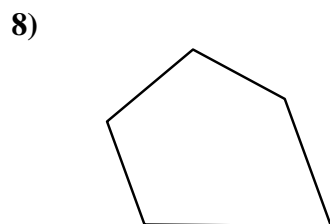
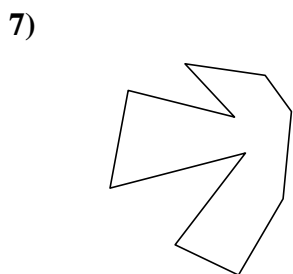
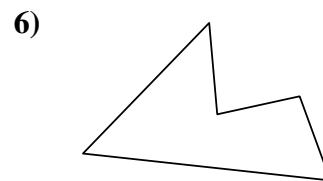
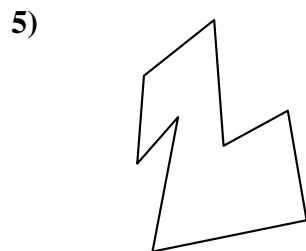
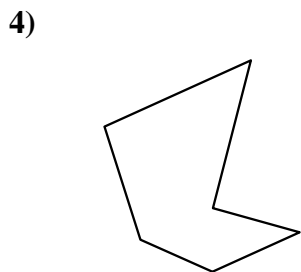
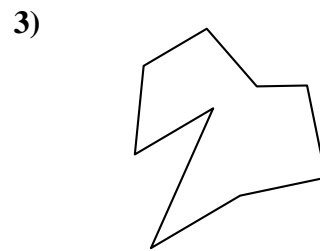

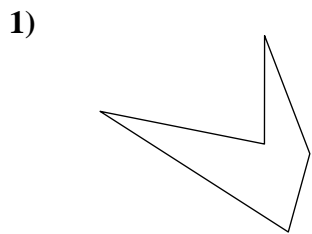
19. _____

20. _____

21. _____



Identifiez les types de figures montrées.



Réponses

1. Pentagone

2. Heptagone

3. Nonagone

4. Hexagone

5. Octogone

6. Pentagone

7. Décagone

8. Pentagone

9. Heptagone

10. Heptagone

11. Pentagone

12. Heptagone

13. Nonagone

14. Quadrilatère

15. Heptagone

16. Hexagone

17. Nonagone

18. Décagone

19. Nonagone

20. Hexagone

21. Octogone