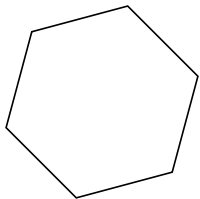


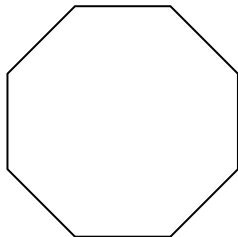


Identifiez le type de figure montrée.

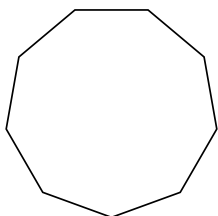
1)



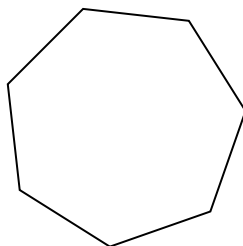
2)




3)



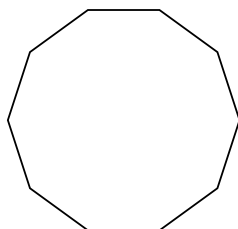
4)



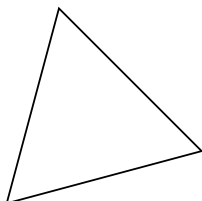
5)



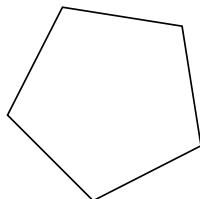
6)



7)



8)



Réponses

1. _____

2. _____

3. _____

4. _____

5. _____

6. _____

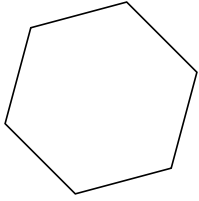
7. _____

8. _____

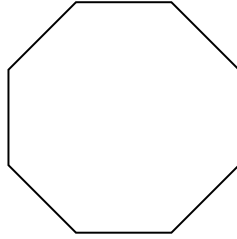


Identifiez le type de figure montrée.

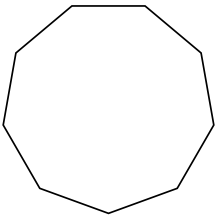
1)



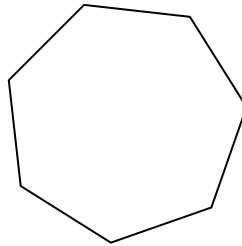
2)




3)



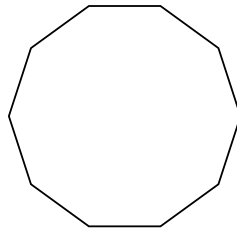
4)



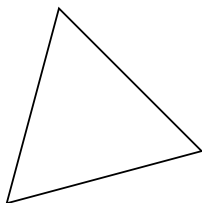
5)



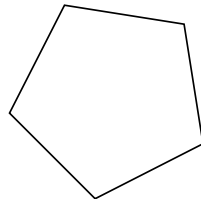
6)



7)



8)



Réponses

1. **Hexagone**

2. **Octogone**

3. **Nonagone**

4. **Heptagone**

5. **Quadrilatère**

6. **Décagone**

7. **triangle**

8. **Pentagone**