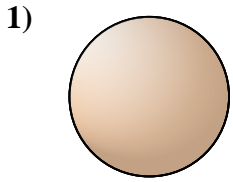


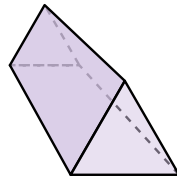


Déterminez quel choix représente le MIEUX la description de la figure.

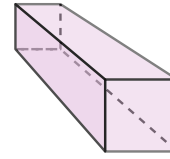
Réponses



- 1)
- A. triangular pyramid
 - B. sphere
 - C. rectangular pyramid
 - D. rectangular prism



- 2)
- A. triangular pyramid
 - B. cone
 - C. triangular prism
 - D. cube



- 3)
- A. cube
 - B. triangular prism
 - C. rectangular prism
 - D. rectangular pyramid

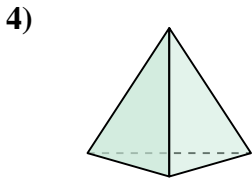
1. _____

2. _____


3. _____

4. _____

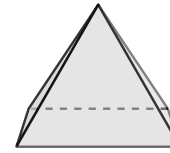
5. _____



- 4)
- A. triangular pyramid
 - B. sphere
 - C. triangular prism
 - D. cube



- 5)
- A. rectangular prism
 - B. rectangular pyramid
 - C. cylinder
 - D. triangular pyramid



- 6)
- A. cone
 - B. triangular pyramid
 - C. rectangular pyramid
 - D. cylinder

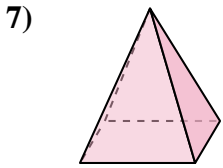
6. _____

7. _____

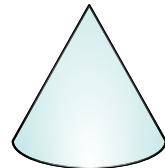
8. _____

9. _____

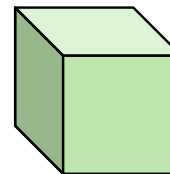
10. _____



- 7)
- A. triangular pyramid
 - B. cube
 - C. rectangular prism
 - D. rectangular pyramid



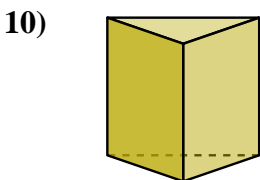
- 8)
- A. rectangular pyramid
 - B. cube
 - C. triangular prism
 - D. cone



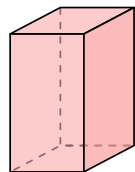
- 9)
- A. cylinder
 - B. rectangular prism
 - C. triangular prism
 - D. cube

11. _____

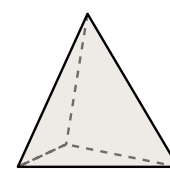
12. _____



- 10)
- A. cylinder
 - B. sphere
 - C. cone
 - D. triangular prism



- 11)
- A. triangular prism
 - B. cube
 - C. rectangular prism
 - D. cone

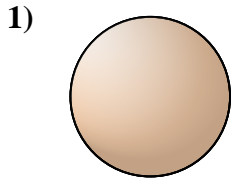


- 12)
- A. sphere
 - B. triangular prism
 - C. cube
 - D. triangular pyramid

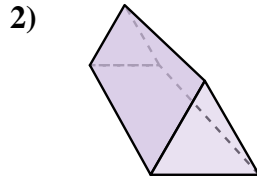


Déterminez quel choix représente le MIEUX la description de la figure.

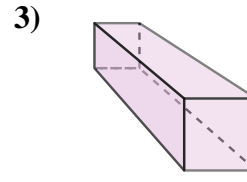
Réponses



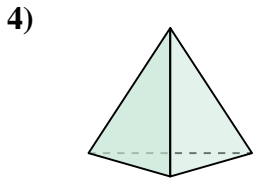
- A. triangular pyramid
- B. sphere
- C. rectangular pyramid
- D. rectangular prism



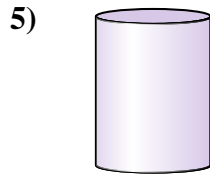
- A. triangular pyramid
- B. cone
- C. triangular prism
- D. cube



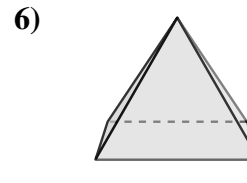
- A. cube
- B. triangular prism
- C. rectangular prism
- D. rectangular pyramid



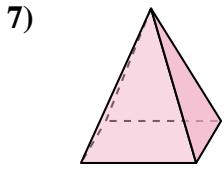
- A. triangular pyramid
- B. sphere
- C. triangular prism
- D. cube



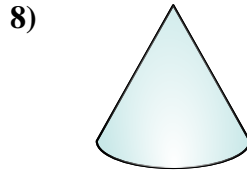
- A. rectangular prism
- B. rectangular pyramid
- C. cylinder
- D. triangular pyramid



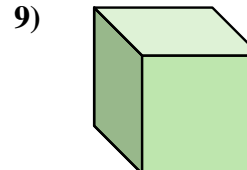
- A. cone
- B. triangular pyramid
- C. rectangular pyramid
- D. cylinder



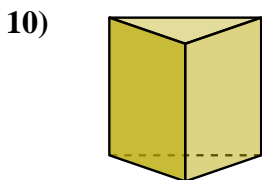
- A. triangular pyramid
- B. cube
- C. rectangular prism
- D. rectangular pyramid



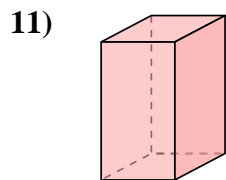
- A. rectangular pyramid
- B. cube
- C. triangular prism
- D. cone



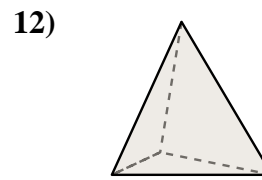
- A. cylinder
- B. rectangular prism
- C. triangular prism
- D. cube



- A. cylinder
- B. sphere
- C. cone
- D. triangular prism



- A. triangular prism
- B. cube
- C. rectangular prism
- D. cone



- A. sphere
- B. triangular prism
- C. cube
- D. triangular pyramid

- 1. **B**
- 2. **C**
- 3. **C**
- 4. **A**
- 5. **C**
- 6. **C**
- 7. **D**
- 8. **D**
- 9. **D**
- 10. **D**
- 11. **C**
- 12. **D**