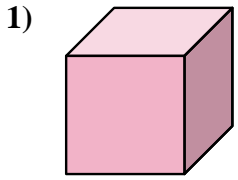


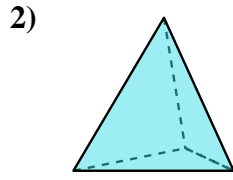


Déterminez quel choix représente le MIEUX la description de la figure.

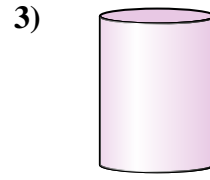
Réponses



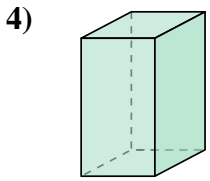
- A. cylinder
- B. triangular pyramid
- C. triangular prism
- D. cube



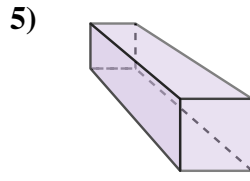
- A. rectangular pyramid
- B. triangular pyramid
- C. triangular prism
- D. rectangular prism



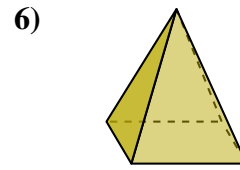
- A. cylinder
- B. sphere
- C. cone
- D. cube



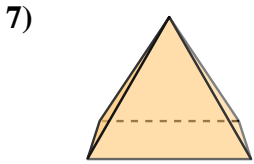
- A. cylinder
- B. rectangular pyramid
- C. sphere
- D. rectangular prism



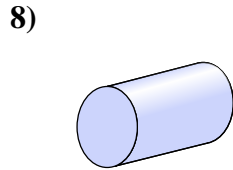
- A. rectangular prism
- B. cylinder
- C. cube
- D. sphere



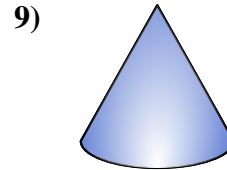
- A. rectangular pyramid
- B. triangular prism
- C. sphere
- D. cone



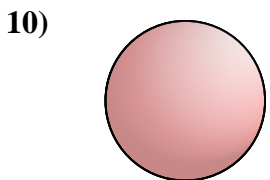
- A. cone
- B. triangular prism
- C. rectangular pyramid
- D. sphere



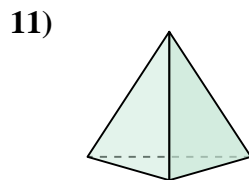
- A. triangular pyramid
- B. cylinder
- C. rectangular pyramid
- D. sphere



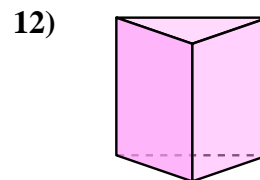
- A. cone
- B. cylinder
- C. triangular pyramid
- D. sphere



- A. cylinder
- B. triangular prism
- C. sphere
- D. cube



- A. sphere
- B. triangular pyramid
- C. rectangular pyramid
- D. rectangular prism



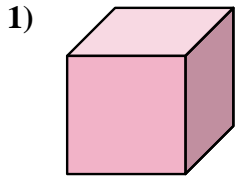
- A. triangular prism
- B. cylinder
- C. rectangular prism
- D. triangular pyramid

- 1. _____
- 2. _____
- 3. _____
- 4. _____
- 5. _____
- 6. _____
- 7. _____
- 8. _____
- 9. _____
- 10. _____
- 11. _____
- 12. _____

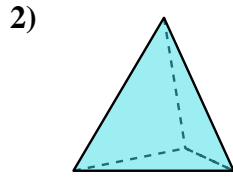


Déterminez quel choix représente le MIEUX la description de la figure.

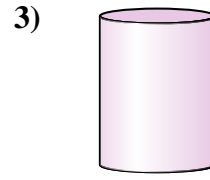
Réponses



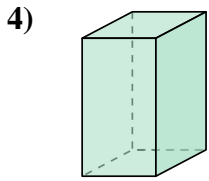
- A. cylinder
- B. triangular pyramid
- C. triangular prism
- D. cube



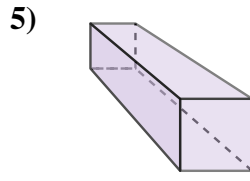
- A. rectangular pyramid
- B. triangular pyramid
- C. triangular prism
- D. rectangular prism



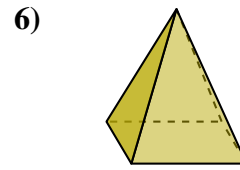
- A. cylinder
- B. sphere
- C. cone
- D. cube



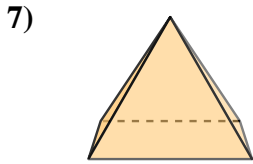
- A. cylinder
- B. rectangular pyramid
- C. sphere
- D. rectangular prism



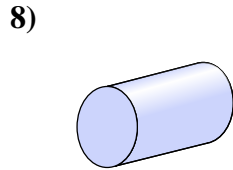
- A. rectangular prism
- B. cylinder
- C. cube
- D. sphere



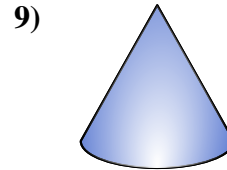
- A. rectangular pyramid
- B. triangular prism
- C. sphere
- D. cone



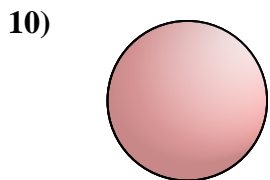
- A. cone
- B. triangular prism
- C. rectangular pyramid
- D. sphere



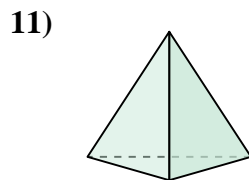
- A. triangular pyramid
- B. cylinder
- C. rectangular pyramid
- D. sphere



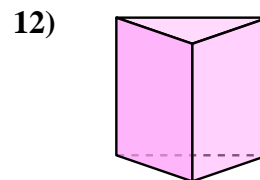
- A. cone
- B. cylinder
- C. triangular pyramid
- D. sphere



- A. cylinder
- B. triangular prism
- C. sphere
- D. cube



- A. sphere
- B. triangular pyramid
- C. rectangular pyramid
- D. rectangular prism



- A. triangular prism
- B. cylinder
- C. rectangular prism
- D. triangular pyramid

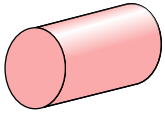
- 1. **D**
- 2. **B**
- 3. **A**
- 4. **D**
- 5. **A**
- 6. **A**
- 7. **C**
- 8. **B**
- 9. **A**
- 10. **C**
- 11. **B**
- 12. **A**



Déterminez quel choix représente le MIEUX la description de la figure.

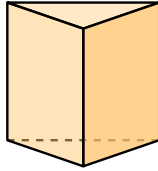
Réponses

1)



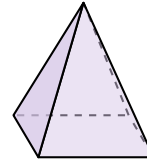
- A. sphere
- B. triangular pyramid
- C. rectangular pyramid
- D. cylinder

2)




- A. triangular prism
- B. cone
- C. triangular pyramid
- D. rectangular prism

3)



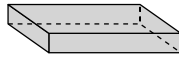
- A. rectangular pyramid
- B. sphere
- C. rectangular prism
- D. triangular prism

4)



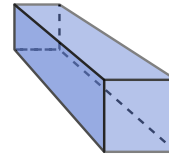
- A. triangular pyramid
- B. cylinder
- C. triangular prism
- D. sphere

5)



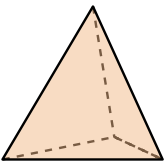
- A. rectangular pyramid
- B. sphere
- C. rectangular prism
- D. triangular prism

6)



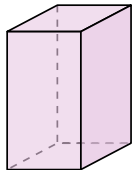
- A. cube
- B. cone
- C. triangular pyramid
- D. rectangular prism

7)



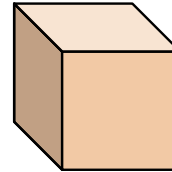
- A. triangular pyramid
- B. triangular prism
- C. cone
- D. rectangular pyramid

8)



- A. cube
- B. cylinder
- C. rectangular pyramid
- D. rectangular prism

9)



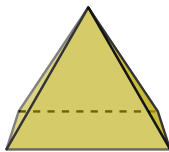
- A. cone
- B. cube
- C. triangular prism
- D. rectangular pyramid

10)




- A. cylinder
- B. sphere
- C. triangular pyramid
- D. cone

11)



- A. rectangular pyramid
- B. rectangular prism
- C. sphere
- D. cube

12)



- A. cone
- B. triangular pyramid
- C. triangular prism
- D. sphere

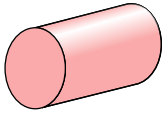
- 1. _____
- 2. _____
- 3. _____
- 4. _____
- 5. _____
- 6. _____
- 7. _____
- 8. _____
- 9. _____
- 10. _____
- 11. _____
- 12. _____



Déterminez quel choix représente le MIEUX la description de la figure.

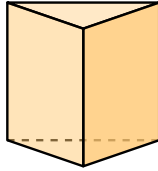
Réponses

1)



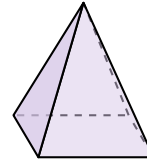
- A. sphere
- B. triangular pyramid
- C. rectangular pyramid
- D. cylinder

2)




- A. triangular prism
- B. cone
- C. triangular pyramid
- D. rectangular prism

3)



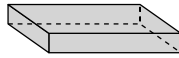
- A. rectangular pyramid
- B. sphere
- C. rectangular prism
- D. triangular prism

4)



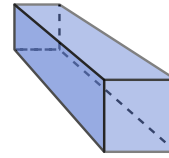
- A. triangular pyramid
- B. cylinder
- C. triangular prism
- D. sphere

5)



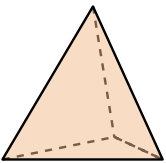
- A. rectangular pyramid
- B. sphere
- C. rectangular prism
- D. triangular prism

6)



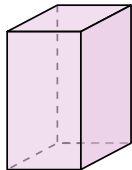
- A. cube
- B. cone
- C. triangular pyramid
- D. rectangular prism

7)



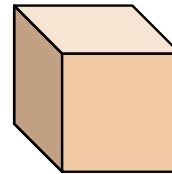
- A. triangular pyramid
- B. triangular prism
- C. cone
- D. rectangular pyramid

8)



- A. cube
- B. cylinder
- C. rectangular pyramid
- D. rectangular prism

9)



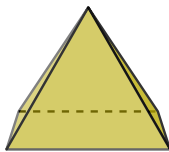
- A. cone
- B. cube
- C. triangular prism
- D. rectangular pyramid

10)




- A. cylinder
- B. sphere
- C. triangular pyramid
- D. cone

11)



- A. rectangular pyramid
- B. rectangular prism
- C. sphere
- D. cube

12)



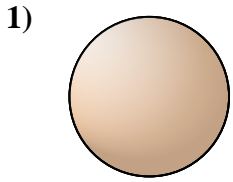
- A. cone
- B. triangular pyramid
- C. triangular prism
- D. sphere

- 1. **D**
- 2. **A**
- 3. **A**
- 4. **B**
- 5. **C**
- 6. **D**
- 7. **A**
- 8. **D**
- 9. **B**
- 10. **D**
- 11. **A**
- 12. **D**

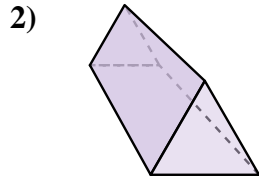


Déterminez quel choix représente le MIEUX la description de la figure.

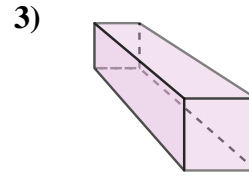
Réponses



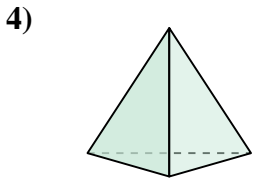
- 1)
- A. triangular pyramid
 - B. sphere
 - C. rectangular pyramid
 - D. rectangular prism



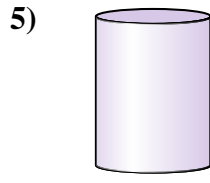
- 2)
- A. triangular pyramid
 - B. cone
 - C. triangular prism
 - D. cube



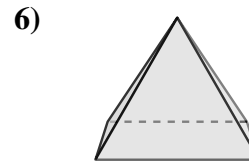
- 3)
- A. cube
 - B. triangular prism
 - C. rectangular prism
 - D. rectangular pyramid



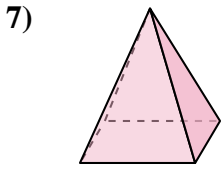
- 4)
- A. triangular pyramid
 - B. sphere
 - C. triangular prism
 - D. cube



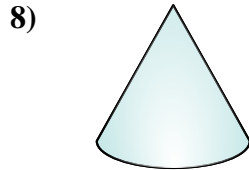
- 5)
- A. rectangular prism
 - B. rectangular pyramid
 - C. cylinder
 - D. triangular pyramid



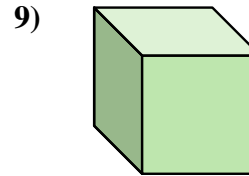
- 6)
- A. cone
 - B. triangular pyramid
 - C. rectangular pyramid
 - D. cylinder



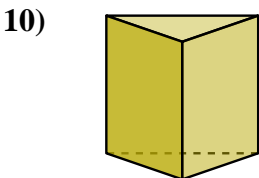
- 7)
- A. triangular pyramid
 - B. cube
 - C. rectangular prism
 - D. rectangular pyramid



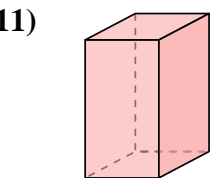
- 8)
- A. rectangular pyramid
 - B. cube
 - C. triangular prism
 - D. cone



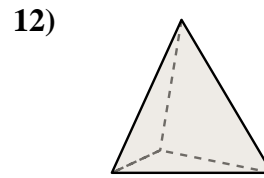
- 9)
- A. cylinder
 - B. rectangular prism
 - C. triangular prism
 - D. cube



- 10)
- A. cylinder
 - B. sphere
 - C. cone
 - D. triangular prism



- 11)
- A. triangular prism
 - B. cube
 - C. rectangular prism
 - D. cone



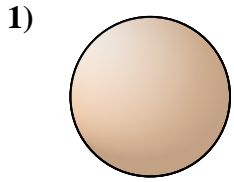
- 12)
- A. sphere
 - B. triangular prism
 - C. cube
 - D. triangular pyramid

- 1. _____
- 2. _____
- 3. _____
- 4. _____
- 5. _____
- 6. _____
- 7. _____
- 8. _____
- 9. _____
- 10. _____
- 11. _____
- 12. _____

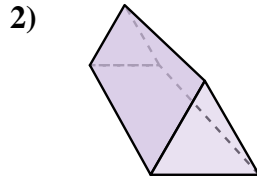


Déterminez quel choix représente le MIEUX la description de la figure.

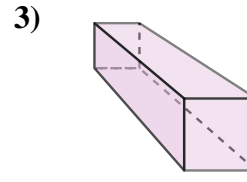
Réponses



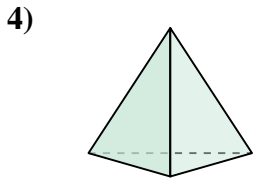
- A. triangular pyramid
- B. sphere
- C. rectangular pyramid
- D. rectangular prism



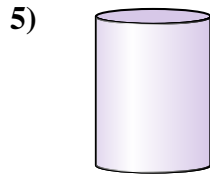
- A. triangular pyramid
- B. cone
- C. triangular prism
- D. cube



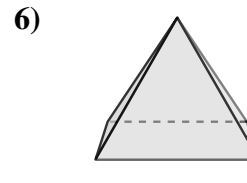
- A. cube
- B. triangular prism
- C. rectangular prism
- D. rectangular pyramid



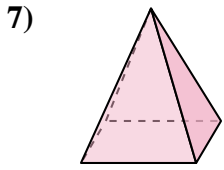
- A. triangular pyramid
- B. sphere
- C. triangular prism
- D. cube



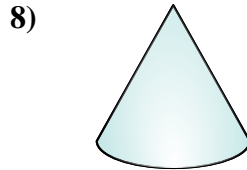
- A. rectangular prism
- B. rectangular pyramid
- C. cylinder
- D. triangular pyramid



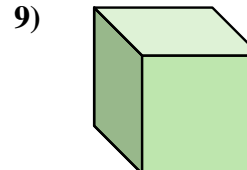
- A. cone
- B. triangular pyramid
- C. rectangular pyramid
- D. cylinder



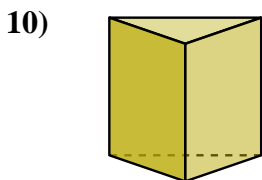
- A. triangular pyramid
- B. cube
- C. rectangular prism
- D. rectangular pyramid



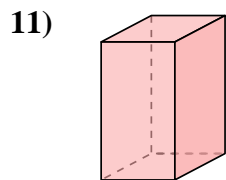
- A. rectangular pyramid
- B. cube
- C. triangular prism
- D. cone



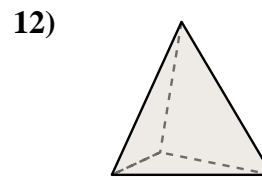
- A. cylinder
- B. rectangular prism
- C. triangular prism
- D. cube



- A. cylinder
- B. sphere
- C. cone
- D. triangular prism



- A. triangular prism
- B. cube
- C. rectangular prism
- D. cone



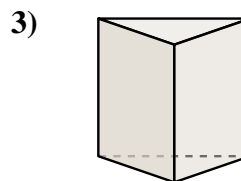

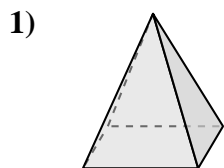
- A. sphere
- B. triangular prism
- C. cube
- D. triangular pyramid

- 1. **B**
- 2. **C**
- 3. **C**
- 4. **A**
- 5. **C**
- 6. **C**
- 7. **D**
- 8. **D**
- 9. **D**
- 10. **D**
- 11. **C**
- 12. **D**



Déterminez quel choix représente le MIEUX la description de la figure.

Réponses



- 1) A. sphere
- B. rectangular prism
- C. rectangular pyramid
- D. cube

- 2) A. cylinder
- B. rectangular pyramid
- C. rectangular prism
- D. sphere

- 3) A. triangular prism
- B. cylinder
- C. sphere
- D. cube

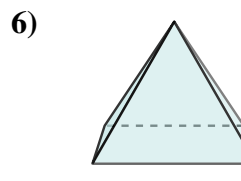
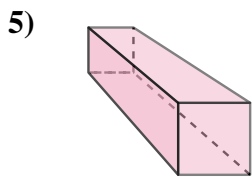
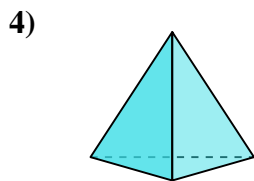
1. _____

2. _____

3. _____

4. _____

5. _____



- 4) A. triangular pyramid
- B. cube
- C. rectangular pyramid
- D. sphere

- 5) A. rectangular prism
- B. sphere
- C. rectangular pyramid
- D. triangular pyramid

- 6) A. sphere
- B. cube
- C. rectangular pyramid
- D. triangular prism

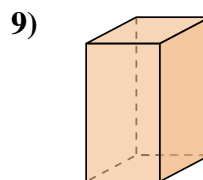
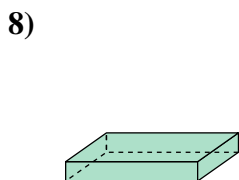
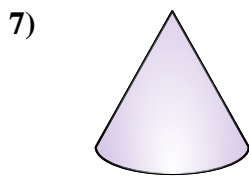
6. _____

7. _____

8. _____

9. _____

10. _____



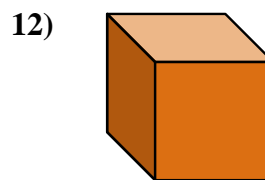
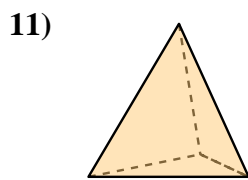
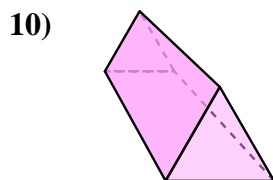
- 7) A. cube
- B. cone
- C. triangular pyramid
- D. sphere

- 8) A. cylinder
- B. rectangular prism
- C. sphere
- D. cube

- 9) A. cone
- B. cylinder
- C. triangular prism
- D. rectangular prism

11. _____

12. _____



- 10) A. rectangular pyramid
- B. sphere
- C. triangular prism
- D. cylinder

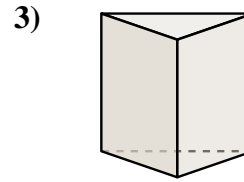

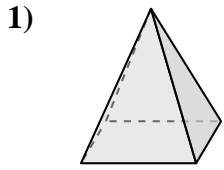
- 11) A. cube
- B. cylinder
- C. cone
- D. triangular pyramid

- 12) A. cube
- B. rectangular prism
- C. rectangular pyramid
- D. triangular pyramid



Déterminez quel choix représente le MIEUX la description de la figure.

Réponses



- A. sphere
- B. rectangular prism
- C. rectangular pyramid
- D. cube

- A. cylinder
- B. rectangular pyramid
- C. rectangular prism
- D. sphere

- A. triangular prism
- B. cylinder
- C. sphere
- D. cube

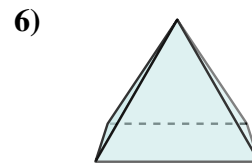
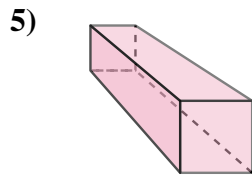
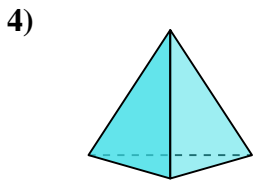
1. **C**

2. **D**

3. **A**

4. **A**

5. **A**



- A. triangular pyramid
- B. cube
- C. rectangular pyramid
- D. sphere

- A. rectangular prism
- B. sphere
- C. rectangular pyramid
- D. triangular pyramid

- A. sphere
- B. cube
- C. rectangular pyramid
- D. triangular prism

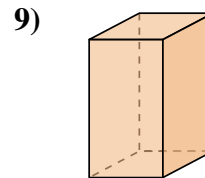
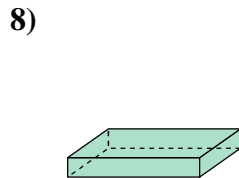
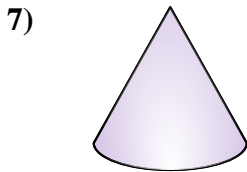
6. **C**

7. **B**

8. **B**

9. **D**

10. **C**



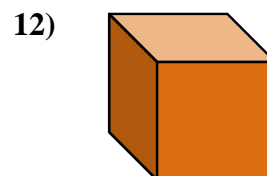
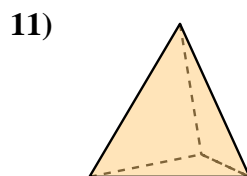
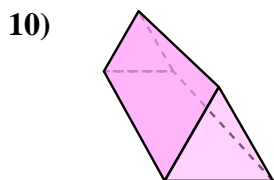
- A. cube
- B. cone
- C. triangular pyramid
- D. sphere

- A. cylinder
- B. rectangular prism
- C. sphere
- D. cube

- A. cone
- B. cylinder
- C. triangular prism
- D. rectangular prism

11. **D**

12. **A**



- A. rectangular pyramid
- B. sphere
- C. triangular prism
- D. cylinder

- A. cube
- B. cylinder
- C. cone
- D. triangular pyramid

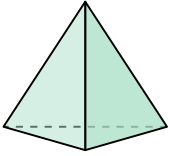
- A. cube
- B. rectangular prism
- C. rectangular pyramid
- D. triangular pyramid



Déterminez quel choix représente le MIEUX la description de la figure.

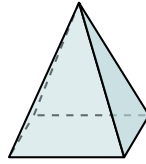
Réponses

1)




- A. triangular pyramid
- B. sphere
- C. cylinder
- D. rectangular pyramid

2)



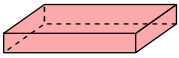
- A. triangular pyramid
- B. cone
- C. cube
- D. rectangular pyramid

3)



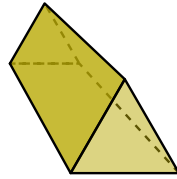
- A. rectangular pyramid
- B. rectangular prism
- C. cylinder
- D. sphere

4)



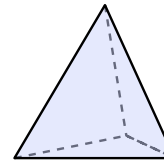
- A. rectangular prism
- B. rectangular pyramid
- C. triangular pyramid
- D. cone

5)




- A. rectangular pyramid
- B. rectangular prism
- C. triangular prism
- D. triangular pyramid

6)



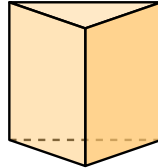
- A. triangular pyramid
- B. rectangular prism
- C. triangular prism
- D. cube

7)



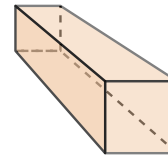
- A. triangular prism
- B. rectangular prism
- C. sphere
- D. cube

8)



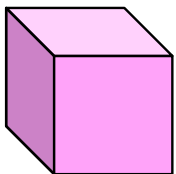
- A. cone
- B. triangular prism
- C. cube
- D. rectangular prism

9)



- A. cylinder
- B. sphere
- C. rectangular prism
- D. rectangular pyramid

10)



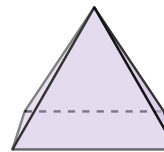
- A. rectangular pyramid
- B. cube
- C. triangular prism
- D. cone

11)



- A. rectangular pyramid
- B. sphere
- C. triangular prism
- D. cone

12)



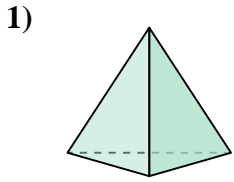
- A. triangular prism
- B. triangular pyramid
- C. cube
- D. rectangular pyramid

- 1. _____
- 2. _____
- 3. _____
- 4. _____
- 5. _____
- 6. _____
- 7. _____
- 8. _____
- 9. _____
- 10. _____
- 11. _____
- 12. _____

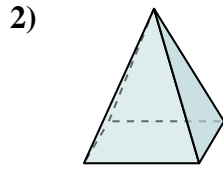


Déterminez quel choix représente le MIEUX la description de la figure.

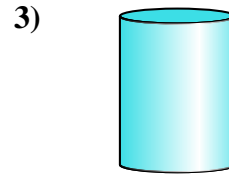
Réponses



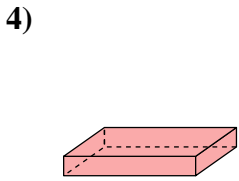
- A. triangular pyramid
- B. sphere
- C. cylinder
- D. rectangular pyramid



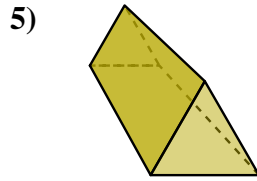
- A. triangular pyramid
- B. cone
- C. cube
- D. rectangular pyramid



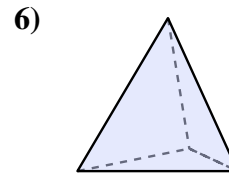
- A. rectangular pyramid
- B. rectangular prism
- C. cylinder
- D. sphere



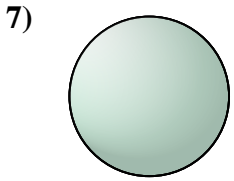
- A. rectangular prism
- B. rectangular pyramid
- C. triangular pyramid
- D. cone



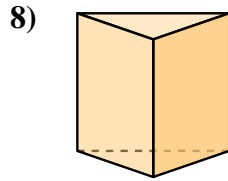
- A. rectangular pyramid
- B. rectangular prism
- C. triangular prism
- D. triangular pyramid



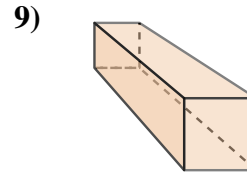
- A. triangular pyramid
- B. rectangular prism
- C. triangular prism
- D. cube



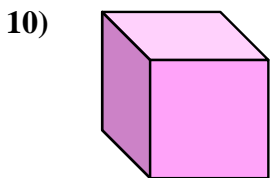
- A. triangular prism
- B. rectangular prism
- C. sphere
- D. cube



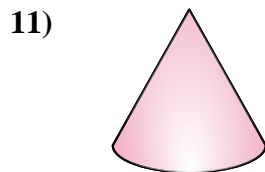
- A. cone
- B. triangular prism
- C. cube
- D. rectangular prism



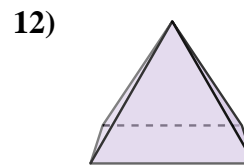
- A. cylinder
- B. sphere
- C. rectangular prism
- D. rectangular pyramid



- A. rectangular pyramid
- B. cube
- C. triangular prism
- D. cone



- A. rectangular pyramid
- B. sphere
- C. triangular prism
- D. cone



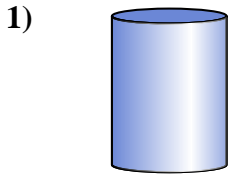
- A. triangular prism
- B. triangular pyramid
- C. cube
- D. rectangular pyramid

- 1. **A**
- 2. **D**
- 3. **C**
- 4. **A**
- 5. **C**
- 6. **A**
- 7. **C**
- 8. **B**
- 9. **C**
- 10. **B**
- 11. **D**
- 12. **D**

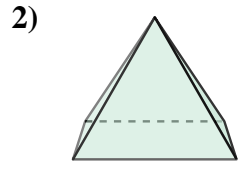


Déterminez quel choix représente le MIEUX la description de la figure.

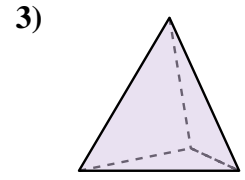
Réponses



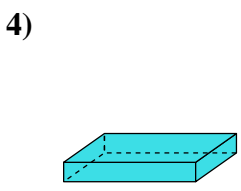
- A. rectangular prism
- B. cylinder
- C. cone
- D. sphere



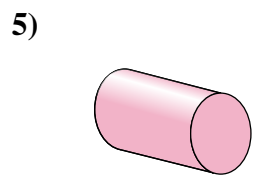
- A. cylinder
- B. triangular prism
- C. rectangular pyramid
- D. triangular pyramid



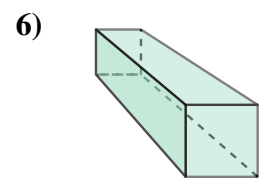
- A. cone
- B. cylinder
- C. sphere
- D. triangular pyramid



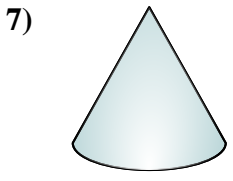
- A. triangular prism
- B. cylinder
- C. rectangular prism
- D. sphere



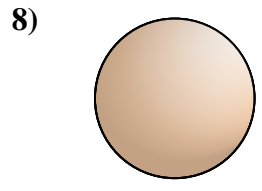
- A. cylinder
- B. cube
- C. rectangular prism
- D. rectangular pyramid



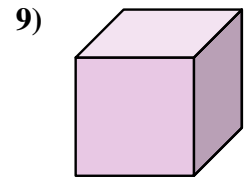
- A. triangular pyramid
- B. rectangular prism
- C. cube
- D. cone



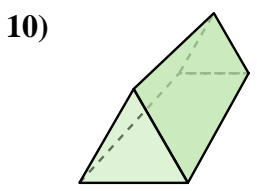
- A. sphere
- B. cylinder
- C. cone
- D. cube



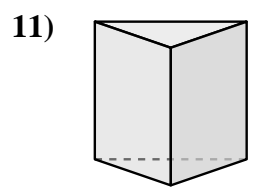
- A. cube
- B. sphere
- C. cone
- D. cylinder



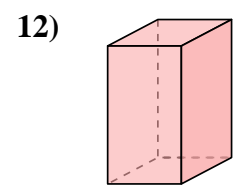
- A. triangular pyramid
- B. cube
- C. triangular prism
- D. rectangular prism



- A. triangular pyramid
- B. cone
- C. triangular prism
- D. sphere



- A. triangular prism
- B. triangular pyramid
- C. cylinder
- D. rectangular prism



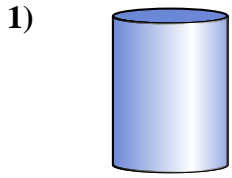
- A. sphere
- B. cube
- C. triangular prism
- D. rectangular prism

- 1. _____
- 2. _____
- 3. _____
- 4. _____
- 5. _____
- 6. _____
- 7. _____
- 8. _____
- 9. _____
- 10. _____
- 11. _____
- 12. _____

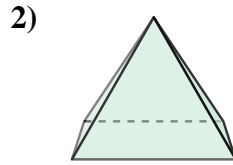


Déterminez quel choix représente le MIEUX la description de la figure.

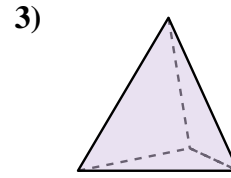
Réponses



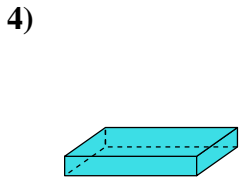
- A. rectangular prism
- B. cylinder
- C. cone
- D. sphere



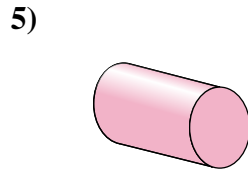
- A. cylinder
- B. triangular prism
- C. rectangular pyramid
- D. triangular pyramid



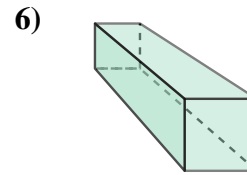
- A. cone
- B. cylinder
- C. sphere
- D. triangular pyramid



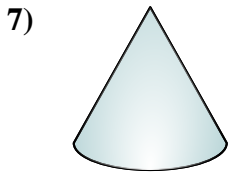
- A. triangular prism
- B. cylinder
- C. rectangular prism
- D. sphere



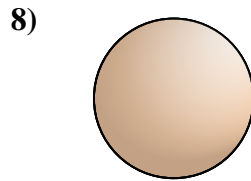
- A. cylinder
- B. cube
- C. rectangular prism
- D. rectangular pyramid



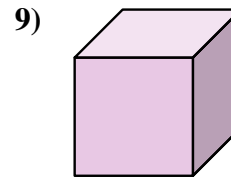
- A. triangular pyramid
- B. rectangular prism
- C. cube
- D. cone



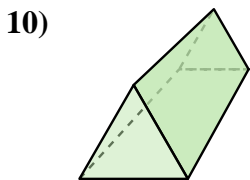
- A. sphere
- B. cylinder
- C. cone
- D. cube



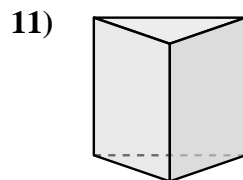
- A. cube
- B. sphere
- C. cone
- D. cylinder



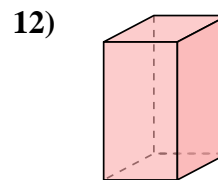
- A. triangular pyramid
- B. cube
- C. triangular prism
- D. rectangular prism



- A. triangular pyramid
- B. cone
- C. triangular prism
- D. sphere



- A. triangular prism
- B. triangular pyramid
- C. cylinder
- D. rectangular prism



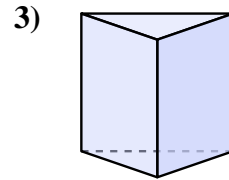
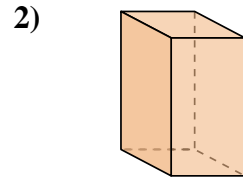
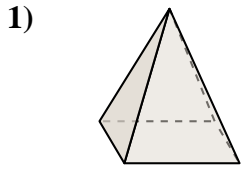
- A. sphere
- B. cube
- C. triangular prism
- D. rectangular prism

- 1. **B**
- 2. **C**
- 3. **D**
- 4. **C**
- 5. **A**
- 6. **B**
- 7. **C**
- 8. **B**
- 9. **B**
- 10. **C**
- 11. **A**
- 12. **D**



Déterminez quel choix représente le MIEUX la description de la figure.

Réponses



- 1) A. rectangular pyramid
- B. triangular prism
- C. rectangular prism
- D. cube

- 2) A. cone
- B. triangular prism
- C. rectangular pyramid
- D. rectangular prism

- 3) A. cube
- B. cone
- C. triangular prism
- D. cylinder

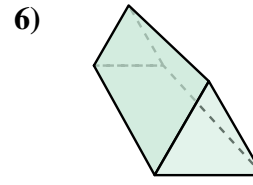
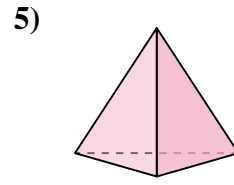
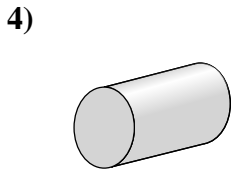
1. _____

2. _____

3. _____

4. _____

5. _____



- 4) A. rectangular prism
- B. rectangular pyramid
- C. cylinder
- D. sphere

- 5) A. cube
- B. triangular pyramid
- C. rectangular prism
- D. cylinder

- 6) A. cone
- B. sphere
- C. triangular prism
- D. cylinder

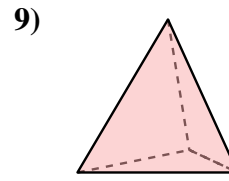
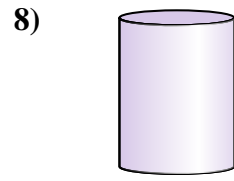
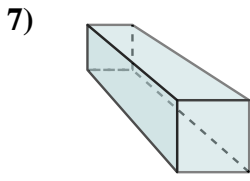
6. _____

7. _____

8. _____

9. _____

10. _____



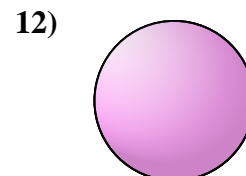
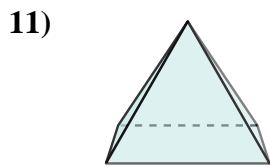
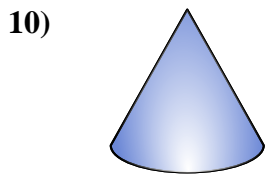
- 7) A. rectangular pyramid
- B. cube
- C. rectangular prism
- D. triangular prism

- 8) A. triangular prism
- B. cube
- C. cylinder
- D. cone

- 9) A. cylinder
- B. cone
- C. triangular pyramid
- D. cube

11. _____

12. _____



- 10) A. cylinder
- B. rectangular pyramid
- C. cone
- D. rectangular prism

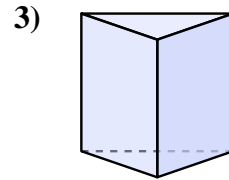
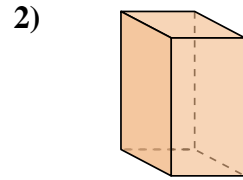
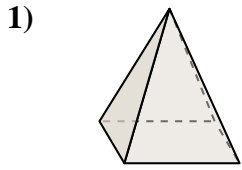
- 11) A. triangular pyramid
- B. cone
- C. rectangular prism
- D. rectangular pyramid

- 12) A. triangular pyramid
- B. rectangular prism
- C. cone
- D. sphere



Déterminez quel choix représente le MIEUX la description de la figure.

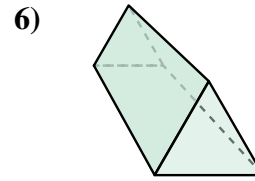
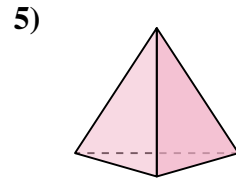
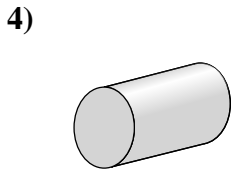
Réponses



- A. rectangular pyramid
- B. triangular prism
- C. rectangular prism
- D. cube

- A. cone
- B. triangular prism
- C. rectangular pyramid
- D. rectangular prism

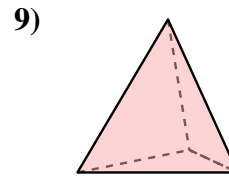
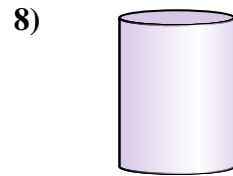
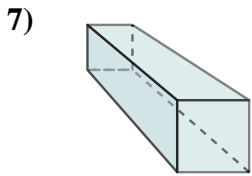
- A. cube
- B. cone
- C. triangular prism
- D. cylinder



- A. rectangular prism
- B. rectangular pyramid
- C. cylinder
- D. sphere

- A. cube
- B. triangular pyramid
- C. rectangular prism
- D. cylinder

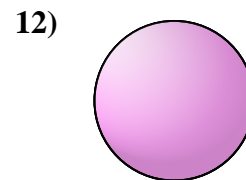
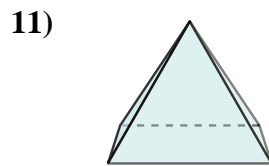
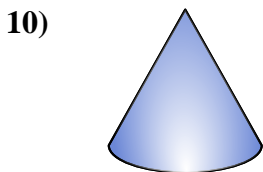
- A. cone
- B. sphere
- C. triangular prism
- D. cylinder



- A. rectangular pyramid
- B. cube
- C. rectangular prism
- D. triangular prism

- A. triangular prism
- B. cube
- C. cylinder
- D. cone

- A. cylinder
- B. cone
- C. triangular pyramid
- D. cube



- A. cylinder
- B. rectangular pyramid
- C. cone
- D. rectangular prism

- A. triangular pyramid
- B. cone
- C. rectangular prism
- D. rectangular pyramid

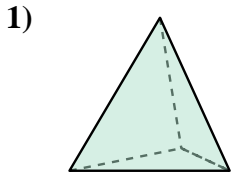
- A. triangular pyramid
- B. rectangular prism
- C. cone
- D. sphere

- 1. **A**
- 2. **D**
- 3. **C**
- 4. **C**
- 5. **B**
- 6. **C**
- 7. **C**
- 8. **C**
- 9. **C**
- 10. **C**
- 11. **D**
- 12. **D**

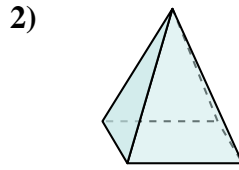


Déterminez quel choix représente le MIEUX la description de la figure.

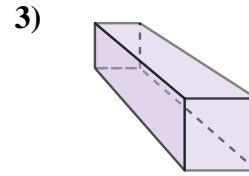
Réponses



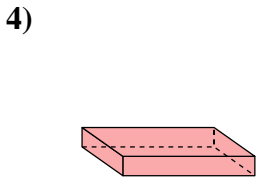
- A. triangular pyramid
- B. triangular prism
- C. rectangular prism
- D. cube



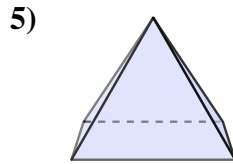
- A. cube
- B. triangular prism
- C. cone
- D. rectangular pyramid



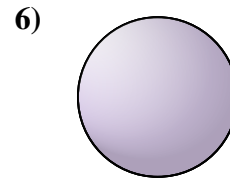
- A. triangular prism
- B. cylinder
- C. rectangular prism
- D. cone



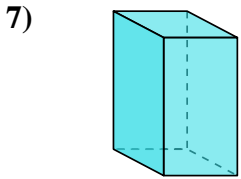
- A. cone
- B. triangular pyramid
- C. cylinder
- D. rectangular prism



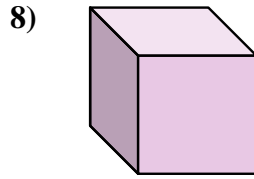
- A. sphere
- B. triangular pyramid
- C. cylinder
- D. rectangular pyramid



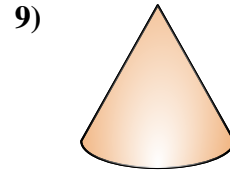
- A. cone
- B. triangular prism
- C. rectangular pyramid
- D. sphere



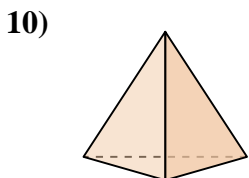
- A. cube
- B. triangular prism
- C. rectangular prism
- D. cone



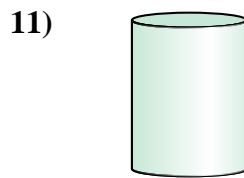
- A. cylinder
- B. cube
- C. rectangular pyramid
- D. triangular pyramid



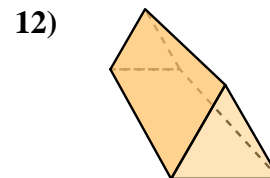
- A. cylinder
- B. rectangular prism
- C. triangular pyramid
- D. cone



- A. cone
- B. triangular pyramid
- C. sphere
- D. triangular prism



- A. cylinder
- B. cube
- C. triangular pyramid
- D. triangular prism



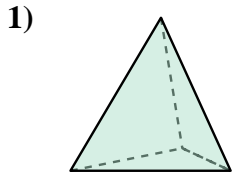
- A. cube
- B. rectangular pyramid
- C. triangular prism
- D. rectangular prism

- 1. _____
- 2. _____
- 3. _____
- 4. _____
- 5. _____
- 6. _____
- 7. _____
- 8. _____
- 9. _____
- 10. _____
- 11. _____
- 12. _____

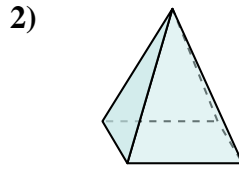


Déterminez quel choix représente le MIEUX la description de la figure.

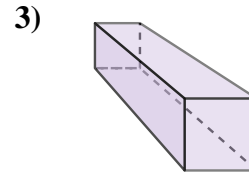
Réponses



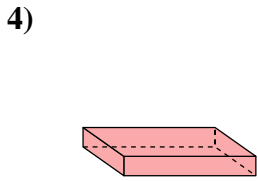
- A. triangular pyramid
- B. triangular prism
- C. rectangular prism
- D. cube



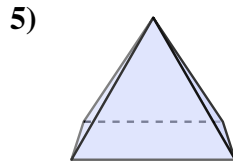
- A. cube
- B. triangular prism
- C. cone
- D. rectangular pyramid



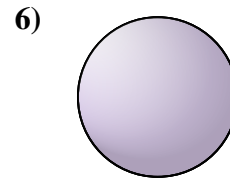
- A. triangular prism
- B. cylinder
- C. rectangular prism
- D. cone



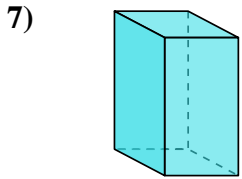
- A. cone
- B. triangular pyramid
- C. cylinder
- D. rectangular prism



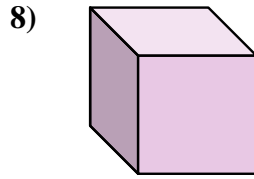
- A. sphere
- B. triangular pyramid
- C. cylinder
- D. rectangular pyramid



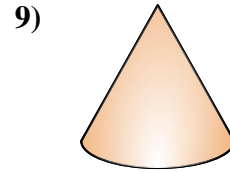
- A. cone
- B. triangular prism
- C. rectangular pyramid
- D. sphere



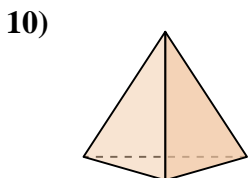
- A. cube
- B. triangular prism
- C. rectangular prism
- D. cone



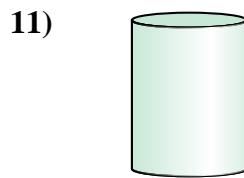
- A. cylinder
- B. cube
- C. rectangular pyramid
- D. triangular pyramid



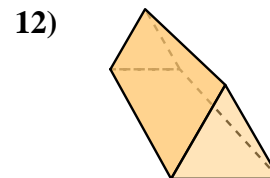
- A. cylinder
- B. rectangular prism
- C. triangular pyramid
- D. cone



- A. cone
- B. triangular pyramid
- C. sphere
- D. triangular prism



- A. cylinder
- B. cube
- C. triangular pyramid
- D. triangular prism



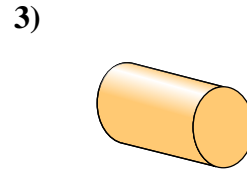
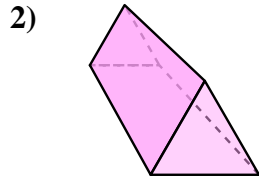
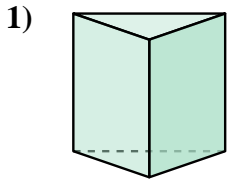
- A. cube
- B. rectangular pyramid
- C. triangular prism
- D. rectangular prism

- 1. **A**
- 2. **D**
- 3. **C**
- 4. **D**
- 5. **D**
- 6. **D**
- 7. **C**
- 8. **B**
- 9. **D**
- 10. **B**
- 11. **A**
- 12. **C**



Déterminez quel choix représente le MIEUX la description de la figure.

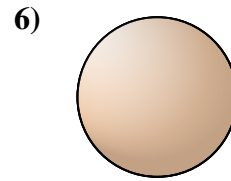
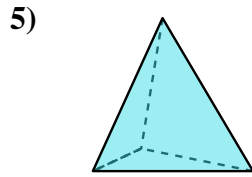
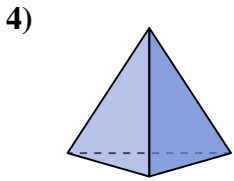
Réponses



- 1) A. cylinder
- B. cube
- C. triangular pyramid
- D. triangular prism

- 2) A. triangular pyramid
- B. triangular prism
- C. cylinder
- D. sphere

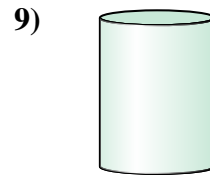
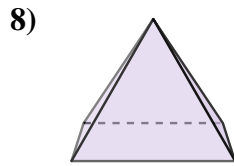
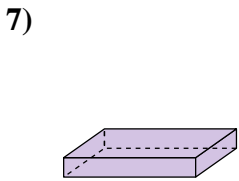
- 3) A. rectangular prism
- B. rectangular pyramid
- C. cylinder
- D. cone



- 4) A. rectangular prism
- B. sphere
- C. triangular pyramid
- D. cone

- 5) A. cone
- B. triangular pyramid
- C. rectangular prism
- D. cube

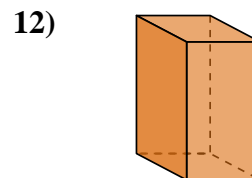
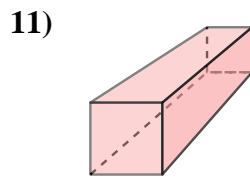
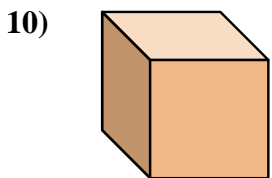
- 6) A. rectangular pyramid
- B. sphere
- C. rectangular prism
- D. cube



- 7) A. rectangular prism
- B. cone
- C. cube
- D. triangular prism

- 8) A. sphere
- B. rectangular pyramid
- C. cylinder
- D. triangular prism

- 9) A. cone
- B. triangular pyramid
- C. sphere
- D. cylinder



- 10) A. rectangular pyramid
- B. sphere
- C. cube
- D. cone

- 11) A. cone
- B. rectangular prism
- C. cube
- D. rectangular pyramid

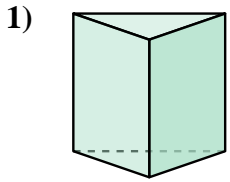
- 12) A. sphere
- B. rectangular prism
- C. cylinder
- D. cube

- 1. _____
- 2. _____
- 3. _____
- 4. _____
- 5. _____
- 6. _____
- 7. _____
- 8. _____
- 9. _____
- 10. _____
- 11. _____
- 12. _____

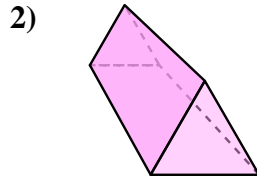


Déterminez quel choix représente le MIEUX la description de la figure.

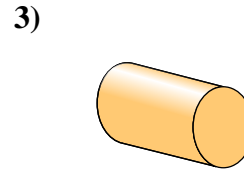
Réponses



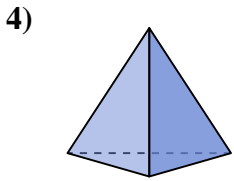
- A. cylinder
- B. cube
- C. triangular pyramid
- D. triangular prism



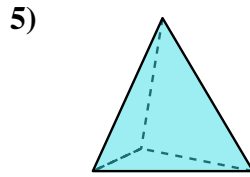
- A. triangular pyramid
- B. triangular prism
- C. cylinder
- D. sphere



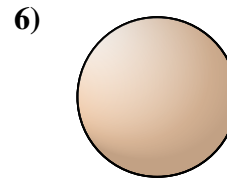
- A. rectangular prism
- B. rectangular pyramid
- C. cylinder
- D. cone



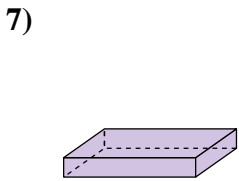
- A. rectangular prism
- B. sphere
- C. triangular pyramid
- D. cone



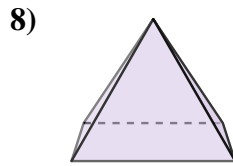
- A. cone
- B. triangular pyramid
- C. rectangular prism
- D. cube



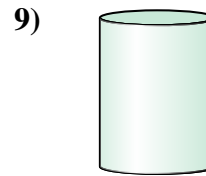
- A. rectangular pyramid
- B. sphere
- C. rectangular prism
- D. cube



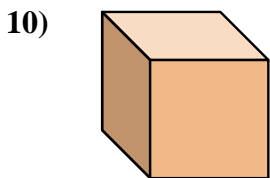
- A. rectangular prism
- B. cone
- C. cube
- D. triangular prism



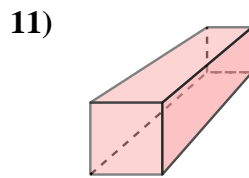
- A. sphere
- B. rectangular pyramid
- C. cylinder
- D. triangular prism



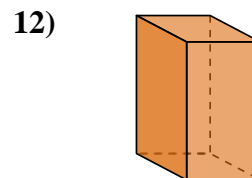
- A. cone
- B. triangular pyramid
- C. sphere
- D. cylinder



- A. rectangular pyramid
- B. sphere
- C. cube
- D. cone



- A. cone
- B. rectangular prism
- C. cube
- D. rectangular pyramid



- A. sphere
- B. rectangular prism
- C. cylinder
- D. cube

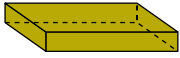
- 1. **D**
- 2. **B**
- 3. **C**
- 4. **C**
- 5. **B**
- 6. **B**
- 7. **A**
- 8. **B**
- 9. **D**
- 10. **C**
- 11. **B**
- 12. **B**



Déterminez quel choix représente le MIEUX la description de la figure.

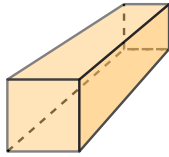
Réponses

1)



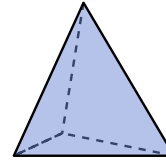
- A. cube
- B. cylinder
- C. triangular prism
- D. rectangular prism

2)



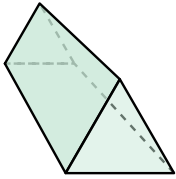
- A. cone
- B. cube
- C. rectangular prism
- D. triangular prism

3)



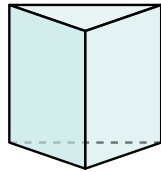
- A. cone
- B. rectangular pyramid
- C. cylinder
- D. triangular pyramid

4)



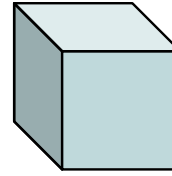
- A. rectangular pyramid
- B. rectangular prism
- C. triangular prism
- D. cube

5)



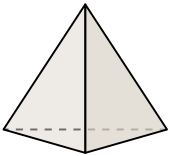
- A. rectangular prism
- B. cube
- C. cone
- D. triangular prism

6)




- A. rectangular pyramid
- B. cone
- C. cylinder
- D. cube

7)



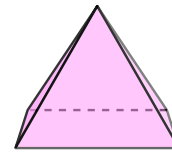
- A. triangular pyramid
- B. cone
- C. rectangular prism
- D. cylinder

8)



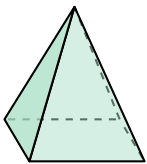
- A. sphere
- B. cylinder
- C. rectangular pyramid
- D. cube

9)



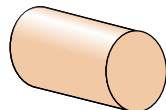
- A. triangular prism
- B. cylinder
- C. rectangular pyramid
- D. cube

10)




- A. rectangular pyramid
- B. rectangular prism
- C. triangular prism
- D. sphere

11)



- A. triangular pyramid
- B. sphere
- C. cylinder
- D. cube

12)



- A. rectangular pyramid
- B. triangular prism
- C. cube
- D. cylinder

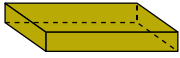
- 1. _____
- 2. _____
- 3. _____
- 4. _____
- 5. _____
- 6. _____
- 7. _____
- 8. _____
- 9. _____
- 10. _____
- 11. _____
- 12. _____



Déterminez quel choix représente le MIEUX la description de la figure.

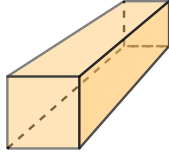
Réponses

1)



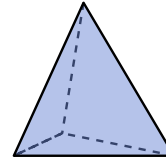
- A. cube
- B. cylinder
- C. triangular prism
- D. rectangular prism

2)



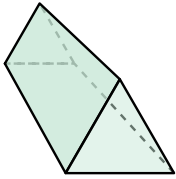
- A. cone
- B. cube
- C. rectangular prism
- D. triangular prism

3)



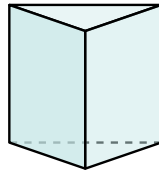
- A. cone
- B. rectangular pyramid
- C. cylinder
- D. triangular pyramid

4)



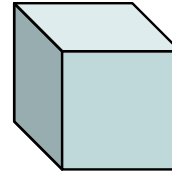
- A. rectangular pyramid
- B. rectangular prism
- C. triangular prism
- D. cube

5)



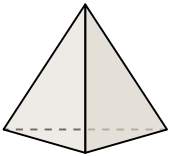
- A. rectangular prism
- B. cube
- C. cone
- D. triangular prism

6)




- A. rectangular pyramid
- B. cone
- C. cylinder
- D. cube

7)



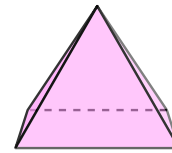
- A. triangular pyramid
- B. cone
- C. rectangular prism
- D. cylinder

8)



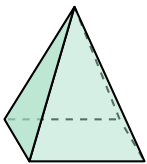
- A. sphere
- B. cylinder
- C. rectangular pyramid
- D. cube

9)




- A. triangular prism
- B. cylinder
- C. rectangular pyramid
- D. cube

10)




- A. rectangular pyramid
- B. rectangular prism
- C. triangular prism
- D. sphere

11)



- A. triangular pyramid
- B. sphere
- C. cylinder
- D. cube

12)



- A. rectangular pyramid
- B. triangular prism
- C. cube
- D. cylinder

- 1. **D**
- 2. **C**
- 3. **D**
- 4. **C**
- 5. **D**
- 6. **D**
- 7. **A**
- 8. **A**
- 9. **C**
- 10. **A**
- 11. **C**
- 12. **D**