



Déterminez si chaque triangle est aigu(A), obtus(O) ou droit(R) et s'il est équilatéral(E), isocèle(I) ou scalène(S).

Réponses

Acute Triangle:

All angles are less than 90° .

Obtuse Triangle:

One angle is greater than 90° .

Right Triangle:

One angle is 90° .

Equilateral Triangle:

3 equal sides. 3 equal angles.

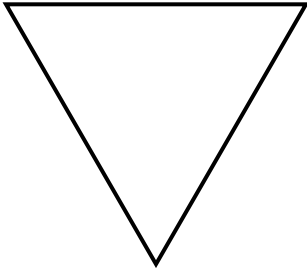
Isosceles Triangle:

2 equal sides. 2 equal angles.


Scalene Triangle:

No equal sides. No equal angles.

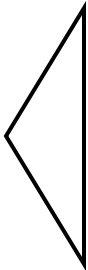
1)



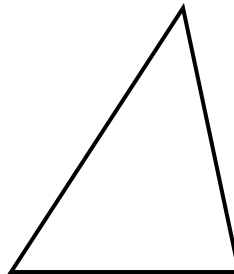
2)



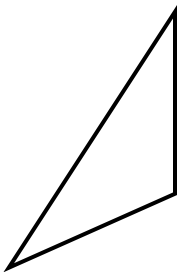
3)



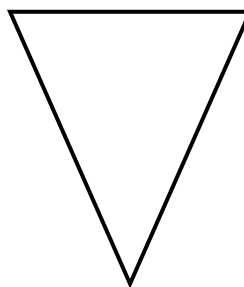
4)



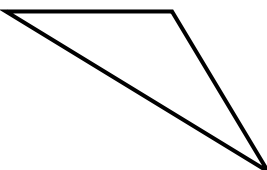
5)



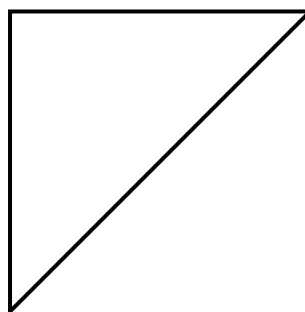
6)



7)



8)



- 1. _____
- 2. _____
- 3. _____
- 4. _____
- 5. _____
- 6. _____
- 7. _____
- 8. _____



Déterminez si chaque triangle est aigu(A), obtus(O) ou droit(R) et s'il est équilatéral(E), isocèle(I) ou scalène(S).

Réponses

Acute Triangle:

All angles are less than 90° .

Obtuse Triangle:

One angle is greater than 90° .

Right Triangle:

One angle is 90° .

Equilateral Triangle:

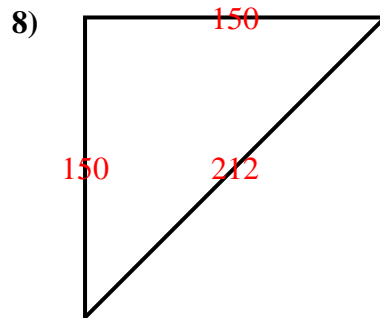
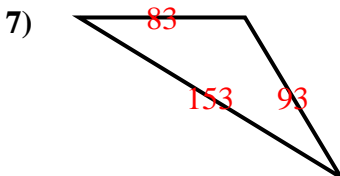
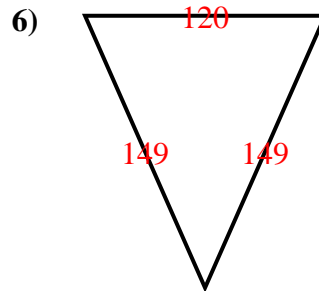
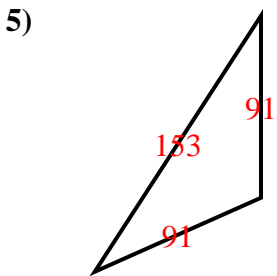
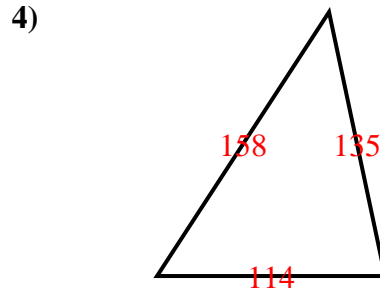
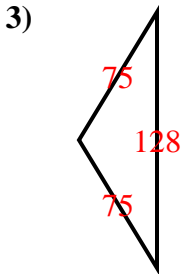
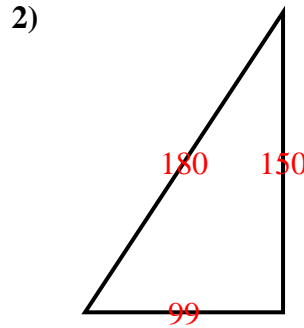
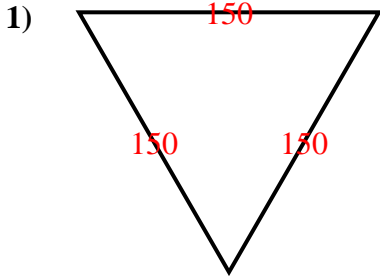
3 equal sides. 3 equal angles.

Isosceles Triangle:

2 equal sides. 2 equal angles.

Scalene Triangle:

No equal sides. No equal angles.



1. AE
2. RS
3. OI
4. AS
5. OI
6. AI
7. OS
8. RI