



Déterminez si chaque triangle est aigu(A), obtus(O) ou droit(R) et s'il est équilatéral(E), isocèle(I) ou scalène(S).

Réponses

Acute Triangle:

All angles are less than 90° .

Obtuse Triangle:

One angle is greater than 90° .

Right Triangle:

One angle is 90° .

Equilateral Triangle:

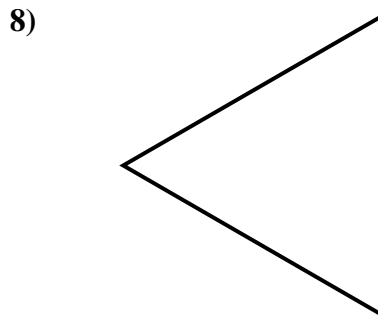
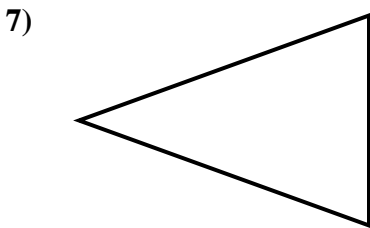
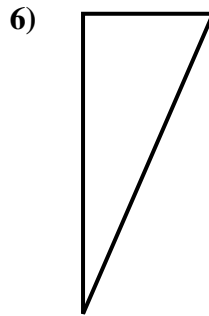
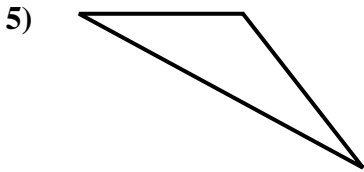
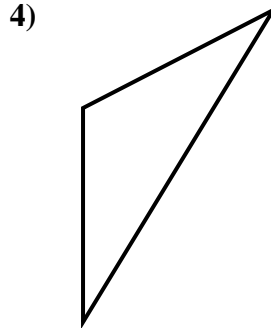
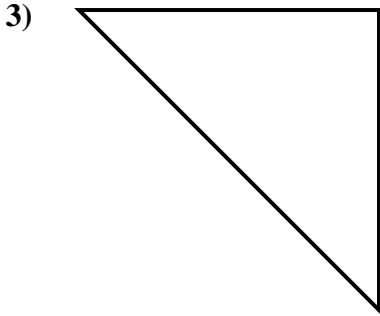
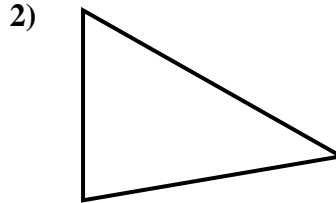
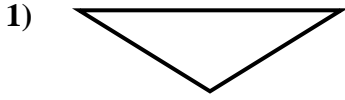
3 equal sides. 3 equal angles.

Isosceles Triangle:

2 equal sides. 2 equal angles.

Scalene Triangle:

No equal sides. No equal angles.



1. _____
2. _____
3. _____
4. _____
5. _____
6. _____
7. _____
8. _____



Déterminez si chaque triangle est aigu(A), obtus(O) ou droit(R) et s'il est équilatéral(E), isocèle(I) ou scalène(S).

Réponses

Acute Triangle:

All angles are less than 90° .

Obtuse Triangle:

One angle is greater than 90° .

Right Triangle:

One angle is 90° .

Equilateral Triangle:

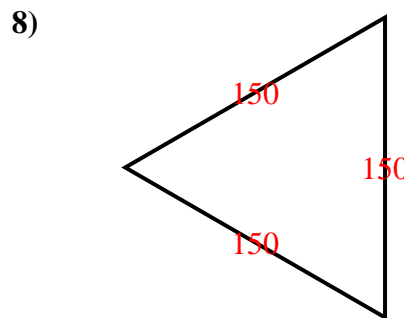
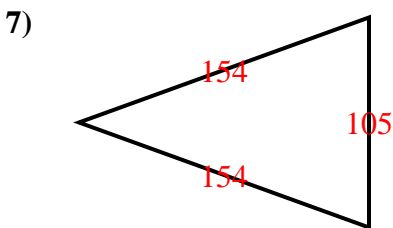
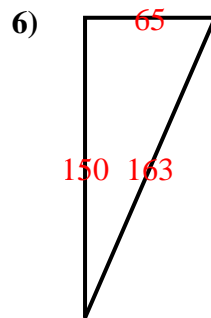
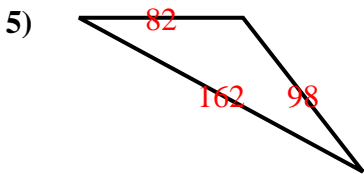
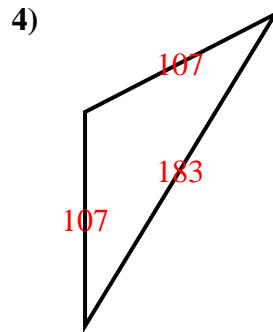
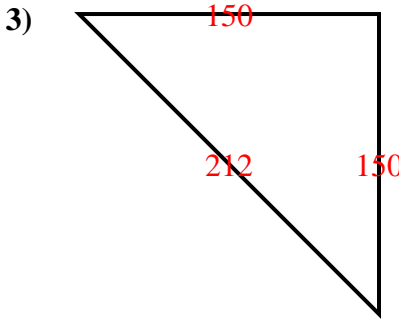
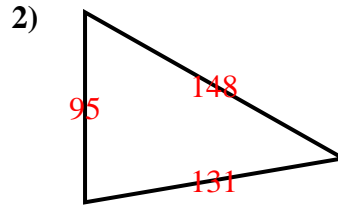
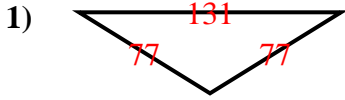
3 equal sides. 3 equal angles.

Isosceles Triangle:

2 equal sides. 2 equal angles.

Scalene Triangle:

No equal sides. No equal angles.



1. **O I**
2. **A S**
3. **R I**
4. **O I**
5. **O S**
6. **R S**
7. **A I**
8. **A E**