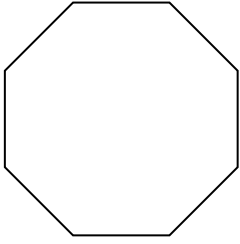





Déterminer si la figure est régulière ou irrégulière.

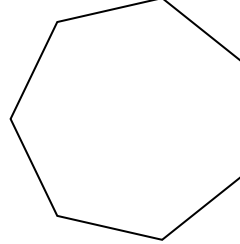
1)




2)




3)



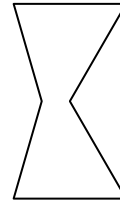
4)



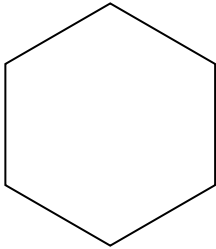
5)



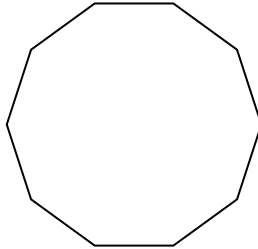
6)




7)



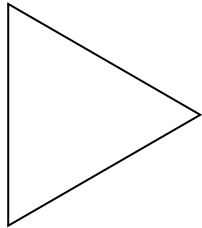
8)




9)



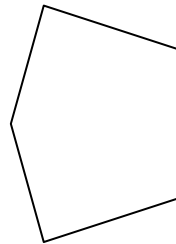
10)




11)



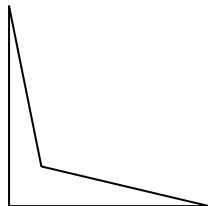
12)



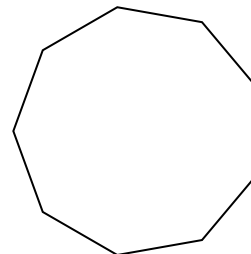
13)



14)



15)



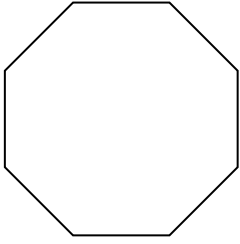
Réponses

- 1. _____
- 2. _____
- 3. _____
- 4. _____
- 5. _____
- 6. _____
- 7. _____
- 8. _____
- 9. _____
- 10. _____
- 11. _____
- 12. _____
- 13. _____
- 14. _____
- 15. _____




Déterminer si la figure est régulière ou irrégulière.

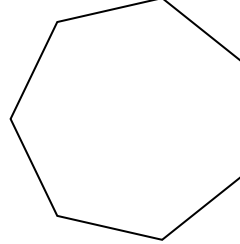
1)




2)




3)



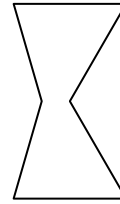
4)



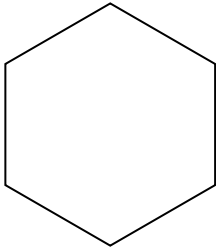
5)



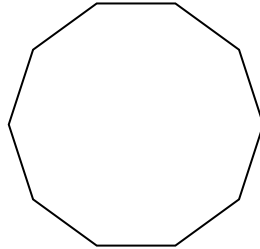
6)




7)



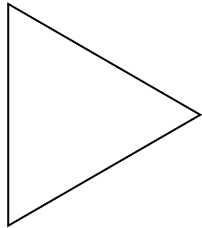
8)




9)



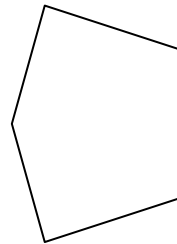
10)




11)



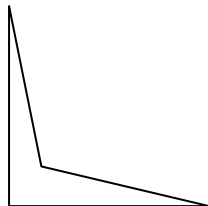
12)



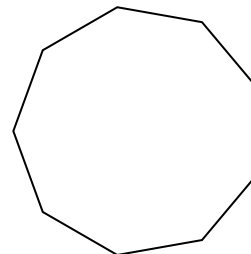
13)



14)



15)



Réponses

1. régulière

2. irrégulière

3. régulière

4. irrégulière

5. irrégulière

6. irrégulière

7. régulière

8. régulière

9. irrégulière

10. régulière

11. régulière

12. irrégulière

13. irrégulière

14. irrégulière

15. régulière