




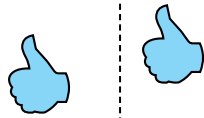
Déterminez si la figure a effectué une translation, une rotation ou une réflexion.

Réponses

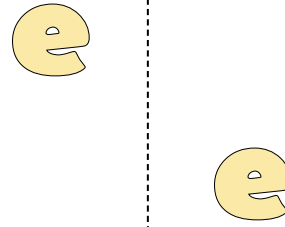
1)



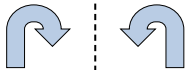
2)



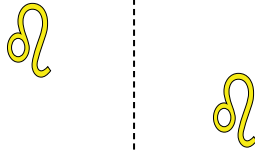
3)




4)



5)



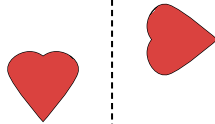
6)



7)



8)




9)




10)



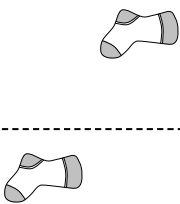
11)



12)



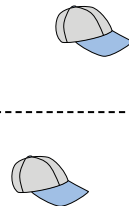
13)



14)



15)




1. \_\_\_\_\_
2. \_\_\_\_\_
3. \_\_\_\_\_
4. \_\_\_\_\_
5. \_\_\_\_\_
6. \_\_\_\_\_
7. \_\_\_\_\_
8. \_\_\_\_\_
9. \_\_\_\_\_
10. \_\_\_\_\_
11. \_\_\_\_\_
12. \_\_\_\_\_
13. \_\_\_\_\_
14. \_\_\_\_\_
15. \_\_\_\_\_

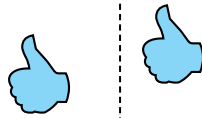


Déterminez si la figure a effectué une translation, une rotation ou une réflexion.

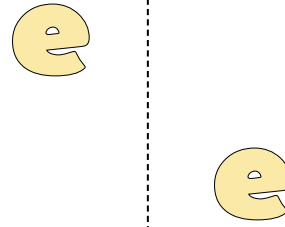
1)



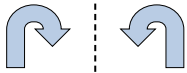
2)



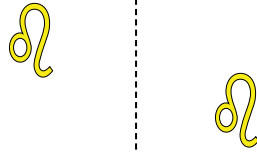
3)




4)



5)



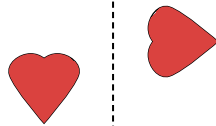
6)



7)




8)



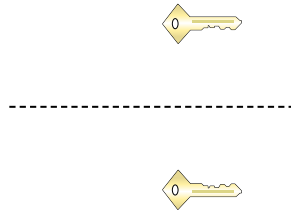
9)



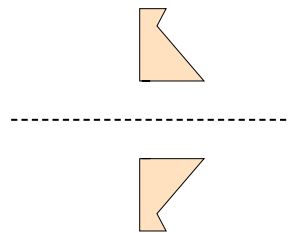
10)



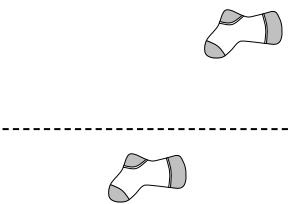
11)



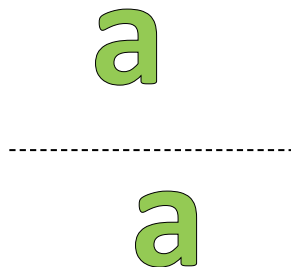
12)



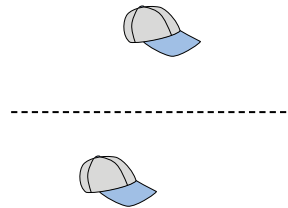
13)



14)



15)



**Réponses**

1. rotation

2. translation

3. translation

4. réflexion

5. translation

6. rotation

7. rotation

8. rotation

9. réflexion

10. réflexion

11. réflexion

12. réflexion

13. translation

14. translation

15. translation