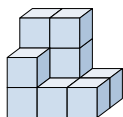


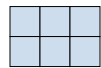





Résoudre chaque problème.

Réponses

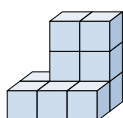
1) If you were looking at the 3d shape from the right side what would you see?

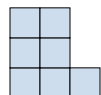





- A. 
- B. 
- C. 
- D. 

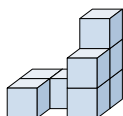
- 1. \_\_\_\_\_
- 2. \_\_\_\_\_
- 3. \_\_\_\_\_
- 4. \_\_\_\_\_
- 5. \_\_\_\_\_





2) If you were looking at the 3d shape from the back what would you see?



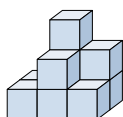
- A. 
- B. 
- C. 
- D. 





3) If you were looking at the 3d shape from the back what would you see?



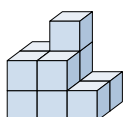
- A. 
- B. 
- C. 
- D. 

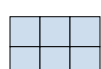



4) If you were looking at the 3d shape from the back what would you see?



- A. 
- B. 
- C. 
- D. 

5) If you were looking at the 3d shape from above what would you see?



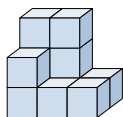
- A. 
- B. 
- C. 
- D. 



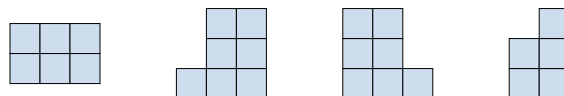
Résoudre chaque problème.

Réponses

1) If you were looking at the 3d shape from the right side what would you see?

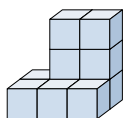


A.                      B.                      C.                      D.

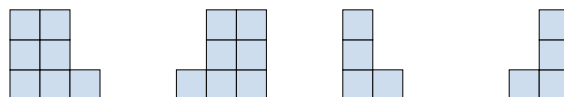


1.     **D**    

2) If you were looking at the 3d shape from the back what would you see?

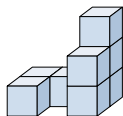


A.                      B.                      C.                      D.

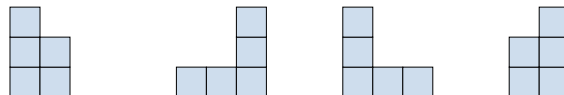


2.     **A**    

3) If you were looking at the 3d shape from the back what would you see?

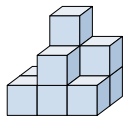


A.                      B.                      C.                      D.

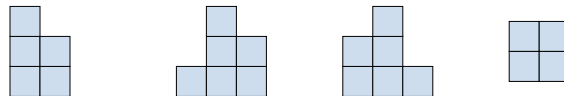


3.     **C**    

4) If you were looking at the 3d shape from the back what would you see?

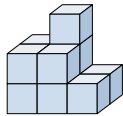


A.                      B.                      C.                      D.

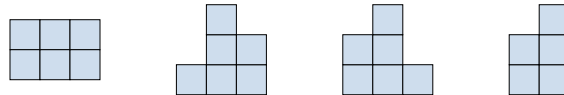


4.     **C**    

5) If you were looking at the 3d shape from above what would you see?



A.                      B.                      C.                      D.



5.     **A**