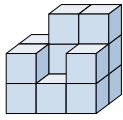


**Résoudre chaque problème.****Réponses**

- 1) If you were looking at the 3d shape from the left side what would you see?



A.



B.



C.



D.



1. _____

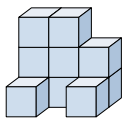
2. _____

3. _____

4. _____

5. _____

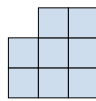
- 2) If you were looking at the 3d shape from above what would you see?



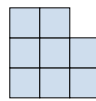
A.



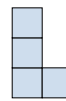
B.



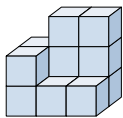
C.



D.



- 3) If you were looking at the 3d shape from the back what would you see?



A.



B.



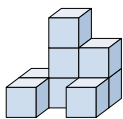
C.



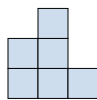
D.



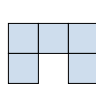
- 4) If you were looking at the 3d shape from the left side what would you see?



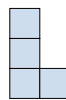
A.



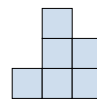
B.



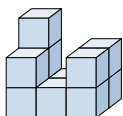
C.



D.



- 5) If you were looking at the 3d shape from the left side what would you see?



A.



B.



C.



D.

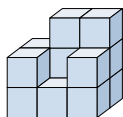




Résoudre chaque problème.

Réponses

- 1) If you were looking at the 3d shape from the left side what would you see?



A.



B.



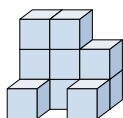
C.



D.

1. C

- 2) If you were looking at the 3d shape from above what would you see?



A.



B.



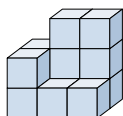
C.



D.

2. A3. A4. C5. D

- 3) If you were looking at the 3d shape from the back what would you see?



A.



B.



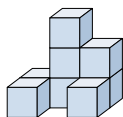
C.



D.



- 4) If you were looking at the 3d shape from the left side what would you see?



A.



B.



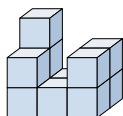
C.



D.



- 5) If you were looking at the 3d shape from the left side what would you see?



A.



B.



C.



D.

