



Associez chaque tableau au graphique approprié.

Réponses

1)

Nom	Canettes recyclées
Allen	
Beth	
Meule	
Andréa	
Vallée	

2)

Nom	Canettes recyclées
Allen	
Beth	
Meule	
Andréa	
Vallée	

3)

Nom	Canettes recyclées
Allen	
Beth	
Meule	
Andréa	
Vallée	

4)

Nom	Canettes recyclées
Allen	
Beth	
Meule	
Andréa	
Vallée	

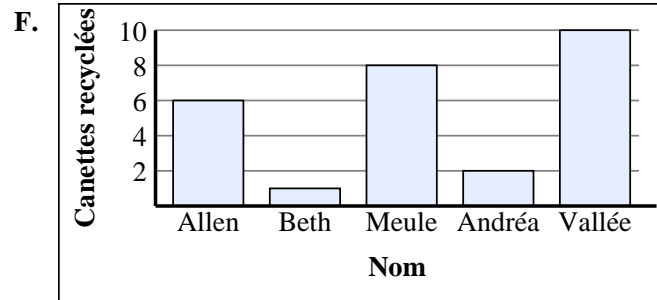
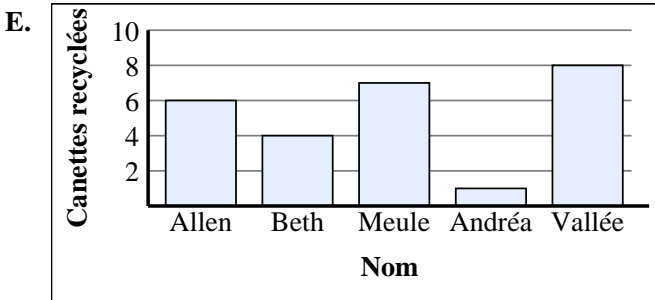
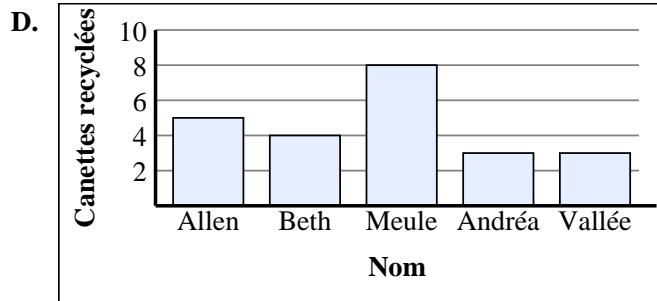
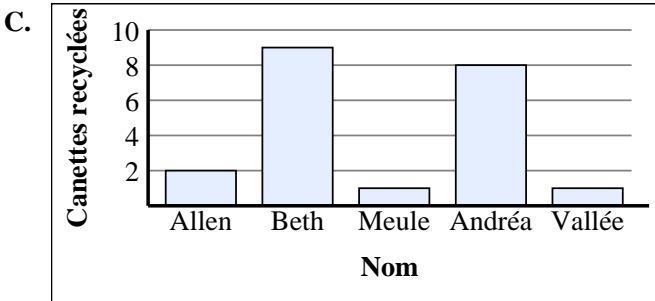
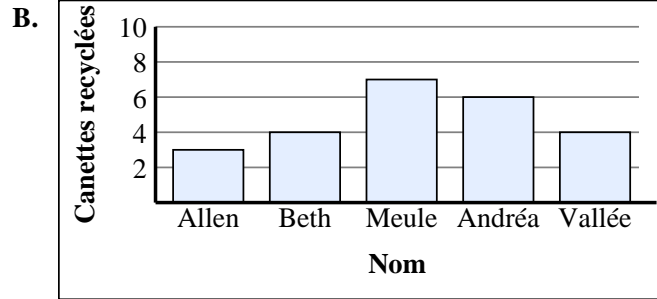
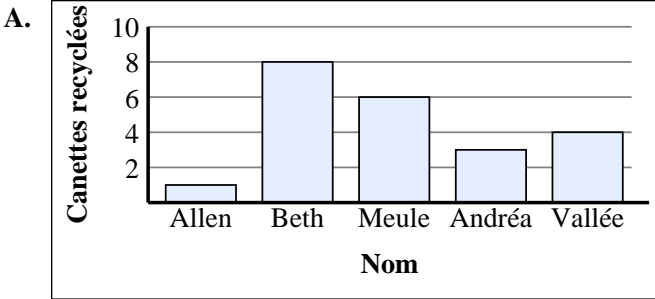
5)

Nom	Canettes recyclées
Allen	
Beth	
Meule	
Andréa	
Vallée	

6)

Nom	Canettes recyclées
Allen	
Beth	
Meule	
Andréa	
Vallée	

1. _____
2. _____
3. _____
4. _____
5. _____
6. _____





Associez chaque tableau au graphique approprié.

Réponses

1)

Nom	Canettes recyclées
Allen	
Beth	
Meule	
Andréa	
Vallée	

2)

Nom	Canettes recyclées
Allen	
Beth	
Meule	
Andréa	
Vallée	

3)

Nom	Canettes recyclées
Allen	
Beth	
Meule	
Andréa	
Vallée	

4)

Nom	Canettes recyclées
Allen	
Beth	
Meule	
Andréa	
Vallée	

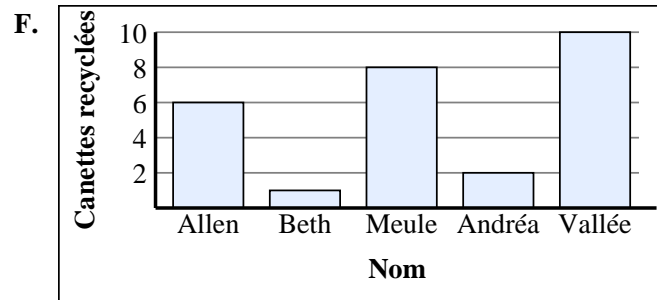
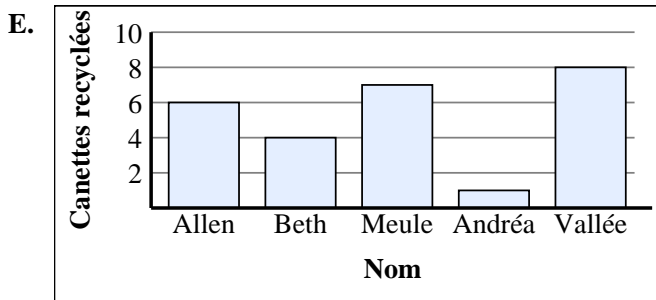
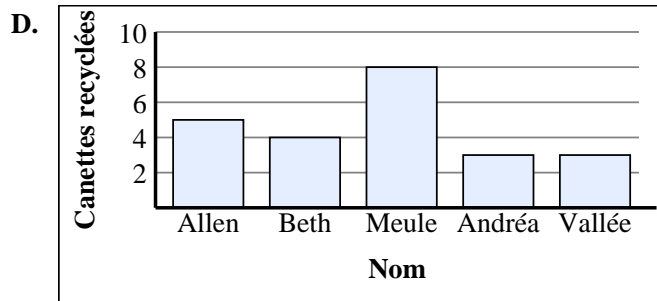
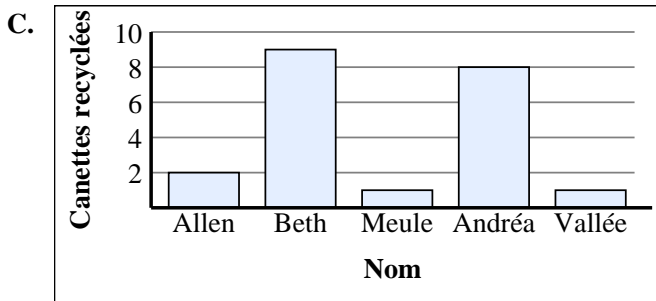
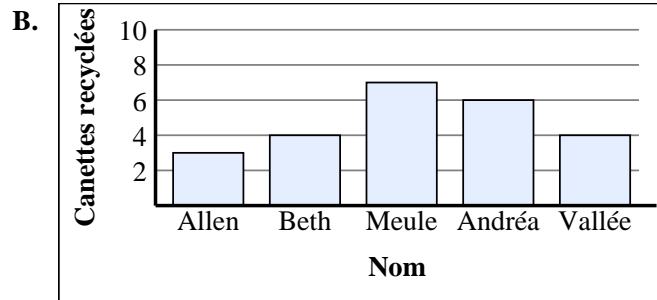
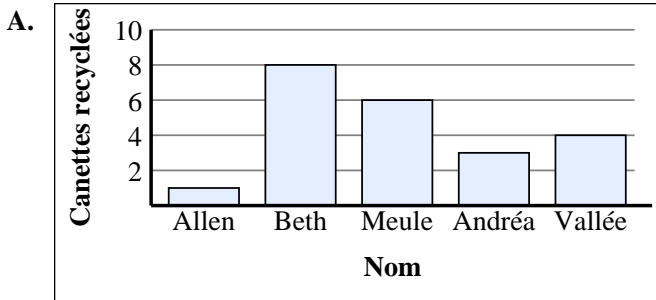
5)

Nom	Canettes recyclées
Allen	
Beth	
Meule	
Andréa	
Vallée	

6)

Nom	Canettes recyclées
Allen	
Beth	
Meule	
Andréa	
Vallée	

1. **B**
2. **F**
3. **A**
4. **C**
5. **D**
6. **E**





Associez chaque tableau au graphique approprié.

Réponses

1)

Nom	Canettes recyclées
Allen	
Beth	
Meule	
Andréa	
Vallée	

2)

Nom	Canettes recyclées
Allen	
Beth	
Meule	
Andréa	
Vallée	

3)

Nom	Canettes recyclées
Allen	
Beth	
Meule	
Andréa	
Vallée	

4)

Nom	Canettes recyclées
Allen	
Beth	
Meule	
Andréa	
Vallée	

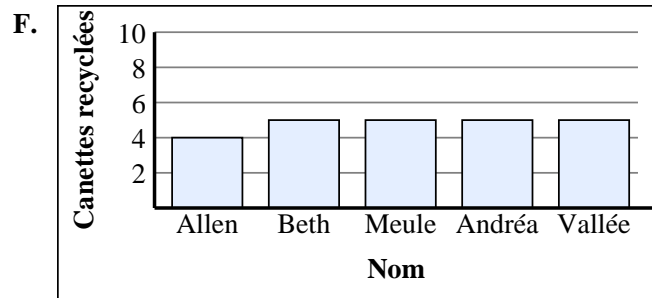
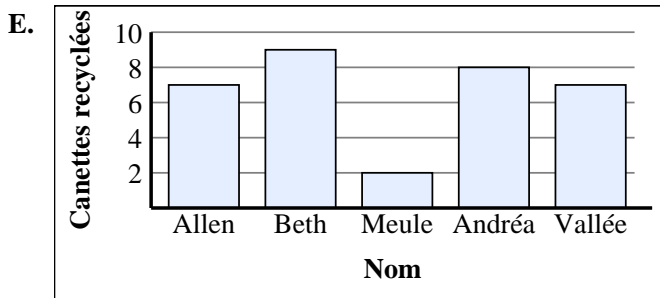
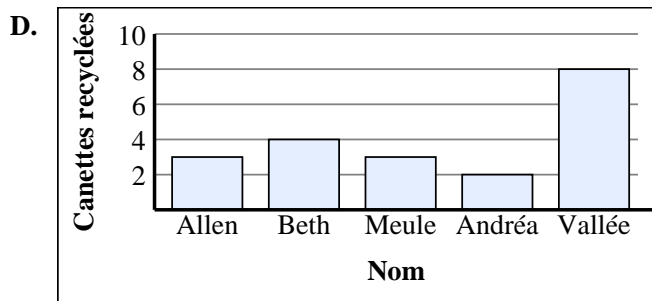
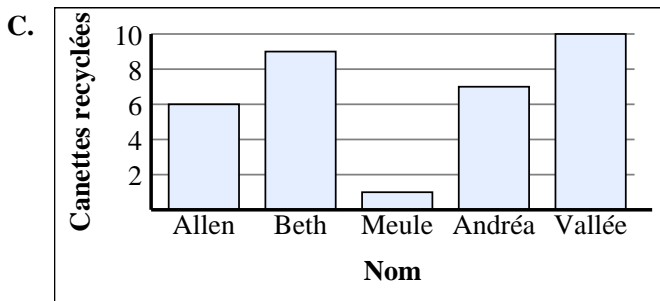
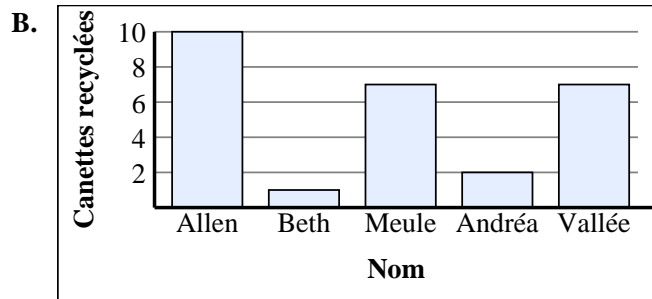
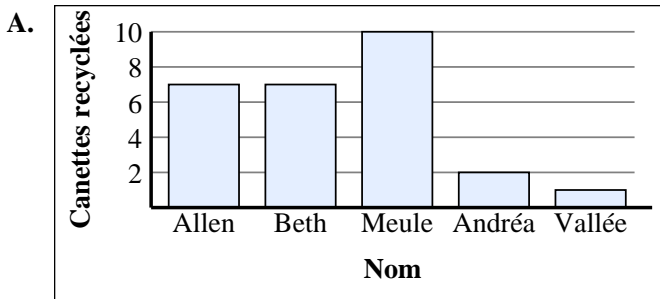
5)

Nom	Canettes recyclées
Allen	
Beth	
Meule	
Andréa	
Vallée	

6)

Nom	Canettes recyclées
Allen	
Beth	
Meule	
Andréa	
Vallée	

1. _____
2. _____
3. _____
4. _____
5. _____
6. _____





Associez chaque tableau au graphique approprié.

Réponses

1)

Nom	Canettes recyclées
Allen	
Beth	
Meule	
Andréa	
Vallée	

2)

Nom	Canettes recyclées
Allen	
Beth	
Meule	
Andréa	
Vallée	

3)

Nom	Canettes recyclées
Allen	
Beth	
Meule	
Andréa	
Vallée	

4)

Nom	Canettes recyclées
Allen	
Beth	
Meule	
Andréa	
Vallée	


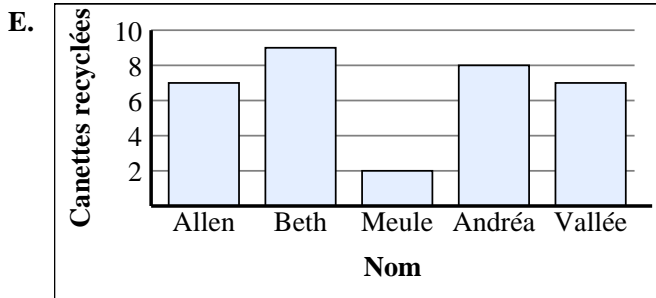
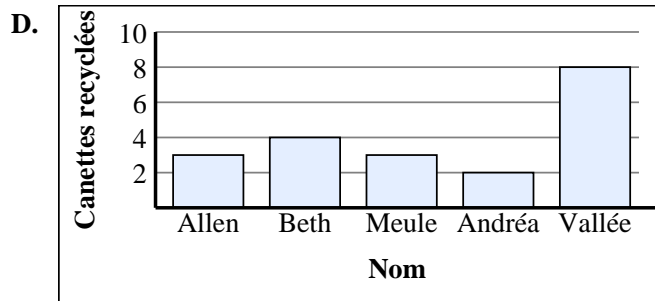
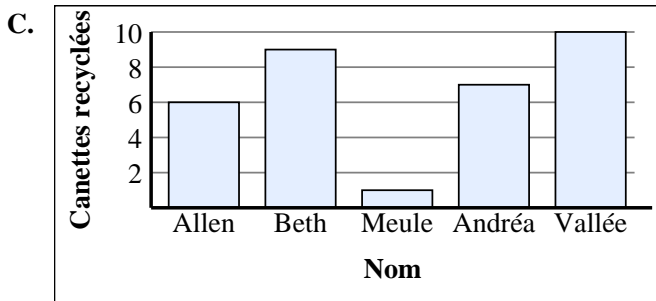
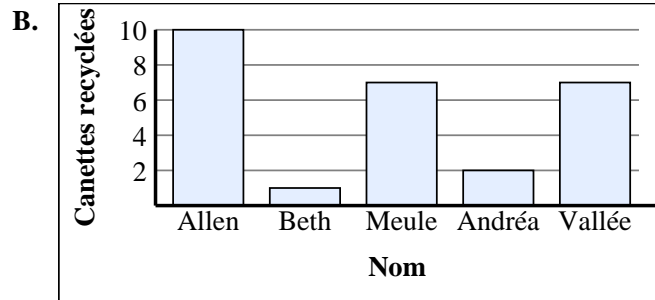
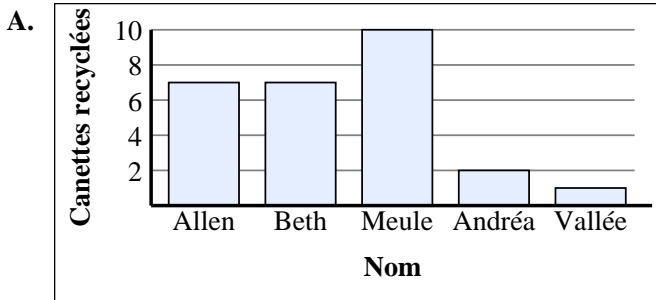
5)

Nom	Canettes recyclées
Allen	
Beth	
Meule	
Andréa	
Vallée	

6)

Nom	Canettes recyclées
Allen	
Beth	
Meule	
Andréa	
Vallée	

1. **B**
2. **D**
3. **E**
4. **F**
5. **C**
6. **A**





Associez chaque tableau au graphique approprié.

Réponses

1)

Nom	Canettes recyclées
Allen	
Beth	
Meule	
Andréa	
Vallée	

2)

Nom	Canettes recyclées
Allen	
Beth	
Meule	
Andréa	
Vallée	

3)

Nom	Canettes recyclées
Allen	
Beth	
Meule	
Andréa	
Vallée	

4)

Nom	Canettes recyclées
Allen	
Beth	
Meule	
Andréa	
Vallée	

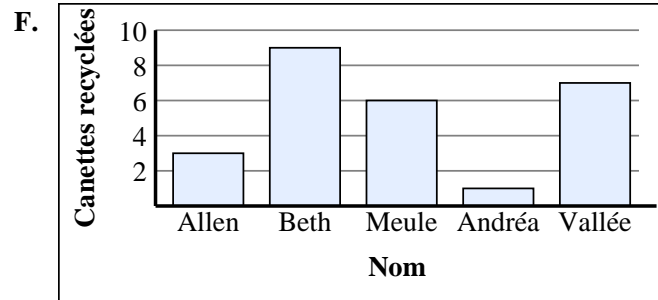
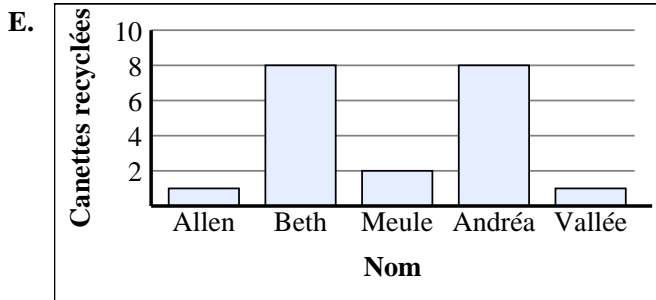
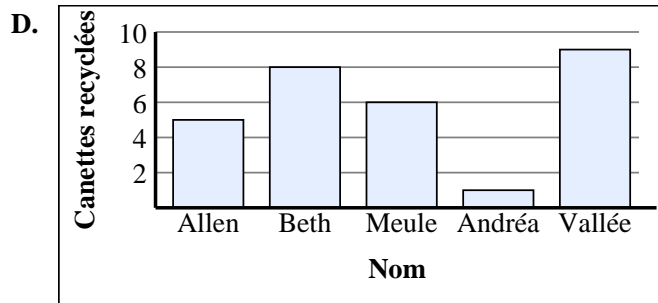
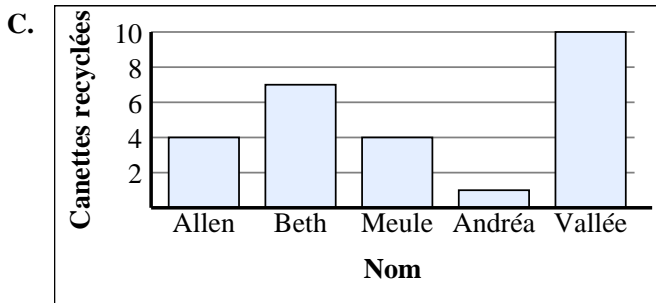
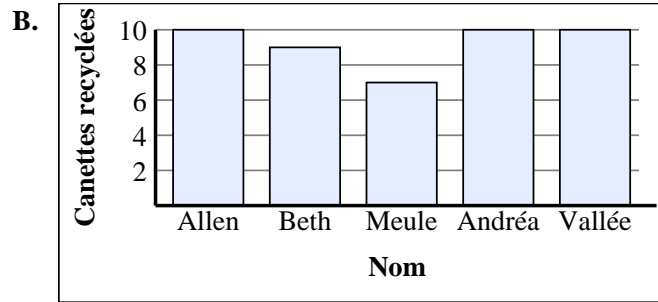
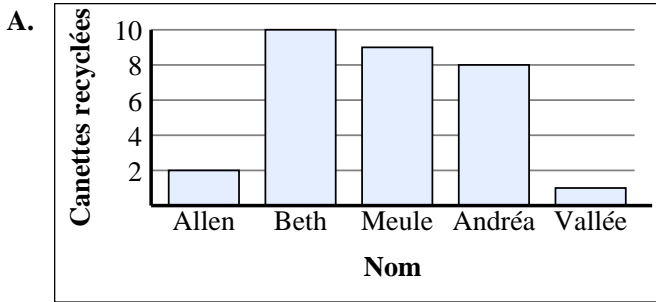
5)

Nom	Canettes recyclées
Allen	
Beth	
Meule	
Andréa	
Vallée	

6)

Nom	Canettes recyclées
Allen	
Beth	
Meule	
Andréa	
Vallée	

1. _____
2. _____
3. _____
4. _____
5. _____
6. _____





Associez chaque tableau au graphique approprié.

Réponses

1)

Nom	Canettes recyclées
Allen	
Beth	
Meule	
Andréa	
Vallée	

2)

Nom	Canettes recyclées
Allen	
Beth	
Meule	
Andréa	
Vallée	

3)

Nom	Canettes recyclées
Allen	
Beth	
Meule	
Andréa	
Vallée	

4)

Nom	Canettes recyclées
Allen	
Beth	
Meule	
Andréa	
Vallée	

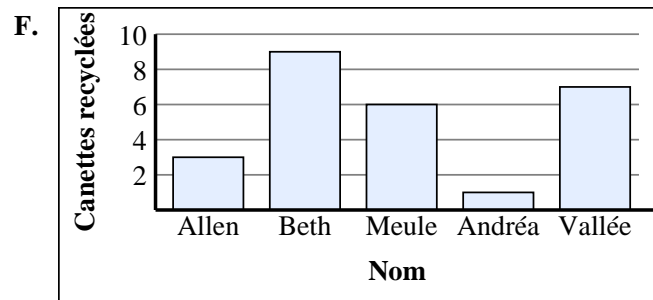
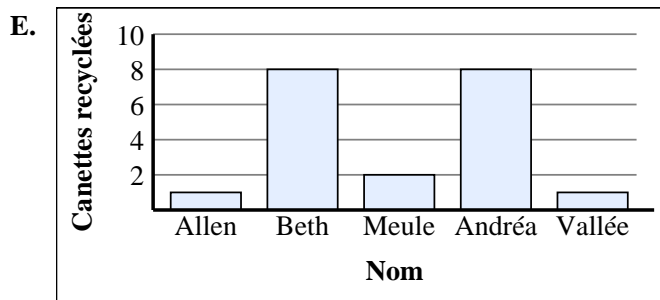
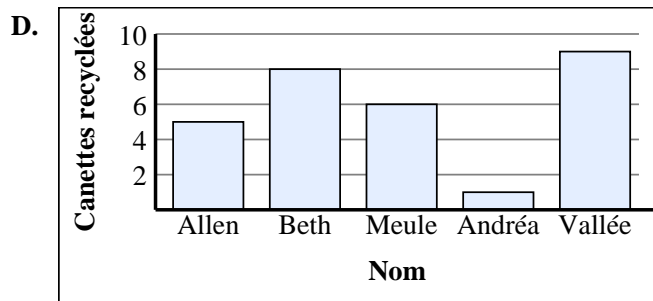
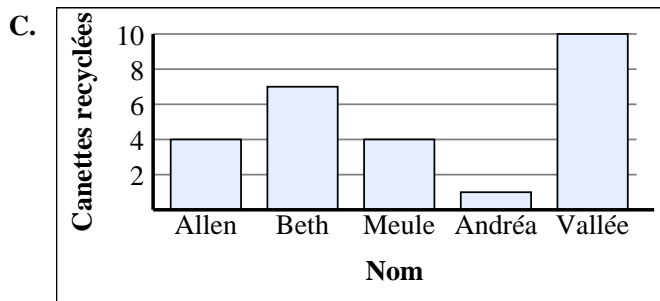
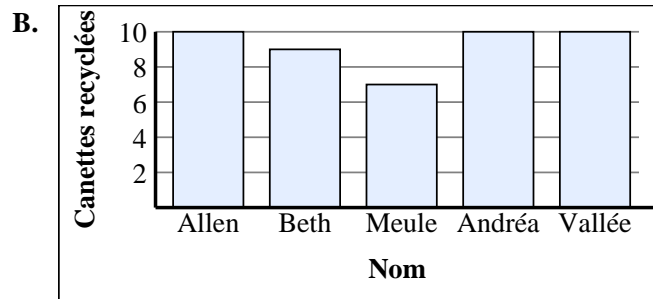
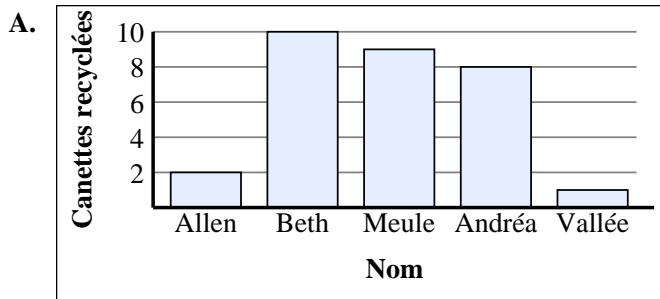
5)

Nom	Canettes recyclées
Allen	
Beth	
Meule	
Andréa	
Vallée	

6)

Nom	Canettes recyclées
Allen	
Beth	
Meule	
Andréa	
Vallée	

1. **A**
2. **B**
3. **D**
4. **F**
5. **E**
6. **C**





Associez chaque tableau au graphique approprié.

Réponses

1)

Nom	Canettes recyclées
Allen	
Beth	
Meule	
Andréa	
Vallée	

2)

Nom	Canettes recyclées
Allen	
Beth	
Meule	
Andréa	
Vallée	

3)

Nom	Canettes recyclées
Allen	
Beth	
Meule	
Andréa	
Vallée	

4)

Nom	Canettes recyclées
Allen	
Beth	
Meule	
Andréa	
Vallée	

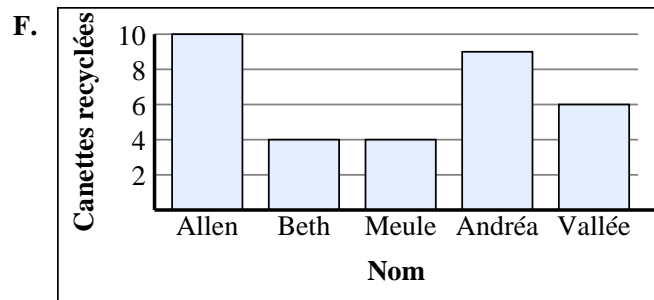
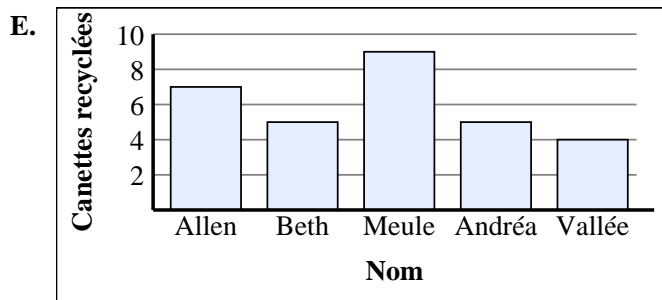
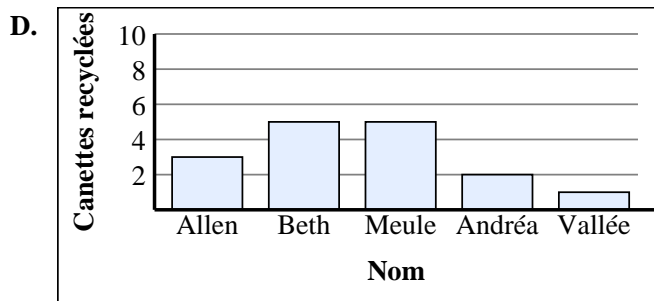
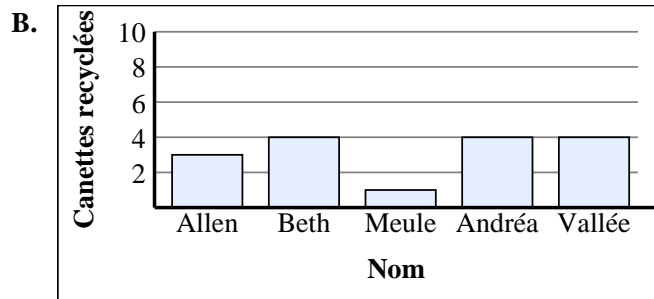
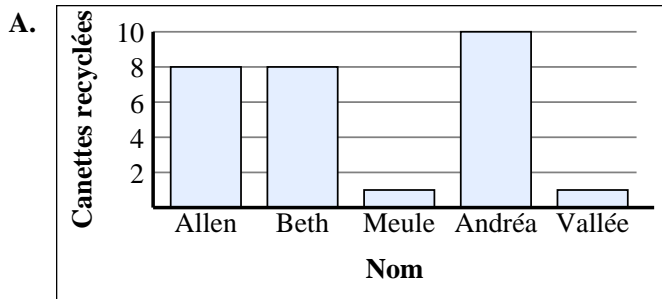
5)

Nom	Canettes recyclées
Allen	
Beth	
Meule	
Andréa	
Vallée	

6)

Nom	Canettes recyclées
Allen	
Beth	
Meule	
Andréa	
Vallée	

1. _____
2. _____
3. _____
4. _____
5. _____
6. _____





Associez chaque tableau au graphique approprié.

Réponses

1)

Nom	Canettes recyclées
Allen	
Beth	
Meule	
Andréa	
Vallée	

2)

Nom	Canettes recyclées
Allen	
Beth	
Meule	
Andréa	
Vallée	

3)

Nom	Canettes recyclées
Allen	
Beth	
Meule	
Andréa	
Vallée	

4)

Nom	Canettes recyclées
Allen	
Beth	
Meule	
Andréa	
Vallée	

5)

Nom	Canettes recyclées
Allen	
Beth	
Meule	
Andréa	
Vallée	

6)

Nom	Canettes recyclées
Allen	
Beth	
Meule	
Andréa	
Vallée	

1. **B**

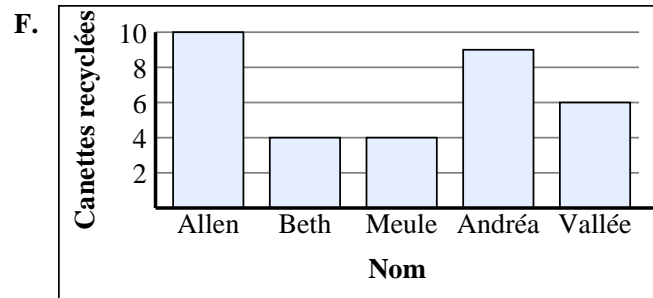
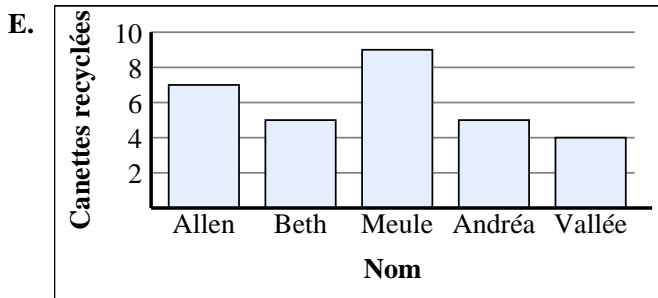
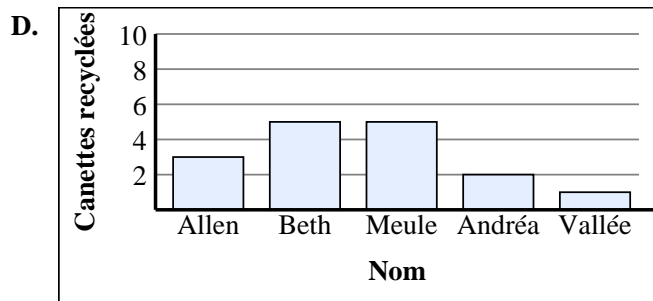
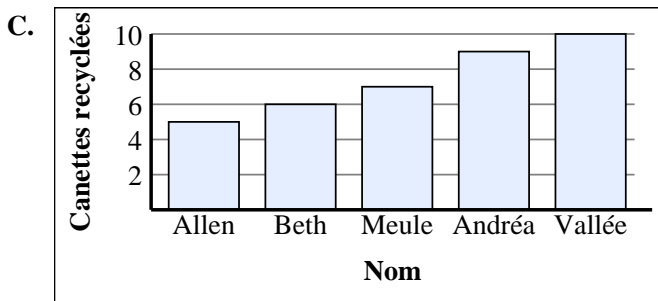
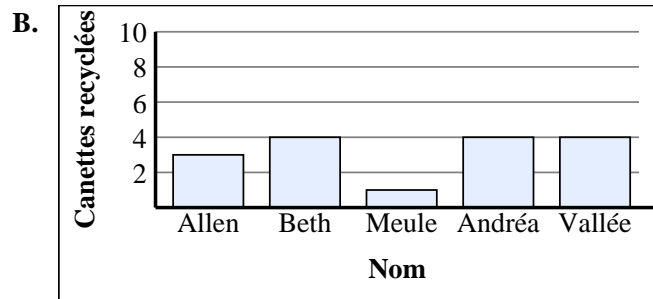
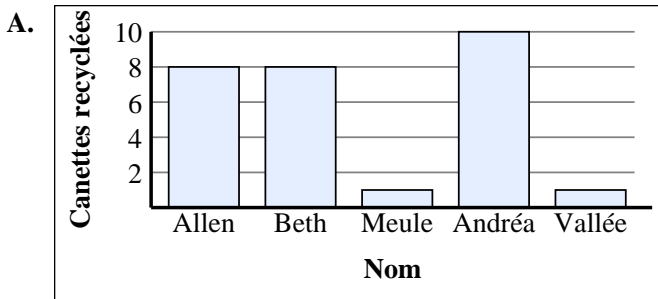
2. **F**

3. **D**

4. **C**

5. **A**

6. **E**





Associez chaque tableau au graphique approprié.

Réponses

1)

Nom	Canettes recyclées
Allen	
Beth	
Meule	
Andréa	
Vallée	

2)

Nom	Canettes recyclées
Allen	
Beth	
Meule	
Andréa	
Vallée	

3)

Nom	Canettes recyclées
Allen	
Beth	
Meule	
Andréa	
Vallée	

4)

Nom	Canettes recyclées
Allen	
Beth	
Meule	
Andréa	
Vallée	

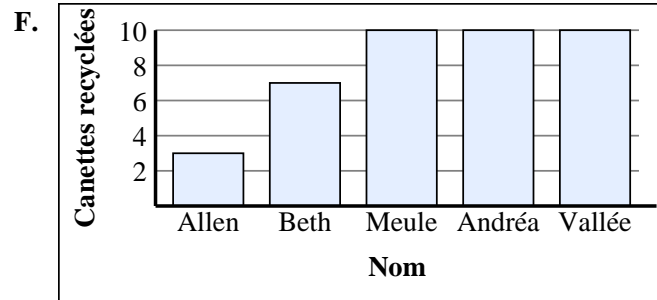
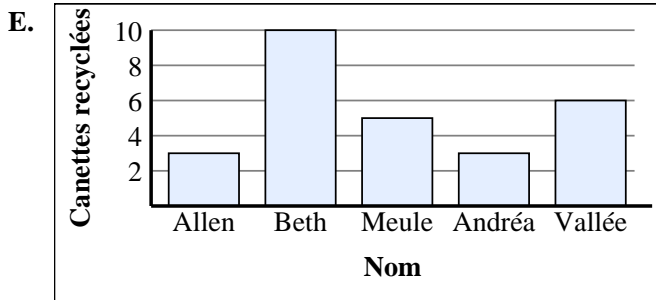
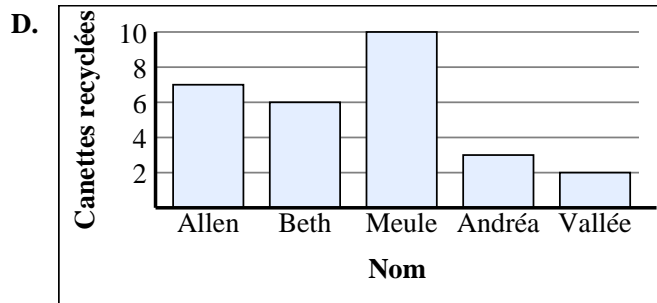
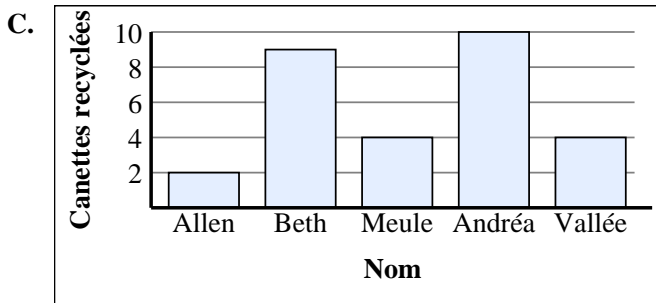
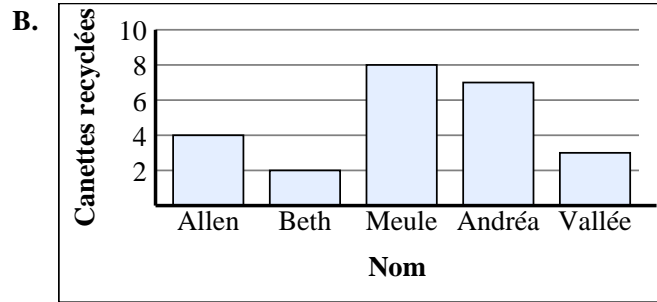
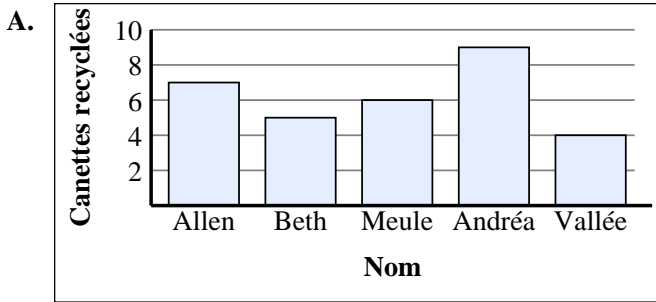
5)

Nom	Canettes recyclées
Allen	
Beth	
Meule	
Andréa	
Vallée	

6)

Nom	Canettes recyclées
Allen	
Beth	
Meule	
Andréa	
Vallée	

1. _____
2. _____
3. _____
4. _____
5. _____
6. _____





Associez chaque tableau au graphique approprié.

Réponses

1)

Nom	Canettes recyclées
Allen	
Beth	
Meule	
Andréa	
Vallée	

2)

Nom	Canettes recyclées
Allen	
Beth	
Meule	
Andréa	
Vallée	

3)

Nom	Canettes recyclées
Allen	
Beth	
Meule	
Andréa	
Vallée	

4)

Nom	Canettes recyclées
Allen	
Beth	
Meule	
Andréa	
Vallée	

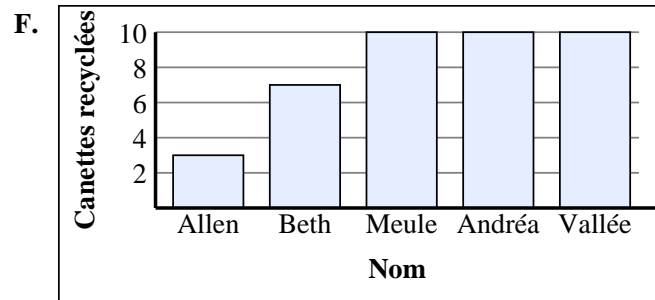
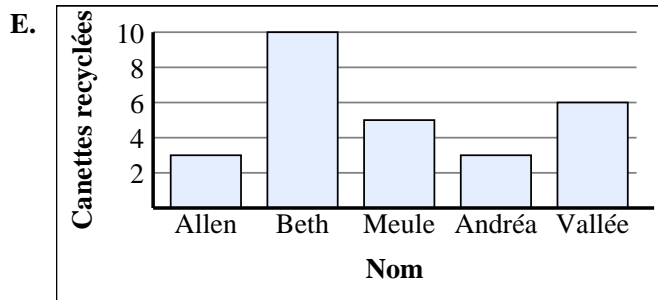
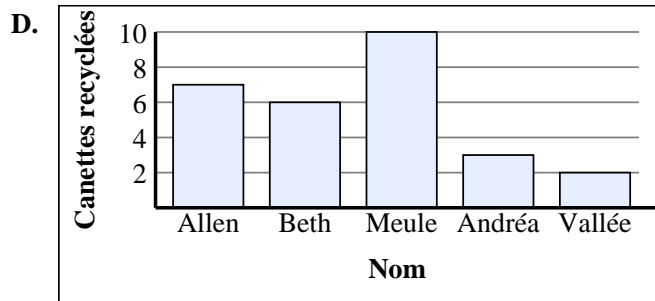
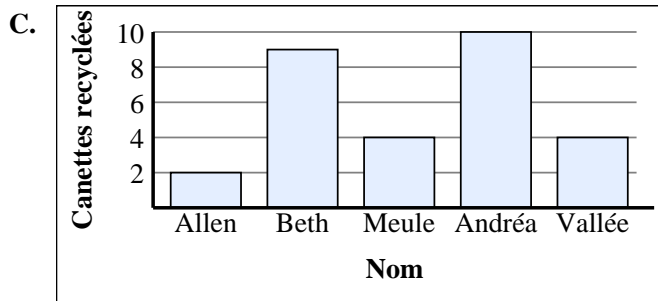
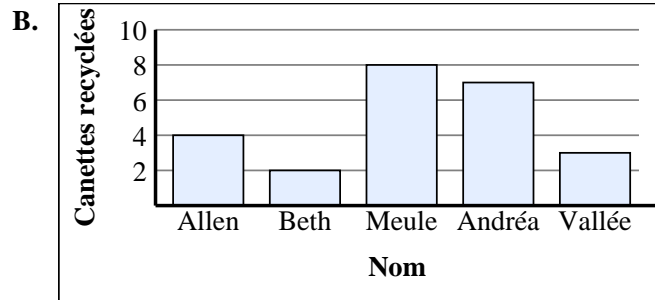
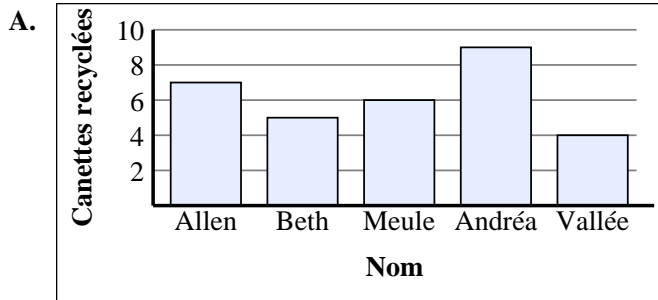
5)

Nom	Canettes recyclées
Allen	
Beth	
Meule	
Andréa	
Vallée	

6)

Nom	Canettes recyclées
Allen	
Beth	
Meule	
Andréa	
Vallée	

1. **E**
2. **D**
3. **F**
4. **B**
5. **C**
6. **A**





Associez chaque tableau au graphique approprié.

Réponses

1)

Nom	Canettes recyclées
Allen	
Beth	
Meule	
Andréa	
Vallée	

2)

Nom	Canettes recyclées
Allen	
Beth	
Meule	
Andréa	
Vallée	

3)

Nom	Canettes recyclées
Allen	
Beth	
Meule	
Andréa	
Vallée	

4)

Nom	Canettes recyclées
Allen	
Beth	
Meule	
Andréa	
Vallée	

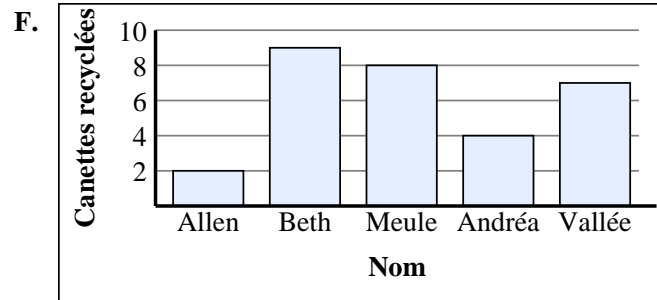
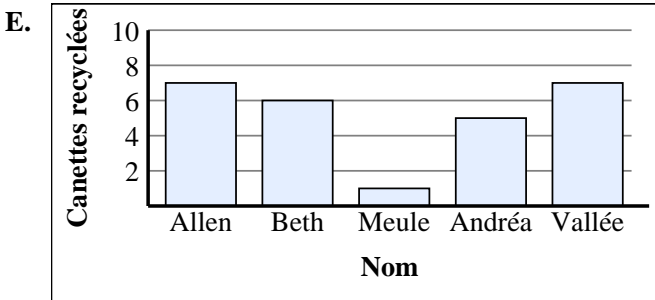
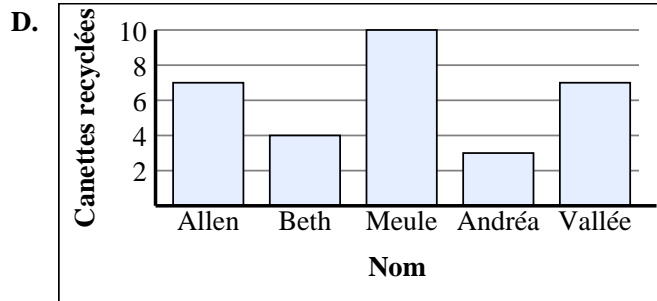
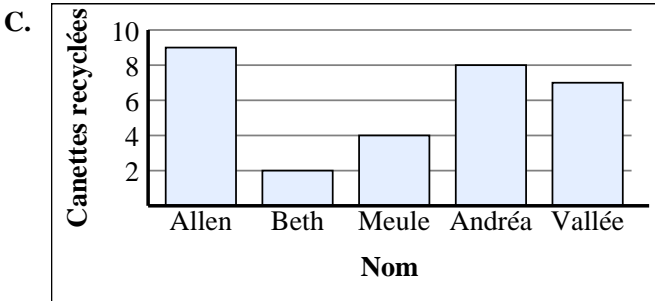
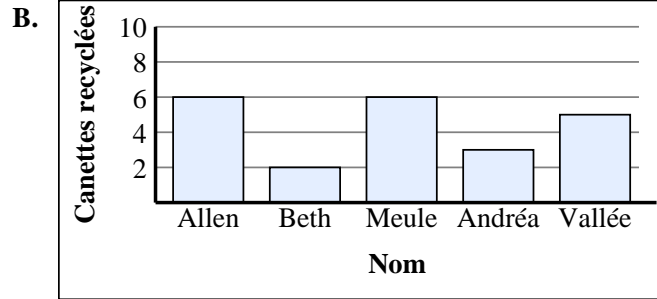
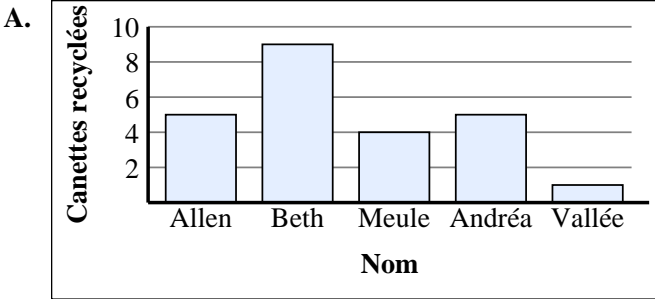
5)

Nom	Canettes recyclées
Allen	
Beth	
Meule	
Andréa	
Vallée	

6)

Nom	Canettes recyclées
Allen	
Beth	
Meule	
Andréa	
Vallée	

1. _____
2. _____
3. _____
4. _____
5. _____
6. _____





Associez chaque tableau au graphique approprié.

Réponses

1)

Nom	Canettes recyclées
Allen	
Beth	
Meule	
Andréa	
Vallée	

2)

Nom	Canettes recyclées
Allen	
Beth	
Meule	
Andréa	
Vallée	

3)

Nom	Canettes recyclées
Allen	
Beth	
Meule	
Andréa	
Vallée	

4)

Nom	Canettes recyclées
Allen	
Beth	
Meule	
Andréa	
Vallée	

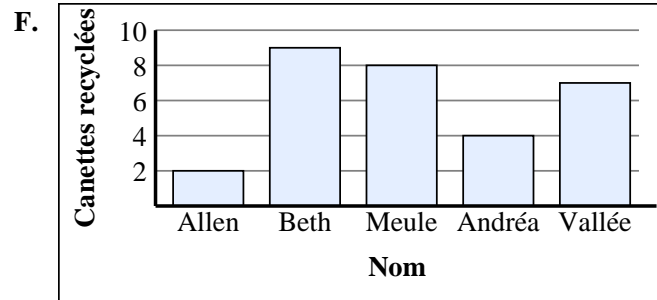
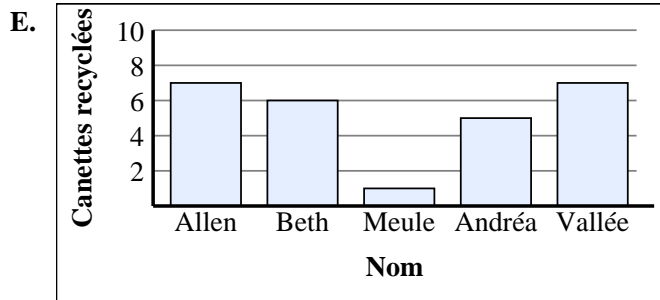
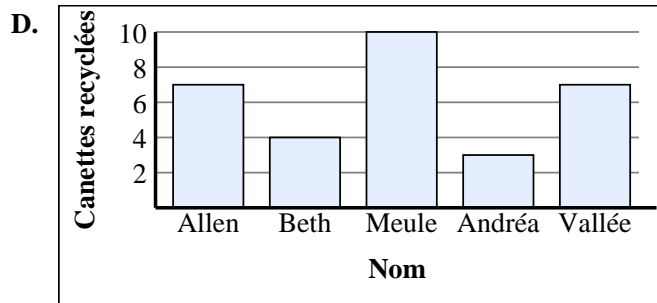
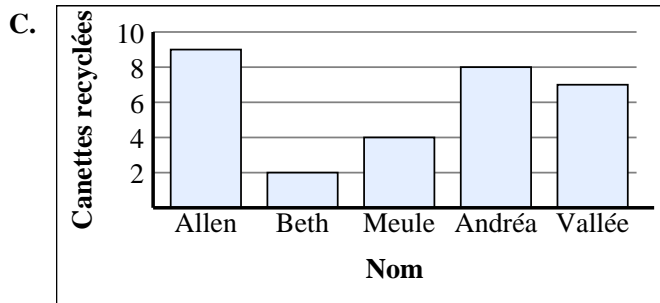
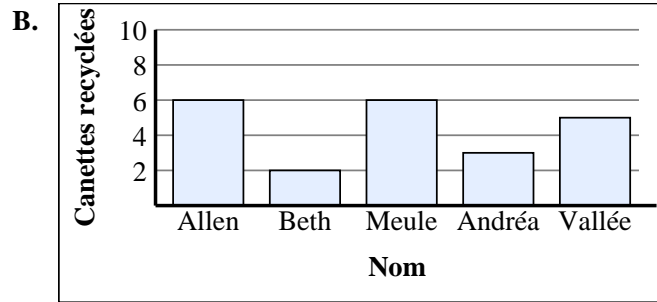
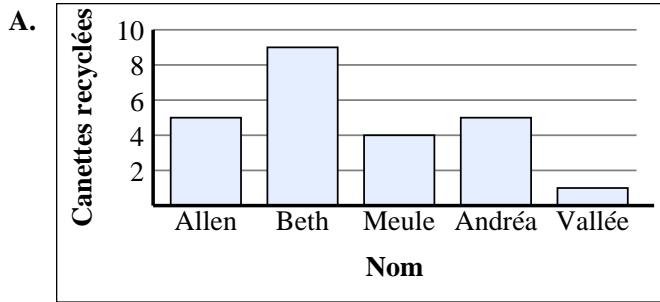
5)

Nom	Canettes recyclées
Allen	
Beth	
Meule	
Andréa	
Vallée	

6)

Nom	Canettes recyclées
Allen	
Beth	
Meule	
Andréa	
Vallée	

1. **D**
2. **A**
3. **F**
4. **C**
5. **E**
6. **B**





Associez chaque tableau au graphique approprié.

Réponses

1)

Nom	Canettes recyclées
Allen	
Beth	
Meule	
Andréa	
Vallée	

2)

Nom	Canettes recyclées
Allen	
Beth	
Meule	
Andréa	
Vallée	

3)

Nom	Canettes recyclées
Allen	
Beth	
Meule	
Andréa	
Vallée	

4)

Nom	Canettes recyclées
Allen	
Beth	
Meule	
Andréa	
Vallée	

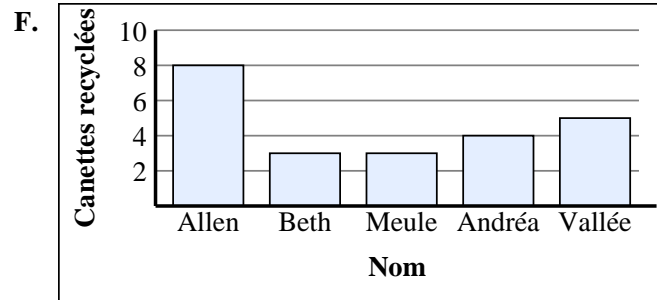
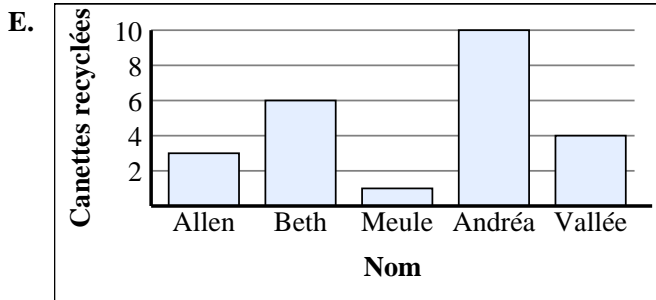
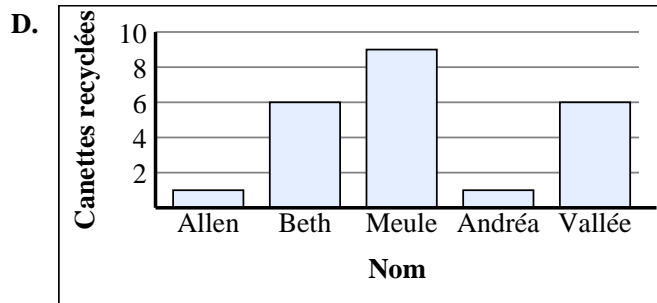
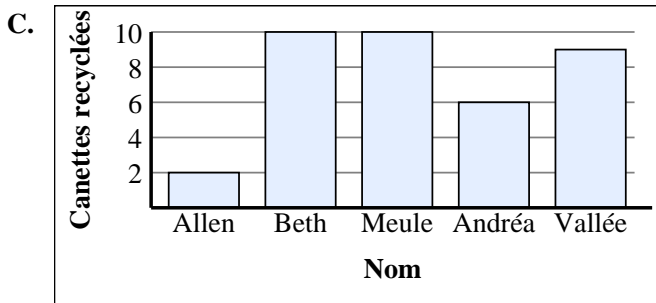
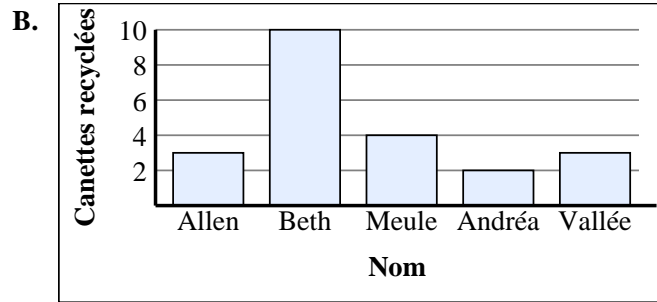
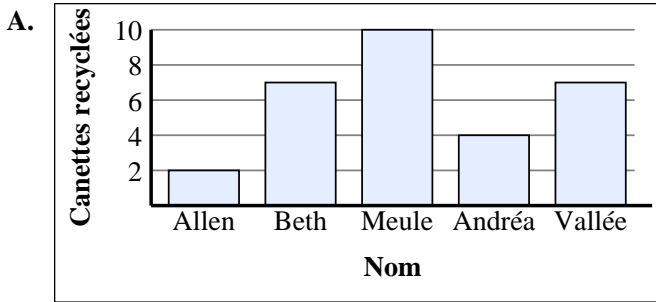
5)

Nom	Canettes recyclées
Allen	
Beth	
Meule	
Andréa	
Vallée	

6)

Nom	Canettes recyclées
Allen	
Beth	
Meule	
Andréa	
Vallée	

1. _____
2. _____
3. _____
4. _____
5. _____
6. _____





Associez chaque tableau au graphique approprié.

Réponses

1)

Nom	Canettes recyclées
Allen	
Beth	
Meule	
Andréa	
Vallée	

2)

Nom	Canettes recyclées
Allen	
Beth	
Meule	
Andréa	
Vallée	

3)

Nom	Canettes recyclées
Allen	
Beth	
Meule	
Andréa	
Vallée	

4)

Nom	Canettes recyclées
Allen	
Beth	
Meule	
Andréa	
Vallée	

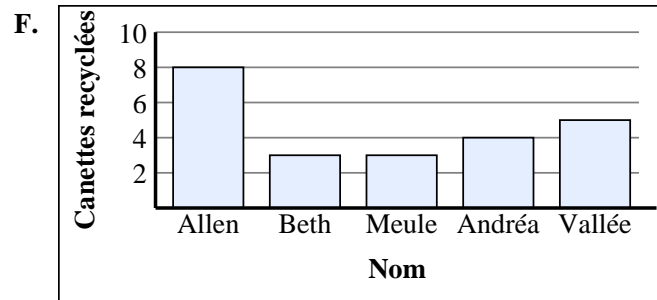
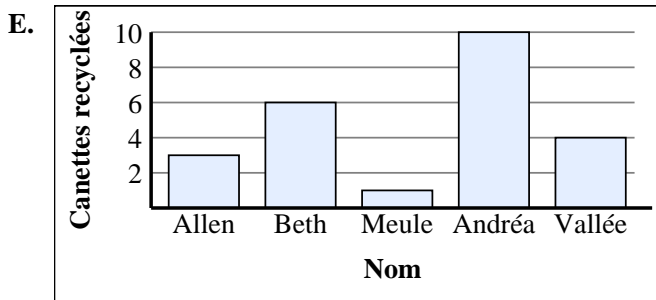
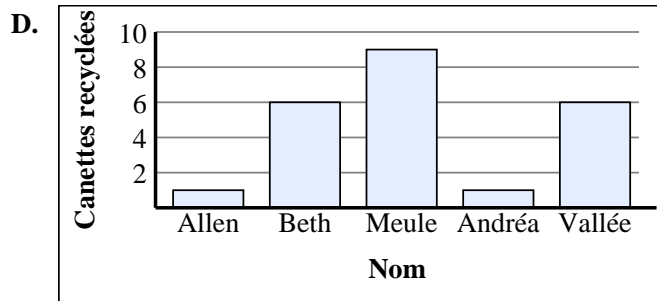
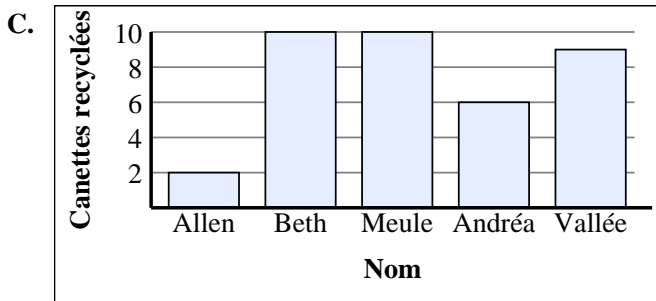
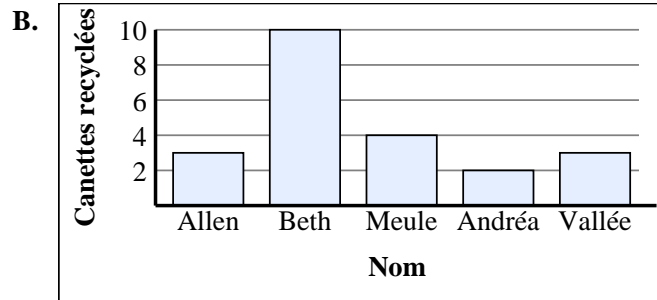
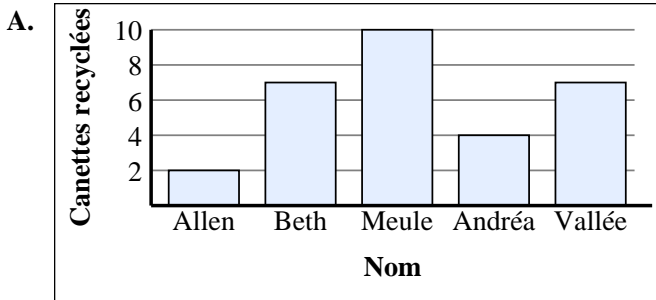
5)

Nom	Canettes recyclées
Allen	
Beth	
Meule	
Andréa	
Vallée	

6)

Nom	Canettes recyclées
Allen	
Beth	
Meule	
Andréa	
Vallée	

1. **B**
2. **F**
3. **C**
4. **A**
5. **E**
6. **D**





Associez chaque tableau au graphique approprié.

Réponses

1)

Nom	Canettes recyclées
Allen	
Beth	
Meule	
Andréa	
Vallée	

2)

Nom	Canettes recyclées
Allen	
Beth	
Meule	
Andréa	
Vallée	

3)

Nom	Canettes recyclées
Allen	
Beth	
Meule	
Andréa	
Vallée	

4)

Nom	Canettes recyclées
Allen	
Beth	
Meule	
Andréa	
Vallée	

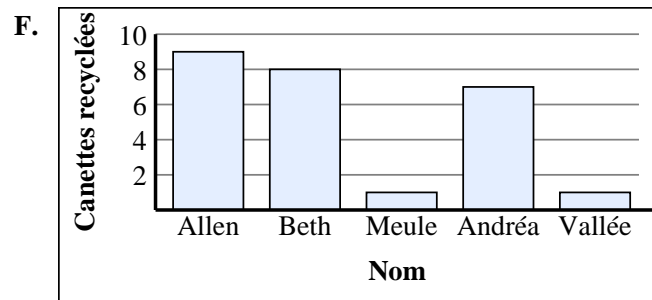
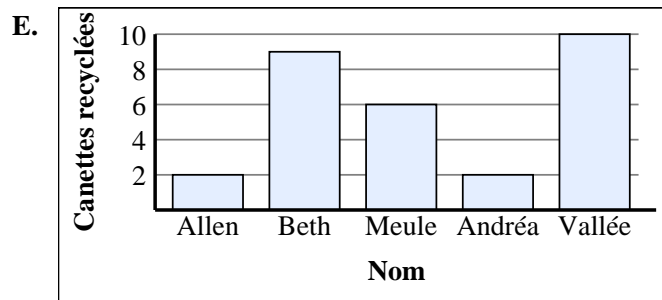
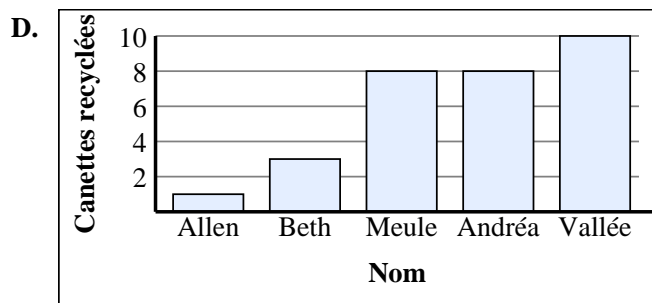
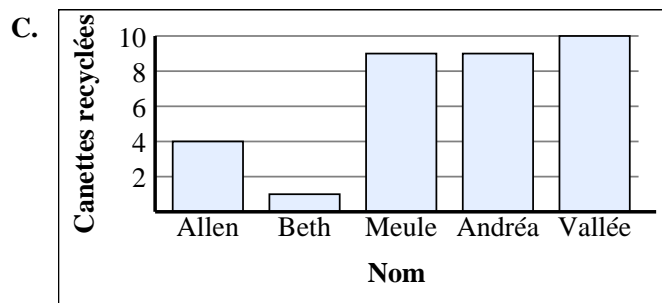
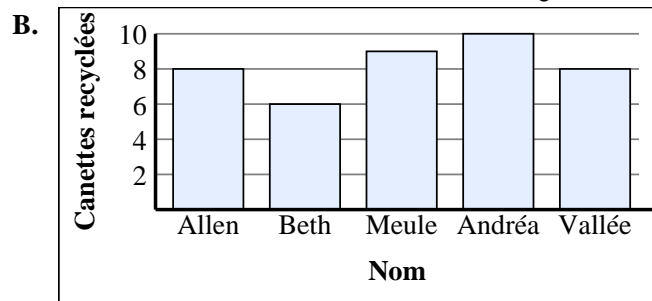
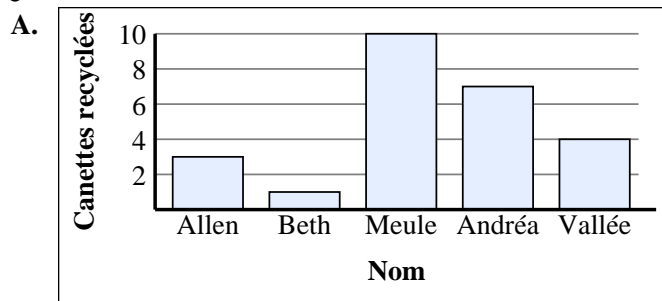
5)

Nom	Canettes recyclées
Allen	
Beth	
Meule	
Andréa	
Vallée	

6)

Nom	Canettes recyclées
Allen	
Beth	
Meule	
Andréa	
Vallée	

1. _____
2. _____
3. _____
4. _____
5. _____
6. _____





Associez chaque tableau au graphique approprié.

Réponses

1)

Nom	Canettes recyclées
Allen	
Beth	
Meule	
Andréa	
Vallée	

2)

Nom	Canettes recyclées
Allen	
Beth	
Meule	
Andréa	
Vallée	

3)

Nom	Canettes recyclées
Allen	
Beth	
Meule	
Andréa	
Vallée	

4)

Nom	Canettes recyclées
Allen	
Beth	
Meule	
Andréa	
Vallée	

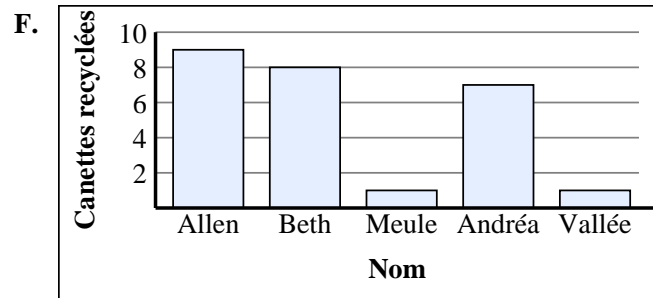
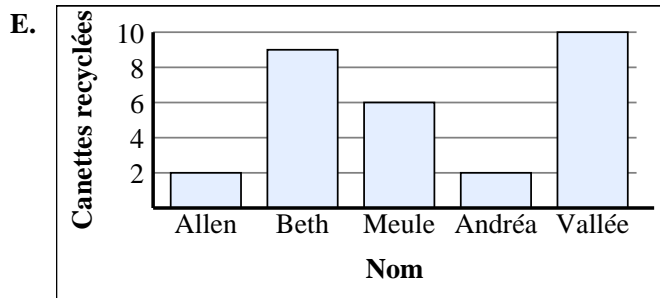
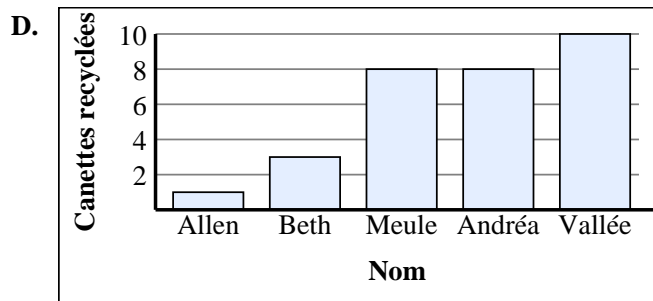
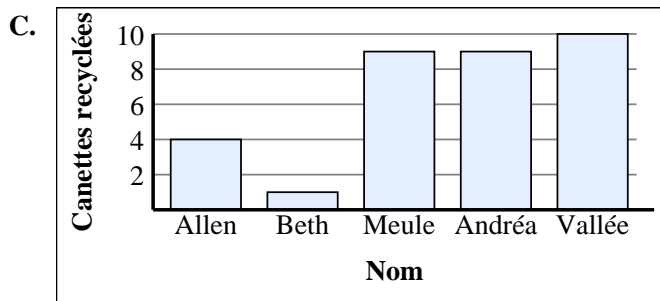
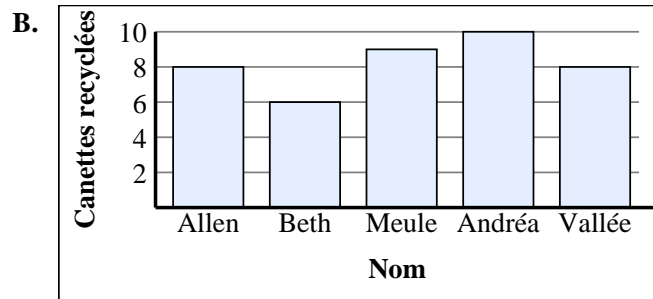
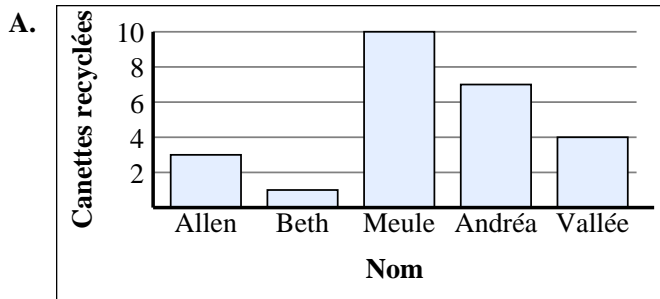
5)

Nom	Canettes recyclées
Allen	
Beth	
Meule	
Andréa	
Vallée	

6)

Nom	Canettes recyclées
Allen	
Beth	
Meule	
Andréa	
Vallée	

1. **F**
2. **C**
3. **D**
4. **B**
5. **A**
6. **E**





Associez chaque tableau au graphique approprié.

Réponses

1)

Nom	Canettes recyclées
Allen	
Beth	
Meule	
Andréa	
Vallée	

2)

Nom	Canettes recyclées
Allen	
Beth	
Meule	
Andréa	
Vallée	

3)

Nom	Canettes recyclées
Allen	
Beth	
Meule	
Andréa	
Vallée	

4)

Nom	Canettes recyclées
Allen	
Beth	
Meule	
Andréa	
Vallée	

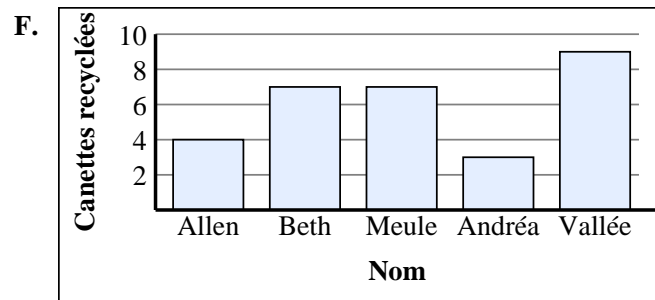
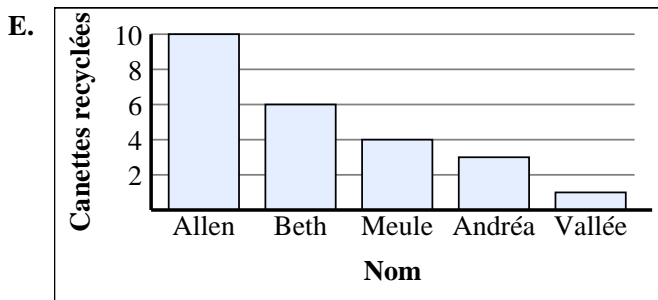
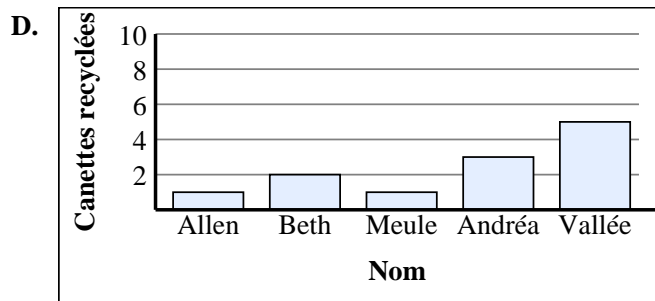
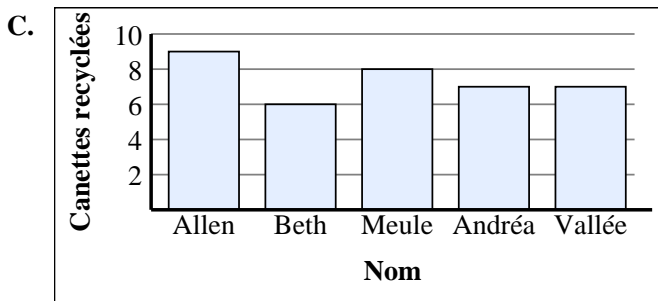
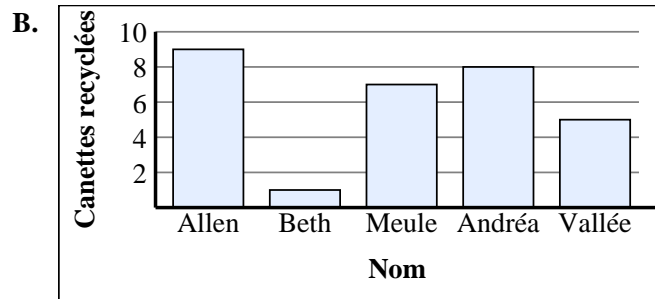
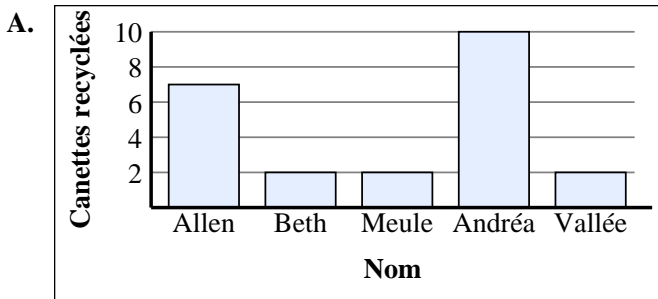
5)

Nom	Canettes recyclées
Allen	
Beth	
Meule	
Andréa	
Vallée	

6)

Nom	Canettes recyclées
Allen	
Beth	
Meule	
Andréa	
Vallée	

1. _____
2. _____
3. _____
4. _____
5. _____
6. _____





Associez chaque tableau au graphique approprié.

Réponses

1)

Nom	Canettes recyclées
Allen	
Beth	
Meule	
Andréa	
Vallée	

2)

Nom	Canettes recyclées
Allen	
Beth	
Meule	
Andréa	
Vallée	

3)

Nom	Canettes recyclées
Allen	
Beth	
Meule	
Andréa	
Vallée	

4)

Nom	Canettes recyclées
Allen	
Beth	
Meule	
Andréa	
Vallée	

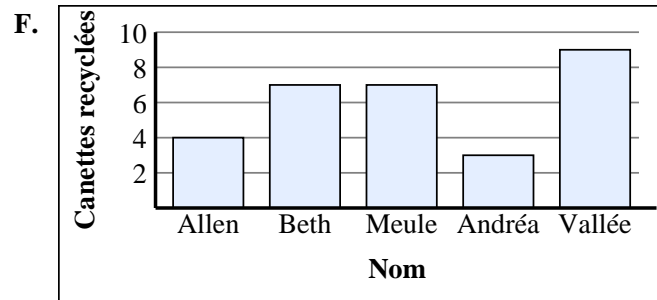
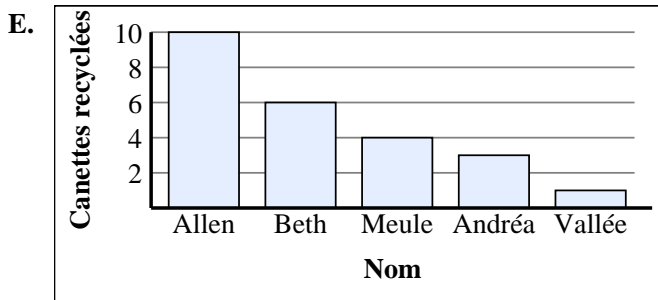
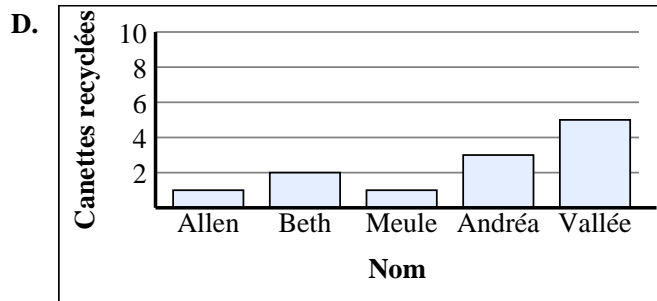
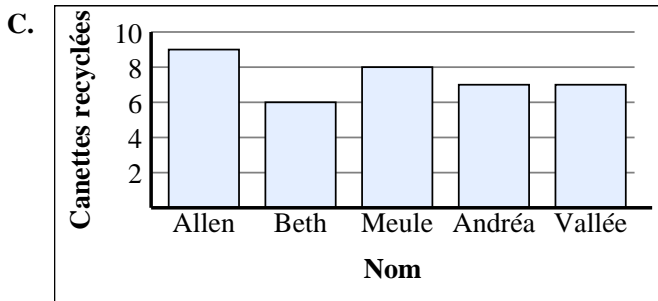
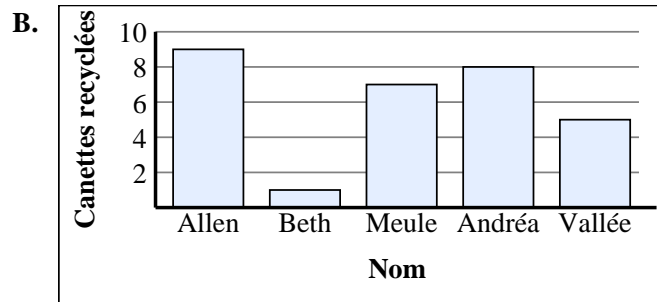
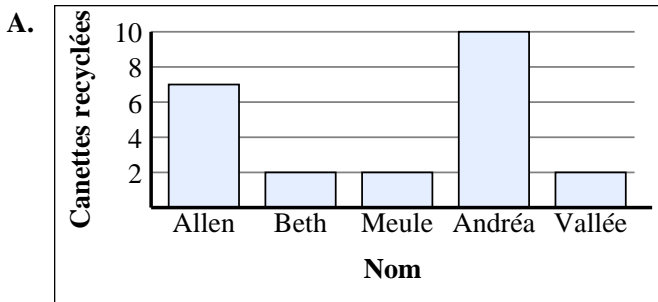
5)

Nom	Canettes recyclées
Allen	
Beth	
Meule	
Andréa	
Vallée	

6)

Nom	Canettes recyclées
Allen	
Beth	
Meule	
Andréa	
Vallée	

1. **B**
2. **A**
3. **F**
4. **C**
5. **D**
6. **E**





Associez chaque tableau au graphique approprié.

Réponses

1)

Nom	Canettes recyclées
Allen	
Beth	
Meule	
Andréa	
Vallée	

2)

Nom	Canettes recyclées
Allen	
Beth	
Meule	
Andréa	
Vallée	

3)

Nom	Canettes recyclées
Allen	
Beth	
Meule	
Andréa	
Vallée	

4)

Nom	Canettes recyclées
Allen	
Beth	
Meule	
Andréa	
Vallée	

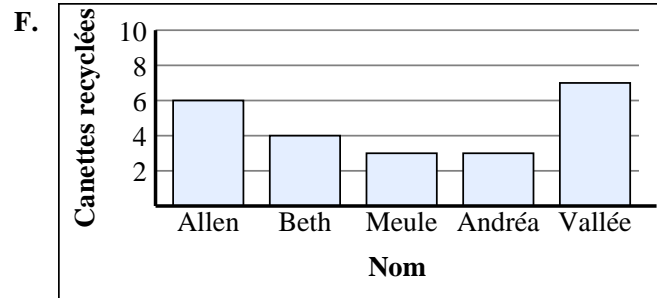
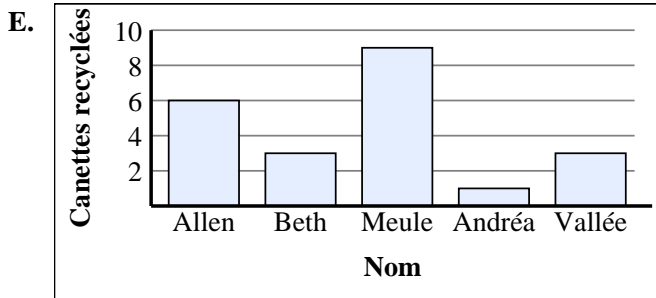
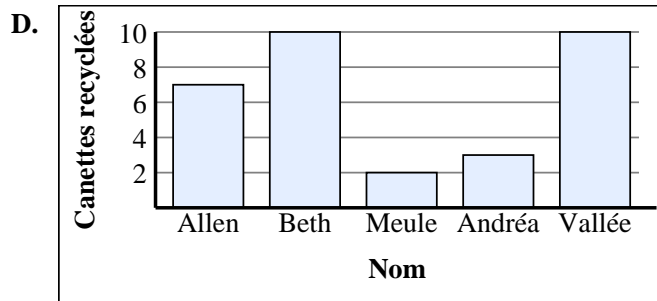

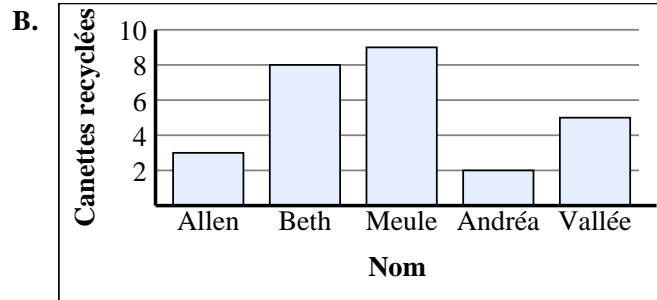
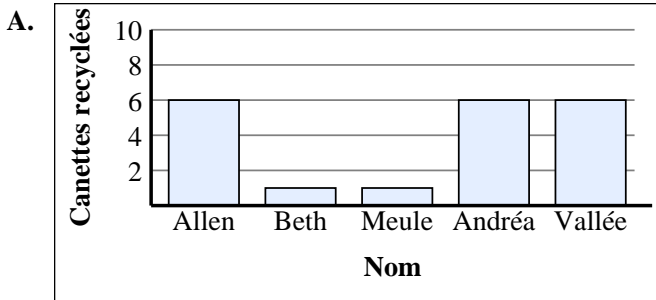
5)

Nom	Canettes recyclées
Allen	
Beth	
Meule	
Andréa	
Vallée	

6)

Nom	Canettes recyclées
Allen	
Beth	
Meule	
Andréa	
Vallée	

1. _____
2. _____
3. _____
4. _____
5. _____
6. _____





Associez chaque tableau au graphique approprié.

Réponses

1)

Nom	Canettes recyclées
Allen	
Beth	
Meule	
Andréa	
Vallée	

2)

Nom	Canettes recyclées
Allen	
Beth	
Meule	
Andréa	
Vallée	

3)

Nom	Canettes recyclées
Allen	
Beth	
Meule	
Andréa	
Vallée	

4)

Nom	Canettes recyclées
Allen	
Beth	
Meule	
Andréa	
Vallée	

5)

Nom	Canettes recyclées
Allen	
Beth	
Meule	
Andréa	
Vallée	

6)

Nom	Canettes recyclées
Allen	
Beth	
Meule	
Andréa	
Vallée	

1. **E**
2. **F**
3. **B**
4. **A**
5. **C**
6. **D**

