



Résoudre chaque problème.

Réponses

1) Start: 7:05

Elapsed: _____

End: 9:25



1. _____

2) Start: 5:25

Elapsed: _____

End: 7:45



2. _____

3) Start: 4:15

Elapsed: _____

End: 5:50



3. _____

4) Start: 12:05

Elapsed: _____

End: 2:45

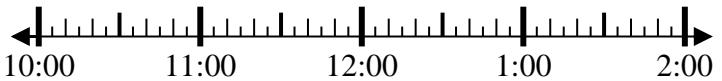


4. _____

5) Start: 10:05

Elapsed: _____

End: 11:50



5. _____

6) Start: 11:45

Elapsed: _____

End: 2:00



6. _____

7) Start: 5:25

Elapsed: _____

End: 7:05



7. _____

8) Start: 1:25

Elapsed: _____

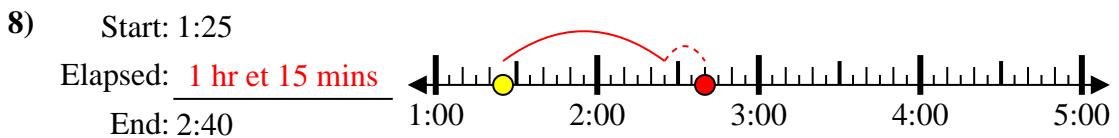
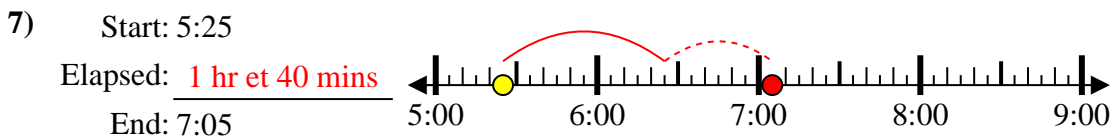
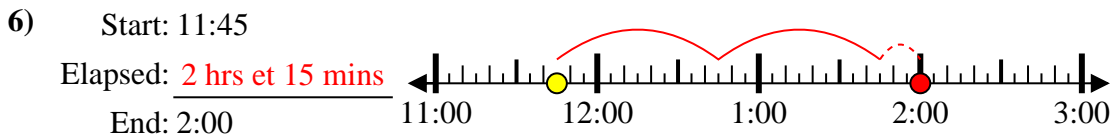
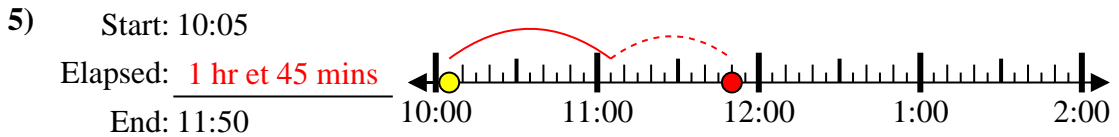
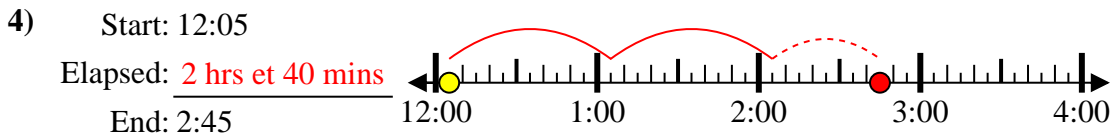
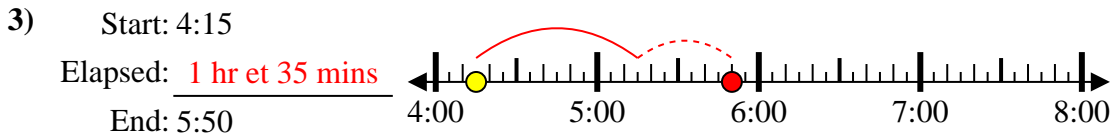
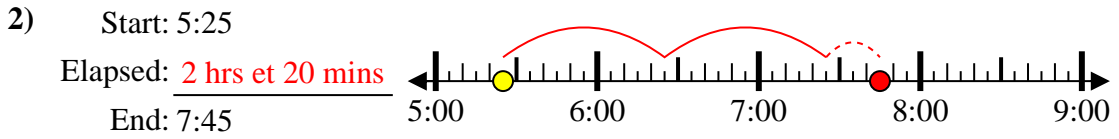
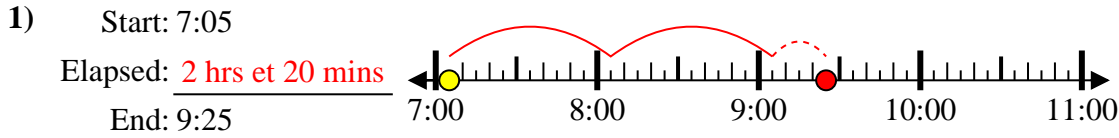
End: 2:40



8. _____



Résoudre chaque problème.



Réponses

1. 2 hrs et 20 mins

2. 2 hrs et 20 mins

3. 1 hr et 35 mins

4. 2 hrs et 40 mins

5. 1 hr et 45 mins

6. 2 hrs et 15 mins

7. 1 hr et 40 mins

8. 1 hr et 15 mins