



Résoudre chaque problème.

Réponses

1) Start: _____

Elapsed: 1 hr et 25 mins

End: 1:35

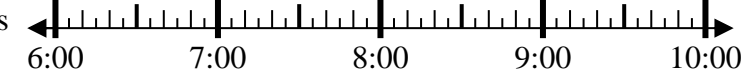


1. _____

2) Start: _____

Elapsed: 2 hrs et 10 mins

End: 8:50

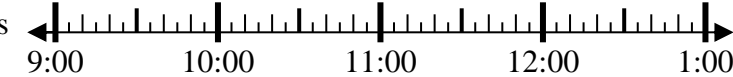


2. _____

3) Start: _____

Elapsed: 2 hrs et 50 mins

End: 11:55

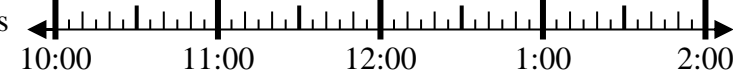


3. _____

4) Start: _____

Elapsed: 2 hrs et 40 mins

End: 1:25



4. _____

5) Start: _____

Elapsed: 1 hr et 30 mins

End: 7:05

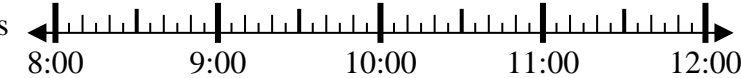


5. _____

6) Start: _____

Elapsed: 2 hrs et 25 mins

End: 10:40

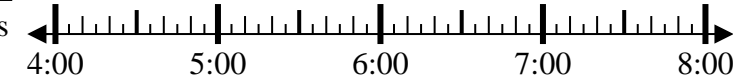


6. _____

7) Start: _____

Elapsed: 2 hrs et 55 mins

End: 7:05

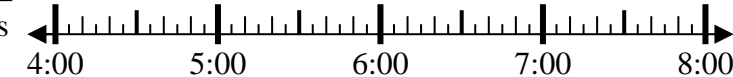


7. _____

8) Start: _____

Elapsed: 2 hrs et 20 mins

End: 6:20



8. _____

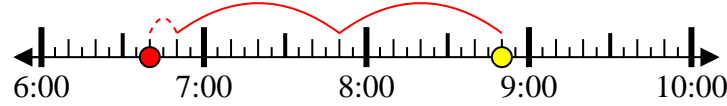


Résoudre chaque problème.

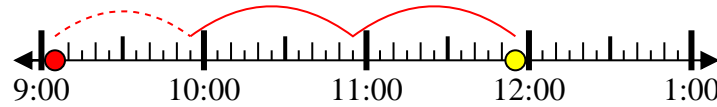
1) Start: 12:10
Elapsed: 1 hr et 25 mins
End: 1:35



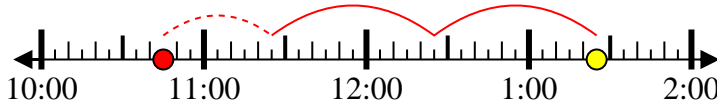
2) Start: 6:40
Elapsed: 2 hrs et 10 mins
End: 8:50



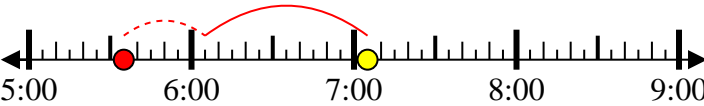
3) Start: 9:05
Elapsed: 2 hrs et 50 mins
End: 11:55



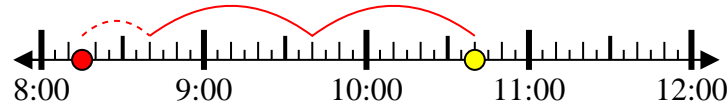
4) Start: 10:45
Elapsed: 2 hrs et 40 mins
End: 1:25



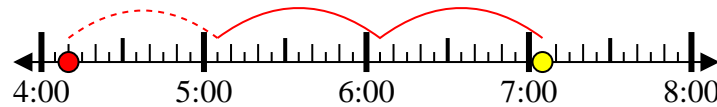
5) Start: 5:35
Elapsed: 1 hr et 30 mins
End: 7:05



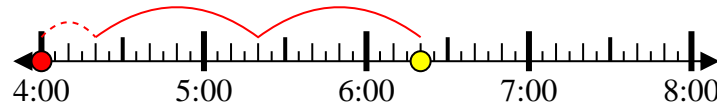
6) Start: 8:15
Elapsed: 2 hrs et 25 mins
End: 10:40



7) Start: 4:10
Elapsed: 2 hrs et 55 mins
End: 7:05



8) Start: 4:00
Elapsed: 2 hrs et 20 mins
End: 6:20



Réponses

1. 12:10

2. 6:40

3. 9:05

4. 10:45

5. 5:35

6. 8:15

7. 4:10

8. 4:00