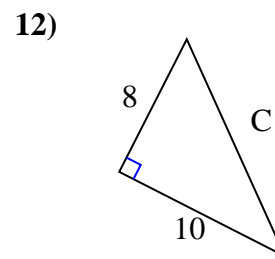
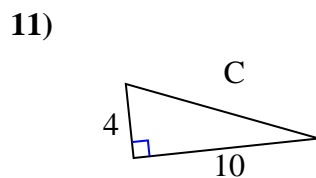
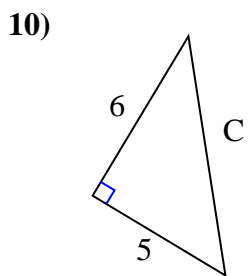
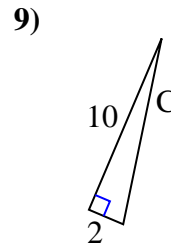
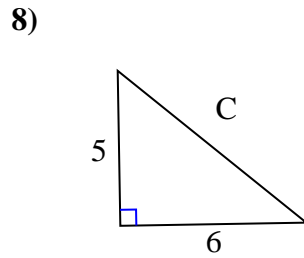
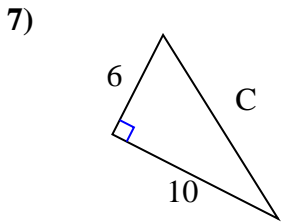
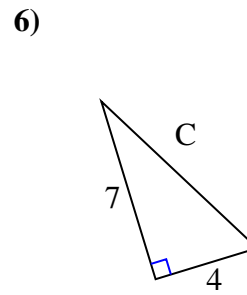
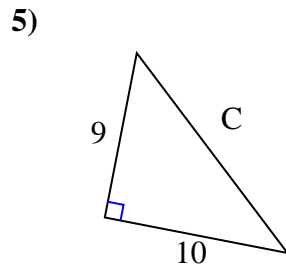
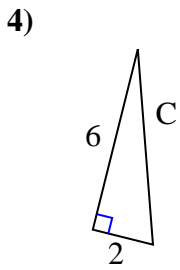
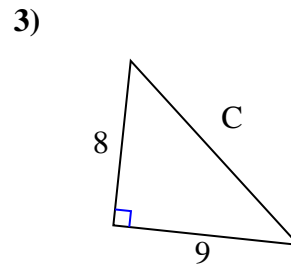
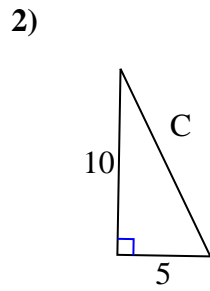
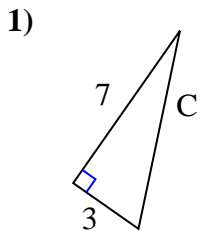




Trouvez la valeur de C, avec un arrondi au centième.

Réponses

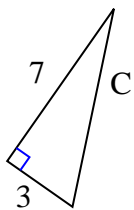


1. _____
2. _____
3. _____
4. _____
5. _____
6. _____
7. _____
8. _____
9. _____
10. _____
11. _____
12. _____



Trouvez la valeur de C, avec un arrondi au centième.

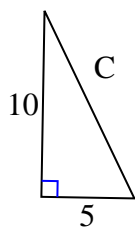
1)



$$49 + 9 = 58$$

$$\sqrt{58} = 7,62$$

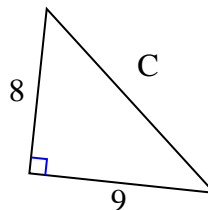
2)



$$100 + 25 = 125$$

$$\sqrt{125} = 11,18$$

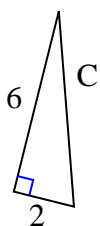
3)



$$64 + 81 = 145$$

$$\sqrt{145} = 12,04$$

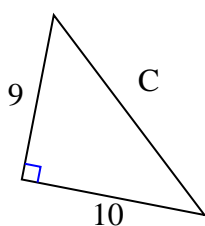
4)



$$36 + 4 = 40$$

$$\sqrt{40} = 6,32$$

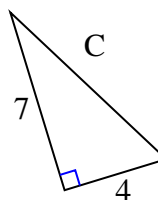
5)



$$81 + 100 = 181$$

$$\sqrt{181} = 13,45$$

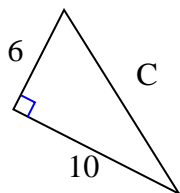
6)



$$49 + 16 = 65$$

$$\sqrt{65} = 8,06$$

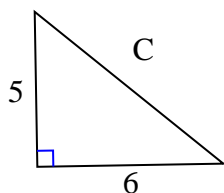
7)



$$36 + 100 = 136$$

$$\sqrt{136} = 11,66$$

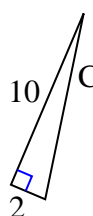
8)



$$25 + 36 = 61$$

$$\sqrt{61} = 7,81$$

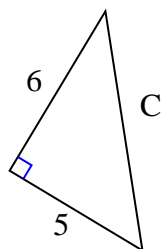
9)



$$100 + 4 = 104$$

$$\sqrt{104} = 10,2$$

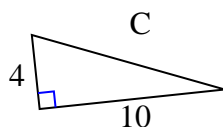
10)



$$36 + 25 = 61$$

$$\sqrt{61} = 7,81$$

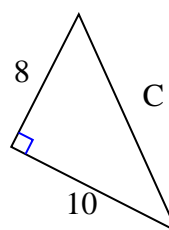
11)



$$16 + 100 = 116$$

$$\sqrt{116} = 10,77$$

12)



$$64 + 100 = 164$$

$$\sqrt{164} = 12,81$$

Réponses1. 7,622. 11,183. 12,044. 6,325. 13,456. 8,067. 11,668. 7,819. 10,210. 7,8111. 10,7712. 12,81