

Utilisez  $<$ ,  $>$ , ou  $=$  pour comparer les nombres.**Réponses**

1) 28 \_\_\_ 16

2) 37 \_\_\_ 62

3) 11 \_\_\_ 61

4) 55 \_\_\_ 37

5) 85 \_\_\_ 50

6) 91 \_\_\_ 84

7) 39 \_\_\_ 93

8) 17 \_\_\_ 71

9) 78 \_\_\_ 87

10) 37 \_\_\_ 73

11) 68 \_\_\_ 86

12) 16 \_\_\_ 61

13) 29 \_\_\_ 92

14) 48 \_\_\_ 84

15) 49 \_\_\_ 48

16) 43 \_\_\_ 45

17) 67 \_\_\_ 69

18) 20 \_\_\_ 17

19) 21 \_\_\_ 19

20) 13 \_\_\_ 11

1. \_\_\_\_\_

2. \_\_\_\_\_

3. \_\_\_\_\_

4. \_\_\_\_\_

5. \_\_\_\_\_

6. \_\_\_\_\_

7. \_\_\_\_\_

8. \_\_\_\_\_

9. \_\_\_\_\_

10. \_\_\_\_\_

11. \_\_\_\_\_

12. \_\_\_\_\_

13. \_\_\_\_\_

14. \_\_\_\_\_

15. \_\_\_\_\_

16. \_\_\_\_\_

17. \_\_\_\_\_

18. \_\_\_\_\_

19. \_\_\_\_\_

20. \_\_\_\_\_

Utilisez  $<$ ,  $>$ , ou  $=$  pour comparer les nombres.**Réponses**

- 1) 28  $>$  16
- 2) 37  $<$  62
- 3) 11  $<$  61
- 4) 55  $>$  37
- 5) 85  $>$  50
- 6) 91  $>$  84
- 7) 39  $<$  93
- 8) 17  $<$  71
- 9) 78  $<$  87
- 10) 37  $<$  73
- 11) 68  $<$  86
- 12) 16  $<$  61
- 13) 29  $<$  92
- 14) 48  $<$  84
- 15) 49  $>$  48
- 16) 43  $<$  45
- 17) 67  $<$  69
- 18) 20  $>$  17
- 19) 21  $>$  19
- 20) 13  $>$  11


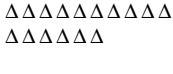
1.  $>$
2.  $<$
3.  $<$
4.  $>$
5.  $>$
6.  $>$
7.  $<$
8.  $<$
9.  $<$
10.  $<$
11.  $<$
12.  $<$
13.  $<$
14.  $<$
15.  $>$
16.  $<$
17.  $<$
18.  $>$
19.  $>$
20.  $>$





Utilisez < , > , ou = pour comparer les nombres.

**Réponses**



1)                      28     16                      2)                      37     62






- 1. \_\_\_\_\_
- 2. \_\_\_\_\_
- 3. \_\_\_\_\_
- 4. \_\_\_\_\_
- 5. \_\_\_\_\_
- 6. \_\_\_\_\_
- 7. \_\_\_\_\_
- 8. \_\_\_\_\_
- 9. \_\_\_\_\_
- 10. \_\_\_\_\_



3)                      11     61



4)                      55     37



5)                      85     50



6)                      91     84



7)                      39     93

8)                      17     71

9)                      78     87

10)                      37     73

