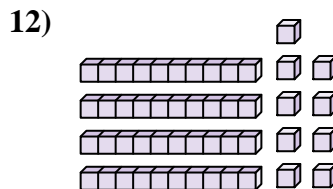
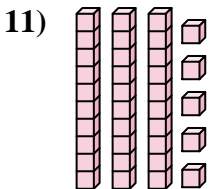
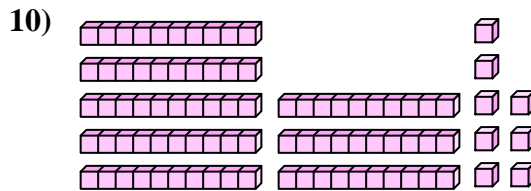
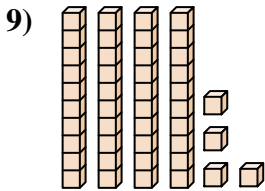
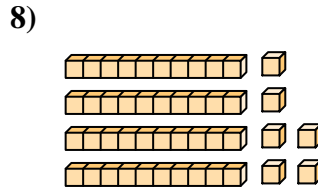
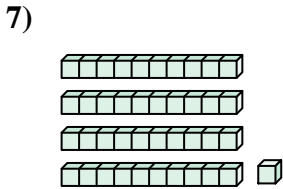
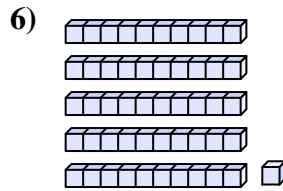
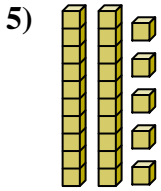
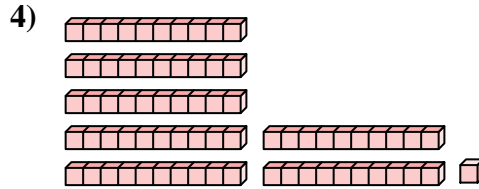
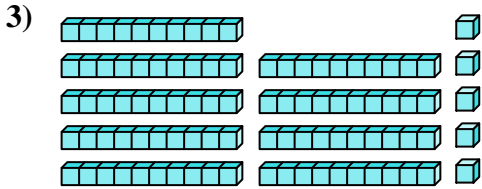
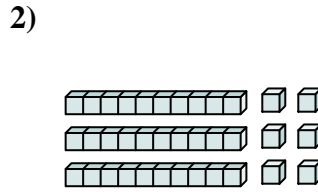
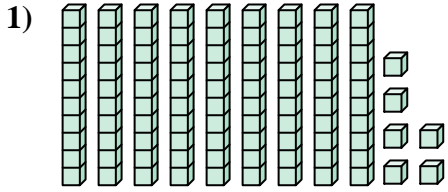




Comptez le nombre total de blocs.

Réponses



1. _____

2. _____

3. _____

4. _____

5. _____

6. _____

7. _____

8. _____

9. _____

10. _____

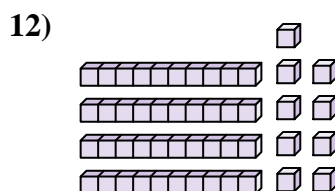
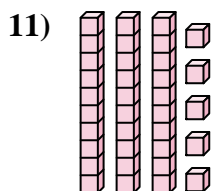
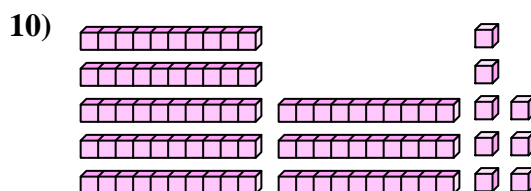
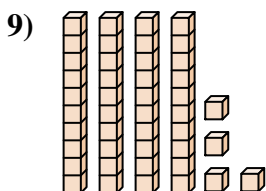
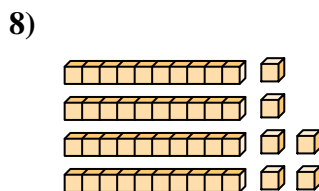
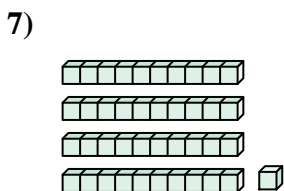
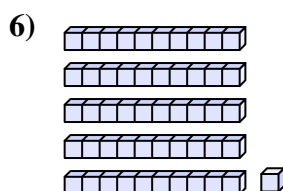
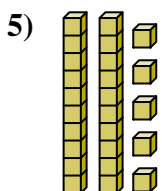
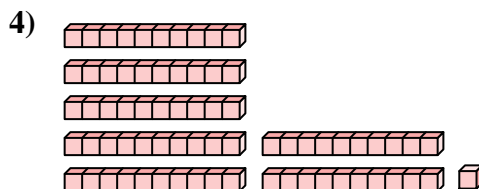
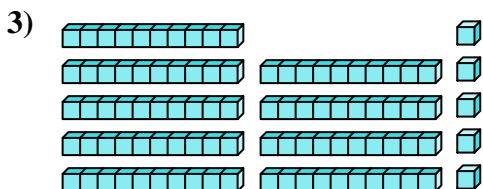
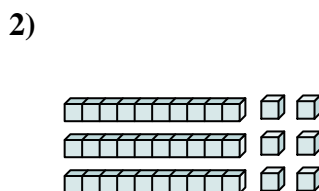
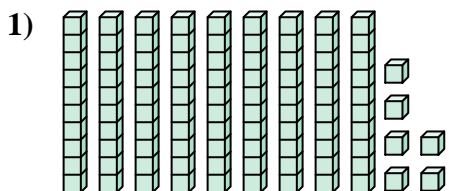
11. _____

12. _____



Comptez le nombre total de blocs.

Réponses



- 1. 96
- 2. 36
- 3. 95
- 4. 71
- 5. 25
- 6. 51
- 7. 41
- 8. 46
- 9. 44
- 10. 88
- 11. 35
- 12. 49



Comptez le nombre total de blocs.

88

25

36

44

46

41

51

96

71

95

Réponses

1. _____

2. _____

3. _____

4. _____

5. _____

6. _____

7. _____

8. _____

9. _____

10. _____

