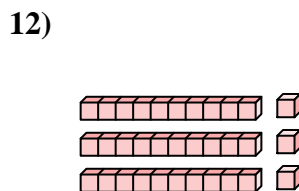
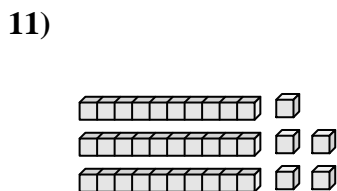
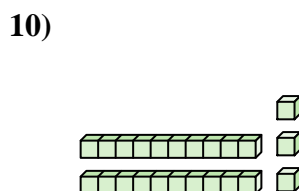
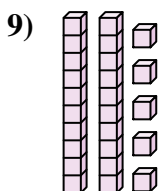
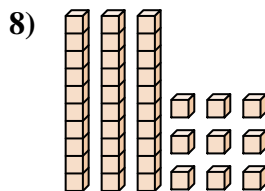
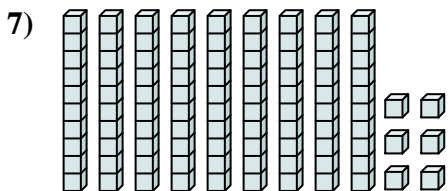
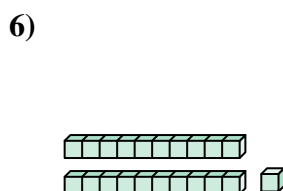
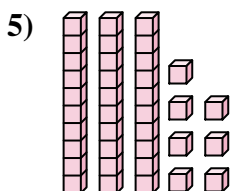
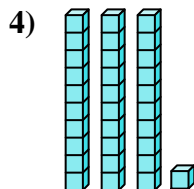
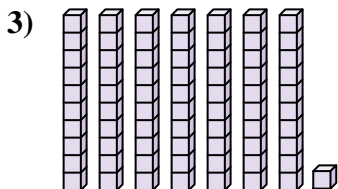
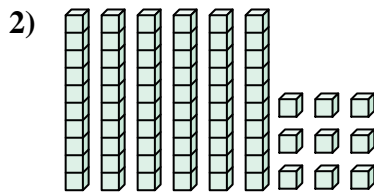
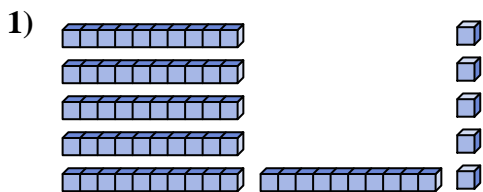




Comptez le nombre total de blocs.

**Réponses**

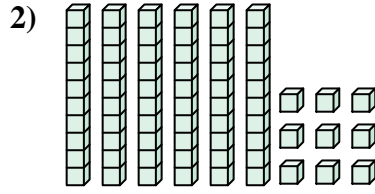
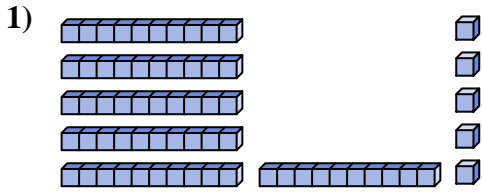


- 1. \_\_\_\_\_
- 2. \_\_\_\_\_
- 3. \_\_\_\_\_
- 4. \_\_\_\_\_
- 5. \_\_\_\_\_
- 6. \_\_\_\_\_
- 7. \_\_\_\_\_
- 8. \_\_\_\_\_
- 9. \_\_\_\_\_
- 10. \_\_\_\_\_
- 11. \_\_\_\_\_
- 12. \_\_\_\_\_

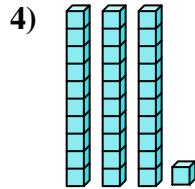
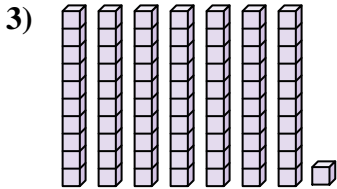


Comptez le nombre total de blocs.

**Réponses**



1. 65

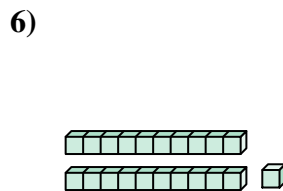
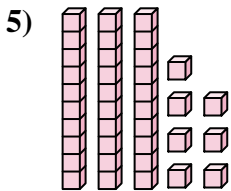


2. 69

3. 71

4. 31

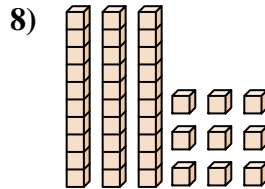
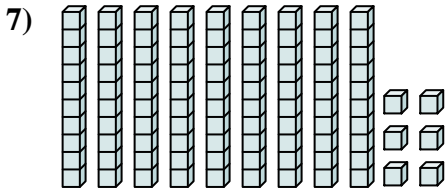
5. 37



6. 21

7. 96

8. 39

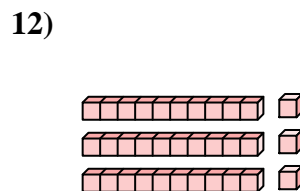
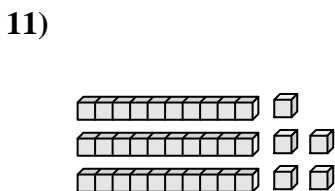
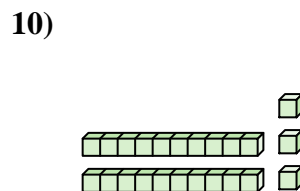
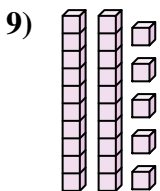


9. 25

10. 23

11. 35

12. 33





Comptez le nombre total de blocs.

**Réponses**

23

71

65

31

69

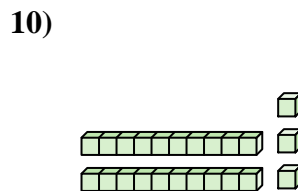
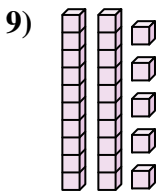
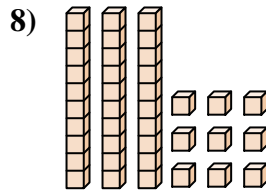
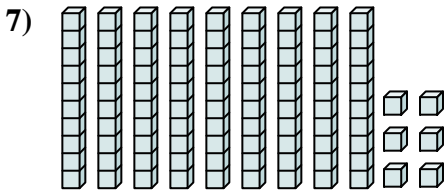
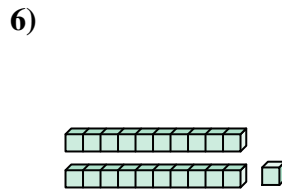
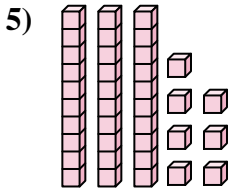
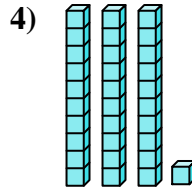
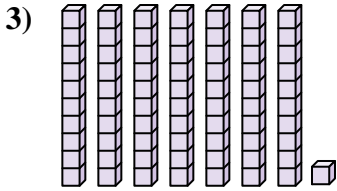
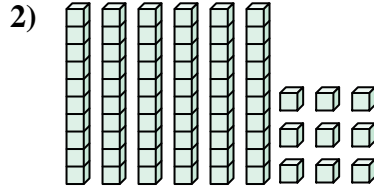
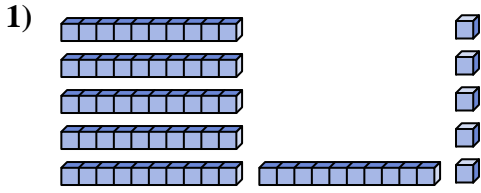
96

21

37

39

25



1. \_\_\_\_\_
2. \_\_\_\_\_
3. \_\_\_\_\_
4. \_\_\_\_\_
5. \_\_\_\_\_
6. \_\_\_\_\_
7. \_\_\_\_\_
8. \_\_\_\_\_
9. \_\_\_\_\_
10. \_\_\_\_\_