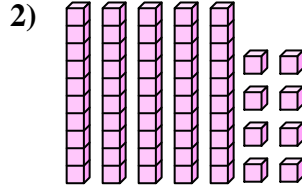
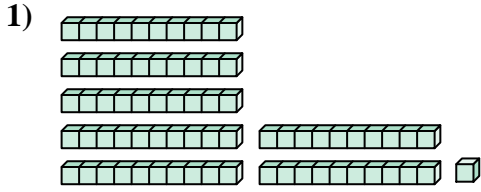




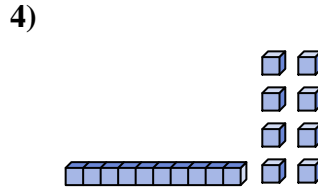
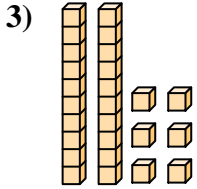
Comptez le nombre total de blocs.

Réponses



1. _____

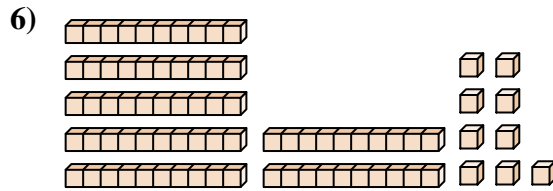
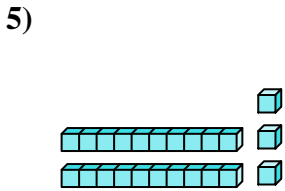
2. _____



3. _____

4. _____

5. _____

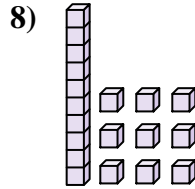
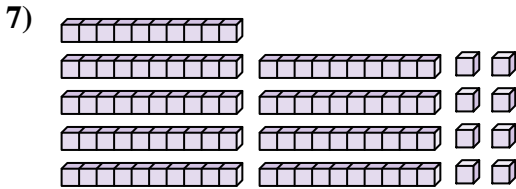


6. _____

7. _____

8. _____

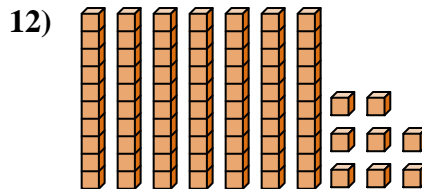
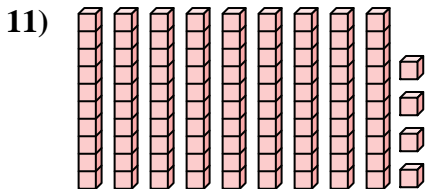
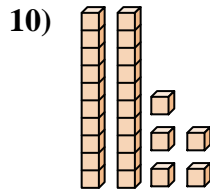
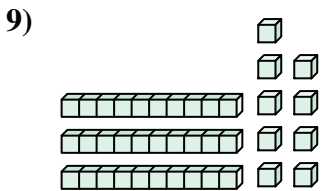
9. _____



10. _____

11. _____

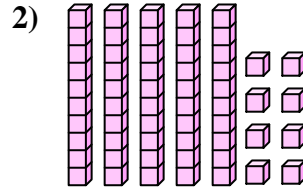
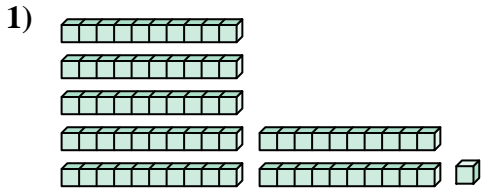
12. _____



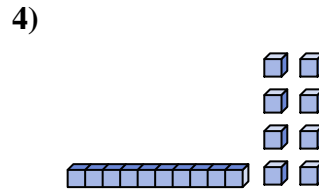
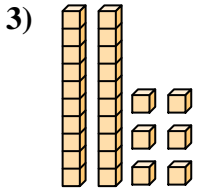


Comptez le nombre total de blocs.

Réponses

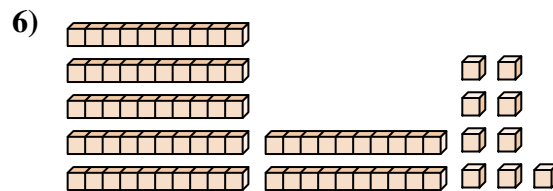
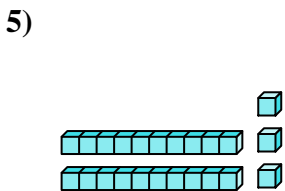


1. 71



2. 58

3. 26

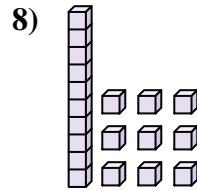
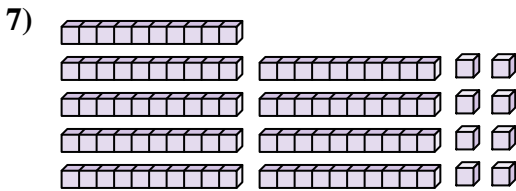


4. 18

5. 23

6. 79

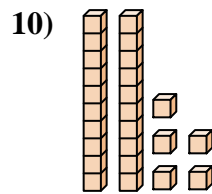
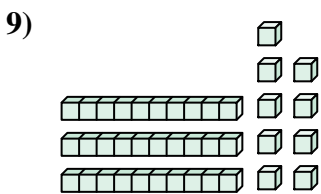
7. 98



8. 19

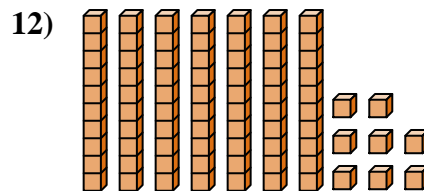
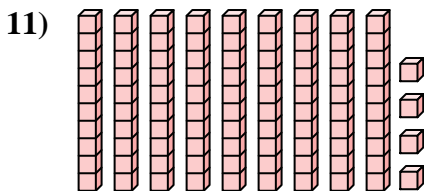
9. 39

10. 25



11. 94

12. 78





Comptez le nombre total de blocs.

19

26

79

58

23

98

39

25

71

18

Réponses

1. _____

2. _____

3. _____

4. _____

5. _____

6. _____

7. _____

8. _____

9. _____

10. _____

